

GRADE 4 MID TERM 2 OCTOBER 2020

SCIENCE AND TECHNOLOGY

Name two living things

1. _____
2. _____

Draw two non - living things

3. _____	4. _____

5. When handling plants we should wear _____ on our hands.
(socks, gloves)

6. A cow _____ when it eats grass. (feeds, dies)

Circle the odd one out.

7. hen snail dog


8. tick cat cow

9. Animals without backbones are called _____

10. All animals are living things. _____

11. All animals eat the same food. _____

12. Draw a domestic animal found in many homes and it offers security.


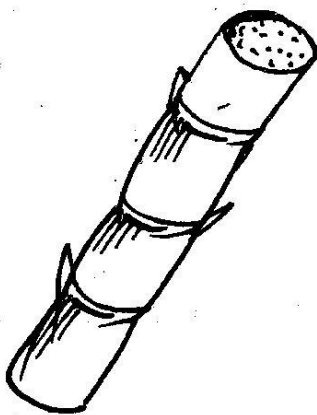


Name two parts of the digestive system.

13. _____

14. _____

Name the following foods that make our teeth strong



15. _____

16. _____

Draw the following types of teeth.

17. Molar	18. Canine

19. _____ pollution is making the air dirty.

20. Burning wastes like tyres _____ the environment.

(does not pollute, pollutes)

21. Staying in a clean environment is _____

(healthy, unhealthy)

22. Proper waste disposal can _____ water pollution.

(reduce, increase)

Name two things that can pollute water.

23. _____

24. _____

25. Polluted water can make us _____