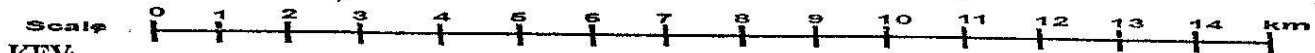
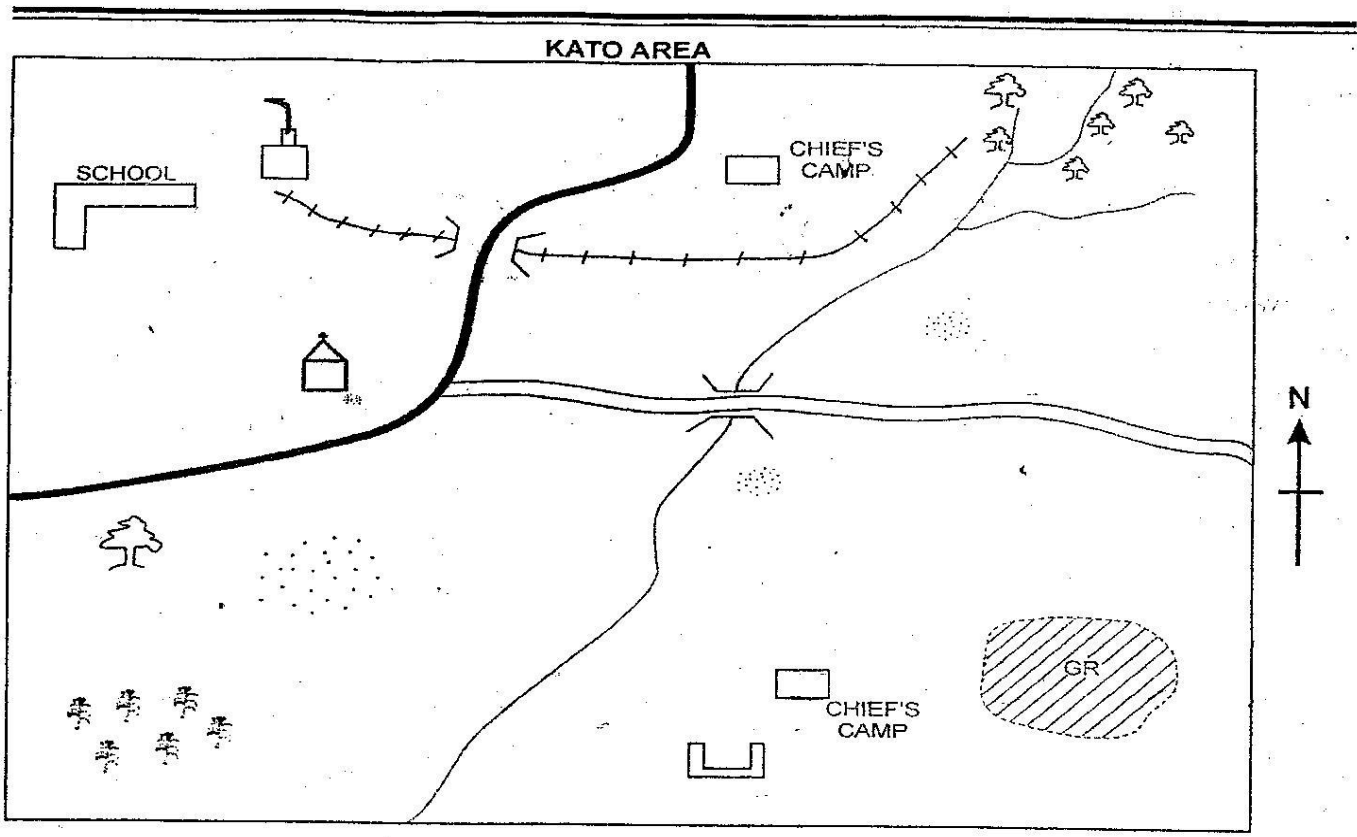


CLASS 7 MID TERM 2 2020

SOCIAL STUDIES & CRE



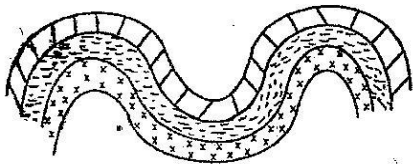
KEY:-

	Tarmac road		Murram road		Paper mill		Church
	Maize		Forest		School		GR - Game reserve
	Cattle dip		Settlement		River		Railway line

Study the map of Kato area and answer questions 1 -7

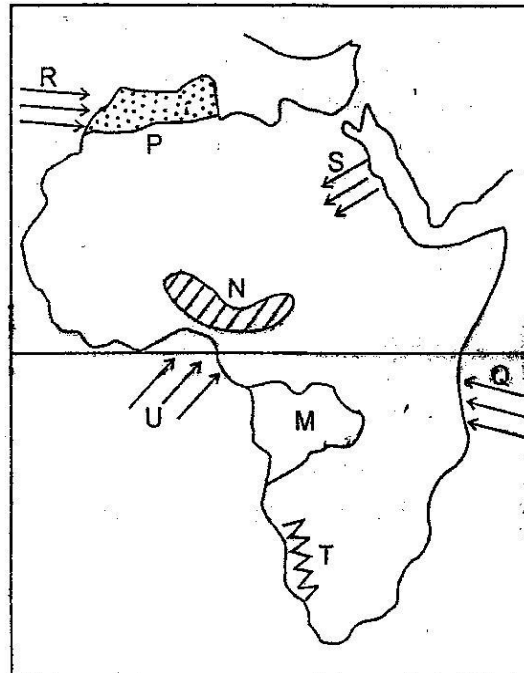
- What is the approximate length of the murram road?
A. 7 km B. 6 km
C. 5 km D. 4 km
- KATO area slopes towards ____
A. North B. North East
C. South East D. South West
- What is the direction of the game reserve from the church?
A. NE B. SW
C. SE D. NW
- It is true to say that people in the area are ____
A. muslims B. christians
C. pagans D. hindus
- The main economic activity of the area is ____
A. trade B. fishing
C. mining D. farming
- The railway line shown on the map is used for ____
A. carrying tea
B. carrying stones

7. It is true to say that KATU area is ruled by _____
 A. M.C.A
 B. County commissioner
 C. Sub county officer
 D. Chief
8. The clove in Tanzania were introduced by
 A. Africans
 B. Arabs
 C. Missionaries
 D. Germans
9. The missionaries came to Africa mainly to
 A. Trade
 B. Stop slave trade
 C. Spread the gospel
 D. Explore Africa
10. The mountain shown below was formed as a result of _____
 A. volcanic action B. compressional forces
 C. wind erosion D. tensional forces



11. Oil refinery in Kenya is found in _____ town
 A. Kisumu B. Nairobi
 C. Mombasa D. Eldoret
12. Traditional chiefs among the Nyamwezi were given the title of _____
 A. Ntemi
 B. Kabaka
 C. Nabongo
 D. Orkoiyot
13. The instrument used to measure the atmospheric pressure is called _____
 A. anemometer
 B. raingauge
 C. thermometer
 D. barometer
14. Which one of the following is not an inland fishing ground?
 A. lake Turkana
 B. lake Victoria
 C. Indian ocean
 D. lake Baringo
15. Who among the following is not a member of the school committee?
 A. The headteacher
 B. The area chief

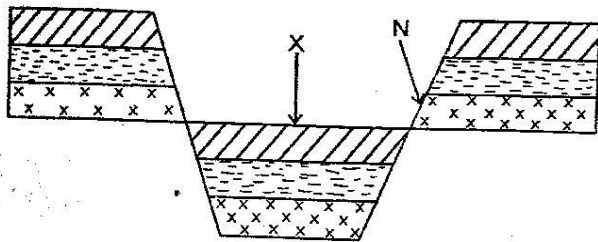
16. In Kenya civil marriages are conducted by a _____
 A. magistrate
 B. chief
 C. religious leader
 D. pastor
17. A lake shared by the three East Africa countries is lake _____
 A. Tanganyika
 B. Victoria
 C. Turkana
 D. Magadi
18. Mt. Meru is found in _____
 A. Tanzania
 B. Ethiopia
 C. Kenya
 D. Sudan
19. Use the map of Africa below to answer qs 19-23



- The country marked M is called _____
 A. Angola
 B. Namibia
 C. Zambia
 D. Gabon
20. Which winds among R, S, Q and U are dry winds?
 A. R B. Q
 C. U D. S

21. The climate of the region marked P is ____
 A. equatorial
 B. desert,
 C. mediterranean
 D. savannah
22. The type of mountain shown T is a ____
 A. block mountain B. fold mountain
 C. volcanic mountain D. horst mountain
23. The plateau marked N is called ____ plateau
 A. Fouta Djallon B. Bie
 C. Jos D. Nyika
24. Which of the following areas is one likely to find mangrove swamps in Kenya?
 A. In the highlands
 B. Along the coast
 C. Around the lake region
 D. In the rift valley

Use the diagram below to answer qs 25 and 26



25. The physical feature marked x is called ____
 A. valley B. block mountain
 C. volcano D. range
26. The part marked N is called ____
 A. magma
 B. plateau
 C. escarpment
 D. plain
27. Miombo woodland is not good for human settlement because of ____
 A. mosquitoes
 B. tsetse flies
 C. snails
 D. wild animals
28. In Uganda copper is mined at ____
 A. Jinja
 B. Kilembe
 C. Kasese
 D. Kampala
29. The following are the importance of school routine except ____
 A. helping to strengthen discipline among pupils
 B. ensuring that learning programmes take place smoothly

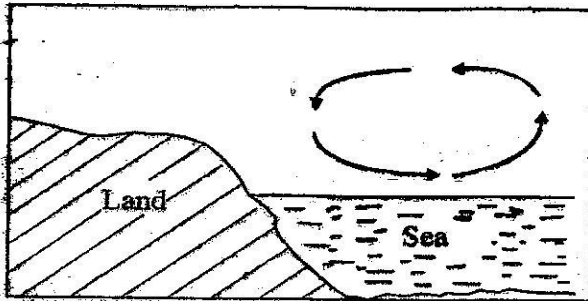
- C. enforcing the school community to follow the school programmes
 D. ensuring that all school activities follow a set pattern.
30. The main occupation of the Tswana and the Fulani is ____
 A. trading
 B. mining
 C. raiding
 D. livestock rearing
31. During the pre-colonial period the san (bushmen) solved their disputes through ____
 A. chief
 B. consensus
 C. king
 D. council of elders
32. Large farms where beef animals are kept are called ____
 A. ranches
 B. paddocks
 C. plantation
 D. herds
33. The main crop grown at Mwea irrigation scheme is ____
 A. rice
 B. onions
 C. sugarcane
 D. flowers
34. The government of Swaziland is headed by
 A. prime minister
 B. president
 C. a king
 D. a chief
35. General elections in Kenya are held after ____ years
 A. ten B. two
 C. three D. five
36. One of the following is not a cause of conflict in families. Which one?
 A. Lack of dialogue
 B. Lack of trust
 C. Lack of money
 D. Lack of respect
37. Three of the following are duties of the head teacher. Which one is NOT?
 A. Admits new pupils
 B. Sacks teachers
 C. Develops the school
 D. Assigns teachers duties
38. Which one of the following cities is the capital of Nigeria?

- A. Ibadan B. Lagos
C. Jinja D. Abuja
39. Which of the groups belong to the Mande language group?
A. The Bambara and Susu
B. The Mande and Dendi
C. The Soninke and Ndebele
D. The Malinke and Balunda
40. Which one of the following groups represents a single parent family?
A. Mother, son
B. Father, niece, daughter
C. Father, daughter, son, mother
D. Father, mother, son
41. Which one of the following factors explain why most parts of Eritrea and Djibouti do not have dense forests?
A. The area is heavily populated
B. The area is inhabited by pastoralists
C. The area is near the Red sea
D. The area receives little rainfall
42. Most river development projects in Africa were established to ____
A. promote tourism
B. increase hydroelectric production
C. promote inland fishing
D. promote agriculture
43. The ECOWAS headquarters is based in ____
A. Lagos B. Abuja
C. Accra D. Dakar
44. Which one of the following African cities is not a capital city?
A. Dakar
B. Cairo
C. Johannesburg
D. Khartoum
45. The Kabaka of Buganda performed the following functions except
A. acting as the chief judge
B. acting as the final judge
C. acting as commander of his army
D. performing religious duties
46. The two African countries that were never colonised were ____
A. Liberia and Ethiopia
B. Egypt and Uganda
C. Ethiopia and Angola
D. Ghana and Mali
47. All of the following are Miji Kenda group except one. Which one is it?
A. Duruma B. Dawida
C. Chonyi D. Agiriama
48. Planting of trees in areas that did not have trees is called ____
A. afforestation
B. desertification
C. deforestation
D. reforestation
49. Which one of the following mountains was not formed by volcanicity?
A. Mt. Meru
B. Suswa
C. Mt. Usambara
D. Mt. Longonot
50. Conflicts occur when people ____
A. work together
B. live together
C. are from different communities
D. fail to understand each other
51. Which one of the following is NOT a responsibility of children?
A. Providing protection
B. Cooking food
C. Cleaning utensils
D. Obeying and respecting parents
52. The hills found in the Nyika region that have resisted erosion are called ____ hills.
A. volcanic B. fold
C. block D. residual
53. Drug abuse is discouraged MAINLY because
A. it wastes money
B. it wastes time
C. it causes indiscipline
D. it affects people's health
54. Before the coming of the Europeans the Ameru were ruled by ____
A. kings
B. warriors
C. hereditary chiefs
D. council of elders
55. It is noon at Accra (0°). The time at Mogadishu (45°E) is ____
A. 9.00 a.m B. 1.30 p.m
C. 11.30 a.m D. 3.00 p.m
56. The lines on a map that run from left to right are called ____
A. longitude B. meridian
C. vertices D. latitude
57. The main sugar cane growing area in Sudan is ____
A. Kenana region
B. Khartoum
C. Gezira region
D. Bahr Al Ghazel region
58. The colour in the national flag of Kenya that signifies a rich agricultural land is ____

- A. black
C. white

- B. green
D. red

59.



The diagram above shows _____

- A. sea breeze
B. convectional rainfall
C. land breeze
D. relief rainfall
60. The best way to make pupils to obey school rules is by _____
- A. involving them in making the rules
B. asking the parents to talk to the pupils who break school rules.
C. putting up the rules in the school notice board
D. encourage the pupils to talk to each other freely

SECTION B

CHRISTIAN RELIGIOUS EDUCATION

61. The story of creation is recorded in the book of Genesis. The word Genesis means _____
- A. creation B. origin
C. movement D. start
62. Which one of the following Bible stories is not found in the book of Genesis?
- A. The tower of Babel
B. The call of Abraham
C. The passover feast
D. The great floods
63. Special abilities or gifts that God has given different people are called _____
- A. abilities B. profession
C. talents D. hope
64. Which of the following is NOT a gift of the Holy spirit.
- A. wisdom B. faith
C. knowledge D. healing
65. Bezalel and Ohaliab were given the craftsmen skill and used it to build the _____
- A. sacred tent

- B. righteous tent
C. precious tent
D. heavenly tent

66. The main teaching on the sermon on the mount is _____
- A. christian suffering
B. values of christian living
C. being peace makers
D. how to fast
67. When Jesus washed His disciples feet, He demonstrated _____
- A. tolerance for others
B. leadership
C. humility in-service
D. hardwork
68. The parable of the good samaritan teaches us to _____
- A. travel in groups
B. help those in difficulties
C. avoid accidents
D. avoid dark places
69. Prophet Nathan was angry with King David because he _____
- A. had planned the murder of Uriah
B. was worshipping foreign gods
C. had married foreign wives
D. wanted to build a house for God
70. Who among the following prophets is NOT associated with the ministry of Jesus?
- A. Isaiah
B. Jeremiah
C. Micah
D. Ezekiel
71. Jacob received his new name Israel _____
- A. during his dream at Bethel
B. when he arrived at Laban's home in Haran
C. when he wrestled with the angel of God at Paniel
D. During his agreement with Laban at Gilead
72. Which one of the following is the MAIN reason why Jesus came
- A. to die for human beings
B. to live on earth for a time
C. to save sinners from hell
D. to save mankind from sin
73. Which one of the following are NOT secular values?
- A. Happiness and pride
B. Joy and mercy
C. Humility and fame
D. Chastity and boasting
74. The Iteso believed in supreme God called _____
- A. Edeke B. Enkai
C. Mulungu D. Asis

75. Discernment means
 A. blaming other people
 B. punishing the wrong doers
 C. looking at things keenly
 D. forgiving repentant criminals
76. The first mission school in Kenya was started at
 A. Fort Jesus
 B. Rabai
 C. Gede
 D. Ribe
77. When Paul lived with Priscilla and Aquila at **corinth**, they all earned a living by
 A. depending on believer's
 B. making tents for sell
 C. mending shoes that were torn
 D. weaving and selling baskets
78. The church is best referred to as _____
 A. christians of other churches
 B. a building where meetings are held
 C. the christian community
 D. leaders of christian churches
79. Which two disciples went to pray at the temple and found a lame man at the gate
 A. James and Matthew
 B. John and Andrew
 C. John and Peter
 D. Bathlomew and Judas
80. Three of the following teachings encourage christians in their suffering. Which one does NOT
 A. suffering is caused by sin
 B. Jesus suffered for their sake
 C. suffering strengthens their faith in God
 D. God rewards those who suffer for his sake
81. The following practices can make us improve EXCEPT one. Which one?
 A. Taking alcohol after work
 B. Using illicit drugs
 C. Eating a balanced diet
 D. Engaging in pre-marital sex
82. To be sure of what we hope for and be certain of what we cannot see is _____
 A. faith
 B. love
 C. peace
 D. contentment
83. Which one of the following christian values was MAINLY observed in christianity and in the African traditional communities before marriage?
 A. Hope
 B. Fairness
 C. Chastity
 D. Mercy
84. Which one of the following special people were found in both traditional African and christianity religions
 A. priest
 B. diviners
 C. rainmakers
 D. witch doctors
85. When John the Baptist saw Jesus coming, he called him
 A. the light of the world
 B. the lamb of God
 C. the good shepherd
 D. the son of God
86. People who are not proud can be said to have the quality of
 A. discernment
 B. justice
 C. love
 D. humility
87. Which one of the following books of the Bible is classified under poetic books?
 A. Psalms
 B. Daniel
 C. Genesis
 D. Revelation
88. Happy are the poor in spirit for
 A. their's is the kingdom of God
 B. they will see God
 C. God will call them His sons
 D. They will receive what God has promised
89. During his teachings here on earth, Jesus strengthened that He had come to
 A. do away with the law of Moses
 B. do away with the teachings of the prophets
 C. strengthen and fulfil the law of Moses
 D. bring other new laws
90. The following are major contributions of the christian churches in Kenya today. Which one is NOT?
 A. Building of schools
 B. Building of hospitals and health centres
 C. Caring for the aged and orphans and the displaced
 D. Sponsoring political campaigns and rallies