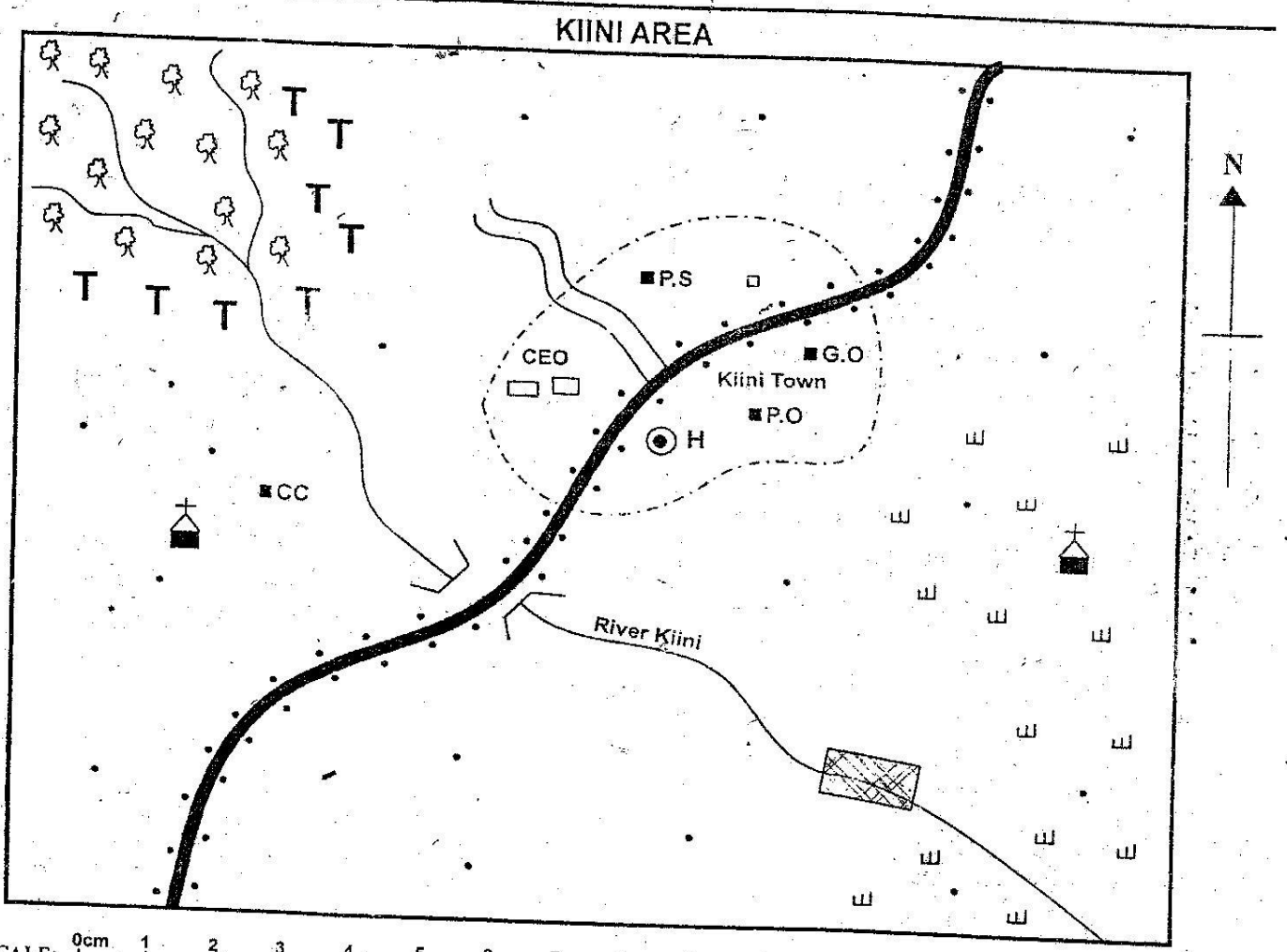


CLASS 6 MID TERM 2 2020

SOCIAL STUDIES & CRE



SCALE: 0cm 1 2 3 4 5 6 7 8 9 10Km

KEY:

	Tarmac road		Trees		Irrigation Scheme
	Murram road		Scrubs		County Education Office
	River and bridge		Governor's Office		Chief's Camp
	Permanent buildings		Hospital		Tea
	Houses		Police Station		Town boundary
	Church		Post Office		

STD 6 - SOCIAL STUDIES / C.R.E

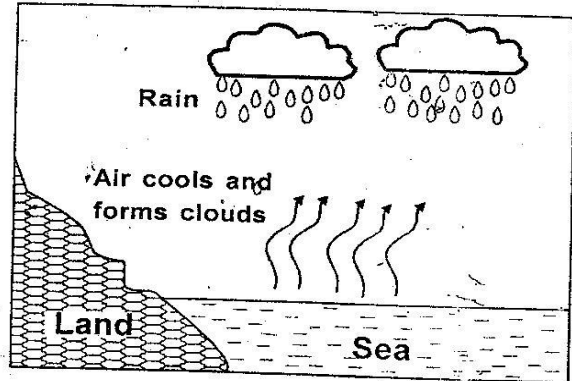
Compiled & distributed by Schools Net Kenya, P.O. Box 15509-00503, Nairobi | Tel:+254202319748

E-mail: infosnkenya@gmail.com | ORDER ANSWERS ONLINE at www.schoolsnetkenya.com

Study the map of Kiini area provided and answer questions 1 - 7.

1. The land in Kiini area slopes from:-
 - A. South East to North East
 - B. South West to North East
 - C. North-West to South East
 - D. North East to South West
2. Which one of the following is NOT a function of Kiini town?
 - A. A health centre
 - B. A recreational centre
 - C. An administrative centre
 - D. A transport and communication centre
3. Kiini town has grown rapidly due to the presence of:-
 - A. the police station
 - B. the governor's office
 - C. the hospital
 - D. the road
4. Which one of the following economic activities is carried out in Kiini area?
 - A. Farming
 - B. Tourism
 - C. Mining
 - D. Fishing
5. The cash crop grown in the North Western side of Kiini area is influenced by:-
 - A. hot and wet climate
 - B. cool and wet climate
 - C. hot and dry climate
 - D. hot and cool climate
6. Which one of the following crops can be grown at the irrigation scheme located along the river?
 - A. Coffee
 - B. Potatoes
 - C. Wheat
 - D. Rice
7. The head of Kiini area mostly can be a:-
 - A. Chief
 - B. Senator
 - C. Governor
 - D. Police officer
8. The main reason why the Nilotes migrated from their original homeland was to:-
 - A. look for fertile land for farming.
 - B. escape family and clan disputes.
 - C. look for pasture and water for their animals.
 - D. escape drought and famine.
9. Which one of the following explains the programme of activities that are planned to take place every day in a school?
 - A. School routine
 - B. School motto
 - C. School logo
 - D. School vision
10. Which one of the following is a crater lake?
 - A. Lake Shala
 - B. Lake Turkana
 - C. Lake Tana
 - D. Lake Victoria

11. Which one of the following group of people consists of River Lake Nilotes of Eastern Africa?
 - A. Keiyo, Pokot, Marakwet
 - B. Dinka, Nuer, Shilluk
 - C. Samburu, Njemps, Iteso
 - D. Bagisu, Batoro, Banyoro
12. The diagram below shows the formation of a type of rainfall.



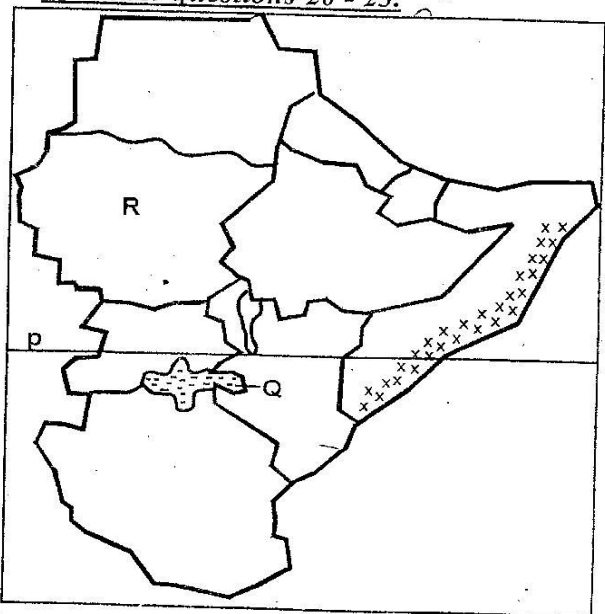
The type of rainfall represented in the diagram above is:-

- A. relief
 - B. frontal
 - C. cyclonic
 - D. convectional
13. The traditional method of teaching where a child would stay with an experienced person to learn was called:-
 - A. riddles
 - B. apprenticeship
 - C. proverbs
 - D. western education
 14. Three of the following are factors that influence population distribution in Eastern Africa **except**:-
 - A. climate
 - B. soil
 - C. longitude
 - D. relief
 15. Which one of the following is **not** a reason why the Nandi resisted British rule for a long time?
 - A. The Nandi were under a strong leader
 - B. The British feared their fighting
 - C. The Nandi warriors were well trained
 - D. The Nandi warriors wanted to prove they are strong and capable future leaders.
 16. The following are importances of wildlife. Which one is **not**?
 - A. Illegal killing of wild animals.
 - B. It creates job opportunities.
 - C. Promotion of cultural exchange
 - D. It improves international relationship
 17. Which one of the following is **not** a basic need of a family?
 - A. Food
 - B. Shelter
 - C. Water
 - D. Love

18. Mwangi, a Std 6 pupil, met Kariuki being beaten for stealing. What is the best action for Mwangi to take.
- A. Join the people in beating.
 - B. Run away and keep quiet.
 - C. Advise the people not to take the law into their hands.
 - D. Run away and hide in the bush.

19. Who among the following British officers became a great friend to Waiyaki wa Hinga?
- A. Eric Smith
 - B. Vasco da Gama
 - C. Captain Lugard
 - D. John Speke

Use the map of Eastern Africa provided below to answer questions 20 - 23.



20. The country marked R is:-
- A. South Sudan
 - B. Ethiopia
 - C. Sudan
 - D. Uganda
21. The line of latitude marked P is called:-
- A. the Tropic of Capricorn
 - B. the Tropic of Cancer
 - C. the Prime Meridian
 - D. the Equator
22. The type of climate found in the shaded area is likely to be:-
- A. Equatorial
 - B. Tropical
 - C. Coastal tropical
 - D. Desert
23. The lake marked Q is shared by all the following countries in Eastern Africa except:-
- A. Kenya
 - B. Tanzania
 - C. Uganda
 - D. Somalia

24. The best place for a pedestrian to cross a busy road is:-
- A. at a junction
 - B. near a bump
 - C. at a zebra crossing
 - D. at a round-about
25. Which among the following European colonial powers colonized Kenya?
- A. Italians
 - B. British
 - C. Germany
 - D. France
26. Below are different uses of soil:
- (i) Growing food and cash crop
 - (ii) Provide building materials
 - (iii) Burying the dead
 - (iv) Pottery industry

- Which among the following is a social use of soil?
- A. (iii)
 - B. (i)
 - C. (iv)
 - D. (ii)
27. Which one of the following is not a form of child abuse?
- A. Use of a harsh and abusive language.
 - B. Establishing rescue centres
 - C. Employing people below 18 years of age
 - D. Excessive caning
28. Three of the following are functions of a clan except:-
- A. allocating land to individual families.
 - B. settling disputes.
 - C. looking for marriage partners for young men.
 - D. safeguarding the values of the clan.
29. Which one of the following is not an effect of migration of people into Eastern Africa?
- A. Displacement of some communities.
 - B. Communities adopted economic activities from other groups.
 - C. Inter-marriage among language groups.
 - D. Communities united to form one strong language group.
30. Which one of the following lakes is NOT found on the floor of the Rift Valley?
- A. L. Malawi
 - B. L. Tana
 - C. L. Edward
 - D. L. Tanganyika
31. Which one of the following commodities is not transported through pipeline?
- A. Water
 - B. Gas
 - C. Cement
 - D. Oil
32. Who among the following leaders resisted the British invasion of his territory?
- A. Mekatilili wa Menza
 - B. Nabongo Mumia
 - C. Olaiwon Lenana
 - D. Waiyaki wa Hinga

33. The main factor influencing population distribution in Eastern Africa is:-
 A. soil B. relief
 C. vegetation D. climate
34. The weather measuring instrument used to measure atmospheric pressure is called:-
 A. anemometer B. barometer
 C. hygrometer D. windvane
35. Which type of climate is experienced in the North Eastern parts of Kenya?
 A. mountain B. tropical
 C. equatorial D. semi-desert
36. Which one of the following events took place in Kenya in 1895? Kenya:-
 A. became independent
 B. became a British colony
 C. got the first legislative council
 D. became a British protectorate
37. In the past, communities interacted through:-
 A. trade B. education
 C. religion D. social media
38. The following are conditions favouring the growth of a certain crop:
 (i) *Well drained fertile soils*
 (ii) *cool temperatures*
 (iii) *warm, dry and sunny weather for harvesting*
 (v) *gentle slope*
 The above conditions favour the growth of
 A. coffee B. tea
 C. wheat D. sisal
39. Which one of the following is **not** a product of manufacturing industries?
 A. Sugar B. Soap
 C. Paper D. Cement
40. A member of parliament is elected into office by:-
 A. the president
 B. the registered voters
 C. the speaker
 D. the Attorney General
41. Favouring people of your own community is known as:-
 A. nepotism B. patriotism
 C. racism D. tribalism
42. The Rift Valley was formed through:-
 A. faulting and uplifting B. volcanicity
 C. faulting and sinking D. folding
43. Which one of the following is **not** a problem facing beef farming in Kenya?
 A. Inadequate slaughter houses
 B. Adequate funds
 C. Livestock pests and diseases
 D. Shortage of water and pasture
44. Which one of the following is the **main** benefit of coffee growing in Kenya?
 A. Creating employment
 B. Earning foreign exchange
 C. Improvement of other industries
 D. Development of infrastructure
45. John is a barber shop owner. In which industry is John's shop?
 A. Manufacturing B. Processing
 C. Service D. Jua Kali
46. Which one of the following is **not** a responsibility of a Kenyan citizen?
 A. Being unpatriotic B. Obeying the law
 C. Paying taxes D. Being loyal
47. Which one of the following is **not** a cause of road accidents?
 A. Road worth vehicles B. Overspeeding
 C. Overloading D. Poor roads
48. Below are statements about a certain type of transport;
 (i) *Its the most expensive*
 (ii) *Its the fastest*
 (iii) *Its used to transport passengers over long distances.*
 The type of transport described above is;
 A. water B. pipeline
 C. railway D. air
49. Which one of the following tourist attractions in Eastern Africa is the **main** one?
 A. Wildlife B. People's culture
 C. Historical sites D. Sandy beaches
50. Three of the following are problems resulting from industries on climate **except**:
 A. environmental pollution
 B. destroying vegetation
 C. developing infrastructure
 D. making the land look ugly
51. Below are statements describing a certain leader in Kenya;
 (i) *He was the son of Kimnyole*
 (ii) *He was a brave and powerful leader*
 (iii) *He became a king in 1895*
 (iv) *He resisted the British invasion of his land*

The leader described above is:-

- A. Mekatili B. Masaku
C. Samoei D. Nabongo

52. The mostly used recent means of communication in Kenya is:-

- A. e-mail B. cell phones
C. radio D. television

53. Who among the following is **not** a person with special needs in the society.

- A. The blind B. The HIV negative
C. The deaf D. The mad people

54. The illegal hunting and killing of wildlife is called:-

- A. shooting B. slaughtering
C. cutting D. poaching

55. Which one of the following actions by the government would cause disunity?

- A. Unequal distribution of resources
B. Equal opportunities for all citizens
C. Providing security for all citizens
D. Provide health care for all citizens

56. In Kenya, one becomes a member of the county assembly through;

- A. appointment by the president
B. appointment by the speaker
C. election by registered voters
D. appointment by the governor

57. In Kenya, the judiciary is headed by the;

- A. Judges B. Magistrate
C. Chief justice D. President

58. Which one of the following is **not** a function of the body incharge of elections in Kenya?

- A. Registering voters
B. Educating voters
C. Announcing election results
D. Appointing the president

The **main** source of government revenue is;

- A. bribes B. taxes
C. fines D. grants

Which town in Kenya is also a sea port?

- A. Nairobi B. Kisumu
C. Mombasa D. Eldoret

6 - SOCIAL STUDIES / C.R.E

PART II: CHRISTIAN RELIGIOUS EDUCATION

61. Human beings are a special creation of God. This is **mainly** because;

- A. they were created last
B. they possess bigger brains
C. they helped God in creation
D. they were created in the image of God

62. Two of the following people disobeyed God in the garden of Eden. Who are they?

- A. Adam and Cain B. Eve and Abel
C. Adam and Eve D. Cain and Abel

63. Who among the following was a son of Jesse?

- A. Saul B. Jonathan
C. David D. Samuel

64. Who was the first man to die?

- A. Adam B. Abel
C. Cain D. Jesus

65. People who died long time ago in traditional African society were called;

- A. elders B. living dead
C. ancestors D. forefathers

66. God has given us talents. We should share these talents with the following **except**;

- A. helping others
B. serving God
C. doing something very well
D. making ourselves rich

67. Abraham was called by God when he was living in:-

- A. Haran B. Midian
C. Ur D. Egypt

68. Who inspired the writers of the Bible?

- A. God B. Jesus
C. Holy Spirit D. Serpent

69. The leader God chose to deliver the Israelites from the Midianites was:-

- A. Moses B. Gideon
C. Solomon D. Philip

70. According to 2 Peter 3:10 - 15, it says that Jesus will come like:-

- A. an angel B. a trumpet
C. a thief D. a good Samaritan

71. The Holy Spirit told Paul to go to Macedonia through _____ (Act 16:6 - 10)

- A. a prophet B. a night Vision
C. a voice D. another Apostle

72. The story of Gideon teaches us that God uses _____ people to bring victory.
- A. rich B. few
C. many D. big
73. The following events happened during the last supper. Which one did not?
- A. Taking bread B. Giving thanks
C. Breaking the bread D. Kissing Jesus
74. The resurrection of Jesus shows that Jesus has:-
- A. power over death. B. forgiveness of sins.
C. power over nature. D. raised the death.
75. One of the following is not a needy person. Which one?
- A. A sick person B. An orphan
C. A widow D. A bright child
76. Which one of the following statements is true about our dealings with people of other religions?
- A. We should not talk to them.
B. We should force them to become Christians.
C. We should respect them.
D. We should not play with them.
77. Jesus changed Simon's name to:-
- A. Peter B. Paul
C. Israel D. David
78. Jesus taught in the Lord's prayer that we should:-
- A. forgive those who forgive us.
B. give only those who give us.
C. forgive those who do wrong to us.
D. put others to temptations
79. Who among the following healed the lame beggar at the beautiful gate of the temple?
- A. Peter and Andrew B. James and Peter
C. John and James D. Peter and John
80. The tax collector that Jesus shared a meal with was called:-
- A. Levi B. Andrew
C. Zacchaeus D. John
81. Which one of the following communities is not correctly matched to the name of their God?
- A. Enkai → Maasai B. Ngai → Agikuyu
C. Nyasaye → Luo D. Yahweh → Luhya
82. Which among the following communities believe that the world was created in two days?
- A. Gikuyu B. Maasai
C. Bukusu D. Mijikenda
83. Which of the following is not a gift of the Holy Spirit?
- A. Joy B. Wisdom
C. Preaching D. Healing
84. Which one of the following is not a way of getting new life in traditional African societies?
- A. Baptism B. Initiation
C. Marriage D. Birth
85. When the class teacher went to class five after break, she found all the pupils shouting at the top of their voices. Only Peter and Titus were seated quietly reading story books. The teacher punished the whole class apart from the two boys. The virtue she exercised was:-
- A. trust B. fairness
C. honesty D. kindness
86. Faith without actions is dead. These words were said by:-
- A. Peter B. Paul
C. John D. James
87. Wanjeri hears a baby crying from a bush as she is coming to school one morning. As a Christian, the best thing she should do is:
- A. go to school and tell the class teacher.
B. hide and watch what will happen to the baby.
C. pray for the baby to stop crying.
D. look for the baby and check on it.
88. When we quarrel with our friends in school, we should:-
- A. start fighting B. beat them
C. forgive them D. hate them
89. A good friend should be ready to suffer for his/her friend. Who among the following were true friends?
- A. Saul and David B. David and Jonathan
C. David and Solomon D. Jonathan and Saul
90. According to the Bible teachings, Christians show their faith **best** by:-
- A. their properties B. sing loudly
C. their actions D. building big churches