


GRADE 4 HOLIDAY HOMEWORK


SOCIAL STUDIES TERM 2, 2020

Draw the weather symbols


1. sunny




2. rainy



3. windy



4. calm



5. A large area with many trees form a _____.

The road sign below shows

6.

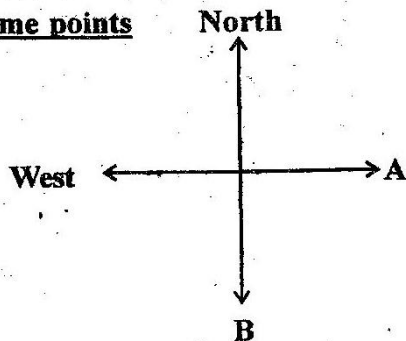


7.



8. The four main point of a compass are known as _____

Name points



9. A _____

10. B _____

Parent's / Guardian's signature
Benchmark Holiday Assignment


Date:

Pg.84

GRADE 4

1. The sun rises in _____
(North, South, West, South)

2. Draw a valley



3. Which one is found in a natural environment _____
(cars, plants, Houses)

4. Kenya is made up of _____ counties.

5. Long period without rain is called _____ seasons.

6. My county is called _____

7. My sub-county is called _____

Name 3 sources of water

8. _____

9. _____

10. _____

Parent's/ Guardian's signature
Benchmark Holiday Assignment

Date:

Pg.85

GRADE 4

Name two countries that neighbours our country

1. _____

2. _____

Write down two ways in which people depend on each other

3. _____

4. _____

5. _____

Name 3 historic sites building in the county

6. _____

7. _____

8. _____

9. A _____ is a sad ceremony.
(burial, wedding)

10. Animals that are kept in our homes are called _____
animals.


Parent's / Guardian's signature
Benchmark Holiday Assignment

Date:

Pg.86

GRADE 4

1. The road sign below indicates that there is _____



2. The best soil for plants to grow well is _____

3. A lot of rainfall causes _____




4. Red traffic lights means _____

5. Green traffic light means _____

6. Yellow traffic light means _____

7. Children have right to get _____ (money, education)

Draw 3 physical features.

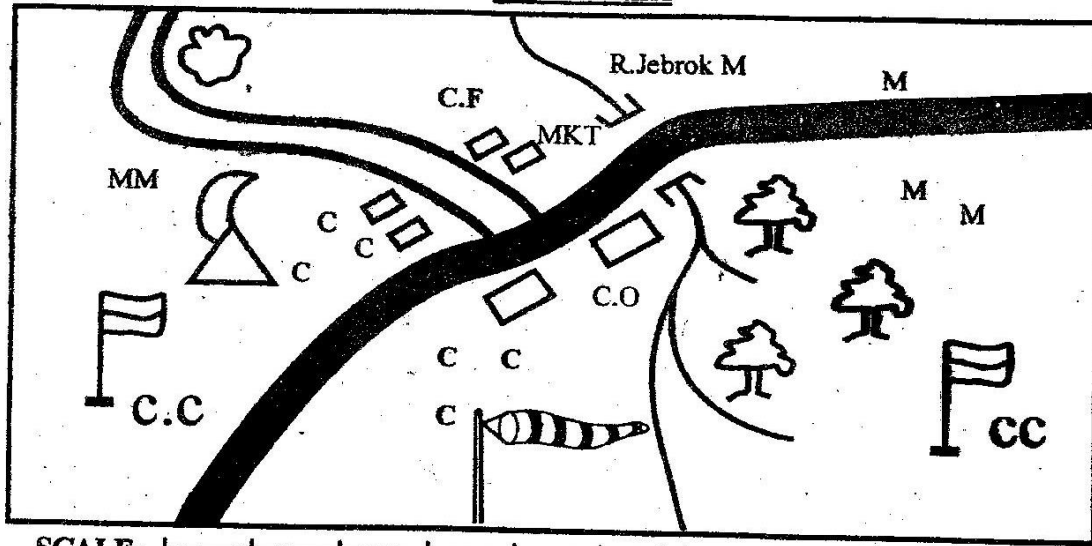


Parent's / Guardian's signature
Benchmark Holiday Assignment

Date:

Map work

IMANIAREA



SCALE: 0 1 2 3 4 5 6 7 8 Km

KEY:

	Chiefs camp		Murram road		Bridge	MM
	Mosque		Quarry (Chinese)	C.O	County office	
	Tarmac road		Forest	C.F	Coffee factory	MKT

Study the map of IMANI Area and answer questions

1. What is the direction of the quarry from the mosque?

2. The main means of transport in Imani area is _____
3. Most people in IMANI area are _____ religion.
4. The cash crop grown in IMANI area is _____

Parent's / Guardian's signature
Benchmark Holiday Assignment

Date:

Pg.88

GRADE 4

Draw and name four cardinal points of a compass



1. _____

2. _____

3. _____

4. _____

5. Explain the meaning of the word compass

6. A compass is read in a _____ direction.

7. The sun rises in the _____

8. The sun sets in the _____

Parent's / Guardian's signature
Benchmark Holiday Assignment

Date:

Pg.89

GRADE 4

A compass is used to show

1. _____

2. _____

The 4 cardinal points are

3. _____

4. _____

5. _____

6. _____

What do the following letters mean

7. NE _____

8. SE _____

9. NW _____

10. SW _____

Parent's / Guardian's signature
Benchmark Holiday Assignment

Date:

Pg.90

GRADE 4

Give two importances of

Oceans

1. _____
2. _____

River

3. _____
4. _____

Mountains

5. _____
6. _____

Plains

7. _____
8. _____

Forests

9. _____
10. _____

Parent's / Guardian's signature
Benchmark Holiday Assignment


Date:

Pg.91


GRADE 4

Draw and colour.


A forest



Granary



A boy with an umbrella and gumboots during rainy season



Parent's / Guardian's signature
Benchmark Holiday Assignment

Date:

Pg.92

GRADE 4