

GRADE 4 END TERM 2 2020

MATHEMATICS

NAME : _____

SCHOOL : _____

Time: 2 hours

1. Write seven hundred and seven in figures.

2. Write the place value of digit 5 in the number 93562.

3. Which whole number comes after 499 written in figures?

4. The first day of the week is; _____

5. Arrange the numbers 125, 49, 86, 185, 73 from the smallest to the biggest.

6. What is the total value of digit 9 in the number 439? _____

7. Draw an abacus that represents five hundred and eighty four.

8. Mary drew a number line. She counted three

steps to the right from digit 5. What answer did she get? _____

9. Which shape below shows $\frac{1}{2}$ is shaded?

A



B



C



D



10. What is a half of 16? _____

11. Work out;

435

+ 202

12. Sam had 400 goats. He sold 200 goats. How many goats were left? _____

13. Nelly had 6 oranges. Rono had 8 mangoes and Ruby had 9 apples. How many fruits.

did they have altogether? _____

14. Fill in the missing number.

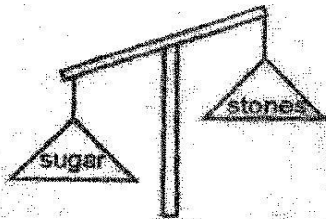
$$40 + \square = 50$$

What is the sum of 684 and 264? _____

16. Work out;

$$\begin{array}{r} 900 \\ - 700 \\ \hline \end{array}$$

17. Which one is heavier?



- A. Stones B. None
C. Sugar D. Both

18. Take away 17 from 57 = _____

19. A school has 835 pupils. 420 are boys. How many are girls? _____

20. Fill in the missing number

$$\square - 25 = 0$$

21. $3 + 3 + 3 + 3 + 3 = \underline{\quad}$

- A. 3×4 B. 5×4
C. 5×3 D. 3×6

22. A dog has 4 legs. How many legs do 10 dogs have altogether? _____

23. What is the approximate height of our classroom door? _____

- A. 2 m B. 3 m
C. 20 cm D. 20 mm

24. Write the next three shapes in the pattern.



25. Add 27 and 43 = _____

26. A farmer had 20 cows. He sold $\frac{1}{4}$ of them. How many cows were sold? _____

27. Work out;
 $9 \times 9 = \underline{\quad}$


28. A car can carry 5 passengers. How many passengers would 8 cars carry altogether?

29. How many groups of 4 can be taken away from 20? _____

30. What is the answer after working out $49 + 77$?

31. Nixon had 36 pencils. He gave each pupil 4 pencils. How many pupils received the pencils? _____

32. What is the time on the clockface? _____



33. Work out;

$$\begin{array}{r} 749 \text{ m} \\ + 190 \text{ m} \\ \hline \end{array}$$


34. A piece of wood is 47 m long. A piece 33m long is cut from it. What length of the wood was left? _____

35. John weighs 66kg while Jacob weighs 74kg. What is their total mass? _____

36. Work out;



$$\begin{array}{r} 948 \\ - 767 \\ \hline \end{array}$$

37. Which container holds more? _____



Sufuria

Debe



A. Debe

B. Cup

C. Bucket

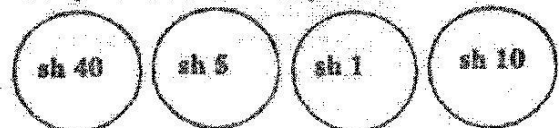
D. Sufuria

38. Work out;

Hr	Min
5	15
+ 2	30
<hr/>	

39. How many sh 10 coins are in a sh 50 note?

40. Joseph has the following coins.



How much money did he have altogether?

- A. sh 56
 B. sh 55
 C. sh 65
 D. sh 50

41. Work out;

sh	cts
68	80
- 35	70

42. Fill in the missing number

$24 + \square = 6$

43. Work out.

sh	cts
35	45
+ 40	35

- A. sh 125 80 cts
 B. sh 70 8 cts
 C. sh 75 70 cts
 D. sh 75 80 cts

44. Baloteli bought the following items from a shop.
 1 packet of milk - sh 50
 A loaf of bread - sh 50
 One kg of sugar - sh 150

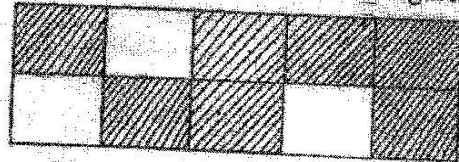
A bar of soap - sh 125

How much money did she pay altogether?

45. Work out;

$3 \times 0 \times 1 =$ _____

46. What fraction is unshaded in the figure?



47. Write half past three in short form.

48. What is $\frac{1}{8}$ of 40? _____

49. 7 hundreds + 0 tens + 5 ones = _____

50. Chaka had 12 oranges. He shared them among his 4 friends. How many oranges did each get? _____

Assessment rubric

Exceeds Expectations	Meets Expectations	Approaching Expectations	Below Expectations
48 - 50	40 - 47	30 - 39	0 - 29