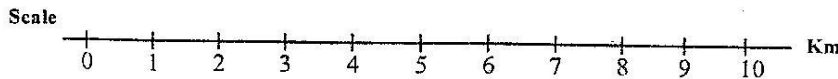
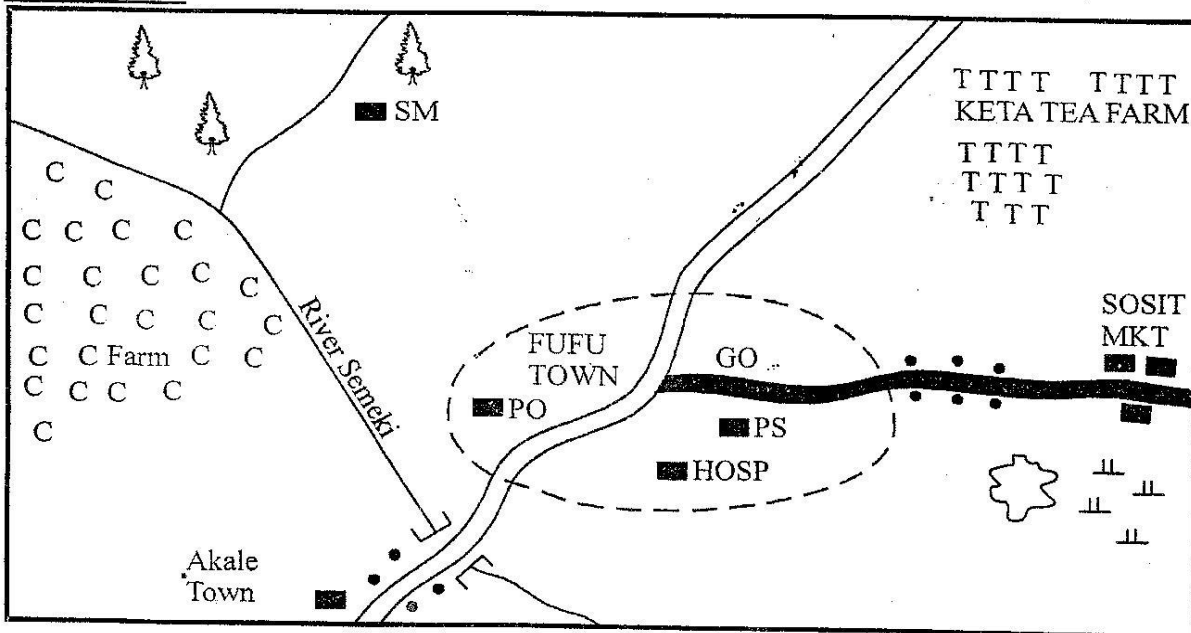


SEME AREA



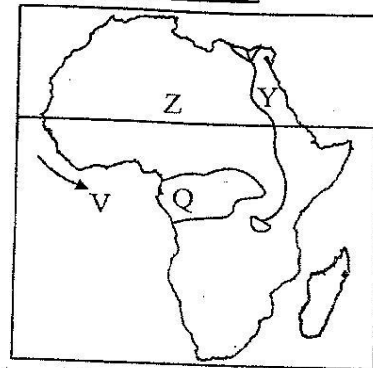
	Tarmac road		Town boundary		Scrub vegetation		PO Post Office
	Murram road		Permanent building		Quarry		GO - Governor's office
	River		Forest		SM Saw mill		Hosp -Hospital
							PS Police Station

Use the map of Seme area to answer questions 1 to 7.

- What is the direction of Akale Town from Sosit Market?
A. North East B. South East
C. North West D. South West
- The approximate length of the murram road in Seme Area is
A. 14km B. 7km
C. 6km D. 18km
- The climate of the areas around the tea farms in Seme Area is likely to be
A. hot and wet B. cool and dry
C. hot and dry D. cool and wet
- The settlement pattern in Seme Area can mainly be described as
A. even B. nuclear C. cluster D. linear
- Which one of the following services is not offered in Fufu Town?
A. Recreation B. Communication
C. Security D. Health
- Three of the following economic activities are carried out in Seme Area. Which one is not?
A. Mining B. Fishing
C. Trading D. Crop farming
- The type of soil that is mainly found in Seme Area is
A. clay B. sandy C. volcanic D. alluvial

8. Which of the following statements is true about black cotton soils?
- They are deep and well drained.
 - They are suitable for growing coffee.
 - They become sticky when it rains.
 - They are mainly found on slopes of mountains
9. Three of the following are basic needs of a family. Which one is **not**?
- Food
 - Education.
 - Clothing.
 - Shelter.
10. The school motto is mainly developed by the
- director of education, teachers and pupils
 - secretary for education, parents and pupils
 - pupils, parents and teachers
 - area education officer, head teacher and pupils
11. Which of the following European nations did **not** scramble for Eastern Africa?
- Portugal
 - Britain
 - Italy
 - Germany
12. In Kenya, general elections are held after every,
- ten years
 - two years
 - five years
 - twenty years
13. Which group of countries are land locked?
- Burundi, Tanzania, Sudan
 - Uganda, Ethiopia, Rwanda
 - Rwanda, Somalia, Djibouti
 - Eritrea, South Sudan, Kenya
14. Which of the following is a way in which a person can become a Kenya citizen?
- By voting.
 - By registration
 - By association.
 - By naturalization
15. Which of the following are examples of service industries?
- Cement and paper making.
 - Leather and sugar processing.
 - Motor vehicle and bicycle assembling.
 - Banking and insurance.
16. The capital city of Egypt is
- Lusaka
 - Accra
 - Cairo
 - Tripoli
17. Which one of the following factors does **not** promote peace?
- Corrupt practices
 - Tolerance
 - Games and sports
 - Obeying the laws of the country

Study the map of Africa below and use it to answer questions 18 to 21.



18. The climatic region marked Q is called
- Mediterranean
 - Equitorial
 - Savannah
 - Desert
19. The river marked Y is called
- River Orange.
 - River Zambezi.
 - River Gambia.
 - River Nile
20. The imaginary line marked Z is called
- Prime meridian
 - Equator
 - Tropic of cancer
 - Tropical of capricorn
21. The ocean current marked V is
- Equitorial Guinea
 - Mozambique
 - Benguela
 - Canary
22. Which of the following is the main language group in Southern Africa?
- The Khoisan.
 - The Asians.
 - The Europeans
 - The Bantus
23. Which of the following colours in the national flag of Kenya represents peace?
- Black.
 - White.
 - Red.
 - Green.
24. Kenya gained full independence in the year
- 1961
 - 1960
 - 1964
 - 1963
25. What was the time in Addis Ababa on longitude 40° East, when it is 12.00 noon in London on longitude 0°?
- 9.20am
 - 9.00 am
 - 2.40am
 - 2.40 pm
26. Artefacts are important because
- they show the history of the way of life of a community
 - they are made by skilled people
 - they are made and sold for a lot of money
 - they can be kept in museums
27. The following are some of the effects of industries on the environment:
- waste chemicals from factories when drained into rivers may pollute the water
 - industrialization may lead to over

exploitation of resources

(iii) gases from industries may cause air pollution

(iv) some industries produce too much noise

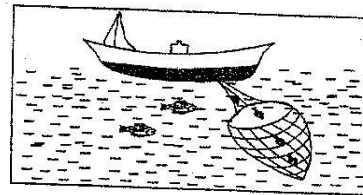
(v) waste materials may make the environment ugly when dumped carelessly

Which of these effects are **most likely** to result from the leather and tanning industry?

- A. i, ii, iv B. ii, iii, iv
C. iii, iv, v D. i, iii, v

28. Three of the following are ways of protecting children from child abuse. Which one is **not**?
- A. Providing counselling services to victims
B. Educating children on their rights
C. Encouraging children to study hard
D. Giving stiff punishments to child abusers
29. Which crop requires the following conditions to grow?
- (i) Heavy rainfall
(ii) Deep fertile and well-drained soils
(iii) High temperature of between 21° to 26°C
(iv) Props to support plants with fruits
- A. maize B. sugarcane
C. coffee D. banana
30. Marine fishing in both Kenya and Tanzania is carried out in
- A. Lake Victoria. B. Lake Tanganyika
C. Lake Turkana D. The Indian Ocean
31. The following are descriptions about a certain crop grown in Eastern Africa
- (i) It is grown as a staple food for people in Kenya and Tanzania
(ii) It is grown on small scale and on large scale
(iii) It is a raw material for corn oil
- The crop is likely to be
- A. Maize B. Wheat C. Sorghum D. Tea
32. Three of the following people were early visitors to Eastern Africa. Who was not?
- A. John Speke.
B. Seyyid Said
C. Julius Nyerere
D. Dr. David Livingstone
33. Which one of the following types of vegetation is found in the Nyika plateau of Kenya?
- A. Savannah B. Forest vegetation
C. Mangrove D. Evergreen forests
34. Who among the following resisted the British rule in his territory?

- A. Kabaka Mutesa I B. Kabaka Mwanga
C. Nabongo Mumia D. Laibon Lenana
35. Which of the following groups of people is composed of the Western Bantu?
- A. Agikuyu, Akamba, Ameru
B. Abagusii, Abakuria, Abaluhya
C. Wadawida, wataweta, waswahili
D. Iteso, maasai, samburu
36. The following are characteristics of a certain climatic region in Africa:
- (i) hot dry summers
(ii) cool, wet winters
(iii) annual rainfall varies from 500mm to 700mm
- The climatic region described above is likely to be
- A. Mediterranean B. Equitorial
C. Savannah D. Desert
37. The traditional parliament in Buganda kingdom was referred to as
- A. Katikiro B. Omwanika
C. Gombolola D. Lukiko
38. In which month is the sun at the equator?
- A. June. B. September.
C. December. D. May.
39. The method of fishing illustrated by the diagram below is



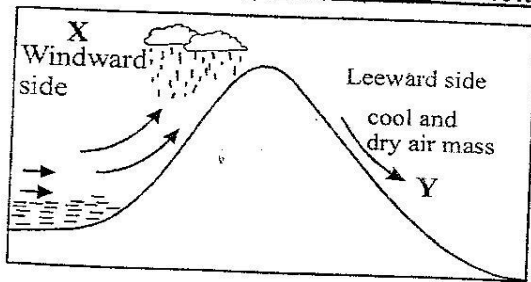
- A. purse seining B. net drifting
C. gill net D. trawling
40. Which of the following people led the Giriama in resisting the British rule in Kenya?
- A. Koitalel Arap Samoei.
B. Nabongo Mumia
C. Mekatilili wa Menza
D. Waiyaki wa Hinga
41. Representative democracy is also called
- A. parliamentary democracy
B. delegative democracy
C. liberal democracy
D. participatory democracy
42. In which of the following areas in Kenya is soda ash mined?
- A. Kariandusi.
B. Kerio valley
C. Ngomeni
D. Lake magadi

Insert

Compiled & distributed by SCHOOLS NET KENYA, P.O. BOX 13309-00305, NAIROBI | TEL: +254 20 2319 140

E-mail: infosnkenya@gmail.com | ORDER ANSWERS ONLINE at www.schoolsnetkenya.com

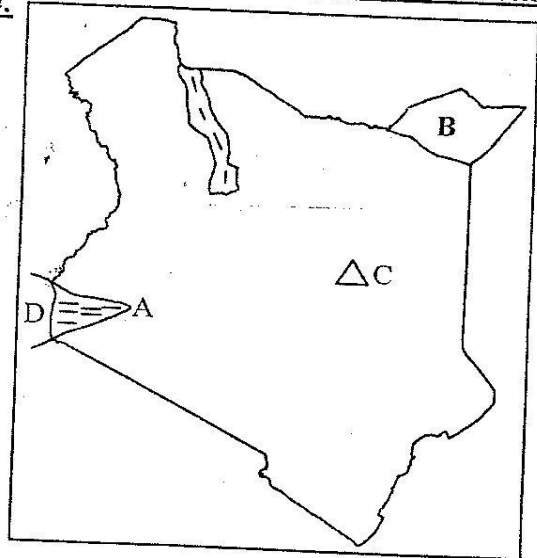
Use the diagram below to answer questions 43.



43. The type of rainfall shown above is called
 A. convectional rainfall
 B. cyclonic rainfall
 C. sea breeze rainfall
 D. relief rainfall
44. Which of the following economic activities can be carried out on the areas marked X?
 A. Beef farming B. Ranching
 C. Dairy farming D. Pastoralism
45. Governors in Kenya are elected after every _____ years.
 A. 6 B. 5 C. 10 D. 8
46. The following are descriptions of a town in Eastern Africa:
 (i) It is at a railway junction
 (ii) It is a transport centre
 (iii) It has a copper smelting industry
 (iv) It is an electric power station
 The town described above is
 A. Kampala B. Nairobi
 C. Jinja D. Dar es salaam
47. Which of the following items are the most common imports into Eastern Africa?
 A. Petroleum and textile.
 B. Vehicles and electronic goods
 C. Paper and diamond
 D. Coffee and machinery
48. County governments in Kenya are headed by
 A. mayors B. commissioners
 C. governors D. speaker
49. Below are characteristics of a type of vegetation found in Eastern Africa:
 (i) It consists of a few trees and grass
 (ii) It covers large parts of Kenya and Central Tanzania
 (iii) It is found in areas with seasonal rainfall
 The vegetation type described is
 A. Savannah grassland
 B. Miombo woodland
 C. Semi-desert vegetation
 D. Wooded savannah

50. Lake Nakuru National Park is famous because
 A. it is salty lake
 B. it is an important site for birds
 C. it is a beautiful place
 D. it has many hot springs

Use the map of Kenya to answer questions 51 to 54.



51. Name the town marked A
 A. Garissa B. Mandera
 C. Wajir D. Kisumu
52. The national park marked B is called
 A. Malka Mari National Park
 B. Sibiloi National Park
 C. Ruma National Park
 D. Tsavo East National Park
53. The mountain marked C is called
 A. Mt. Meru B. Mt. Kenya
 C. Mt. Elgon D. Mt. Marsabit
54. The lake marked D on the map was formed as a result of
 A. faulting B. downwarping
 C. deposition D. human activities
55. Which of the following statements is not true?
 A. Domestic trade is also referred to as International trade
 B. A good transport network is necessary for trade to grow.
 C. High taxes make imports more expensive
 D. Most countries in Eastern Africa produce almost similar products
56. Which of the following forms of transport is least developed in Eastern Africa?
 A. Air. B. Pipeline.
 C. Road. D. Water

57. The most effective way of communicating information to the majority of Kenyans is by use of
- A. televisions B. mobile phones
C. newspapers D. radios
58. Which of the following is not an arm of the government in Kenya?
- A. Executive. B. Judiciary.
C. Legislature. D. Cabinet.
59. The headquarters of East Africa community are situated at
- A. Arusha B. Nairobi
C. Addis Ababa D. Dar es salaam
60. The below road sign shows that



- A. there is no through pass
B. road is closed
C. there are bumps ahead
D. there is no entry

SECTION II

CHRISTIAN RELIGIOUS EDUCATION

61. Which one of the following is **not** a reason why man is a special creation?
- A. He named all the animals.
B. He was created in the image of God
C. He has dominion over the earth
D. He was created by the word of mouth
62. Which one of the following was a sign of the covenant between God and Noah?
- A. The rainbow
B. The birth of the messiah
C. Circumcision
D. Flaming torch
63. Which one of the following was **not** done by the Israelites on the Passover night?
- A. Eating of leavened bread
B. Eating of bitter herbs
C. Eating of roasted meat
D. Eating while standing
64. Who among the following was gifted God with the ability to work in gold, silver and bronze?
- A. Bezalel B. Jacob
C. David D. Nathan
65. Jezebel the wife of Ahab planned the murder of Naboth. This teaches Christians to
- A. pray for their enemies
B. respect their leaders
C. be contented with what they have
D. protect their property
66. The ten commandments were meant to
- A. make the Israelites defeat themselves
B. separate the Israelites from other people
C. guide the Israelites to righteousness
D. ensure that the Israelites fought other people
67. Which of the following was David's talent?
- A. performing miracles
B. playing the harp
C. preaching
D. explaining the dreams
68. Gideon was able to defeat the Midianites mainly because he
- A. had better weapon
B. trucked the midianites
C. increased the size of his army
D. obeyed God
69. Who among the following prophets was chosen by God before he was born?
- A. Ezekiel B. Isaiah
C. Jeremiah D. Hosea
70. Why did Jesus tell parables while teaching?
- A. Confuse his opposers
B. To show off
C. To make his sermons interesting
D. To be more famous
71. Which of the following happened on the day of Pentecost?
- A. Jesus resurrected
B. Disciples were filled with the Holy Spirit
C. Zacheaus climbed a sycamore tree
D. Disciples shared meals
72. Which of the following is taught in the Lords prayer
- A. God's anger on human disobedience
B. Forgiveness of sins
C. Resurrection of the dead
D. Crucification of Jesus Christ
73. According to the beautitudes; **Happy are those who work for peace**
- A. God shall comfort them
B. God shall call them His children
C. for they shall see God
D. They shall receive what God had promised

74. After the floods, Noah's ark rested on Mount _____
A. Ararat B. Sinai
C. Nebo D. Carmel
75. The phrase that all scriptures are inspired by God means
A. God himself wrote the Bible
B. God dictated the words of the Bible to all writers
C. God availed a written document to all writers
D. All writers wrote with the help of the Holy Spirit
76. Which of the following words are **not** in the apostles creed?
A. I believe in God father almighty
B. He descended into heaven
C. He will come to judge the living and the dead
D. Born of Virgin Mary
77. Which of the following events took place first
A. Jesus turning water into wine at Cana
B. The coming of the Holy Spirit in Jerusalem
C. The death of Jesus
D. The last supper
78. _____ is the ability to notice something after thinking carefully or after studying it
A. Discernment
B. Judgement
C. Justice
D. Critical thinking
79. Which is the **main** way of receiving eternal life
A. confession of our sins
B. participating in the holy communion
C. participating in prayers
D. having faith in Jesus
80. Which of the following miracles of Jesus showed that He had power to forgive sins?
A. Walking on water.
B. Turning water into wine.
C. Healing the paralysed man
D. Feeding the five thousand men
81. Which one of the following is the **best** way of helping refugees?
A. Giving them identity cards
B. Employing them as househelps
C. Making their living better
D. Building permanent homes for them
82. Which one of the following is **not** a ceremony marking new life?
A. Death. B. Birth.
C. Baptism. D. Winning a race.
83. The following are ways that make us be infected with HIV/AIDS. Which one is not?
A. Sharing sharp piercing objects.
B. Abstaining from sexual intercourse
C. Having multiple sexual partners
D. Having infected blood transfusion
84. According to *John 13* Jesus Christ washed His disciples feet to show
A. kindness and obedience
B. love and kindness
C. sincerity and humility
D. humility and service
85. The following are reasons why Christians pray **except**
A. praise and thank God
B. condemn their enemies
C. ask for forgiveness from God
D. asks for protection against enemies
86. Purity means
A. sharing with the needy
B. living in holiness
C. serving others as Jesus did
D. accepting ourselves the way we are
87. Which of the following is remembered during Easter period
A. Condemnation of Jesus by Pilate
B. Death and resurrection of Jesus
C. Betrayal of Jesus
D. Last supper
88. How can Christians help in choosing the government leaders?
A. Protesting in the streets
B. Converting them to Christianity
C. Accepting their bribes
D. Voting them peacefully
89. Below are effects of irresponsible boy/girl relationship **except**
A. School dropouts
B. Abortion
C. Teenage pregnancies
D. Perfect marriage
90. In the parable of the mustard seed the seed represents the
A. Kingdom of God
B. Word of God
C. Holy Spirit
D. Sins of the people

