

SCIENCE AND TECHNOLOGY

GRADE 4 - 2020

Name

Gender: Boy

Girl

School name

The teacher to fill the grid below after marking the learner's work.

	Science&Technology	Agriculture	Homescience
Number of marks	20	20	20
Marks scored			

SCIENCE AND TECHNOLOGY

1. Identify and name **four** living things in your locality (4mks)

(a) _____

(b) _____

(c) _____

(d) _____

2. Name any **four** non-living things in your locality(4mks)

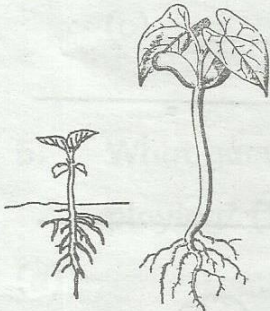


(a) _____

(b) _____

(c) _____

(d) _____





3. Which characteristic of plant as living thing is shown in the picture?(4mks)

Picture	Characteristic
	
	
	

TW - 002

1 Science and Technology/Agriculture/H/Science GRADE. 4

4. Name the following safety items when working in a farm(4mks)

Item	Name
	
	
	
	

5. Identify any four characteristics of plants as living things (4mks)

(a) _____

(b) _____

(c) _____

(d) _____

AGRICULTURE

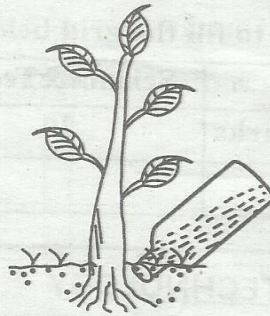
1. Why is soil important?(2mks)

(a) _____

(b) _____

2. What type of irrigation is this?

(1mk)




3. Why is drip irrigation an important method of irrigation? (2mks)

(a) _____

(b) _____

4. Name this fruit (1mk)



5. Why do we soak the guava seeds before planting? _____

(1mk)

6. Write three uses of water in the farm (3mks)

(a) _____

(b) _____

(c) _____

7. Write materials that are used in preparation of a compost manure (5mks)

(a) _____

(b) _____

(c) _____

(d) _____

(e) _____

8. What is this boy doing? (2mks)



9. Observe these soils and name them (3mks)



HOMESCIENCE

1. What are the needs of a child for a healthy development?(2mks)

(a) _____

(b) _____

2. How do you rest when you are tired? _____ (1mk)

3. Name two materials used to clean toilet or latrine (2mks)

(a) _____

(b) _____

4. Name three materials used as bedding at your home (3mks)

(a) _____

(b) _____

(c) _____

5. What games are these children playing? (3mks)

(a) _____



(b)



(c)



6. Write **two** healthy practices that prevent illness(2mks)

(a) _____

(b) _____

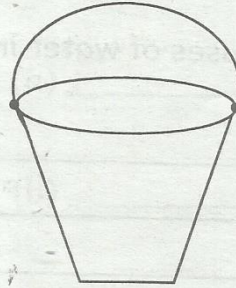
7. What are some of the common illness in your area? (2mks)

(a) _____

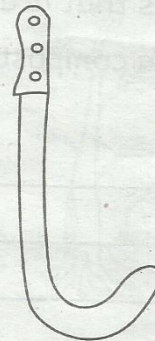
(b) _____

8. Name the cleaning materials shown. (3mks)

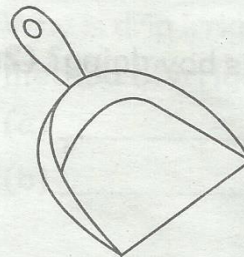
(a)



(b)



(c)



9. Name **four** materials that are used for making shoes (2mks)

(a) _____

(b) _____