

MATHEMATICAL ACTIVITIES

GRADE 3 - 2020

Name

Gender:

Boy






Girl

School name

The teacher to fill the grid below after marking the learner's work.

Strand	Numbers	Measurement	Geometry
Question numbers	1 - 7	8 - 9	10
Number of questions	41	5	4
Number of questions correct			

1. Use this table to answer the following questions (5mks)

				
ball	cup	tree	table	pencil

- (a) What is the position of the tree? _____
- (b) The ball is in position _____
- (c) The table is in the _____ position.
- (d) The pencil is in the _____ position
- (e) The cup is in the _____ position.

2. Count in 2's forward. (10marks)

- (a) 26, 28, _____, 32, 34, _____
- (b) 40, 42, _____, 46, _____, 50
- (c) 110, _____, 114, 116, _____
- (d) 200, 202, _____, 206, _____, 210
- (e) 60, 62, _____, 66, 68, _____

3. Count in 5's backward or forward. (10marks)

- (a) 5, 10, _____, 20, 25, _____
- (b) 60, _____, 50, 45, _____, 35
- (c) 90, _____, 100, 105, _____
- (d) 35, _____, 25, 20, _____, 10
- (e) 70, 75, _____, _____, 90

4. **What is the place value of 4 ? (4marks)**

(a) 4396 _____

(b) 640 _____

(c) 5412 _____

(d) 24 _____

5. **Place value. (5marks)**

(a) 942 = _____ hundreds _____ tens _____ ones.

(b) 1000 = _____ thousands _____ hundreds _____ tens _____ ones.

(c) 8615 = _____ thousands _____ hundreds _____ tens _____ ones.

(d) 4 thousands 7 hundreds 0 tens 6 ones = _____

(e) 7 hundreds 3 tens 5 ones = _____

6. **Write these numbers in words. (5marks)**

(a) 50 _____

(b) 25 _____

(c) 39 _____

(d) 41 _____

(e) 66 _____

7. **Write these numbers in figures. (2marks)**

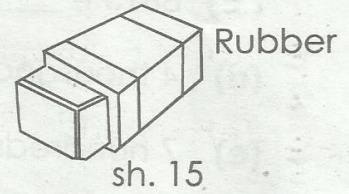

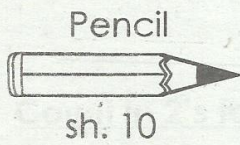
(a) One thousand _____

(b) Nine hundred and two _____

8. **Add. (3marks)**



9.



- (a) How much did John use to buy two books? _____ (1mk)
 (b) How much is one pencil and one rubber? _____ (1mk)

10. **Draw these shapes (4mks)**

Triangle

Circle

Square

Rectangle

Total = (50marks)

