

MATHEMATICAL ACTIVITIES

GRADE 2 - 2020

Name

Gender:

Boy

Girl

School name

The teacher to fill the grid below after marking the learner's work.

Strand	Numbers	Measurement	Geometry
Question numbers	1 - 5	6 - 9	10
Number of marks	36	6	8
Number of marks scored			

1. Write the missing numbers.

(10mks)

1. 14, 15, _____, _____, 18

2. 29, 30, 31, _____, _____, 34

3. 40, 41, _____, _____, 44, 45

4. 95, _____, _____, 98, 99, 100

5. 20, _____, _____, 23, 24, 25

2. Count in fives and fill in the missing numbers.


(10mks)

5, _____, 15, 20, _____, 30, 35, _____, _____, 50, 55, _____,
_____, _____, 75, 80, _____, _____, _____, 100.

3. Count and write how many.

(5mks)

 = _____

 = _____

 = _____

 = _____

 = _____

4. Place value.

(5mks)

16 = _____ tens _____ ones.

23 = _____ tens _____ ones.

30 = _____ tens _____ ones

9 tens 9 ones = _____

4 tens 3 ones = _____

5. Write in words or in figures.

(6mks)

10 - _____

Twelve - _____

Sixteen - _____

8 - _____

7 - _____

11 - _____

6 A week has _____ days.

(1mk)

7.



(1mk)

_____ shilling coin.

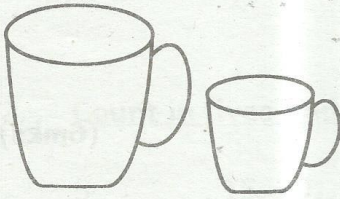
8. Circle the coin than has the highest value.

(2mks)



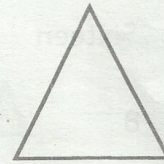


9. Circle the one that holds less.


(2mks)



10. Name the shapes.

(10mks)





Total = (50marks)

Work covered = Number concept, whole numbers, previous grade.