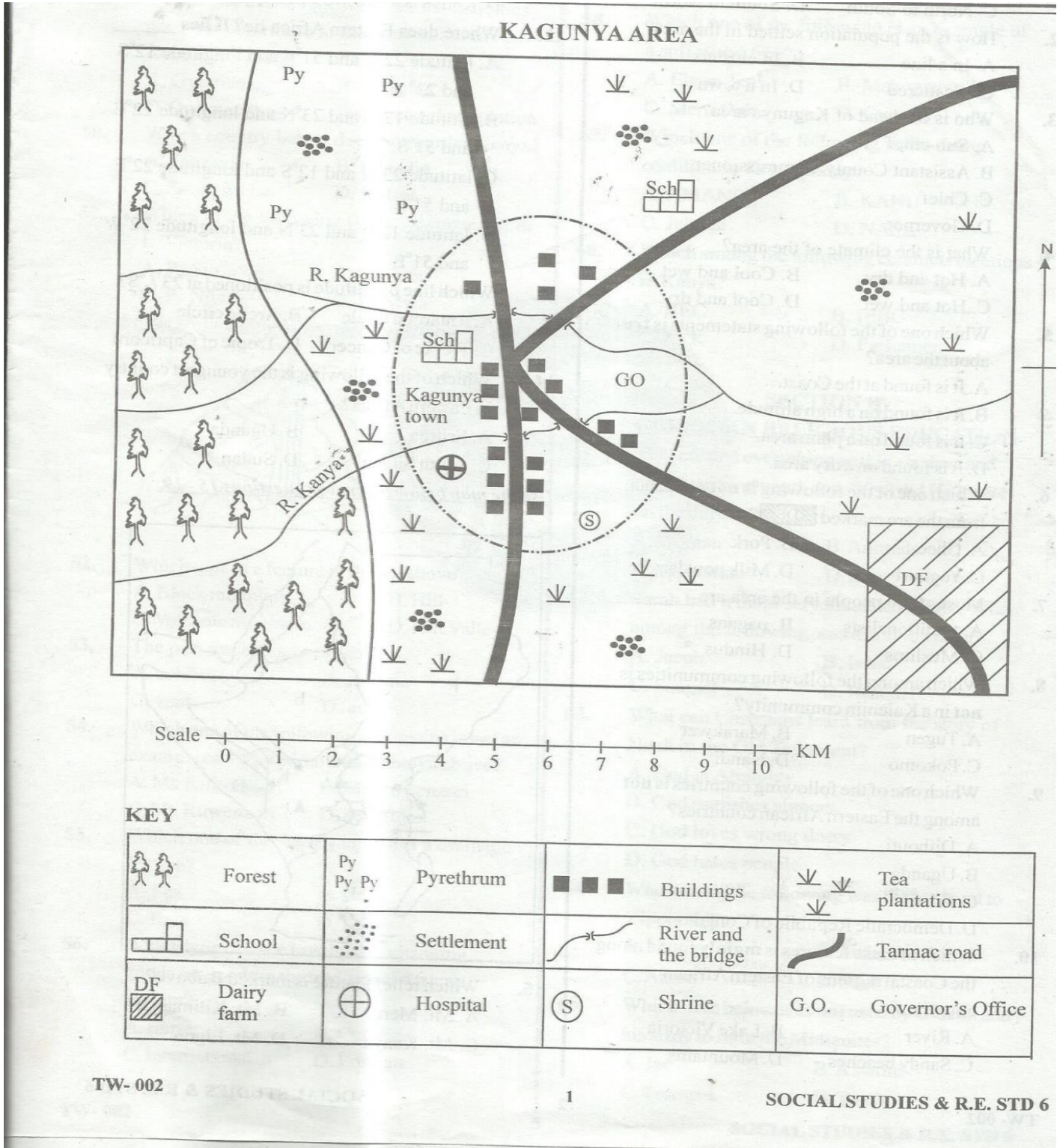



STANDARD 6 SOCIAL STUDIES

MID-TERM 1 2020

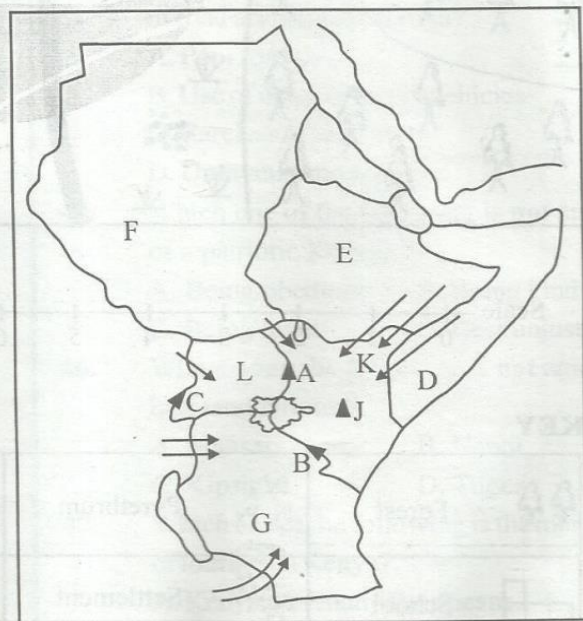


Study the map of Kagunya Area above and then answer questions 1 to 7.

- River Kagunya is flowing from _____ to _____
 A. West to East B. East to West
 C. North to South D. South to North
- How is the population settled in the area?
 A. In a line B. In clusters
 C. Scattered D. In a town
- Who is the head of Kagunya area?
 A. Sub-chief
 B. Assistant County Commissioner
 C. Chief
 D. Governor
- What is the climate of the area?
 A. Hot and dry B. Cool and wet
 C. Hot and wet D. Cool and dry
- Which one of the following statements is **true** about the area?
 A. It is found at the Coast.
 B. It is found on a high altitude.
 C. It is found on a plain area.
 D. It is found on a dry area.
- Which one of the following is **not** a product from the area marked ?
 A. Ghee B. Pork
 C. Yoghurt D. Milk powder
- Most of the people in the area are _____
 A. traditionalists B. pagans
 C. Muslims D. Hindus
- Which among the following communities is **not** in a Kalenjin community?
 A. Tugen B. Marakwet
 C. Pokomo D. Nandi
- Which one of the following countries is **not** among the Eastern African countries?
 A. Djibouti
 B. Uganda
 C. Eritrea
 D. Democratic Republic of Congo
- Which of these features is **mainly** found along the Coastal regions of Eastern African countries?
 A. River B. Lake Victoria
 C. Sandy beaches D. Mountains

- Which one of the following statements describes the position of Kenya?
 A. Kenya is to the East of Somalia.
 B. Kenya is to the South of South Sudan.
 C. Kenya is to the North of Ethiopia.
 D. Kenya is to the West of Uganda.
- Where does Eastern Africa lie? It lies _____
 A. latitude 22°E and 51°E and longitude 12°S and 23° N.
 B. latitude 12°E and 23°N and longitude 22°E and 51°S.
 C. latitude 23°N and 12°S and longitude 22°E and 51°E.
 D. latitude 12°S and 23°N and longitude 22°E and 51°E
- Which line of latitude is positioned at 23½°S?
 A. Antarctic circle B. Arctic circle
 C. Tropic of Cancer D. Tropic of Capricorn
- Which of the following is the youngest country in Eastern Africa?
 A. Eritrea B. Uganda
 C. South Sudan D. Sudan

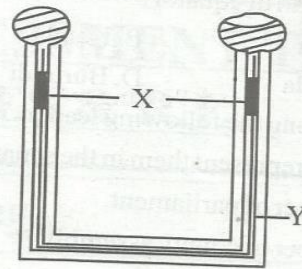
Use the map below to answer questions 15 - 19.



- Which relief feature is marked **B** above?
 A. Mt. Meru B. Mt. Kilimanjaro
 C. Mt. Kenya D. Mt. Elgon

16. Which language group followed route K?
 A. Cushites B. Nilotes
 C. Bantu D. Semites
17. Which of the labelled countries is Ethiopia?
 A. D B. F
 C. G D. E
18. Which country above is **not** landlocked?
 A. F B. L
 C. G D. E
19. Which country above has the largest Coastline?
 A. G B. D
 C. L D. F
20. Which lakes below were formed as a result of downwarping?
 A. L. Victoria, L. Kyoga.
 B. L. Turkana, L. Victoria.
 C. L. Tanganyika, L. Magadi
 D. L. Nakuru, L. Kyoga.
21. Which one of the following is **not** among the physical features that affects the way people are distributed?
 A. Climate B. Relief
 C. Trade D. Soil
22. All primary schools follow a daily programme of activities called
 A. assembly B. notes
 C. register D. timetable
23. Which community below migrated from the Congo forest?
 A. Pokomo B. Maasai
 C. Pokot D. Illchamus
24. One of the following is a processing industry. Which one is it?
 A. Cement industry B. Coffee industry
 C. Insurance D. Shoe polishing
25. All the following are examples of table lands. Which one is **not**?
 A. Nyika B. Uasin Gishu
 C. Lorian D. Yatta

Use the diagram below to answer questions 26 - 28.



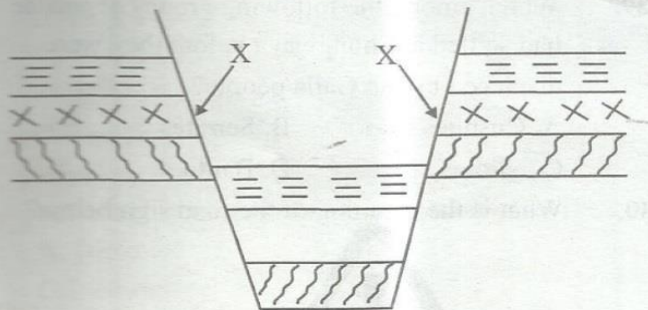
26. What is the name given to the weather instrument shown above?
 A. The Six's thermometer.
 B. The raingauge.
 C. The hygrometer.
 D. The anemometer.
27. Which one of the following is the name given to the parts labelled x above?
 A. Mercury B. Metal index
 C. Alcohol D. Glass tube
28. Which weather element is measured by the instrument shown above?
 A. The amount of water in the air.
 B. The speed of wind of a place.
 C. The amount of rainfall.
 D. The hotness or coldness of a place.
29. Which among the following groups of people had settled at Shungwaya before they were displaced by the Galla people?
 A. Cushites B. Semites
 C. Nilotes D. Bantu
30. What is the meaning of the road sign below?



- A. Motorists to park nearby.
 B. Motorists to stop.
 C. Motorists to overtake carefully.
 D. Motorists to drive carefully.
31. Which one of the following areas in Kenya is densely populated?
 A. Turkana B. Kiambu
 C. Mandera D. Garissa

32. Which one of the following countries is found to the North of equator?
 A. Eritrea B. Kenya
 C. Rwanda D. Burundi
33. Who among the following leaders is elected by voters to represent them in the senate?
 A. Member of parliament.
 B. Member of county assembly.
 C. Senator.
 D. Women representative.
34. Which one of the following is a secondary needs?
 A. T-shirt and a short B. Manyatta
 C. Fish D. Car
35. Which is the major source of government income in Kenya?
 A. Fines B. Tax
 C. Selling public land D. Loans
36. Which one of the following is the **main** duty of a police officer?
 A. Keeping law and order.
 B. Arresting criminals.
 C. Guarding leaders.
 D. Punishing law breakers.

Use the diagram below to answer questions 37-39.

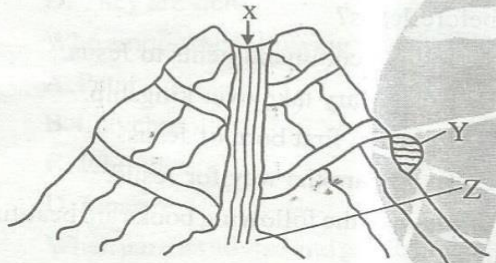


37. What process is involved in the formation of the above feature?
 A. Faulting and uplifting.
 B. Volcanicity.
 C. Folding.
 D. Faulting and sinking.
38. The parts marked X are called _____
 A. escarpments B. sides
 C. slopes D. steeps

39. Which feature is formed above?
 A. The L. Victoria
 B. The Great Rift Valley
 C. Mt. Kenya
 D. A plateau
40. Which one of the following is **not** an arm of the government?
 A. Legislature B. Judiciary
 C. Cabinet D. Executive
41. Which one of the following is **not** a modern fishing method?
 A. Long lining B. Net drifting
 C. Trawling D. Hook and line
42. Which one of the following is **true** about the latitudes?
 A. They are parallel to each other and they never meet.
 B. They meet at the poles.
 C. They are the longest.
 D. One of the latitudes is the Greenwich Meridian.
43. How many devolved governments are there in Kenya according to the new constitution?
 A. 12 B. 47
 C. 68 D. 1
44. Which one of the following is the major cause of road accidents in Kenya?
 A. Poor roads.
 B. Use of unroadworthy vehicles.
 C. Careless of road users.
 D. Unfavourable weather.
45. Which one of the following is **not** an element of a patriotic Kenyan?
 A. Being obedient. B. Being kind.
 C. Being loyal. D. Best unjust.
46. Who among the following is **not** among the highland Nilotes?
 A. Maasai B. Nandi
 C. Kipsigis D. Tugen
47. Which one of the following is the major benefit of tourism in Kenya?
 A. Kenya gets many Europeans.
 B. Kenya earns foreign currency.
 C. There is increased poaching.
 D. There is increased insecurity.

48. Why were people in Kenya counted in 2019?
 A. To build roads for them.
 B. To provide loans for them.
 C. To be able to budget for them.
 D. To know the number of children.
49. Which one of the following human activities does **not** contribute to the destruction of forests in Kenya?
 A. Overfishing
 B. Logging
 C. Overstocking
 D. Increased population
50. Which country below does **not** border Kenya?
 A. Tanzania
 B. Somalia
 C. South Sudan
 D. Eritrea
51. Which of the following rivers originates from L. Victoria?
 A. R. Sio
 B. R. Tana
 C. R. Nile
 D. R. Mara
57. Which one of the following is a modern way of passing information from one person to another?
 A. Horns
 B. Internet
 C. Messengers
 D. Drums
58. Which one of the following is an example of a soft wood tree?
 A. Elgon Teak
 B. Mahogany
 C. Meru Oak
 D. Cypress
59. Which one of the following is the ruling coalition in Kenya today?
 A. AMANI
 B. KANU
 C. Jubilee
 D. NASA
60. Which among the following conducts elections in Kenya?
 A. IIEC
 B. IEBC
 C. ACK
 D. Parliament

Use the diagram below to answer questions 52 - 54.



52. Which type of a feature is shown above?
 A. Block mountain
 B. Hill
 C. Volcanic mountain
 D. Rift Valley
53. The part marked x is called
 A. caldera
 B. magma
 C. vent
 D. ash
54. Which one of the following mountains is **not** an example of a type of mountain shown above?
 A. Mt. Kilimanjaro
 B. Mt. Ruwenzori
 C. Mt. Ruwenzori
 D. Mt. Elgon
55. Which one of the following is **not** a drainage feature?
 A. Sea
 B. River
 C. Rain
 D. Lake
56. Which type of trade involved exchanging goods for goods in the traditional African society?
 A. Barter
 B. Currency
 C. International
 D. Foreign
61. God created everything within six days and rested on the seventh day. What did He create on the third day?
 A. Woman
 B. Animals
 C. Vegetation
 D. Sky
62. Sarah had a maid servant called Hagar. Who among the following was a son to Hagar?
 A. Jacob
 B. Isaac
 C. Samuel
 D. Ishmael
63. What can Christians learn from the story of Noah in the Old Testament?
 A. God is Almighty
 B. God punishes sinners.
 C. God loves wrong doers.
 D. God hates people.
64. Who among the following was the husband to Zipporah?
 A. Moses
 B. Joshua
 C. Aaron
 D. Saul
65. Which item below was **not** used by Gideon and his army to fight the Midianites?
 A. Jar
 B. A sword
 C. Trumpet
 D. Torch

SECTION B

CHRISTIAN RELIGIOUS EDUCATION

66. Who among the following people used his gift of wisdom to judge the case between two women?
 A. Samson B. David
 C. Solomon D. Saul
67. "A prophet will be born in a small city of Bethlehem." Who among the following prophesied this?
 A. Isaiah B. Jeremiah
 C. Joel D. Micah
68. Who among the following prophets prophesied about the triumphant entry into Jerusalem of the Messiah riding on a donkey?
 A. Nathan B. Zechariah
 C. Micah D. Joel
69. Prophet Isaiah gave Jesus many names as given below? Which name below was **not** among them?
 A. Lamb of God.
 B. Prince of Peace.
 C. Wonderful counselor
 D. Mighty God
70. Which one of the following books of the Bible is **not** among the Gospels?
 A. Matthew B. Luke
 C. Acts D. Mark
71. Mary knew that she would be the mother of Jesus when she
 A. dreamt about it.
 B. was taken by Joseph as his wife.
 C. was in the temple.
 D. was told by Angel Gabriel.
72. Which of the following parables teaches Christians that they should be kind?
 A. Good Samaritan.
 B. Mustard seed.
 C. Prodigal son.
 D. The yeast.
73. Who among the following people climbed on a tree to see Jesus as He was passing by?
 A. John B. Zachaeus
 C. Levi D. James
74. Which one of the following actions shows that Jesus wanted a holy temple?
 A. Chasing traders from the temple.
 B. Forgiving the sinners.
 C. Naming new deacons.
 D. Building new churches.
75. How long did Jesus pray and fasted in the wilderness when Satan tested Him?
 A. 4 days and nights.
 B. 40 days and nights.
 C. 400 days and nights.
 D. 4 hours and nights.
76. Who among the following people was baptized by Philip?
 A. Maid servant B. Paul
 C. Ethiopian Eunuch D. Isaiah
77. Why did John the Baptist come slightly before Jesus?
 A. To give commandments to Jesus.
 B. To let Mary take over kingship.
 C. To be the first born of Jesus.
 D. To prepare the way for Jesus.
78. In which of the following books are beatitudes found?
 A. Ephesians B. Acts
 C. Matthew D. John
79. Which one of the following is **not** a fruit of the Holy Spirit?
 A. Healing B. Joy
 C. Peace D. Faithfulness
80. In traditional African society, children were **not** shown to strangers because
 A. some people had good morals.
 B. some people were thought to have evil eyes.
 C. some strangers would give them gifts.
 D. some would bless their children.
81. Who among the following is an ancestor?
 A. A person who died before we were born.
 B. A person who is old but still living.
 C. Those who died and we know them.
 D. Those who are not yet born.

82. Who among the following taught young people good morals in traditional African society?
- The teachers
 - The older friends.
 - The grandparents.
 - The uncles.
83. Which of the following is **correct** about those people who wrote the Bible?
- They are all ancestors.
 - They were chosen by Jesus.
 - They became rich.
 - The Holy Spirit inspired them.
84. Why should Christians respect our leaders?
- God has chosen them.
 - God will punish them.
 - They are free people.
 - They are rich.
85. Who among the following was raised by Paul?
- Peter
 - Eutychus
 - John
 - Jonah
86. When parents advise and guide their children, they show that
- they hate them.
 - they disrespect them.
 - they love their children.
 - they enjoy their company.
87. What should you do as a Christian when a classmate refuses to clean the class at all?
- Tell his parents.
 - Laugh at him.
 - Beat him up.
 - Report to the class teacher.
88. You have found out that one of your friends is taking drugs. What should you do as a Christian?
- Inform him about the dangers of taking drugs.
 - Join him.
 - Tell him to keep it up.
 - Tell his other friends.
89. Which is the **best** way in which one can spend his free time?
- Visit a friend.
 - Go to a game park.
 - Watch a movie.
 - Help the old people.
90. Why should Christians preach to other people?
- To keep ourselves busy.
 - To please our pastors.
 - Jesus commanded us to do so.
 - To spend our time well.

SECTION B

ISLAMIC RELIGIOUS EDUCATION

61. Allah created the earth in
- | | |
|-----------|-----------|
| A. 5 days | B. 6 days |
| C. 7 days | D. 8 days |
62. The **best** of Allah's gifts can be found in
- | | |
|------------|-----------|
| A. sea | B. land |
| C. animals | D. bodies |
63. Who is not among the recipient of Zakaat?
- | | |
|------------|------------|
| A. Needy | B. Orphans |
| C. Debtors | D. Slaves |
64. Qabila killed Habila because of
- | | |
|---------------|--------------|
| A. revenge | B. jealousy |
| C. friendship | D. confusion |
65. The wife of prophet Adam gave birth to
- | | |
|---------------------|-------------------|
| A. twins. | B. baby boy only. |
| C. baby girls only. | D. many children. |
66. Which one is **not** an attribute of Allah?
- | | |
|--------------|----------------|
| A. Al-Baar | B. Al-Mussawir |
| C. Al-Razaaq | D. Al-Khaliq |
67. The first two children of Adam are
- | | |
|----------------------|--------------------|
| A. Mahammad and Isa | B. Aziz and Uzza |
| C. Qabila and Habila | D. Habil and Adam. |
68. Lailatul-Qadr means
- | | |
|------------------------|----------------------|
| A. the night of power. | B. the night of men. |
| C. the night of Iblis. | D. none of these. |

69. Allah created mankind in order to be His
 A. *khalifa* B. *friend*
 C. *enemy* D. *defender*
70. Qabliyah prayer before Fajr are
 A. 4 B. 3
 C. 2 D. 5
71. There is no baadiyah after
 A. *Dhuhr and Isha*
 B. *Fajr and Asr*
 C. *Maghrib and Isha*
 D. *Ast and Dhuhr*
72. When doing P.E. girls can wear
 A. *shorts* B. *short skirt*
 C. *sleeveless t-shirts* D. *full sport wear*
73. The night of power is better than _____ months.
 A. 1000 B. 83
 C. 100 D. 30
74. Which prayer does not have baadiyah?
 A. *Fajr* B. *Asr*
 C. *Maghrib* D. *Ishai*
75. Signs of Munafiq are
 A. 4 B. 2
 C. 3 D. 5
76. Marriage ceremonies are called
 A. *Talaq* B. *Nikah*
 C. *Mahr* D. *Tyn*
77. The neighbour who has three rights is
 A. *your neighbour who is your relative and Muslim.*
 B. *neighbour who is a Muslim.*
 C. *your neighbour who is not a Muslim.*
 D. *your poor neighbour who is a Muslim.*
78. Surah Al-Takaathur
 A. *talks about horses.*
 B. *warns about competing wealth.*
 C. *calls for love towards orphans.*
 D. *stresses the belief.*
79. Which is the **best** obligation to our relatives?
 A. *Keeping off harm.*
 B. *Visiting sick.*
 C. *Giving them parent.*
 D. *Knowing their conditions.*
80. The Surah that says that people will be like scattered moth is
 A. *Qaariah* B. *Falaq*
 C. *Nas* D. *Fyn*
81. After sneezing you say
 A. *Subhanallah* B. *Yarhamkullah*
 C. *Alhamdullilah* D. *Mashaallah*
82. The prophet sent Musab-bin-umeir to teach people of
 A. *Makkah* B. *Madina*
 C. *Egypt* D. *Abysnia*
83. The sayings of the prophet are called
 A. *furgan* B. *hadith*
 C. *seerah* D. *sunnah*
84. Which one cannot spoil fast?
 A. *Back biting* B. *Sexual desire*
 C. *False oath* D. *Greeting*
85. Al-Qahhar is an attribute of Allah. It means
 A. *king* B. *dominant*
 C. *provider* D. *merciful*
86. Which one is **not** a quality of prophets?
 A. *Proud* B. *Truthful*
 C. *Honest* D. *Intelligent*
87. Which one is **not** a condition of fasting?
 A. *Person must be clean* B. *Be a Muslim*
 C. *Abstaining from eating.* D. *Baligh*
88. The Surah that says that worldly wealth will not benefit us is
 A. *Qaariah* B. *At-Takathur*
 C. *Falaq* D. *An-Nas*
89. Swalatul Juma has _____ khutbah.
 A. 1 B. 2
 C. 3 D. 4
90. Adam was not allowed to eat from tree because
 A. *the tree was not good.*
 B. *it was dangerous.*
 C. *to test the tree.*
 D. *Iblis loved tree.*