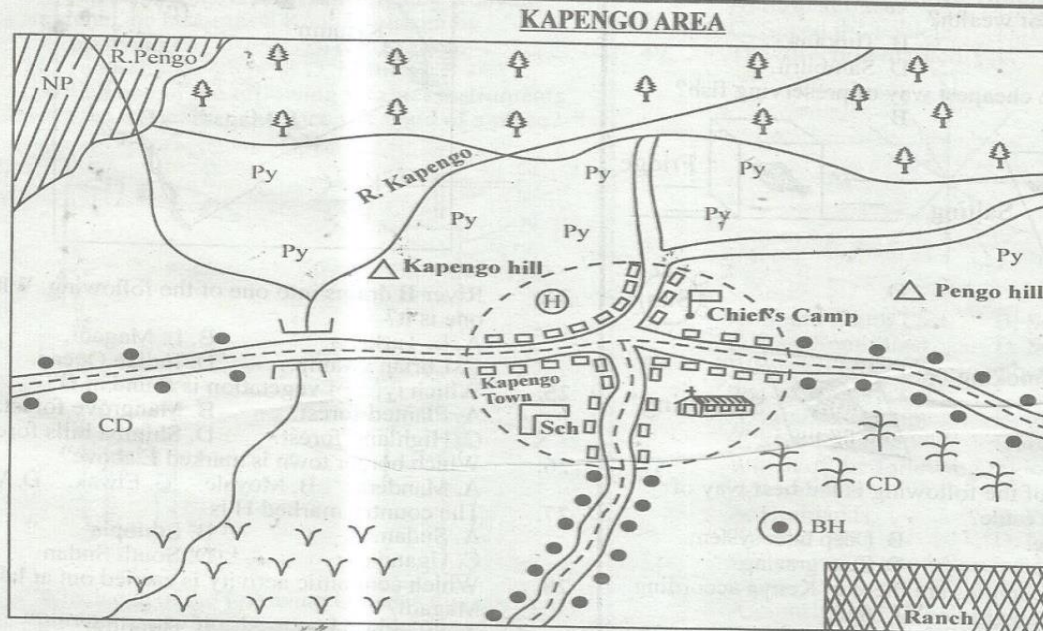


STANDARD 5 SOCIAL STUDIES MID-TERM 1 2020



KEY

	National Park		Hill		B.H Borehole
	Ranch		Church	CD	Cattle Dip
	Forest		Permanent building		Maize
Py Py	Pyrethrum		Settlements		School

Study the map of Kapengo Area above and then answer questions 1 to 7.

- What is the general flow of River Kapengo?
A. From South West to North East.
B. From West to North West.
C. From North East to South West.
D. From South East to North East.
- What is the climate of the Northern part of Kapengo Area?
A. Hot and wet. B. Cool and dry.
C. Hot and dry. D. Cool and wet.
- Who is the head of the area?
A. Sub-chief. B. Chief.
C. Governor. D. Senator.
- Most people in Kapengo area are likely to be
A. Christians. B. muslims.
C. pagans. D. hindus.
- Which of the following is **mainly** practised to the South Eastern region of Kapengo area?
A. Dairy farming. B. Irrigation farming.
C. Beef farming. D. Horticultural farming.

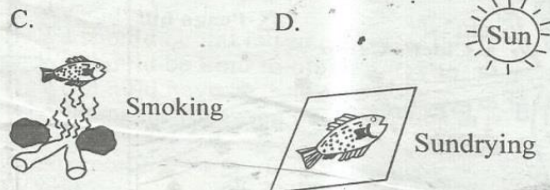
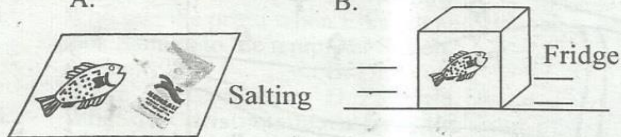
- Where have people **mainly** settled in Kapengo area?
A. Along the rivers. B. Along the roads.
C. Near the forest. D. Near the ranch.
- Which is the **main** economic activity near the ?
A. Tourism B. Poaching.
C. Wildlife. D. Hunting.
- Which one of the following is **not** a physical feature?
A. Hill. B. Plain.
C. River. D. Storey building.
- Which one of the following elements shows the extent of the area covered in a map?
A. Scale. B. Key.
C. Title. D. Frame.
- Which one of the following factors affects climate of a place?
A. Manure. B. Altitude.
C. Attitude. D. Soil.

TW- 002

1

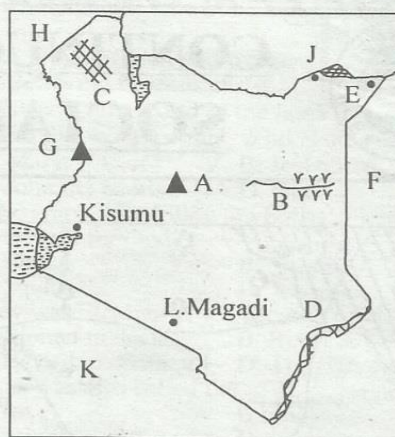
SOCIAL STUDIES & R.E. STD 5

11. When a river flows throughout the year, we say that the river is
 A. permanent. B. temporary.
 C. seasonal. D. medium.
12. Which one of the following types of soil is **mainly** found on majority of mountains in Kenya?
 A. Clay. B. Volcanic.
 C. Sandy. D. Alluvial.
13. Which community below did **not** rear livestock as their source of wealth?
 A. Rendile. B. Turkana.
 C. Ameru. D. Samburu.
14. Which is the cheapest way of preserving fish?
 A. B.



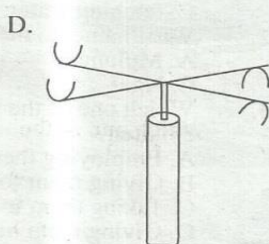
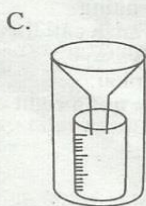
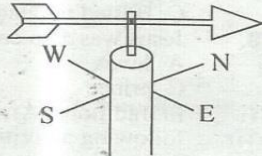

15. Which one of the following is the **best** way of rearing dairy cattle?
 A. Free range. B. Deep litter system.
 C. Ranching. D. Zero grazing.
16. How many counties are there in Kenya according to the new constitution of 2010?
 A. 12 B. 47 C. 7 D. 68
17. Which is the **best** climate for rearing cattle for their beef?
 A. Hot and dry. B. Hot and wet.
 C. Cool and dry. D. Cool and wet.
18. Through which one of the following ways don't we interact with one another today?
 A. In schools. B. Intermarriage.
 C. War. D. Games and sports.
19. After how long are general elections normally held in Kenya?
 A. 2022 B. 2017 C. 7 years. D. 5 years.
20. Which one of the following crops is of indigenous type?
 A. Tea. B. Cassava.
 C. Cocoa. D. Coffee.
21. When motorists are careless on roads, they cause
 A. road accidents.
 B. journey to be covered within a short time.
 C. unnecessary delays on the roads.
 D. Security.
22. Which one of the following is an importance of fish?
 A. Provide us with security.
 B. Provide us with food.
 C. Provide us with water.
 D. Provide us with nets.
23. Who among the following is **not** found in the county Assembly?
 A. Speaker.
 B. Deputy speaker
 C. Member of parliament(MP)
 D. M.C.A

Use the map below to answer the questions that follow



24. River B drains into one of the following. Which one is it?
 A. L. Turkana. B. L. Magadi.
 C. Lorian swamp. D. Indian Ocean.
25. Which type of vegetation is found at D?
 A. Planted forest. B. Mangrove forest.
 C. Highland forest. D. Shimba hills forest.
26. Which border town is marked E above?
 A. Mandera. B. Moyale. C. Elwak. D. Wajir.
27. The country marked H is
 A. Sudan. B. Ethiopia
 C. Uganda D. South Sudan
28. Which economic activity is carried out at lake Magadi?
 A. Swimming. B. Hunting.
 C. Mining. D. Fishing.
29. In which one of the following places are artifacts collected and stored?
 A. Museums. B. Granary.
 C. Library. D. Room.
30. What do we call the chicken kept for meat **only**?
 A. Layers. B. Broilers.
 C. Chicks. D. Hens.
31. Which one of the following characteristics represents planted forests?
 A. They grow on their own.
 B. They take a long time to mature.
 C. They are planted in rows.
 D. They are evergreen.
32. Which one of the following is an importance of trees?
 A. They cause fire.
 B. They create a desert.
 C. They cause death to animals.
 D. They give us food.
33. Which of the following lakes cannot provide fish?
 A. L. Turkana. B. L. Victoria.
 C. L. Magadi. D. L. Naivasha.
34. What do we call winds that are usually experienced in a given place regularly?
 A. Sea breeze. B. Land breeze.
 C. Regular winds. D. Prevailing winds.
35. What did the Arabs come to do in Kenya before the coming of the Europeans?
 A. To trade.
 B. To spread Islam.
 C. To colonize Africa.
 D. To act as tourists.

36. Who is the head of the county assembly?
 A. Governor.
 B. Speaker.
 C. Senator.
 D. Clerk of the county assembly.
37. Which one of the following titles represent the prophets among the Maasai community?
 A. Nabongo. B. Muthamaki.
 C. Oloibon. D. Orkoiyot.
38. When somebody is born in Kenya by Kenyan parents, he becomes a Kenyan citizen by
 A. applying. B. registration.
 C. request. D. birth.
39. Which one of the following weather instruments is used to measure the speed of wind of a place?
 A. B.

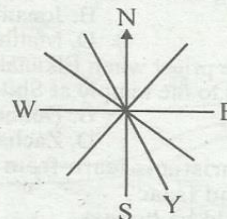


40. Which one of the following latitudes divides Kenya into two parts Northern and Southern part?
 A. Latitude 0° B. Longitude 0°
 C. Latitude 5°N D. Latitude 5°S
41. Which of the following national holidays is celebrated on 1st May of every year?
 A. Jamhuri day.
 B. Heroes and heroines day.
 C. Madaraka day.
 D. Labour day.
42. The growing of vegetables near towns is known as
 A. horticulture. B. market gardening.
 C. viticulture. D. zero grazing.
43. Which one of the following communities was known for participating in long distance trade?
 A. Kamba. B. Agikuyu.
 C. Ameru. D. Maasai.
44. Which one of the following types of fish is found in fresh water lakes?
 A. Parrot fish. B. Mackerel.
 C. Tilapia. D. Kingfish.
45. Which one of the following types of vegetation is commonly found in areas that are hot and dry?
 A. Cactus. B. Cypress.
 C. Papyrus reeds. D. Nappier grass.
46. From which one of the following communities did the Bantu learn the art of circumcision?
 A. Semites. B. Plain Nilotes.
 C. Highland Nilotes. D. Southern Cushites.
47. What type of vegetation grows along the river valleys?
 A. Rain forest. B. Savannah grassland.
 C. Mangrove. D. Riverine.

48. Kamau was driving his car on a road. He came across the road sign below. What should he have done?



- A. Stop at once. B. Overtake.
 C. Speed the vehicle. D. Drive with caution.
49. The direction marked Y is



- A. South South East. B. South East.
 C. East South East. D. South South West.
50. When we grow trees together with crops we say that we are practising
 A. mixed farming. B. tree cropping.
 C. agro forestry. D. commercial farming.
51. Which of the following regions is the best for pastoralism?
 A. Highlands. B. Plateaus.
 C. Lake basin. D. Coastal region.
52. Which one of the following is not an element of weather?
 A. Sunshine. B. Rain. C. Wind. D. Soil.
53. Which one of the following is the major problem that faces wildlife?
 A. Poor roads. B. Harsh climate.
 C. Poaching. D. Insecurity.
54. Who is the head of the County Executive Committee?
 A. Governor. B. Senator.
 C. Speaker. D. Commissioner.
55. Which body among the following conducts elections in Kenya?
 A. Parliament. B. IEBC
 C. Courts. D. Judiciary.
56. Who is the head of a division in Kenya?
 A. Commissioner.
 B. Governor.
 C. Deputy county commissioner.
 D. Assistant county commissioner.
57. Which is the most convenient mode of transport to many people in Kenya?
 A. Railway. B. Pipeline. C. Road. D. Air.
58. Which one of the following is a processing industry?
 A. Shoe making industry.
 B. Fruit processing industry.
 C. Insurance industry.
 D. Cement factory.
59. Which fish below is mostly got in L. Victoria at night by the fishermen?
 A. Dagaa. B. Tilapia.
 C. Mud fish. D. Kamongo.
60. Who became the second President of Kenya in 1978?
 A. Jomo Kenyatta. B. Daniel Arap Moi.
 C. Uhuru Kenyatta. D. Mwai Kibaki.

SECTION B

CHRISTIAN RELIGIOUS EDUCATION

61. What did God do on the seventh day?
A. He created the skies.
B. He created vegetation.
C. He created man and woman.
D. He rested.
62. In which book is the story of creation found?
A. Genesis. B. Exodus.
C. Revelation. D. Mark.
63. Who among the following people was a great friend of king David??
A. Peter. B. Jonathan.
C. Saul. D. Matthew.
64. Who was the priest when Elkanah and Hannah took Samuel to the temple at Shiloh?
A. Saul. B. Deborah.
C. Eli. D. Zacharia.
65. What do Christians learn from the story of Abraham and Isaac?
A. We should be honest.
B. We should be unkind to others.
C. We should be kind to others.
D. We should have faith in God.
66. Who among the following was **not** a king in Israel?
A. Solomon. B. Nathan.
C. Saul. D. David.
67. I went to heaven without dying here on earth. Who am I?
A. Enoch. B. Noah.
C. Moses. D. Amos.
68. For how many years did the drought last during the time of Elijah?
A. 2years. B. 1year.
C. 5years. D. 3years.
69. In which one of the following towns was Jesus brought up?
A. Bethlehem. B. Jericho.
C. Jerusalem. D. Nazareth.
70. In which of the following seasons do Christians celebrate the death and the resurrection of Christ? On
A. Easter. B. Advent.
C. Pentecost. D. Christmas.
71. Who among the following people did Jesus love most?
A. Peter. B. John.
C. James. D. Job.
72. Which disciple below did **not** go with Jesus to pray when He was transfigured?
A. John. B. James.
C. Andrew. D. Peter.
73. How did the Holy spirit descend upon the disciples of Jesus during pentecost?
A. In form of wind.
B. In form of an earthquake.
C. In form of a dove.
D. In form of tongues of fire.
74. I was a tax collector, I was a disciple of Jesus. Whom am I ?
A. Zachaeus. B. John.
C. Mark. D. Luke.
75. Which one of the following is a gift of the Holy Spirit?
A. Faithfulness. B. Healing.
C. Joy. D. Kindness.
76. What is a church?
A. A community of believers.
B. Those people who build a place for worshipping in.
C. A group of men and women.
D. Believing in Jesus christ.
77. Jesus was referred to as the lamb of God by one of the following people. Who is the one?
A. Mary. B. Joseph.
C. John the baptist. D. God.
78. Who among the following built the temple in Jerusalem for God?
A. David. B. Solomon.
C. Saul. D. Jonathan.
79. How was Stephen killed because of his faith?
A. Stoned to death. B. Burnt to death.
C. Buried to death. D. Through drowning.
80. Jesus was also called the _____ of peace.
A. love B. unity
C. prince D. joy
81. In traditional African society girls did all the following activities **except**
A. cooking. B. sweeping.
C. fetching water. D. fencing.
82. What name do the Luo of Nyanza call their God?
A. Mulungu. B. Nyasaye.
C. Ngai. D. Enkai.
83. Which one of the following is **not** a right of children?
A. Employing them for pay.
B. Giving them food.
C. Taking them to the hospital.
D. Giving them homework at school.
84. According to the traditional African society people believed that everything was created by
A. spirits. B. ancestors.
C. God. D. kings.
85. Which one of the following should not be done to people living with AIDS?
A. Showing them love.
B. Taking them to the hospital.
C. Giving them balanced diet.
D. Leaving them in a lonely place.
86. Which one of the following is a duty of Christians?
A. Be proud to people.
B. Set good examples to others.
C. Being nice on Sundays.
D. Hate naughty people.
87. Through which one of these ways can Christians help their neighbours?
A. Caring for them.
B. Cheating on them.
C. Stealing from them.
D. Tricking them.
88. What was the occupation of the father of Jesus?
A. Fishing. B. Farming.
C. Capentry. D. Teaching.
89. Which one of the following is not a quality of a good leader?
A. Being kind. B. Being loving.
C. Being selfless. D. Being corrupt.
90. Why did the missionaries come to Kenya?
A. To spread the gospel.
B. To colonize people.
C. To steal people's land.
D. To kill the enemies.