

# GRADE 4 MATHS

## END TERM 1 2020

### LEARNING AREA: MATHEMATICS ACTIVITIES

NAME:		<b>GENDER</b>
SCHOOL:		Boy <input type="checkbox"/>
		Girl <input type="checkbox"/>

### ASSESSMENT RUBRICS

Exceeded Expectations	Meeting Expectations	Approaching Expectations	Below Expectations
44 - 50	28 - 43	14 - 27	0 - 13



# GRADE 4 MATHS

## END TERM 1 2020

1. What is the place value of underlined digit in the number below? 89765  
\_\_\_\_\_
2. What is the total value of the underlined digit below?  
72946  
\_\_\_\_\_
3. Write the following number in words.  
899 \_\_\_\_\_
4. Arrange the following numbers from the smallest to the largest.  
132, 122, 110, 121, 120, 114  
\_\_\_\_\_
5. Round off the following number to the nearest 10.  
277  
\_\_\_\_\_
6. List four divisors of 14.  
\_\_\_\_\_
7. Njoroge had 566 bottle of soda in his shop. He brought another 166 bottles. How many bottles of soda does he have altogether?  
\_\_\_\_\_
8.  $415 + 88 =$  \_\_\_\_\_
9. Fill in the missing number.  
425, 430, \_\_\_\_\_, 440, \_\_\_\_\_,  
450, 455
10. A farmer harvested 855 bags of maize. In March he sold 68 bags. How many were left?  
\_\_\_\_\_
11. Kungu plant 6 trees at home each month. How many trees does Kungu plants in 5 months?  
\_\_\_\_\_



# GRADE 4 MATHS

## END TERM 1 2020

12. Otieno had 48 English books. He shared equally among 6 groups in his grade. How many did each group get?

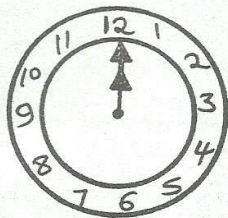
\_\_\_\_\_

13. Nuthu has 88kg of sugar. She gave Asha 19kg. how many kg of sugar was left with?

\_\_\_\_\_

14. A tank had 73 litres of water. Njue used 16litres. How many litres were left? \_\_\_\_\_

15. What is the time? \_\_\_\_\_



16. Which is bigger? \_\_\_\_\_  
 $\frac{1}{9}$  or  $\frac{1}{6}$

17.  $\frac{1}{8}$  of 24 = \_\_\_\_\_

$$\begin{array}{r} 259 \\ + 377 \\ \hline \end{array}$$

19. The distance from the gate to the office is 113m. John walked from the gate to the office and back. How many metres did he walk? \_\_\_\_\_

20. Write even numbers between 15 and 20 \_\_\_\_\_

21. Write hindu Arabic numerals below to roman number.

9 - \_\_\_\_\_

22.  $9888 + 7 =$  \_\_\_\_\_

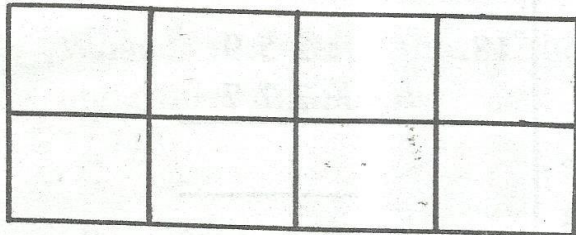


# GRADE 4 MATHS

## END TERM 1 2020

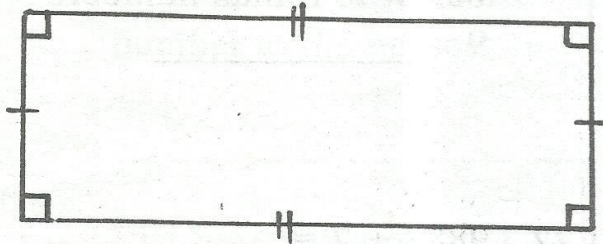
23. 
$$\begin{array}{r} 6539 \\ + 2140 \\ \hline \end{array}$$

24. Shade  $\frac{3}{8}$  of the whole below.



25. 8 goats have \_\_\_\_\_ legs?

26. The figure below is called a \_\_\_\_\_



27. Indicate whether the numbers below are even number or odd numbers.

39 \_\_\_\_\_

88 \_\_\_\_\_

28.  $20 \div 5 =$  \_\_\_\_\_

29.  $7 + 7 + 7 =$  \_\_\_\_\_

\_\_\_\_\_  $\times$  \_\_\_\_\_ = \_\_\_\_\_

30. Work out the sum below and round off to the nearest 10.

$$\begin{array}{r} 67 \\ + 89 \\ \hline \hline \end{array}$$