

GRADE 3 MATHS END TERM 1 2020

NAME:		GENDER Boy <input type="checkbox"/> Girl <input type="checkbox"/>
SCHOOL:		

1. Write the number in words

19 _____

2. What do you get when you add twelve to ten? _____

3. Find out the missing number

$$\square - 2 = 11$$

4. What do you get when you share 20 sweets among four pupils? _____

5.

Tens	Ones
3	5
+ 2	6
<hr/>	
<hr/>	

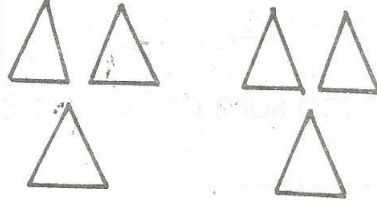
3 5

+ 2 6

6. What is 23 plus 7? _____

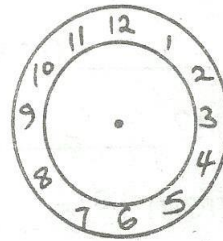
7. Mary had 28 cows. 5 cows died. How many cows did he remain with? _____

8.



$$\text{_____} \times \text{_____} = \text{_____}$$

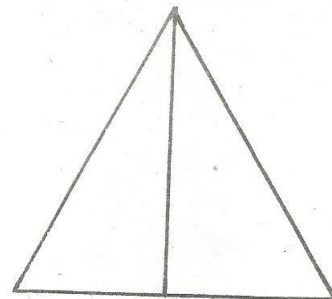
9. Show the time on two clock face.



4 o'clock

10. How many 50 shillings note can make Sh 100 shilling note? _____

11. How many triangles can you count? _____



GRADE 3 MATHS END TERM 1 2020

12. One boy can see one bird. 3 boys can see _____ birds.
13. A fortnight has _____ days.
14. A door has _____ shape.
15. $4 \times \underline{\hspace{2cm}} = 32$
16. 110, 111, 112, _____
17. What is the sum of 14 and 8?

18. A school has 42 trees. Five more trees were planted. How many trees are there in now?

19. One hour = _____ minutes
20. What is 3 fours? _____
21. Subtract 11 from 19 = _____
22. Fill in the missing numbers.
96, 97, 98, _____, _____
23. Write the number that is 1 less than 20 _____
24. Draw an oval shape.
25. $64 = \underline{\hspace{1cm}}$ tens $\underline{\hspace{1cm}}$ ones
26. How many 1 litre can fill 2 litres of bottle? _____
27. What is the place value of 6 in 67? _____
28. $3 \times 7 = \underline{\hspace{2cm}}$
29. A year has _____ months.
30. Which number comes after 78? _____
31. $20 \div 5 = \underline{\hspace{2cm}}$
32. Name the shape. _____
33. There are _____ days in a week.

