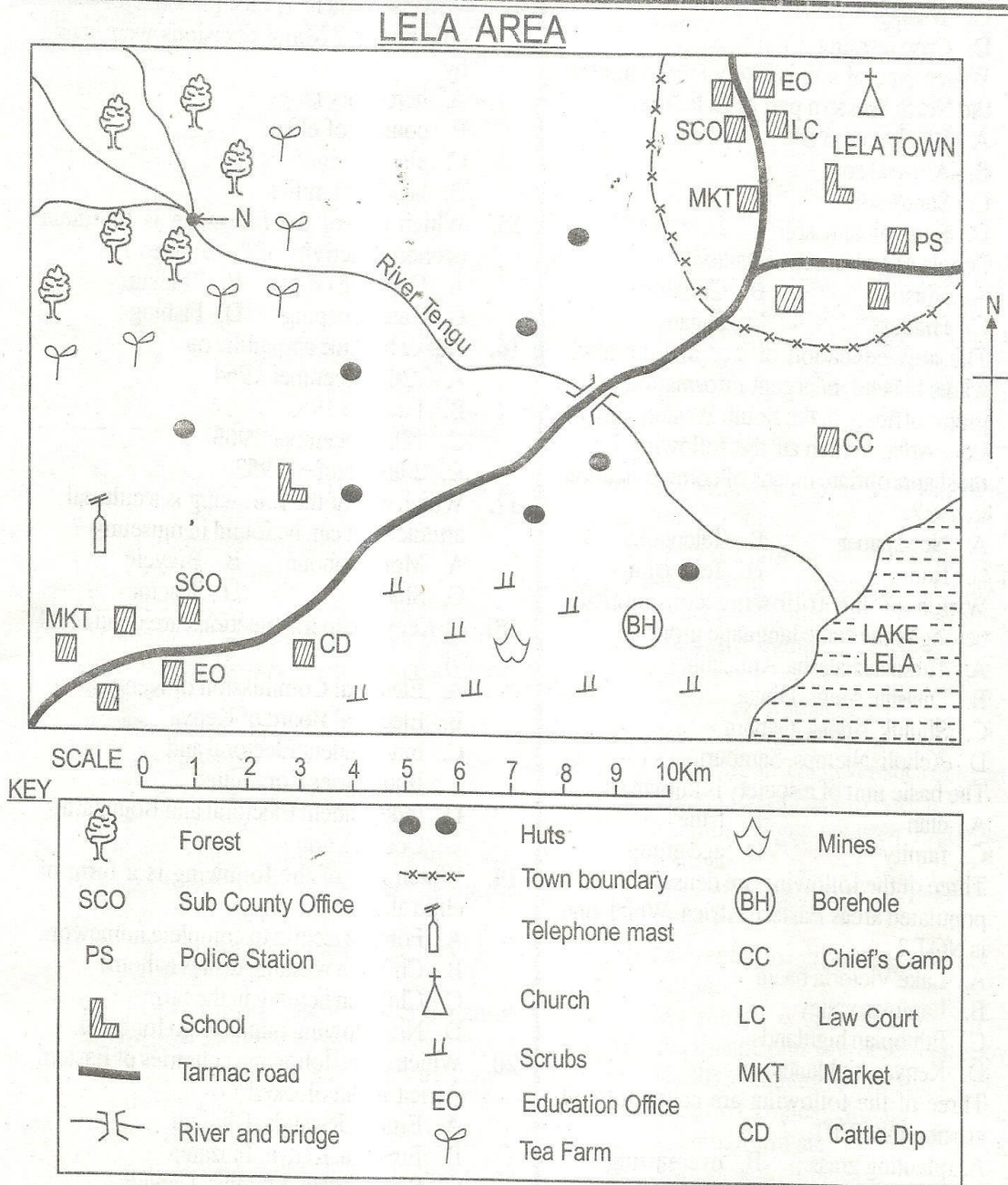


CLASS 6 SOCIAL STUDIES

END TERM 1 2020

LHMC : ZELOUS LOMIN.



Study the map of Lela Area and answer questions 1-7.

1. The land in Lela Area slopes towards
- North West
 - South East
 - North East
 - South West

2. Which one of the following is the head of Lela Area ?
- Chief
 - Sub-County Officer
 - Governor
 - Senator

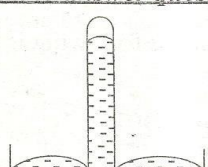
CAT 003

1

SSRE STD.6

CLASS 6 SOCIAL STUDIES

END TERM 1 2020

3. Which feature found along river Tengu is represented by N ?
A. Confluence B. Distributaries
C. Estuary D. Delta
 4. Which of the following economic activities is NOT carried out in Lela Area ?
A. Fishing
B. Livestock keeping
C. Trading
D. Crop farming
 5. Which type of soil is likely to be found in the North Western part of Lela Area ?
A. Black cotton soil
B. Alluvial soil
C. Sandy soil
D. Red volcanic soil
 6. People of Lela Area are mainly
A. Muslims B. Christians
C. Hindus D. Pagans
 7. The area education officer in Lela town wants to send an urgent information to his junior officers in the South Western part of Lela Area. Which of the following is the most appropriate means of communication to use ?
A. Newspaper B. Telephone
C. Radio D. Television
 8. Which of the following communities belong to the same language group ?
A. Turkana, Falasha, Aramanik
B. Falasha, Arabs, Dinka
C. Shilluk, Anuak, Gabbra
D. Acholi, Njemps, Samburu
 9. The basic unit of a society is known as
A. clan B. tribe
C. family D. age group
 10. Three of the following are densely populated areas Eastern Africa. Which one is NOT ?
A. Lake Victoria basin
B. Lambwe valley
C. Ethiopian highlands
D. Kenyan highlands
 11. Three of the following are causes of soil erosion EXCEPT
A. planting grass B. overgrazing
C. overstocking D. defforestation
- Use the diagram to answer questions 12-13.
- 

CAT 003

2

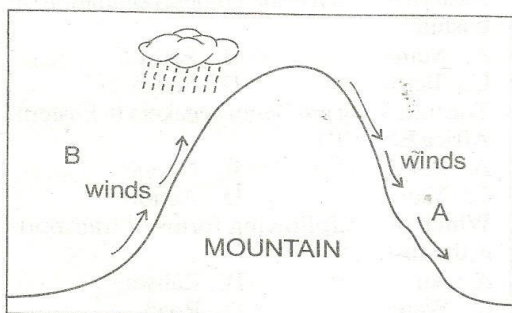
SSRE STD.6

CLASS 6 SOCIAL STUDIES

END TERM 1 2020

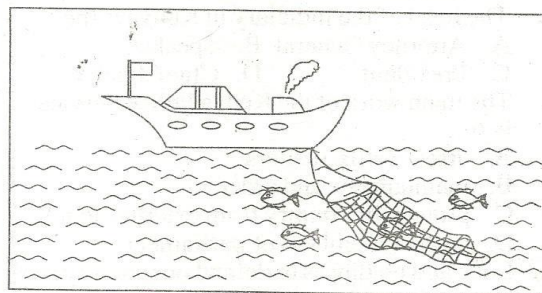
22. Which one of the following statements about the position of Eastern Africa is true?
- It is located in the central part of Africa
 - It is located East of the Indian ocean
 - It is located to the West of prime meridian
 - It is located to the West of the Indian ocean

Use the diagram below to answer questions 23-24.



23. The above diagram shows the formation of
- relief rainfall
 - convictional rainfall
 - cyclonic rainfall
 - land breeze
24. Which of the following economic activities is most likely to be carried out in the region marked A?
- Dairy farming
 - Tea growing
 - Pastoralism
 - Floriculture
25. Koitalel Arap Samoei and Mekatilili wa Menza resisted the British occupation in their areas because the
- British wanted to teach them how to read and write
 - British forced them to join christianity
 - British wanted to take their land
 - British wanted to start slave trade in their region
26. Which one of the following countries of Eastern Africa has its capital city located at Khartoum?
- Tanzania
 - Sudan
 - Eritrea
 - Somalia
27. The people's way of life can be termed as
- values
 - resources
 - culture
 - taboos

28. The work of members of parliament is to
- elect the president
 - make and amend the laws
 - build development projects
 - form political parties
29. Which one of the following lakes is NOT found within the Rift Valley?
- Lake Natron
 - Lake Tanganyika
 - Lake Kyoga
 - Lake Turkana
30. The diagram below shows a method of fishing:



- Which method of fishing is shown above?
- Net drifting
 - Longlining
 - Purse seining
 - Trawling
31. Which mineral is CORRECTLY matched with where it is mined?
- Soda ash - Bamburi
 - Diatomite - Kimwarer
 - Fluorspar - Kariandusi
 - Salt - Ngomeni
32. The following are characteristics of a certain climatic region in Eastern Africa
- Rainfall ranges between 1000mm-1800mm
 - Average temperature between 25°-30°C
 - The region receives convectional rainfall
 - The climate is generally hot and wet
- Which climatic region is described above?
- Modified equatorial climate
 - Modified tropical climate
 - Mountain climate
 - Semi-desert climate
33. A short statement showing the beliefs and traditions of a school is known as
- school routine
 - school motto
 - school logo
 - school badge
34. Which of these countries in Eastern Africa is the largest?
- Ethiopia
 - Sudan
 - Somalia
 - Kenya

CLASS 6 SOCIAL STUDIES

END TERM 1 2020

35. Below are conditions favouring the growing of a certain crop in Kenya.
- Rainfall between 1250mm-2000mm per year
 - Well drained deep volcanic soil which is slightly acidic
 - Cool temperature of about 20°C
 - High altitude of between 1520m-2300m above the sea level
- Which crop fits the above conditions ?
- Sugarcane
 - Bananas
 - Cotton
 - Tea
36. The head of the judiciary in Kenya is the
- Attorney General
 - Speaker
 - President
 - Chief Justice
37. The main work of the Kenya Police Service is to
- arrest cattle rustlers
 - maintain law and order
 - protect the country from external attack
 - protect members of parliament
38. Love and readiness to defend our country is known as
- citizenship
 - patriotism
 - democracy
 - nepotism
39. Which one of the following is the staple food for most Kenyans ?
- Maize
 - Beans
 - Meat
 - Vegetables and chicken
40. Which one of the following is the main tourist attraction at the coastal regions of Mombasa ?
- Varied wildlife
 - Historical sites
 - Warm sandy beaches
 - Cultural heritage
41. Who controls debates in the County Assembly ?
- Governor
 - County Assembly speaker
 - Women representative
 - Senator
42. Njuri Ncheke is a council of elders among the
- Agikuyu
 - Akamba
 - Abaluhya
 - Ameru
43. The colour of the National flag that symbolises blood shed during struggle for independence is
- white
 - red
 - green
 - black
44. Which one of the following areas in Eastern Africa lies below the sea level ?
- Jebel Mara
 - Danakil Alps
 - Dallol depression
 - Lake Tana
45. Which one of the following is the main problem facing inland fishing in Lake Victoria ?
- Industrial wastes
 - Overfishing
 - Water weeds
 - Theft of boats
46. Which one of the following countries of Eastern Africa has the highest population of cushites ?
- Somalia
 - Eritrea
 - Tanzania
 - Sudan
47. The following are Bantu speakers in Eastern Africa EXCEPT
- Pokomo
 - Ngoni
 - Yao
 - Acholi
48. Which of the following forms of transport is the fastest ?
- Air
 - Railway
 - Water
 - Road
49. Which one of the following rivers has its mouth in a swamp ?
- River Ewaso Nyiro South
 - River Turkwel
 - River Omo
 - River Ewaso Nyiro North
50. Which of the following soils is also known as young soil ?
- Clay
 - Alluvial
 - Sand
 - Loam
51. Tea is grown in plantations in which of the following counties ?
- Kericho
 - Siaya
 - Lamu
 - Turkana
52. Which one of the following is the highest non-volcanic mountain in Eastern Africa ?
- Mt. Kilimanjaro
 - Mt. Kenya
 - Mt. Ruwenzori
 - Mt. Elgson
53. In Kenya, general elections are held after every ____ years.
- ten
 - five
 - two
 - four
54. A member of parliament in Kenya is elected to represent a
- ward
 - county
 - constituency
 - sub-county
55. Which one is not a cardinal point of a compass ?
- North
 - East
 - West
 - South East

CAT 003

4

SSRE STD.6

CLASS 6 SOCIAL STUDIES

END TERM 1 2020

56. Three of the following are secondary needs of a family. Which one is NOT ?
A. Entertainment B. Education
C. Clothing D. Electronics
57. Who among the following is a member of the nuclear family ?
A. Mother B. Grandfather
C. Aunt D. Cousin
58. Which one of the following is NOT a service industry ?
A. Banking
B. Steel rolling
C. Motorcycle repair
D. Salon
59. The following are deserts found in Eastern Africa. Which one is NOT ?
A. Nubian desert B. Chalbi desert
C. Taru desert D. Kalahari desert
60. Who among the following was the second prime minister in Kenya ?
A. Raila Amolo Odinga
B. Jomo Kenyatta
C. Uhuru Muigai Kenyatta
D. Musalia Mudavadi
- CHRISTIAN RELIGIOUS EDUCATION**
61. From the punishment that God pronounced to Adam and Eve, Christians learn that they should
A. obey and trust in God always
B. attend church always
C. visit their friends
D. read the Bible always
62. Eve was created mainly to be
A. mother of children
B. Adam's companion
C. mother of many nations
D. the one who cares
63. Which one of the following was the reason why Joseph was sold by his brothers to Egypt ? They
A. wanted food
B. wanted to become rich
C. were jealous of him
D. wanted to punish him
64. Which one of the following is a way through God revealed himself to Moses ? Through
A. flaming torch B. the burning bush
C. wind and rain D. cloud and fire
65. Which excuse did Moses give when he was sent to Egypt by God ?
A. I am too young
B. I do not have a wife
C. I do not have soldiers
D. I am not a good speaker
66. Which one of the following commandments was broken by King Ahab when he took Naboth's vineyard and made it his own ?
A. Do not covet
B. Do not kill
C. Remember the sabbath day
D. Honour your father and mother
67. Through which one of the following ways did David praise God when he brought the box of covenant to Jerusalem ?
A. By singing B. By hating others
C. By fighting D. By boasting
68. Who among the following prophets prophesied that the Messiah would be born in Bethlehem ?
A. Micah B. Elisha
C. Isaiah D. Hosea
69. The event in which all the male first borns of Egyptian were killed by the angel of death was called
A. Passover B. Easter
C. Last supper D. Pentecost
70. Gideon defeated the Midianites with how many soldiers ?
A. 3000 B. 30
C. 32000 D. 300
71. Which one of the following is NOT a Christian value required during the breaking of the bread ?
A. Pride B. Joy
C. Concern D. Unity
72. Which one of the following is a fruit of the Holy Spirit ?
A. Healing
B. Working miracles
C. Speaking in tongues
D. Self control
73. The main lesson to be learnt from the story of Ananias and Sapphira is that Christians should
A. give out their property for sale
B. be honest in all that they do
C. punish those who tell lies
D. repent when they sin

CLASS 6 SOCIAL STUDIES

END TERM 1 2020

74. The woman with an issue of blood was healed mainly because
- she was holy
 - she was a Jew
 - she had faith
 - she was brave
75. "Lord, do not remember this sin against them" Acts 7:60. These words were said by the first martyr known as
- Stephen
 - Simon Peter
 - Jesus
 - John
76. In which garden did Jesus go to pray? The garden of
- Eden
 - Jordan
 - Jerusalem
 - Gethsemane
77. When Jesus left his disciples after his ascension he told them to
- go and not sin
 - go and spread the gospel
 - go and sit in the churches
 - go and start doing business
78. Which one of the following shows the mercy of God?
- Sending Jesus Christ to die for our sins
 - Punishing Adam and Eve for disobedience
 - Killing all Egyptian first borns
 - Calling Abraham when he was 75 years old
79. The unity of the early believers was seen when they
- healed sick people
 - met together for meals
 - preached in the temples
 - spoke in tongues
80. Which one of the following is taught to children in traditional African societies?
- Hardwork
 - Pride
 - Dishonesty
 - Stealing
81. John your classmate has joined a group of youth who smoke cigarettes. What would be the best action for you to take?
- Avoid him totally
 - Report him to the classteacher
 - Tell him to stop the relationship
 - Report him to his parents
82. Which one of the following is a result of envy?
- Love
 - Patience
 - Kindness
 - Jealousy
83. Missionaries came to do all the following EXCEPT
- treat the sick
 - preach the gospel
 - provide education to us
 - punish sinners
84. Which one of the following is the best way for christians to use their wealth?
- Entertaining families
 - Helping the needy
 - Visiting places
 - Buying clothes
85. The Maasai call their God
- Waq
 - Enkai
 - Asis
 - Enkoro
86. The rite of passage from childhood to adulthood is called
- marriage
 - naming
 - death
 - initiation
87. The main reason of marriage in African traditional religion is
- to get a helper
 - for friendship
 - for companionship
 - to have children
88. A good church leader should be
- wealthy
 - rude
 - honest
 - corrupt
89. The best way of overcoming fear as a christian is by
- obeying the parents
 - depending on brothers
 - relying on God
 - having a good company
90. We should use our different talents and abilities to
- serve ourselves only
 - serve our relatives only
 - serve God and others
 - serve our friends only