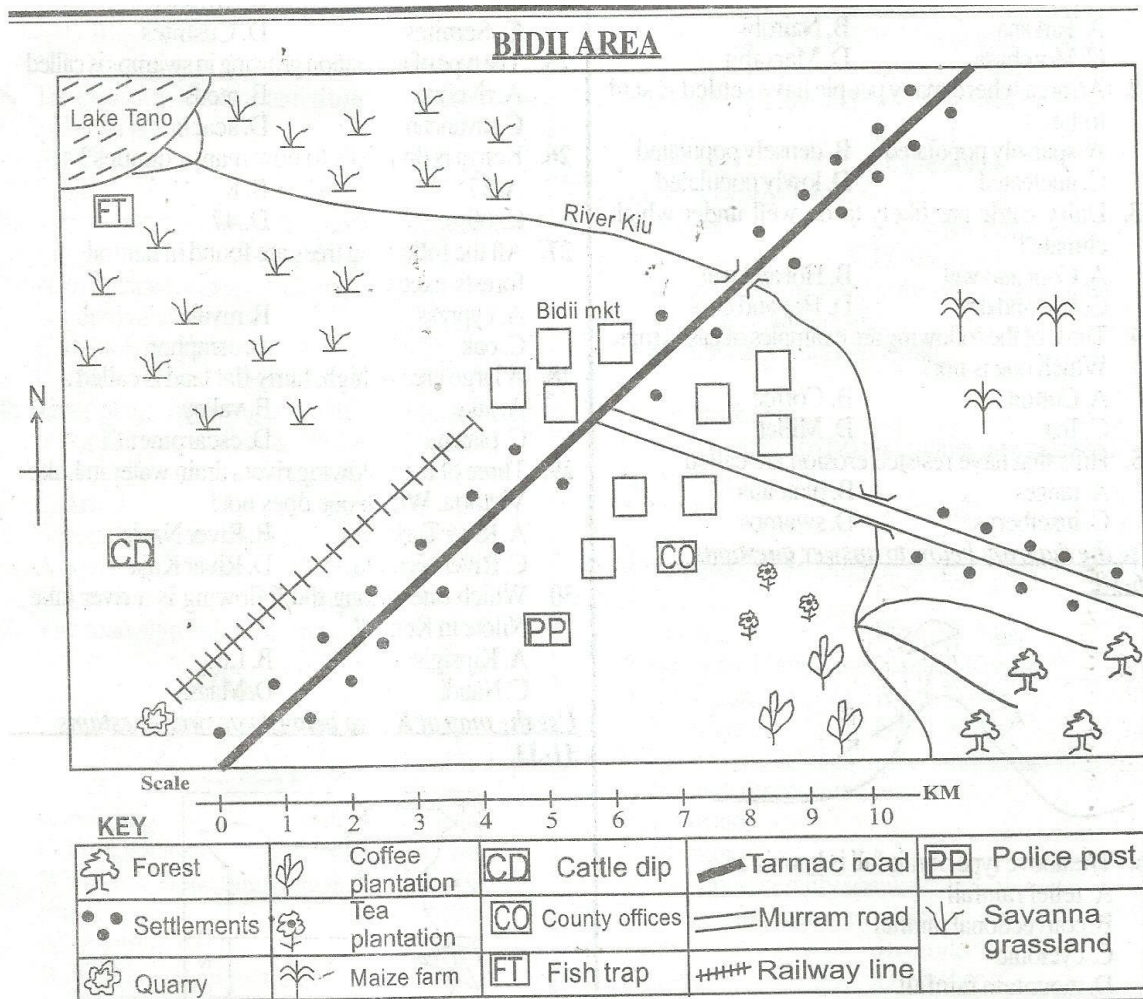


# CLASS 5 SOCIAL STUDIES

## END TERM 1 2020



**Study the map of Bidii Area above and answer questions 1-7.**

1. Bidii Area is likely to be headed by a
  - A. Senator
  - B. Governor
  - C. Deputy governor
  - D. Chief
2. What is the general flow of river Kiu in Bidii Area? From
  - A. South East to North West
  - B. North West to South East
  - C. South West to North East
  - D. North East to South West
3. The climate of South Eastern part of Bidii Area is likely to be
 

A. cool and dry	B. hot and wet
C. cool and wet	D. hot and dry
4. People living in Bidii Area are likely to be
 

A. christians	B. muslims
C. traditionalists	D. pagans

5. Which economic activity is mainly practised on the North Western part of Bidii Area?
 

A. Fishing	B. Farming
C. Trade	D. Mining
6. Most people in Bidii Area have settled
  - A. along the river
  - B. around the lake
  - C. along the road
  - D. around the quarry
7. What evidence shows that there is security in Bidii Area?
 

A. County offices	B. Police post
C. Market	D. Road junction
8. Three of the following are elements of a good map except
 

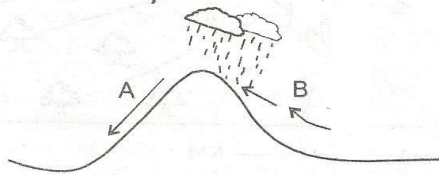
A. frame	B. key
C. title	D. river

# CLASS 5 SOCIAL STUDIES

## END TERM 1 2020

9. The people's way of life is called  
A. settlement                      B. interaction  
C. culture                            D. tradition
10. Which one of the following communities is not a bantu?  
A. Agikuyu                            B. Oromo  
C. Akamba                            D. Mijikenda
11. Which is the largest county in Kenya?  
A. Turkana                            B. Nairobi  
C. Mombasa                           D. Marsabit
12. An area where many people have settled is said to be  
A. sparsely populated      B. densely populated  
C. nucleated                          D. lowly populated
13. Dairy cattle are likely to do well under which climate?  
A. Cool and wet                      B. Hot and wet  
C. Hot and dry                        D. Hot and cool
14. Three of the following are examples of cash crops. Which one is not?  
A. Cotton                                B. Coffee  
C. Tea                                      D. Millet
15. Hills that have resisted erosion are called  
A. ranges                                B. plateaus  
C. inselbergs                          D. swamps

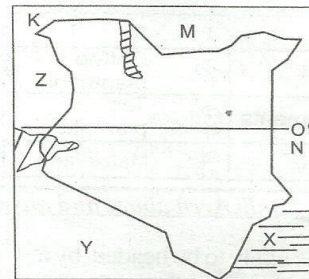
Use the diagram below to answer questions 16-18.



16. The above type of rainfall is known as  
A. relief rainfall  
B. convectional rainfall  
C. cyclonic  
D. mountain rainfall
17. The above rainfall can be experienced in one of the following places. Which one is it?  
A. Mombasa                            B. Kilifi  
C. Kisumu                                D. Meru
18. Side B is known as  
A. rainshadow                          B. leeward  
C. windward                            D. dry side
19. Traditional education was conducted through the following ways except  
A. story telling                          B. reading books  
C. use of riddles                        D. apprenticeship
20. People who treated the sick in the past used  
A. syringes                                B. painkillers  
C. vaccines                                D. herbal medicine
21. On 1<sup>st</sup> May every year, Kenyans celebrate  
A. Labour day                            B. Jamhuri day  
C. Heroes day                            D. Madaraka day
22. The height above the sea level is called  
A. altitude                                B. latitude  
C. longitude                                D. coast

23. Kharere a sales lady in Kamweya village exchanged a shirt for a packet of green grams with her customer. Which type of trade did they practice?  
A. Currency trade                      B. Barter trade  
C. Regional trade                        D. Local trade
24. The largest language group in Kenya is  
A. Bantus                                B. Nilotes  
C. Semites                                D. Cushites
25. The type of vegetation growing in swamps is called  
A. riverine                                B. reeds  
C. savannah                            D. acacia
26. Kenya is divided into how many counties?  
A. 57                                        B. 8  
C. 60                                        D. 47
27. All the following trees are found in natural forests except  
A. cypress                                B. mvule  
C. oak                                        D. camphor
28. A large area of high, fairly flat land is called a  
A. lake                                        B. valley  
C. plateau                                D. escarpment
29. Three of the following rivers drain water in Lake Victoria. Which one does not?  
A. River Turkwel                        B. River Nzoia  
C. River Nyando                        D. River Kuja
30. Which one among the following is a river lake Nilote in Kenya?  
A. Kipsigis                                B. Luo  
C. Nandi                                      D. Maasai


Use the map of Kenya below to answer questions 31-33.



31. What is the feature labelled X?  
A. Lake Victoria                        B. Indian Ocean  
C. Lake Baringo                        D. Lake Magadi
32. The country neighbouring Kenya to the North marked M is called  
A. Somalia                                B. Uganda  
C. South Sudan                        D. Ethiopia
33. The line labelled 0° is called  
A. relief                                    B. equator  
C. longitude                                D. altitude
34. During the Social Studies lesson, your teacher was facing North and his hands were stretched out. What direction was his right hand?  
A. East                                        B. West  
C. North                                      D. South

# CLASS 5 SOCIAL STUDIES

## END TERM 1 2020

35. Who was the first president of Kenya?  
A. Mwai Kibaki                      B. Daniel Arap Moi  
C. Jomo Kenyatta                    D. Uhuru Kenyatta
36. Three of the following are members of a nuclear family. Who is not?  
A. Father                              B. Mother  
C. Brother                             D. Cousin
37. Which one is a fresh water lake in Kenya?  
A. L. Bogoria                         B. L. Turkana  
C. L. Magadi                         D. L. Amboseli
38. The plateau in Kenya referred to as a plateau within a plateau is known as  
A. Nyika                                B. Laikipia  
C. Yatta                                D. Lariyu
39. The main reason why the Somali migrated into Kenya during the pre-colonial period was  
A. to escape from external attack  
B. population increase  
C. to look for pasture for their animals  
D. to avoid family conflicts
40. Three of the following are cultural artefacts stored in our Kenyan museums. Which one is not?  
A. Shield                               B. Spear  
C. Arrow                                D. Gun
41. Several age-groups form  
A. a tribe                                B. an age-set  
C. a nation                              D. a clan
42. The road sign below shows  
  
A. no entry                             B. drive with caution  
C. bumps ahead                       D. junction ahead
43. Which one of the following is not a form of child abuse?  
A. Not giving a child food  
B. Working to get money  
C. Helping the parents in performing house duties  
D. Not taking a child to school
44. Three of the following are basic needs of a family except  
A. radio                                 B. clothing  
C. food                                 D. shelter
45. Among the following factors which one does not influence vegetation distribution of a place?  
A. Climate                              B. Soil  
C. Rainfall                              D. Clouds
46. The red colour in our flag represents  
A. blood                                B. vegetation  
C. people                                D. peace
47. The instrument that measures temperature is the  
A. rain gauge                          B. thermometer  
C. windvane                          D. windsock
48. The form of transport commonly used in Kenya is  
A. road                                  B. railway  
C. air                                     D. water
49. Which one of the following crops is processed to make insecticides?  
A. Tea                                    B. Coffee  
C. Pyrethrum                         D. Cotton
50. In the past Maasai worshiped their God called  
A. Mulungu                            B. Engoro  
C. Were                                 D. Enkai
51. Which one is a traditional form of communication?  
A. Use of mobile phones            B. Use of telephones  
C. Use of smoke                     D. Use of radios
52. Who maintains law and order in Kenya?  
A. Police                                B. Chief  
C. Governor                          D. President
53. A good citizen should not be  
A. honest                                B. hardworking  
C. corrupt                               D. obedient
54. Who represents the ward in the county assembly?  
A. Member of parliament  
B. Member of County Assembly  
C. Senator  
D. Governor
55. In most of the Kenyan communities dowry is paid in form of  
A. money                                B. animals  
C. clothes                               D. land
56. Which one is not a cardinal point of a compass?  
A. East                                 B. West  
C. North                                D. South West
57. Which is the highest mountain in Kenya?  
A. Mt. Elgon                          B. Mt. Kenya  
C. Mt. Marsabit                      D. Mt. Kulal
58. Who controls debates in the county assembly?  
A. Women representative  
B. Governor  
C. Senator  
D. County assembly speaker
59. Birds kept for eggs are called  
A. hens                                 B. broilers  
C. layers                                D. chicken
60. People who come to our country to see wild animals are called  
A. travellers                          B. passengers  
C. scientists                          D. tourists

### SECTION II

#### CHRISTIAN RELIGIOUS EDUCATION

61. The punishment given to Adam and Eve after they disobeyed God is recorded in the book of  
A. Malachi                             B. Matthew  
C. Genesis                             D. Exodus
62. When the flood came in the time of Noah, it rained for \_\_\_\_\_ days without stopping.  
A. 49                                    B. 150  
C. 7                                      D. 40
63. When God called Abraham he tested his \_\_\_\_\_ by asking him to sacrifice his only son Isaac.  
A. self-control                        B. faith  
C. tolerance                          D. joy

# CLASS 5 SOCIAL STUDIES

## END TERM 1 2020

64. God gave Moses the ten commandments. Which one tells us to rest after working for a whole week?  
A. Do not kill  
B. Do not commit adultery  
C. Do not desire people's property  
D. Keep the Sabbath day holy
65. \_\_\_\_\_ is also known as the place of the skull.  
A. Golgotha                      B. Jericho  
C. Bethany                        D. Nazareth
66. According to the apostle's creed the word Catholic means the  
A. holy church                      B. universal church  
C. Roman church                    D. Salvation church
67. When John the Baptist saw Jesus coming to him at river Jordan he called him  
A. Light of the world                B. Saviour of mankind  
C. Lamb of God                      D. Holy shepherd
68. Who among the following people made a bad choice?  
A. Ananias                          B. Ruth  
C. Levi                                D. Abraham
69. Who among the following prophets foretold about the new covenant?  
A. Moses                              B. Joel  
C. Jeremiah                         D. Isaiah
70. Where were the disciples of Jesus when Jesus calmed the storm?  
A. In a house                        B. In a boat  
C. On a mountain                    D. At river Jordan
71. According to 1 Corinthians 6:12-20, our bodies are the \_\_\_\_\_ of the holy spirit.  
A. blessing                          B. fruit  
C. temple                             D. church
72. According to the 5<sup>th</sup> commandment, when children honour their parents they are promised  
A. wealth                              B. everlasting life  
C. long life                            D. good life
73. A church leader should have the following characteristics except  
A. generosity                        B. hospitality  
C. humility                            D. dishonesty
74. The following are happy occasions in christianity except  
A. funerals  
B. Christmas celebrations  
C. wedding  
D. Easter celebrations
75. Which of the following is true about sharing work in traditional African society?  
A. Makes work easier            B. Creates enmity  
C. Promote corruption              D. People fight
76. Your friend John has stolen your book. As a christian what should you do?  
A. Take him to the chief  
B. Abuse him as a thief  
C. Take his two books  
D. Tell him that stealing is bad
77. We should \_\_\_\_\_ those who have wronged us.  
A. hate                                B. mistreat  
C. forgive                              D. revenge against
78. Which one of the following means the Good News of salvation?  
A. The holy bible                    B. The holy sacrament  
C. The gospel                        D. The rituals
79. Which lesson do we learn from Jesus christ when he washed his disciples' feet?  
A. Courage                          B. Service  
C. Obedience                        D. Honesty
80. Which one of the following is a bad effect of weather?  
A. Drying grains                      B. Winnowing maize  
C. Drying clothes                    D. Causing floods
81. A neighbour according to teachings of Jesus is correctly described as  
A. one who plays with us  
B. one who lives next to us  
C. anyone who needs our help  
D. one who goes to school with us
82. "Let me go with you, wherever you go I will go with you, your people shall be my people and your God shall be my God." Who said these words?  
A. Naomi                              B. Deborah  
C. Ruth                                D. Orpha
83. Which of the following roles was played by girls in traditional African society?  
A. Hunting  
B. Fighting enemies  
C. Looking after babies  
D. Punishing law breakers
84. How many baskets of leftovers were collected when Jesus fed 5000 people?  
A. 10                                  B. 5  
C. 8                                    D. 12
85. Who among the following were the sons of Noah?  
A. Japheth, Cain, Abel                B. Shem, Ham, Japheth  
C. Abel, Ham, Shem                  D. Cain, Abel, Isaac
86. Who among the following was chosen to replace Judas Iscariot?  
A. Barnabas                          B. Matthias  
C. Paul                                D. Ananias
87. In the traditional African society, people  
A. were overworked                B. hated working  
C. shared work                      D. admired easy work
88. Who among the following people is not correctly matched to his son?  
A. Jesse - David                      B. Saul - Jonathan  
C. Adam - Isaac                      D. Isaac - Jacob
89. Who among the following was a tax collector before being called by Jesus?  
A. John                                B. Simon Peter  
C. Andrew                            D. Matthew
90. Which would be the best thing to do if you have picked 500 shillings in your class?  
A. Take it to your parent  
B. Buy chips and share with your friends  
C. Leave the money where you found it  
D. Give to your class teacher to look for the owner