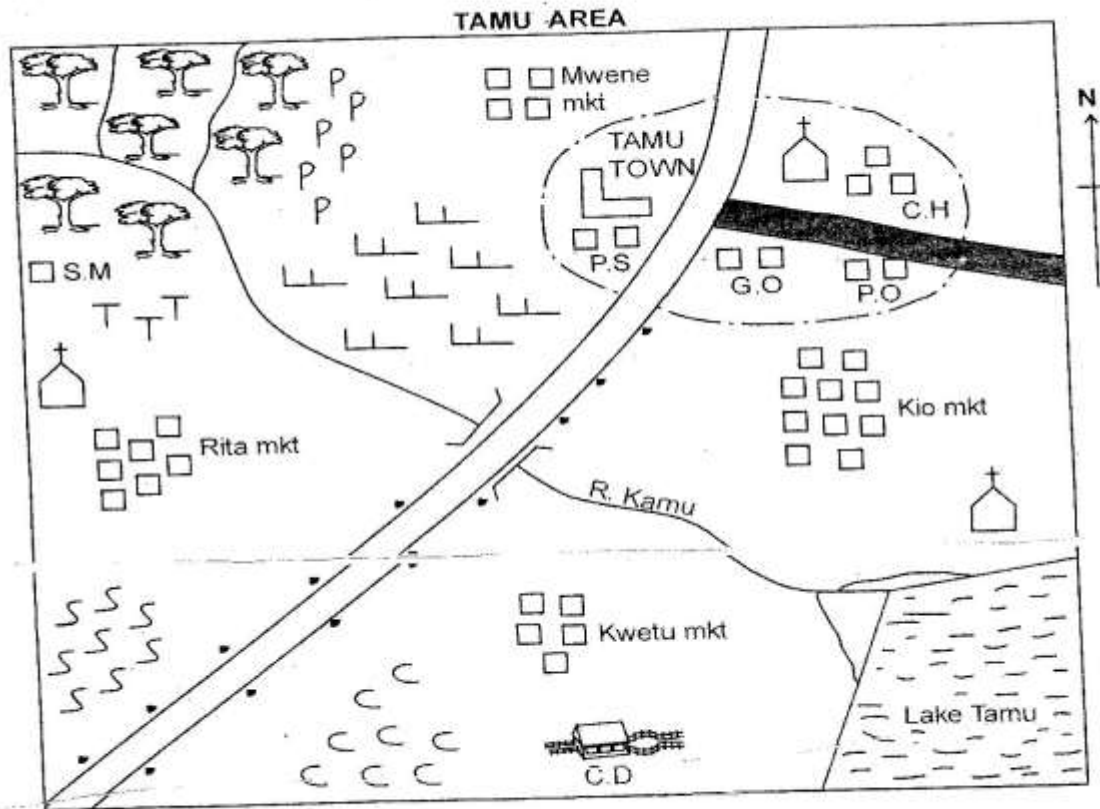


STD 7 MID TERM 3 EXAM 2019

SOCIAL AND RELIGIOUS STUDIES

PART I: SOCIAL STUDIES



SCALE 0 1 2 3 4 5 6 7 8 9 10 11 12 → kms

KEY

	Forest		Church
S.M	Saw mill		School
	Tea		Permanent buildings
	Pyrethrum	P.S	Police station
	Sisal	G.O	Governor's office
	Cotton	P.O	Post office
	Grass	C.H	Cinema hall
	Settlement		Murrum road
 C.D	Cattle dip		Tarmac road

Study the map of Tamu area below and use it to answer questions 1 to 7

1. What is the general flow of river Kamu?
 - A. South West to North East
 - B. North West to South East
 - C. North East to South West
 - D. South East to North West
2. Which one of the following is the **MAIN** economic activity carried out in Tamu area?
 - A. Crop farming
 - B. Lumbering
 - C. Trading
 - D. Livestock farming
3. The climate of Southwestern part of Tamu area can be described as
 - A. cool and wet
 - B. hot and wet
 - C. cool and dry
 - D. hot and dry
4. Tamu town has grown to its present size **MAINLY** due to the presence of
 - A. road junction
 - B. governor's office
 - C. tarmac road
 - D. police station
5. River Kamu ends in a
 - A. tributary
 - B. delta
 - C. confluence
 - D. estuary
6. The person in charge of security in Tamu area is
 - A. County Commissioner
 - B. County Governor
 - C. Police Officers
 - D. Senator

7. Who among the following represent the interest of Tamu area in the senate?
 - A. Women Representative
 - B. Member of parliament
 - C. Senator
 - D. Member of County Assembly
8. Which one of the following bantu speakers in Southern Africa is **WRONGLY** matched with the country found?
 - A. Zulu and Xhosa - Zimbabwe
 - B. Ovambo and Herero - Namibia
 - C. Tswana - Botswana
 - D. Sotho - Lesotho
9. The following are conditions favouring a pastoral community in Africa
 - i) *Have extensive grassland belt.*
 - ii) *They use horses in search of pastures and water.*
 - iii) *It is the largest nomadic group in the world.*
 - iv) *They practise transhumance.*The pastoral community described above is
 - A. Turkana
 - B. Tswana
 - C. Maasai
 - D. Fulani
10. The winds that blow over an area for most time of the year is known as
 - A. onshore winds
 - B. prevailing winds
 - C. offshore winds
 - D. westerly winds
11. Which of the following countries of Africa borders Chad to the North?
 - A. Libya
 - B. Sudan
 - C. Central African Republic
 - D. Niger

12. The **MAIN** reason why most people prefer to settle in urban centres

- A. there is better housing in urban centres.
- B. there is less population in urban centres
- C. they hope to get employment.
- D. there is better access to medical facilities

13. The Cotonou-Gao-Oudja highway connects Benin with

- A. Niger
- B. Mali
- C. Senegal
- D. Morocco

14. The **LARGEST** world human lake in terms of surface area is **LIKELY** to be Lake

- A. Volta
- B. Nasser
- C. Masinga
- D. Kariba

15. Nairobi is cooler than Mombasa **MAINLY** because

- A. Mombasa is on highland.
- B. Nairobi has higher altitude compared to Mombasa.
- C. Mombasa is most populated area than Nairobi.
- D. Nairobi is at the sea level.

16. A man and woman want to get married through a civil process. Who among the following will officiate the marriage?

- A. Magistrate
- B. Religious leader
- C. Clan leader
- D. Deputy Governor

17. Pyramids of Egypt, Fort Milna in Ghana and Gedi Ruins in Kenya are examples of

- A. pre-historical sites
- B. beautiful scenery
- C. historical sites
- D. cultural sites

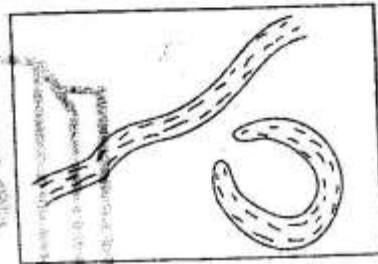
18. It is **FALSE** to say that

- A. Africa has 54 independent countries.
- B. Africa is the second largest continent in the world.
- C. the largest country in Africa is Algeria.
- D. the longest river in Africa is Nile.

19. Which one of the following plateau is **CORRECTLY** matched with the country found?

- A. Fouta Djallon - Nigeria
- B. Bic - Angola
- C. Nyika - Algeria
- D. Jos - Guinea

Use the diagram below to answer questions 20 and 21



20. The diagram above was formed through

- A. downwarping
- B. volcanic activities
- C. faulting and sinking
- D. deposition

21. Three of the following are examples of the lakes formed through the above process **EXCEPT** Lake

- A. Utange
- B. Manzala
- C. Paradise
- D. Kanyaboli

22. Which one of the following traditional leaders resisted with the British during the establishment of colonial rule?

- A. Kabaka Mutesa I
- B. Karuri wa Gukure
- C. Lewanika
- D. Kabaka Mwanga

23. Below are requirements of a particular crop grown in Africa
- Rainfall between 1500mm to 2000mm per year.
 - High temperature of between 27°C and 30°C.
 - High humidity throughout the year.

This crop is

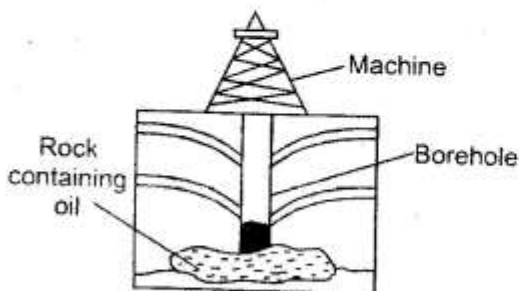
- | | |
|-----------|------------|
| A. cocoa | B. cloves |
| C. cotton | D. Bananas |

24. Three of the following are conditions that determine the method of fishing to be used **EXCEPT**, The
- type of fish.
 - area where the fish is found.
 - purpose of fishing.
 - equipment to be used.

25. Three of the following powers colonized Somalia **EXCEPT**
- | | |
|------------|-------------|
| A. British | B. Italians |
| C. Germans | D. French |

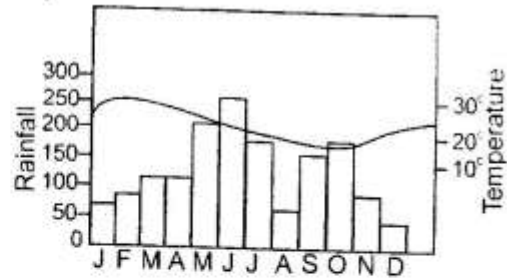
26. Which one of the following is **NOT** a member of Kalenjin community found in Kenya?
- | | |
|-----------|----------|
| A. Pokomo | B. Pokot |
| C. Tugen | D. Nandi |

27. Study the diagram below.
The method of mining demonstrated is



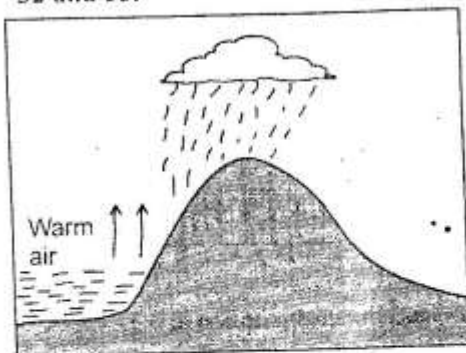
- | | |
|-------------|-------------|
| A. shaft | B. drilling |
| C. opencast | D. derrick |

Study the diagram below and answer questions 28 and 29.



28. The climate region above is
- Savannah climate
 - Mediterranean climate
 - Equatorial climate
 - Tropical climate
29. It is **WRONG** to say the region
- has single maxima of rainfall.
 - has high humidity throughout the year.
 - receives convectional rainfall.
 - temperatures are high throughout the year.
30. Most mountains found at the floor of the Rift Valley were **MAINLY** formed through
- faulting and sinking
 - hoist
 - volcanic activities
 - folding
31. The **MOST** expensive means of transport is
- electrified trains
 - air
 - road
 - cable

Study the diagram below and answer question 32 and 33.



32. The diagram above shows the formation of
- relief rainfall
 - convectional rainfall
 - sea breeze
 - land breeze

33. The condition above is MAINLY experienced in
- Kisumu
 - Malindi
 - Nyeri
 - Mombasa

34. Three of the following are roles played by the school community in the development of the school. Which one is NOT?
- Donating land to the school.
 - Buying books for the school.
 - Providing labour for the school.
 - Teaching children.

35. Which one of the following early visitor was a missionary?
- John Speke
 - Ludwig Krapf
 - Henry Morton
 - David Livingstone

36. Before the coming of the European, Soninke people were ruled by the?
- King
 - Chief
 - Council of elders
 - Clan heads

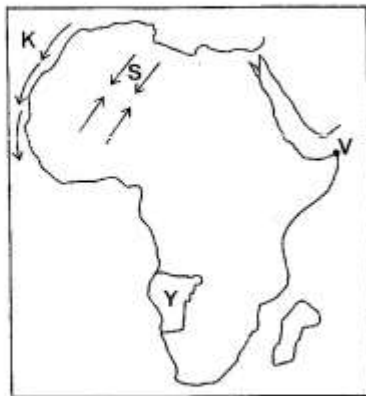
37. Which one of the following towns is the capital city of Mauritania?
- Porto Novo
 - Yaunde
 - Nouakchott
 - Bamako

38. The following are reasons for the scramble of Africa by European powers EXCEPT
- search for land to cultivate.
 - settle surplus population.
 - search for raw materials.
 - search for market for their goods.

39. Who among the following elected leaders represent the interest of a county in the National Assembly?
- Senator
 - Member of Parliament
 - Deputy Governor
 - Woman Representative

40. Three of the following are basic needs of a family EXCEPT
- security
 - food
 - shelter
 - clothing

Use the map of Africa below to answer questions 41 to 44.



41. The country marked Y was colonized by
 A. Italians
 B. British
 C. German
 D. French
42. The ocean current marked K on the map is
 A. warm Somali current
 B. warm canary current
 C. cold Somali current
 D. cold canary current
43. The MOST easterly point marked V is known as
 A. Carbo verde
 B. Ras Hafun
 C. Boni
 D. Roben's Island
44. The winds marked S on the map are responsible for
 A. rainfall that occurs on West Africa.
 B. rainfall in the Mediterranean region.
 C. cool and wet climate in the region.
 D. dry conditions found in the region.
45. The following rivers drain water in Indian Ocean EXCEPT
 A. Zambezi
 B. Limpopo
 C. Orange
 D. Pangani
46. Three of the following are problems experienced due to industrial development. Which one is NOT?
 A. Poor housing.
 B. High rate of crime.
 C. Displacement of people.
 D. Improvement of Agricultural land.
47. The following are reasons that led to the decline and fall of the Old-Ghana Kingdom EXCEPT one. Which one? The Kingdom
 A. was too large to be ruled from one central point.
 B. had powerful, strong and respected rulers.
 C. lacked clearly defined boundaries.
 D. overdepended on one source of income.
48. The MOST recent means of communication among many youths in Kenya today is through?
 A. E-mail
 B. Mobile phones
 C. Social media platforms
 D. Internet
49. Kenyans celebrate Jamuhuri day to remember when
 A. Kenya got its first black president.
 B. Kenya attained independence.
 C. Kenya attained herself internal rule.
 D. Kenya was ruled through co-alition government.
50. The second largest industrial town in Kenya is
 A. Kisumu B. Thika
 C. Nakuru D. Nairobi

51. Which one of the following is a benefit of respect for Human Rights? There is
- insecurity and fear.
 - high population growth rate.
 - expansion of urban areas in the country.
 - peace and harmony in the country.
52. The following were functions of OAU. Which one is **NOT**?
- To promote unity among member states.
 - To promote social, economic and political development.
 - Provide forum for heads of state to meet.
 - To promote friendly relationship between African countries.
53. Which arm of the government is responsible for interpreting laws?
- Cabinet
 - Parliament
 - Executive
 - Judiciary
54. Three of the following are social evils in the society **EXCEPT**
- corruption
 - equal distribution of resources
 - tribalism
 - racism
55. The Bill of Rights in the Kenyan Constitution is found in chapter
- 3
 - 5
 - 2
 - 4
56. The following are similarities in the systems of government in Kenya and Swaziland **EXCEPT**
- Both President and King are commanders-in-chief.
 - Both government have civil servants.
 - Swaziland is a Kingdom while Kenya is a Republic.
 - Parliament consist of two houses.
57. The **MAIN** problem facing tourism in Kenya is
- high death rate of wild animals.
 - high cost of accomodation.
 - poor roads leading to National Parks.
 - lack of proper security.
58. Transport, communication, hotel, shoe repair and banking are all examples of:
- Assembly industries
 - Service industries
 - Manufacturing industries
 - Processing industries.
59. Below is a description of an organization in Africa
- Formed in 1967
 - Collapsed in 1977
 - Formed by 3 countries from one region.
- The organization above is
- E.A.C
 - O.A.U
 - I.G.A.D
 - COMESA
60. The **MAIN** function of a Presiding Officer during a general election is :-
- supervising elections in a county.
 - ensuring smooth elections at a polling station.
 - counting all the votes cast in a constituency.
 - advising voters on the person to vote for.

PART II: RELIGIOUS EDUCATION

SECTION A

CHRISTIAN RELIGIOUS EDUCATION

61. Which one of the following was **NOT** the consequence of the sin of disobedience in the Genesis stories of creation?
- A. Pain became part of human experience.
 - B. People will have to toil and struggle to meet their needs.
 - C. Human beings will face death.
 - D. Human beings became closer to God.
62. Adam named his wife Eve because
- A. she was taken out of man.
 - B. she was the first woman on earth.
 - C. she was the mother of all human beings.
 - D. God had instructed him to do so.
63. Who among the following was **NOT** a son to Noah?
- A. Ham
 - B. Gideon
 - C. Shem
 - D. Japheth
64. During the covenant between God and Abraham, God's presence was symbolised by
- A. strong wind.
 - B. thunderstorm and lightning.
 - C. flaming torch and smoking firepot.
 - D. circumcision.
65. Who among the following people wrestled with the Angel of God at Peniel?
- A. Joseph
 - B. David
 - C. Jacob
 - D. Lot
66. Who among the following prophets prophesied drought for three and half years in Israel?
- A. Nathan
 - B. Elijah
 - C. Elisha
 - D. Jeremiah
67. David is remembered by the Israelites as the greatest king. Which one of the achievement below did he attain as a king? He
- A. killed a lion and a bear.
 - B. played the harp for King Saul
 - C. killed Goliath the Philistine giant.
 - D. brought the covenant box to Jerusalem.
68. Who among the following people was a Judge in Israel?
- A. Elkanah
 - B. Joshua
 - C. Esther
 - D. Deborah
69. "I was a King of Israel, I badly wanted another man's vineyard. I killed the man and took the vineyard from him" Which one of the following commandments below did King Ahab break?
- A. Do not use God's name in vain.
 - B. Do not covet.
 - C. Respect your mother and father.
 - D. Do not commit adultery.
70. Number twelve is a special number among the Israelites. Which one of the following is **NOT** true about the number?
- A. Twelve men were the representatives of the tribes of Israel.
 - B. Twelve stones were planted in river Jordan?
 - C. Twelve people were gathered in a room on the day of Pentecost.
 - D. Twelve men were chosen to be Jesus disciples.
71. Three of the following are values from the sermon on the Mount. Which one is **NOT**?
- A. Poverty
 - B. Mercy
 - C. Impurity
 - D. Prophecy
72. Which of the following events did **NOT** happen while Jesus was on the cross?
- A. Pilate washing his hands.
 - B. Darkness covering the whole land.
 - C. There was an earthquake.
 - D. The temple curtain tore into two.
73. Joseph of Arimathea and _____ took the body of Jesus and buried it in the tomb.
- A. Simon of Cyrene
 - B. Didymus
 - C. Nicodemus
 - D. Andrew
74. Who among the following people was healed by Jesus Christ at Gadara (Mathew 8:28-34)
- A. Two blind men.
 - B. A man who could not speak.
 - C. Two men with evil spirits.
 - D. Ten lepers.

75. According to Mathew 5:4-5 "Happy are those who mourn
- people will help them mourn.
 - people will comfort them.
 - God will comfort them.
 - they will receive what God has promised.
76. Jesus freed us from sins through
- His teachings
 - His sufferings
 - His death on the cross
 - Baptism
77. The growth of the church is called
- Ecumenism
 - Charismatic renewal
 - Renewal
 - Evangelisation
78. Among the following disciples who was **NOT** working as a fisherman when Jesus called him?
- Andrew
 - Peter
 - John
 - Mathew
79. Among the following couples who taught Apostle Paul to earn an extra coin through tent making
- Jacob and Leah
 - Zechariah and Elizabeth
 - Priscilla and Aquilla
 - Simcon and Anna
80. The magician who prevented Paul from preaching the good news was known as
- Didymus
 - Elymas
 - Cyprus
 - Lydia
81. The reason why Joseph and Mary went to Bethlehem the night before Jesus was born is because they wanted to
- meet King Herod.
 - look for a place to deliver the baby.
 - register in their hometown.
 - meet their parents.
82. The two sons of Priest Eli were
- Isaac and Jacob
 - Ophni and Phineas
 - Jacob and Esau
 - Joseph and Benjamin
83. "Jesus Christ makes you well. Get up and make your bed". At once Aenas got up (Acts of the Apostles 9:34) These words were spoken by Peter when he was in
- Lydda
 - Joppa
 - Jerusalem
 - Antioch
84. Which one of the following beliefs about creation is shared by Traditional African Religion believers and Christianity? God
- created the world in six days.
 - created humanbeings in their present form
 - rested on the seventh day
 - placed humanbeings on Mount Kenya.
85. Female genital mutilation is discouraged today because of the following reasons **EXCEPT**
- it's a very expensive activity.
 - it can lead to death.
 - one experiences difficulties during birth.
 - it can lead to spread of HIV/AIDS
86. You have noticed one of your friends looks confused and disturbed in class. How can you help him/her?
- Stop the friendship.
 - Tell his or her parents.
 - Ignore since it is not your business.
 - Tell the class teacher about it.
87. George a standard seven boy has been persuaded by his friends to sneak into a stadium to watch a football match without paying. What should he do as a Christian?
- Accept to sneak into the field.
 - Report his friends to the officials.
 - Tell them the importance of honesty and refuse to sneak.
 - Refuse and break friendship.
88. You have discovered that your friend Martha is HIV positive. What advise would you give her as a Christian?
- Commit suicide.
 - Repent her sins.
 - Pray always.
 - Visit V.C.T centre for counselling.
89. We should obey our leaders because
- they are good.
 - authority comes from God.
 - the law requires us to do so.
 - they can punish us.
90. Three of the following were early missionaries **EXCEPT**
- Ludwig Krapf
 - Johanne Rebmann
 - David Livingstone
 - John Speke

SECTION B
ISLAMIC RELIGIOUS EDUCATION

61. Which one of the following descriptions refer to the Surah Al-Fatiha? The
 A. Third of Qur'an
 B. Heart of Qur'an
 C. Heart of Qur'an
 D. Mother of the Book.
62. Which one of the following is a pair of chapters recommended for reciting at the time of going to sleep?
 A. Surahs Lahab and Quraish
 B. Surahs Fatiha and Kaafirun
 C. Surahs Nnas and Falaq
 D. Surahs Nasr and Ikhlas
63. Allah (s.w) reminded the prophet (S.A.W), "Surely, we have given you many Favours". Which Surah is this? Surah
 A. Al-Kauthar B. Al-Qadr
 C. Adhuha D. Al-Bayyina
64. Which one of the following behaviours are muslims warned against in the Surah Al-Maun?
 A. Mixing their faith with Shirk.
 B. Piling of wealth.
 C. Backbiting others.
 D. Praying Swalah to be seen.
65. The MAIN subject that muslim faithfuls are advised over in the Surah Al-Asr is
 A. wealth
 B. time
 C. children
 D. freedom of worship
66. Complete this hadith CORRECTLY, "The Prophet (p.h.u.h) said, ".....even if it is bitter."
 A. Tell the truth ...
 B. Look for knowledge
 C. Stick with Islam.....
 D. Control evil
67. According to the teachings of the Prophet (S.A.W), a _____ man is near Allah, near Paradise, near men far from Hell.
 A. greeting B. knowledgeable
 C. generous D. working
68. Which one of the following is NOT a teaching muslims take from the guidance "Think before you act"?
 A. Do what you are sure.
 B. Take risks to gain or loose.
 C. Ask those who know if you doubt.
 D. Never act out of ignorance.
69. The knowledge on hospitality helps muslims BEST in
 A. welcoming guests.
 B. staying with neighbours.
 C. selecting people to make friends.
 D. mixing with non-muslims.
70. Which one of the following is NOT an activity undertaken by those who go to Makka for Hajj Ibaada?
 A. Talbiya
 B. Twawaf
 C. Sa'y
 D. Tahniq
71. All the following things nullify ones Swalah EXCEPT
 A. uncovering the Aura.
 B. Breaking the Udhu.
 C. Confusing Qur'an verses.
 D. Taking any step ahead of the Imaam.
72. Which one among the following Fardh prayers is never followed up with Sunna Baadiyya?
 A. Maghrib
 B. Isha
 C. Dhuh
 D. Asr
73. The groups of people mentioned in the holy Qur'an that should be given Zakkat are
 A. five
 B. eight
 C. seven
 D. six
74. The following are conditions of fasting Swaam EXCEPT -one must
 A. be a muslim.
 B. eat Suhuur meal.
 C. be in good health.
 D. have sound mind.

