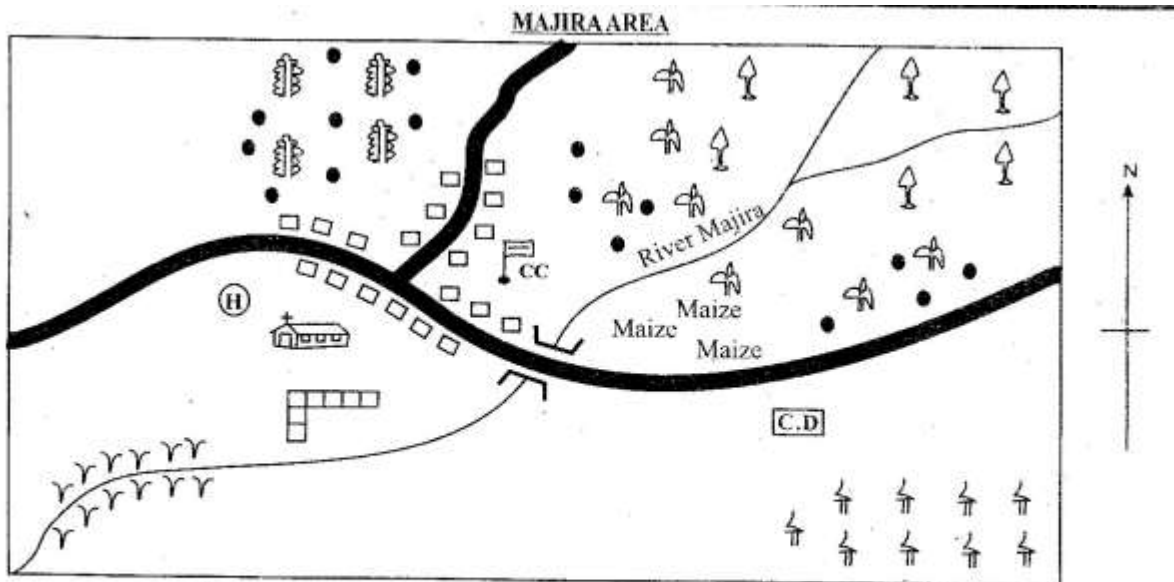


STD 4 MID TERM 3 EXAM 2019

SOCIAL AND RELIGIOUS



KEY

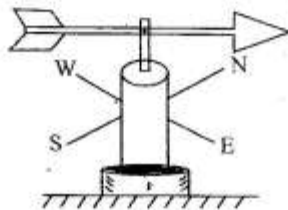
	Coffee		Chief's Camp		Shops		Cattle Dip		River and bridge
	Tea		Hospital		School		Scrub		
	Forest		Church		Settlement		Tarmac road		

Study the map of Majira Area above and then answer questions 1 to 7.





- River Majira is flowing towards _____
A. South East. B. North East.
C. North West. D. South West.
- The people of Majira area are likely to be _____
A. traditionalists. B. muslims.
C. christians. D. pagans.
- Which cash crops are grown in Majira area?
A. Coffee and tea. B. Maize and tea.
C. Tea and beans. D. Maize and beans.
- Who administers Majira area?
A. Sub-chief. B. Chief.
C. District officer. D. Commissioner.
- Where do most people settle in Majira area?
A. Along the road.
B. Near the river.
C. In the farming areas.
D. in the forest.
- What is the climate of the Northern part of Majira area?
A. Cool and dry. B. Hot and cool.
C. Hot and dry. D. Cool and wet.
- Which is the main means of transport in Majira area?
A. Road. B. Railway. C. Water. D. Air.
- Which one of the following is **not** a language group found among the Nilotes?
A. River-lake. B. Plain.
C. Luo. D. Highland.
- Which of the following is the vegetation that grows along a river valley?
A. Grass. B. Riverine.
C. Reeds. D. Scrubs.
- What is the name given to the vegetation which is not planted by man and it grows on its own?
A. Grassland vegetation.
B. Scrubs.
C. Planted vegetation.
D. Indigenous vegetation.

11. From which of the following was traditional medicine obtained?
A. Hospitals. B. Soil.
C. Herbs. D. Animals.
12. How many counties are there in Kenya according to the new constitution?
A. 47 B. 12 C. 8 D. 10
13. Which colour of the national flag means peace?
A. Green. B. White.
C. Black. D. Red.
14. Who assists the head of the county to administer?
A. Deputy president. B. Governor.
C. Deputy governor. D. Deputy commissioner.
15. Which one of the following words is used to describe areas with high population?
A. Scarcely populated areas.
B. Linear population.
C. Sparsely populated areas.
D. Densely populated areas.

16. *Use the weather instrument below to answer questions 16 and 17.*



- Where is the wind blowing to in the instrument above?
A. North East. B. South West.
C. North West. D. South East.
17. What is the name of the weather instrument shown above?
A. Windvane. B. Anemometer.
C. Windsock. D. Raingauge.
18. Who among the following tribes live in manyatta?
A. Ameru. B. Abaluhya.
C. Maasai. D. Kamba.
19. Which is the **main** staple food in our county in Kenya?
A. Beans. B. Tea. C. Fish. D. Maize.
20. Which of the following represents a small river which joins a big river?
A. Seasonal river. B. River mouth.
C. Main stream. D. Tributary.
21. Cattle kept for meat are reared in areas known as _____
A. sheds. B. ranches.
C. plains. D. highlands.
22. Which one of the following is a modern industry?
A. Pottery industry.
B. Cement manufacturing industry.
C. Basketry industry.
D. Blacksmithing industry.
23. Which of the following is the **best** means of transporting flowers to the consumers?
A. Air. B. Road.
C. Railway. D. Water.
24. Which of the following instruments is used to measure the coldness or the hotness of a place?
A. Thermometer. B. Raingauge.
C. Windvane. D. Windsock.
25. Which one of the following is **not** a human right enjoyed by people?
A. Right to shelter.
B. Right to life.
C. Right to steal.
D. Right to clean environment.
26. When people disagree in the school, they use all the following ways to resolve disagreement **except**
A. forgiving.
B. finding the cause of disagreement.
C. apology.
D. fighting.
27. Which one of the following is an example of a beverage crop?
A. Bananas. B. Apples.
C. Sisal. D. Coffee.
28. Who among the following is a member of the county assembly?
A. Speaker. B. Senator.
C. President. D. Attorney General.
29. Which one of the following is **not** a good use of a river?
A. People fish in rivers.
B. Kills people when it floods.
C. People use it for transport.
D. People use its water for irrigation.
30. _____ are those people who carried goods in the older days.
A. Conductor B. Load carriers
C. Potters D. Loaders
31. Which of the following is an importance of weeds that grow in a swamp?
A. They are called reeds.
B. They are evergreen.
C. They are used to harvest fruits.
D. They are used to make mats.
32. Which one of the following is **not** a way in which messages were passed in traditional African society?
A. Use of a messengers.
B. Use of television sets.
C. Use of smoke and fire.
D. Use of horns.
33. An area that is raised and generally flat at the top is called a _____
A. plateau. B. plain.
C. hill. D. valley.
34. Which one of the following food crops was **not** common in traditional African society?
A. Cassava. B. Millet.
C. Wheat. D. Sweet potatoes.

35. Which road sign below means drive with caution?
- A.  B. 
- C.  D. 
36. What do we call a person who belongs to a particular country?
- A. Refugee. B. Citizen.
C. Trader. D. Missionary.
37. The chickens that are specifically kept for meat only are called _____.
- A. hens. B. pork. C. layers. D. broilers.
38. What is the name given to a point where two rivers meet?
- A. Stream. B. Valley.
C. Confluence. D. Tributary.
39. Kamau grows crops for home use only. We can say that Kamau is a _____ farmers.
- A. subsistence B. cash crop
C. mixed D. poultry
40. What was the original homeland of the Abagusii?
- A. Uganda. B. Congo forest.
C. South Sudan. D. Somalia.
41. Which of the following types of vegetation is found in a desert?
- A. Trees. B. Papyrus reeds.
C. Grass. D. Shrubs.
42. Which one of the following is a basic need?
- A. Car. B. Video set.
C. Food. D. Television.
43. Which one of the following is a characteristic of a good citizen?
- A. One who maintains and respects laws.
B. One who is corrupt.
C. One who is lazy.
D. One who is disrespectful.
44. When people exchange goods with money, we say that the trade is called _____.
- A. barter trade. B. currency trade.
C. international trade. D. community trade.
45. Who among the following people kill wild animals without permission from the Kenya Wildlife Service?
- A. Wardens. B. Police.
C. Poachers. D. Killers.
46. Which one of the following is **main** tourist attraction in our country?
- A. Valleys. B. Mountains.
C. Sandy beaches. D. Wildlife.
47. Which stage below marks a time when a young person moves to adulthood?
- A. Initiation. B. Birth.
C. Death. D. Marriage.
48. What is deforestation?
- A. Cutting of trees without planting others.
B. Planting other trees again.
C. Cutting down unwanted woods.
D. Cultivating crops together with trees.
49. Which one of the following is **not** a benefit of a mountain?
- A. It acts as a hiding place during attacks.
B. It is a source of rivers.
C. In steep areas no farming can be done.
D. People farm on mountain slopes.
50. When it rains heavily, the top soil is carried and washed away. This carrying away of soil by water or wind is called _____.
- A. soil fertility. B. soil transportation.
C. soil movement. D. soil erosion.
51. People who are born and initiated almost at the same time belong to one of the following. Which one is it?
- A. Age mate. B. Age friends.
C. Age group. D. Age set.
52. Who is the head of a county?
- A. Governor. B. Chief.
C. Sub-chief. D. President
53. Which one of the following was **not** among the values taught to the young men during initiation?
- A. Honesty. B. Greed.
C. Kindness. D. Patience.
54. Which one of the following is **not** a type of family?
- A. Extended family. B. Single parent family.
C. Extension family. D. Nuclear family.
55. Which one of the following is **not** a benefit of vegetation to man?
- A. Source of fruits.
B. It attracts rain.
C. It is source of medicine.
D. It is the source of wind.
56. Which of the following is a duty of a father in a family?
- A. Beats children.
B. Provides security to the family.
C. Doesn't pay school fees for children.
D. Drinks beer over the weekend.
57. People's way of life is commonly known as _____.
- A. patriotism. B. loyalty.
C. morals. D. culture.
58. Which among the following administers a division?
- A. Chief.
B. Village elder.
C. Assistant county commissioner.
D. Governor.
59. When pupils are allowed to choose the prefect of their choice we say that they are practising _____.
- A. corruption. B. democracy.
C. leadership. D. preaching.
60. Why do pupils go to school today?
- A. To prepare for future roles.
B. To grow fast.
C. To avoid working at home.
D. To meet teachers.

SECTION B

CHRISTIAN RELIGIOUS EDUCATION

61. What did God do on the seventh day?
 A. He created the skies.
 B. He went to church.
 C. He created man.
 D. He rested.
62. Who made Adam and Eve to be chased away from the garden of Eden?
 A. Moses. B. Animals.
 C. The serpent. D. The Angel.
63. What did God tell Moses to tell the people about him?
 A. I am Almighty. B. I am who I am.
 C. I am the saviour. D. I am the creator.
64. Who among the following was a son of Noah?
 A. Seth. B. Japheth.
 C. Isaac. D. Joseph.
65. Who among the following people had great faith in God?
 A. Isaac. B. Abraham.
 C. Moses. D. Joshua.
66. I assisted Moses because he was **not able to** speak well. Who am I?
 A. Caleb. B. Job.
 C. Aaron. D. Abraham.
67. Who said the following words, "Your God shall be my God and your people shall be my people?"
 A. Orpha. B. Sarah.
 C. Naomi. D. Ruth.
68. Solomon asked for one of the following. Which one is it?
 A. Land. B. Buildings.
 C. Wisdom. D. Wealth.
69. Which is the last book in the Old Testament?
 A. Matthew. B. Genesis.
 C. Revelation. D. Malachi.
70. Where was Moses given the ten commandments by God?
 A. On Mt. Kenya. B. On Mt. Sinai.
 C. On Mt. Horeb. D. On Mt. Olives.
71. Who was the wife of Moses?
 A. Zipporah. B. Hannah.
 C. Elizabeth. D. Rebecca.
72. How many people were fed with two fish and five loaves of bread by Jesus?
 A. 7000 B. 500
 C. 5000 D. 4000
73. Who betrayed Jesus for 30 pieces of silver?
 A. Thomas. B. Judas.
 C. Simon. D. Andrew.
74. The devil tested Jesus three times in a _____
 A. river. B. forest.
 C. ocean. D. desert.
75. What did Jesus want to teach His disciples when He washed their feet?
 A. Honesty. B. Humility.
 C. Kindness. D. Openness.
76. In which of the following places were the followers of Jesus Christ first called Christians?
 A. Antioch. B. Galilee.
 C. Bethlehem. D. Jerusalem.
77. What were the twelve disciples of Jesus told to carry when they were told to go and preach God's word?
 A. Food. B. Money.
 C. Nothing. D. Bags.
78. Who among the following people was the first Christian martyr?
 A. Paul. B. Peter.
 C. John the baptist. D. Stephen.
79. Which type of work was Zachariah, the father of John the baptist doing?
 A. Carpenter. B. Priest.
 C. Farmer. D. Collecting tax.
80. What was the other name for Tabitha?
 A. Dorcas. B. Lydia.
 C. Salome. D. Mary.
81. Who taught boys in the traditional African society?
 A. Mothers. B. Sisters.
 C. Grandfathers. D. Aunts.
82. Which of the following is a quality of a good leader?
 A. Should be selfish.
 B. Should be greedy.
 C. Should be unkind.
 D. Should be humble.
83. John and Mary were fighting. What should you do as a Christian?
 A. Tell them that it is not good to fight.
 B. Join John and fight Mary.
 C. Avoid them.
 D. Run away from them.
84. One of your classmates is HIV positive. What should you do as a Christian?
 A. Avoid the classmate.
 B. Love the classmate.
 C. Change the school.
 D. Laugh at the classmate.
85. Who should we give our problems to always?
 A. My mother. B. Priests.
 C. God. D. Satan.
86. When we share work at home we feel
 A. unhappy. B. tired.
 C. proud. D. happy.
87. When a class four boy always cleans the blackboard without being paid, he shows _____ type of service.
 A. voluntary B. involuntary
 C. forced D. paid
88. Who should we respect so that we may live long?
 A. Uncle. B. Father and mother.
 C. Aunt. D. Grandmother.
89. A class monitor in class 4 should be a good leader. He should do all the following **except**
 A. be obedient.
 B. be punctual always.
 C. respect others.
 D. **report only his enemies to the class teacher.**
90. Where did our ancestor **worship** God?
 A. Church. B. Mosque.
 C. Shrines. D. Temple.