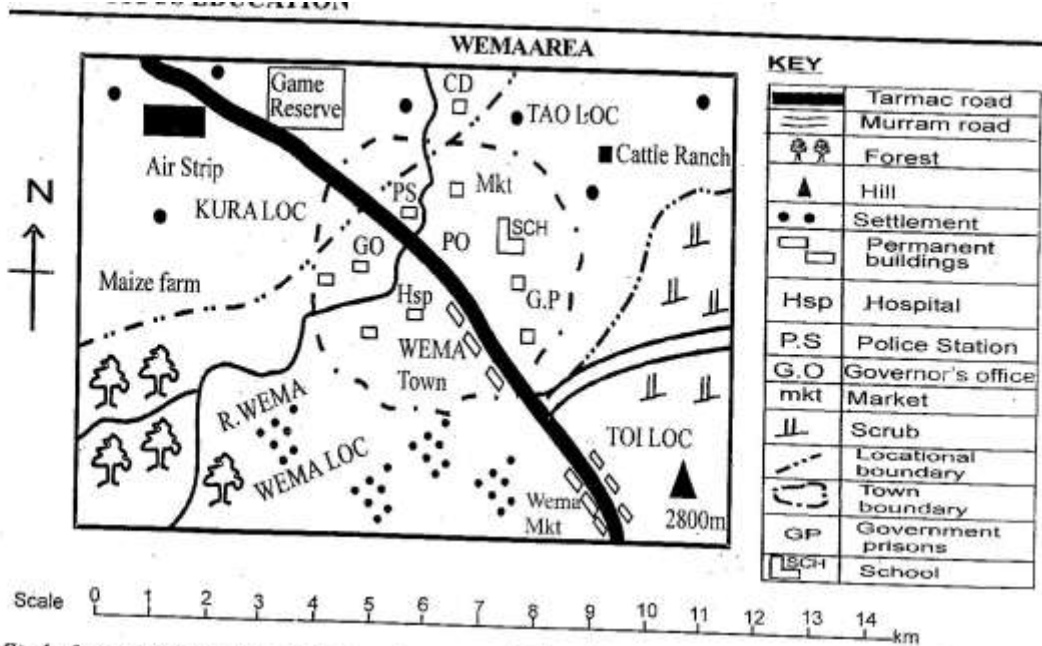


STD 7 END TERM 3 EXAM 2019

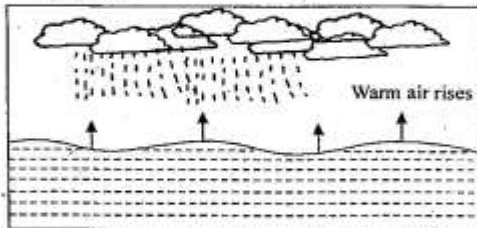
SOCIAL & RELIGIOUS STUDIES



Study the map of Wema area above and answer questions 1 to 7.

- The land in Wema area slopes from
  - North to South West
  - South West to North West
  - North to south
  - South West to North.
- Which of the following social services is missing in Wema area?
  - Security services
  - Communication services
  - Recreational services
  - Health services
- The type of industry that is **most** likely to be established in Tao location is
  - assembly
  - processing
  - manufacturing
  - service
- Three of the following are activities practised in Wema area **except**
  - mining
  - tourism
  - crop farming
  - livestock keeping
- The climate to the East of Wema town is **most** likely to be
  - cool and wet
  - hot and dry
  - hot and wet
  - cool and dry
- Which one of the following locations in Wema area is densely populated.
  - Kwa location
  - Toi location
  - Tao location
  - Wema location
- The type of population settlement found in Wema area is
  - linear
  - scattered
  - clustered
  - spare
- A school routine describes
  - achievements of a school
  - history of a school
  - aims of a school
  - when school activities are carried out.

9. The original homeland of the River-lake Nilotes is  
 A. Congo basin  
 B. Barl- el- Ghazal  
 C. Horn of Africa  
 D. Arabia.
10. The type of rainfall represented in the diagram below is



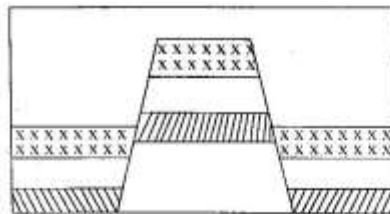
- A. frontal  
 B. relief  
 C. orographic  
 D. convectional
11. The following are ways citizens participate in promoting democracy **except**  
 A. voting  
 B. rigging elections  
 C. paying taxes  
 D. joining a political party of their choice.
12. Below are some uses of a mineral.  
 (i). *making shaft.*  
 (ii). *making jewellery*  
 (iii). *coating items.*  
 The mineral described is  
 A. copper  
 B. gold  
 C. petroleum  
 D. diatomite
13. Which one of the following aspects of weather is measured by a barometer?  
 A. Humidity  
 B. Air pressure  
 C. Temperature  
 D. Speed of wind
14. Which one of the following groups of National parks are found in Kenya?
- |                                 |                                   |
|---------------------------------|-----------------------------------|
| A. Tsavo<br>Amboseli<br>Ruma    | B. Bwindi<br>Murchisin<br>Yangudi |
| C. Serengeti<br>Ruaha<br>Sibilo | D. Axlum<br>Meroe<br>Dinder       |
15. Three of the following species of trees are hardwoods **except**  
 A. obeche  
 B. spruce  
 C. elgon Teak  
 D. mahogany
16. The **most** Northerly part of Africa is  
 A. Cape Guardafui  
 B. Cape Bon  
 C. Cape Verde  
 D. Cape Agulhas

17. Three of the following statements describe ways of demonstrating patriotism **except**  
 A. promoting nepotism  
 B. promoting human rights  
 C. protecting environment  
 D. treating all citizens equally.
18. A person vying for a civic seat is required by law to present party nominatin papers to the  
 A. Presiding officer  
 B. Attorney General  
 C. Returning officer  
 D. Chairperson of IEBC.
19. Bodele depression in chad was formed as a result of  
 A. deposition  
 B. wind erosion  
 C. down warping  
 D. volcanic action
20. Which one of the following is the largest country in Africa?  
 A. DR Congo  
 B. Algeria  
 C. Sudan  
 D. Angola
21. The following were functions of the Kabaka of Baganda kingdom **except** he  
 A. was the head of government  
 B. could declare war or make peace  
 C. was the leader of the community  
 D. hired mercenary soildiers to fight for the community.
22. Who among the following early visitors was an explorer?  
 A. Karl Peter  
 B. William Mackinon  
 C. Henry Morton  
 D. Seyyid Said
23. The country that borders Zambia to the North is  
 A. DR. Congo  
 B. Angola  
 C. Tanzania  
 D. Malawi.
24. Pyrethrum is important to the economy of Kenya because it  
 A. has led to economic development.  
 B. has created employment  
 C. is the leading foreign exchange earner  
 D. has led to development of infrastructure.
25. In the National flag, the red colour represents  
 A. common struggle  
 B. peace  
 C. land  
 D. people
26. The **most** sparsely populated country in Africa is  
 A. Nigeria  
 B. Ethiopia  
 C. Namibia  
 D. Seychelles
27. Who among the following African traditional leaders collaborated with the British?  
 A. Kabaka Mwanga  
 B. Samoure Toure  
 C. Lewanika  
 D. Kinjekitile Ngwale



45. The following are statements about a leader in Africa  
 (i) *Supported African culture*  
 (ii) *Promoted democracy in his country*  
 (iii) *Founder member of OAU*  
 (iv) *Led his country to independence*  
 The leader described above is  
 A. Kwame Nkrumah  
 B. Leopold Senghor  
 C. Haile Sellasie  
 D. Abdel Nasser
46. Below are statements about a traditional Government in Africa.  
 (i) *It was ruled by a king*  
 (ii) *King was assisted by a minister*  
 (iii) *King succeeded by elder sister's son*  
 (iv) *The rule was matrilineal*  
 The form of government described above is that of the  
 A. Nyanwezi  
 B. Khoikhoi  
 C. Buganda  
 D. Ancient Ghana
47. Three of the following are Mande speaking people. Which one is **not**?  
 A. Susu  
 B. Bambara  
 C. Dagomba  
 D. Soninke.
48. Namwa and Hamboli mountains are examples of  
 A. inselbergs  
 B. fold mountains  
 C. volcanic mountains  
 D. faulty mountains,
49. One of the ways in which African communities interacted in the past was through  
 A. birthdays  
 B. education  
 C. employment  
 D. marriage.
50. Which one of the following methods is used to mine petroleum in Nigeria?  
 A. Dredging  
 B. Drilling  
 C. Hill boring  
 D. Deep Shaft
51. Which one of the following is the official way of resolving a civil disputes in Kenya?  
 Use of  
 A. council of elders  
 B. court of laws  
 C. negotiations  
 D. arbitration.
52. Three of the following countries are members of the African Union **except**  
 A. Morocco  
 B. Libya  
 C. Sudan  
 D. Zimbabwe
53. The political party that led Tanganyika to independence in 1961 was  
 A. Chama cha Mapinduzi  
 B. Tanganyika African National Union  
 C. Afro Shiraz Party  
 D. Tanganyika African Association.

54. The following are reasons leading to rapid growth of towns in Africa. Which one is **not**?  
 A. Government policies  
 B. Trading activities  
 C. favourable climate  
 D. Good social amenities.
55. The rotation of the earth causes  
 A. changes in seasons  
 B. occurrence of water tides  
 C. differences in length of day and night  
 D. occurrence of day and night.
56. Which one of the following is the **correct** order in which the Luo migrated into Kenya?  
 A. Joka Jok - Joka Owiny - Joka Omollo  
 B. Joka Owiny - Joka Omollo - Joka Jok  
 C. Joka Omollo - Joka Owiny - Joka Jok  
 D. Joka Jok - Joka Omollo - Joka Owiny
57. Which of the following types of fish is caught in marine fishing grounds?  
 A. Lungfish  
 B. Sardine  
 C. Blackboss  
 D. Salmon
58. The illustration below represents a mountain which was formed as a result of



- A. erosion  
 B. folding  
 C. volcanicity  
 D. faulting.
59. Below are statements about a river in Africa  
 (i) *It enters the Indian Ocean*  
 (ii) *It is used to generate hydro-electric power*  
 (iii) *It marks a on boundary between two countries*  
 The river described above is  
 A. R. Ruvuma  
 B. R. Congo  
 C. R. Zambezi  
 D. R. Tana
60. In Kenya, representation of peoples interests in the county is the responsibility of  
 A. the ward representatives  
 B. the Governor  
 C. the Senator  
 D. the member of parliament.

**PART II: RELIGIOUS EDUCATION**  
**SECTION A**  
**CHRISTIAN RELIGIOUS EDUCATION**

1. The **main** reason why God created a woman was to
  - A. take care of God's creation
  - B. obey God's command
  - C. be a companion to man
  - D. name other animals.
2. Which one of the following is a promise made by God to Abraham during his call?
  - A. He would rule forever.
  - B. His kingdom shall live in peace always.
  - C. He shall never punish his people again.
  - D. He shall have many descendants.
3. When God called Moses, he was living in the land of
  - A. Egypt
  - B. Midian
  - C. Canaan
  - D. Israel.
4. The daughters-in-law of Naomi were
  - A. Rebecca and Orpah
  - B. Sarah and Orpah
  - C. Esther and Ruth
  - D. Ruth and Orpah.
5. Which one of the following commandments teaches about importance of man's relationship with God? Do not
  - A. steal
  - B. commit adultery
  - C. accuse anyone falsely
  - D. worship any other god but me.
6. The first Israelite priest during the Exodus was
  - A. Moses
  - B. Aaron
  - C. Jethro
  - D. Eliezar.
7. Three of the following are ways through which Christians can take care of refugees. Which one is **not**?
  - A. Donating food and clothes.
  - B. Preaching the word of hope.
  - C. Providing medical care.
  - D. Treating them as foreigners.
8. Christians must be ready to suffer for their faith because
  - A. suffering is part of life
  - B. the disciples also suffered
  - C. it is normal to undergo suffering
  - D. Jesus died for our sake.
9. During the trial of Jesus, the high Priest in the Jewish council was
  - A. Ananias
  - B. Caiphas
  - C. Zachariah
  - D. Samuel.
10. Paul encourages Christian wives to
  - A. love their children
  - B. divorce their non christian husbands
  - C. submit to their husbands
  - D. seek for their rights.
11. Critical thinking can be defined as
  - A. a life long process
  - B. the ability to analyse a situation and make judgement
  - C. expressing one's own opinion
  - D. thinking about new way of ideas.
12. According to christians, eternal life
  - A. begins when one accepts Jesus as their personal saviour
  - B. is living without fear
  - C. is hopeless life
  - D. is everlasting life that has no end.
13. Three of the following are the needy people in the society. Who is **not**?
  - A. Street children.
  - B. Physically handicapped.
  - C. The dumb.
  - D. Children whose parents work in towns.
14. Which of the following is **not** a way of encouraging manual work in the community?
  - A. Underpaying the manual workers.
  - B. Educating people about the importance of manual work.
  - C. Encouraging people to do manual work.
  - D. Improving the terms and conditions of manual workers.
15. Which one of the following groups consist of Christian values?
  - A. Jealousy and corruption
  - B. Mercifulness and intolerance
  - C. Selfishness and purity
  - D. Holiness and peacefulness
16. "*I find no condem in this man*" (Luke 23:4). These words were spoken by
  - A. The Sanhendrin
  - B. Pilate
  - C. Barrabas
  - D. King Herod.

77. Which one of the following statements was said by the repentant thief to Jesus during crucifixion?
- "I thirst"
  - "I promise to be with you in paradise"
  - "Remember me father when you come as a king"
  - "Truly this man was a son of God"
78. Omollo visits the sick and gives them food. The fruits of holy Spirit he demonstrates is
- peace
  - love
  - kindness
  - patience.
79. Three of the following activities in the early church demonstrated unity among the believers **except**
- sharing belongings
  - reciting the apostles' creed
  - praying together
  - receiving the holy spirit by laying hands.
80. The **main** reason why the seven deacons were appointed was to
- preach the gospel
  - pray for the sick
  - distribute food and money to widows
  - teach the apostles' creed.
81. In African traditional society, children were taught moral values **mainly** by
- parents
  - peer groups
  - elders
  - strangers.
82. Which one of the following practices during marriage ceremony is common in both Christianity and African traditional communities?
- Polygamy
  - Dowry payments
  - Divorce
  - Wife inheritance
83. Which one of the following roles is performed by elders during worship in Traditional African communities?
- Making sacrifices.
  - Baptising people.
  - Forecasting the future.
  - Explaining cause of problems.
84. The **best** way for a christian youth to use their leisure time is by
- visiting orphans
  - visiting relatives
  - reading the bible
  - going to animal orphanage.
85. Which one of the following is **not** a form of child labour?
- Helping our parents.
  - Working in a factory.
  - Digging in a quarry.
  - Cooking in a hotel.
86. On your way to school, you hear a child crying in the nearest bush. As a christian, what **best** action should you take?
- Run to school to avoid being late.
  - Go back home to inform the parents.
  - Go and check on the child and ask for help.
  - Report to the nearest police station.
87. Who among the following people is **not** a member of the clergy?
- Bishops
  - Pastor
  - Priest
  - Lay leader
88. Njeri, your classmate, has stopped coming to school because she is pregnant. How **best** would you advise her?
- Transfer to another school.
  - Look for employment in town.
  - Continue coming to school until pregnancy is mature.
  - Advice her to abort.
89. Paul, a standard seven boy wrote a love letter to his female classmate. The teacher found it in a book. What advice do you think the teacher gave to him?
- He is too young to have sex.
  - Sex is part of God's creation.
  - Pre-marital sex is sin.
  - It is a prove that he is mature.
90. Which one of the following activities was done by the early Christian missionaries in Kenya?
- Introduction of cash crops.
  - Building the railways.
  - Improving medical care.
  - Promoting African culture.