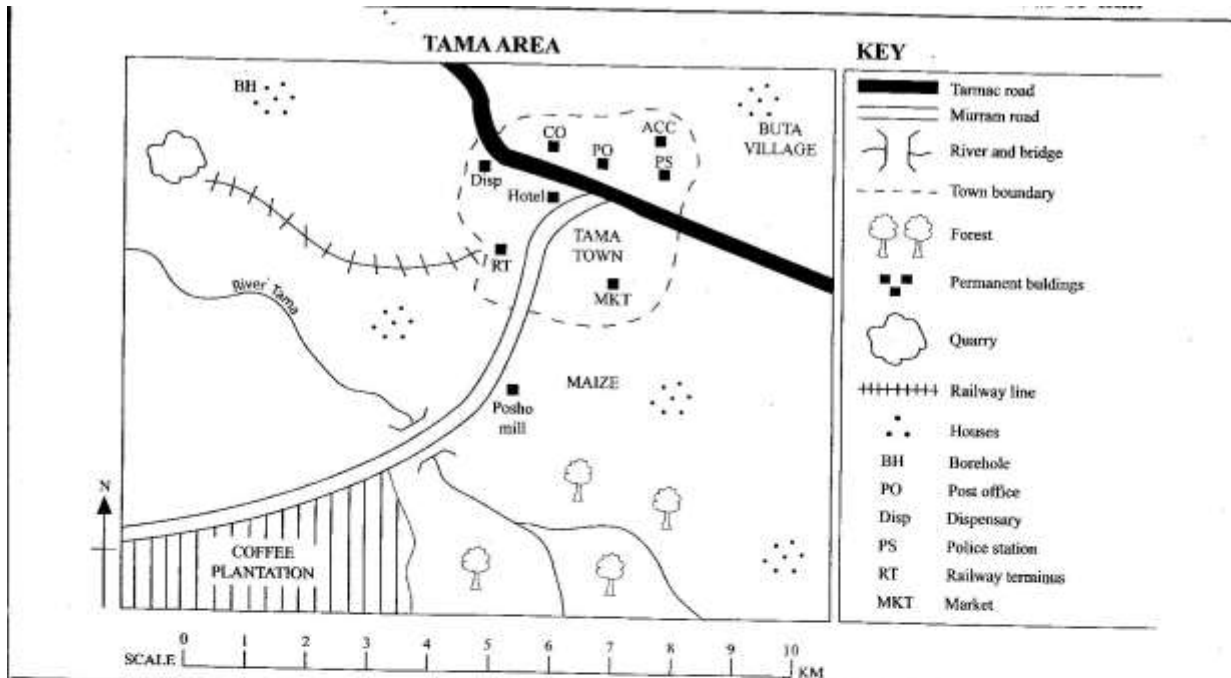


STD 6 END TERM 3 EXAM 2019

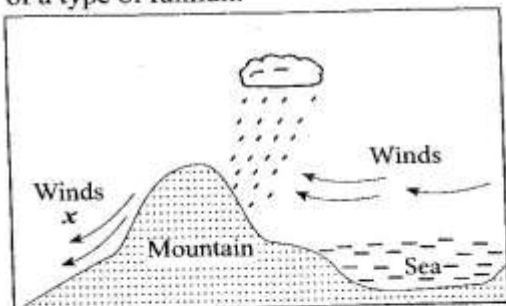
SOCIAL & RELIGIOUS STUDIES



Study the map of Tama area provided and answer questions 1 to 7.

- What is the direction of Buta village from the coffee plantation?
 - South West
 - North East
 - South East
 - North West
- The **main** form of transport in Tama area is
 - water transport
 - air transport
 - railway transport
 - road transport
- The settlement pattern in Tama area can be described as
 - clustered
 - sparse
 - densely
 - linear
- The type of climate experienced in the North Western part of Tama area is
 - cool and dry
 - hot and wet
 - cool and wet
 - hot and dry
- The railway line in Tama area is likely to be used for transporting
 - livestock
 - minerals
 - coffee
 - passengers
- What evidence from the map shows that Tama town is a communication centre? The presence of a
 - police station
 - county office
 - post office
 - market
- Which other crop is likely to do well in the Southern part of Tama area?
 - Tea
 - Cotton
 - Sisal
 - Sugarcane

8. Which one of the following communities consist of the Central Bantu of Kenya?
 A. Wadawida, Agikuyu, Abasuba
 B. Pokomo, Wataita, Waswahili
 C. Abaluhya, Aembu, Akamba
 D. Ameru, Agikuyu, Aembu
9. Pipelines are used to transport oil and water **mainly** because
 A. they are cheap to maintain
 B. it reduces accidents on roads
 C. oil is flammable
 D. it minimizes cases of theft
10. The type of vegetation found at the mouth of river Tana and Ruvuma is
 A. Tropical rainforests
 B. Savannah woodland
 C. Mangrove forest
 D. Papyrus swamp vegetation
11. Three of the following are drainage features. Which one is **not**?
 A. swamps
 B. Lakes
 C. Rivers
 D. Taps
12. As Kendi walked home from school, she saw the words "The sky is the limit" at the school gate. The words referred to a
 A. school routine
 B. school logo
 C. school motto
 D. school sign post
13. The diagram below represents the formation of a type of rainfall.



- This type of rainfall is known as
 A. Mountain rainfall
 B. Relief rainfall
 C. Coastal rainfall
 D. Convectional rainfall

14. Below are statements about a country in Eastern Africa.
 i. It is located North of Equator
 ii. It was not colonized
 iii. It is the headquarters of a continental organization
 iv. It is landlocked
 The country described above is
 A. Uganda
 B. South Sudan
 C. Djibouti
 D. Ethiopia
15. The **best** relief region to carry out pastoralism are the
 A. Highlands
 B. Plateaus
 C. Lake basins
 D. Rift Valley
16. Which one of the following aspects of our culture need not to be preserved?
 A. Cattle raids
 B. Traditional Medicine
 C. Initiation
 D. Moral laws
17. The type of chicken kept for laying eggs only are called
 A. broilers
 B. Hybreed
 C. Layers
 D. Chicks
18. The daughter to your brother is your
 A. Cousin
 B. Niece
 C. Aunt
 D. Nephew
19. Which one of the following methods of poultry farming requires a big piece of land?
 A. Deep litter system
 B. Battery system
 C. Free range system
 D. Fold system
20. Three of the following are problems facing sea fishing in Kenya and Tanzania. Which one is **not**?
 A. Lack of proper refrigeration system
 B. Water pollution
 C. Presence of water hyacinth
 D. Inadequate capital to buy modern fishing equipment.
21. Which one of the following is a negative impact of industries onto the environment?
 A. Creation of job opportunities

- B. Production of goods for local market
- C. Source of revenue for the government
- D. Land destruction.

2. Which one of the following countries of Eastern Africa is **wrongly** matched with its main sea port?

Country	Main seaport
A. Kenya	Mombasa
B. Sudan	Massawa
C. Tanzania	Dar-es-Salam
D. Somalia	Mogadishu

3. The government encourages afforestation **mainly** in order to

- A. ensure continuous supply of timber
- B. protect indigenous trees
- C. make the environment beautiful
- D. protect sources of water

4. Three of the following are sisal growing areas in Kenya. Which one is **not**?

- A. Kitui
- B. Kilifi
- C. Solai
- D. Voi

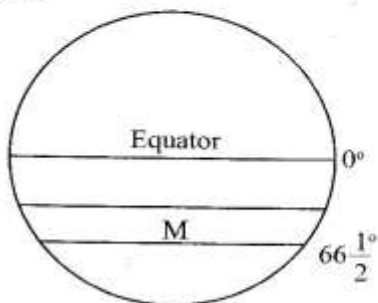
5. The **best** soil for growing tea is

- A. alluvial soils
- B. volcanic soils
- C. sandy soils
- D. black cotton soils

6. During the pre-colonial period, most Kenyan communities interacted through

- A. migrations
- B. games and sports
- C. trade
- D. initiation

7. The diagram below represents major lines of latitudes.



The line of latitude marked M is

- A. Tropic of cancer
- B. Arctic circle
- C. Tropic of Capricorn
- D. Antarctic circle

28. The country that borders South Sudan to the West is

- A. Chad
- B. Democratic Republic of Congo
- C. Central African Republic
- D. Libya

29. Pupils are taught road safety education in schools in order to

- A. be able to make proper use of the roads
- B. become responsible future drivers
- C. assist traffic police in their duties
- D. know the causes of road accidents

30. Wambua assisted an old man to cross the road when he was going home from school. By so doing, he showed

- A. Obedience
- B. Courtesy
- C. Honesty
- D. Trust

31. Which one of the following activities by pupils shows participation in communal work?

- A. Doing general cleaning in school
- B. The class on duty cleaning the school compound
- C. Upper Primary pupils visiting a children's home
- D. Pupils participating in games and sports

32. The type of vegetation found at altitude 3000 to 4000 metres is

- A. Rain forests
- B. Heath and moorland
- C. Papyrus reeds
- D. Bamboo.

33. Which one of the following statements best explains why Kenya highlands have a high population density?

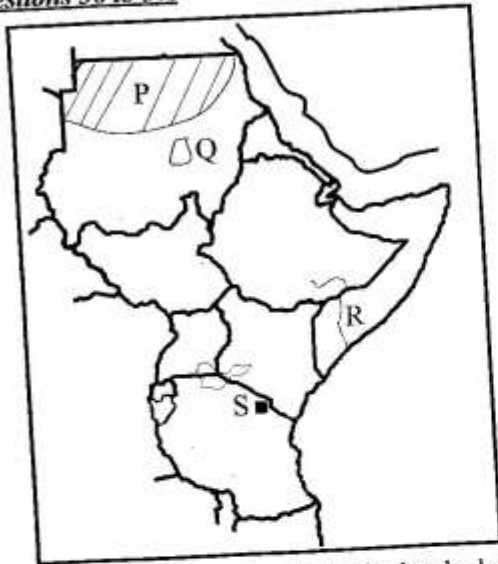
- A. They have fertile soils and good climate
- B. It is well connected with good roads
- C. The area has several mineral deposits
- D. It has many urban centres which attract people.

34. The head of state in Kenya is the

- A. Deputy president
- B. Attorney general
- C. President
- D. Chief justice

35. The type of democracy where by all people are involved in decision making is known as
- nominal democracy
 - direct democracy
 - delegative democracy
 - representative democracy

Use the map of Eastern Africa below to answer questions 36 to 39.



36. The type of vegetation found in the shaded area marked P is
- Mountain vegetation
 - Rainforest vegetation
 - Desert vegetation
 - Savannah grassland vegetation
37. The crop grown in the area marked Q is
- Sugarcane
 - Cotton
 - Sisal
 - Coffee
38. The river marked R is
- Tana
 - Shibeli
 - Rufiji
 - Juba
39. The town marked S is
- Dodoma
 - Arusha
 - Mwanza
 - Mtwara

40. Which one of the following communities consists of the Eastern Cushites only?

- | | |
|------------------------------|--------------------------------|
| A. Oromo
Pokot
Sandawe | B. Mbugu
Traqw
Rendile |
| C. Boran
Somali
Gabra | D. Aramanik
Dahalo
Burji |

41. Which one of the following was **not** a characteristic of traditional farming?

- Farmers depended on family labour
- Some chemicals were used
- It was practised on small scale
- Farmers used simple tools

42. In Kenya, National parks are managed by the

- Kenya Forestry Research Institute (KEFRI)
- County government
- Tourism Board of Kenya
- Kenya Wildlife Service

43. Which one of the following communities in Kenya is **correctly** matched with the title of their leader during the pre-colonial period?

Community	Title of the leader
A. Maasai	Orkoiyot
B. Ameru	Masaku
C. Nandi	Oloibon
D. Abawanga	Nabongo

44. Which one of the following elements of the map shows the relationship between distances on a map and the actual distance?

- Compass point
- Scale
- Key
- Frame

45. Who among the following traditional leaders collaborated with the British colonialists?

- Koitalel Samoei
- Kabaka Mwanga
- Chief Waiyaki of Dagoretti
- Mekatilili wa Menza

46. Police are called during the graduation ceremony in order to

- award the certificates to the graduands
- keep law and order
- welcome the chief guest
- give refreshments to the visitors.

47. The government of Kenya encourages farmers to establish fish farms **mainly** in order to

- increase the production of fish for export
- make use of waste land
- promote eating fish in Kenya
- create self-employment

48. Which one of the following is **not** a characteristic of beef farming in Kenya?
 A. Animals are locked in paddocks
 B. Veterinary services are provided in the ranches
 C. Cross-breeding is normally done
 D. Slaughter houses are located within the ranches
49. Mobile telephone service providers require their customers to register with them in order to
 A. know the number of subscribers using their services
 B. know their next of kin
 C. minimize cases of fraud
 D. give them surprise prizes
50. The **main** source of revenue for the national government is
 A. school fees
 B. taxes paid by citizens
 C. court fines
 D. loan from other countries
51. The following are challenges that face trade in Eastern Africa **except**
 A. similarity of goods
 B. political stability
 C. poor means of transport
 D. lack of a common currency
52. The Danakil Alps in Ethiopia and the Usambara mountains in Tanzania have one factor in **common**. It is that both are
 A. volcanic mountains
 B. snow-capped
 C. block mountains
 D. residual mountains
53. In Kenya, general elections are held after
 A. 15 years B. 5 years
 C. 2 years D. 10 years
54. Mob justice is bad because it denies the victim the right to
 A. life B. association
 C. own property D. fair trial
55. The main problem facing wildlife in Kenya today is
 A. prolonged drought
 B. poaching
 C. outbreak of wild fires
 D. human-wildlife conflict
56. Soda ash at the Lake Magadi is mined through a process called
 A. open-cast B. dredging
 C. drilling D. panning
57. Debates in parliament of Kenya are controlled by the
 A. clerk
 B. president
 C. speaker of the National Assembly
 D. leader of the majority
58. Which arm of the government is responsible for implementing government policies?
 A. The executive
 B. The Judiciary
 C. The constitution
 D. The legislature
59. Which one of the following is **not** an aspect of our culture?
 A. Dressing B. Clan
 C. Food D. Rites of passage
60. Three of the following are ways of becoming a Kenyan citizen. Which one is **not**?
 A. By birth
 B. Through dual citizenship
 C. By recommendation
 D. By registration

PART 2: CHRISTIAN RELIGIOUS EDUCATION

61. Which sin did Adam and Eve commit?
 A. Eating fruits.
 B. Disobeying God's command.
 C. Adultery.
 D. Hiding from God.
62. Which one of the following animals was first sent by Noah to check whether the land was dry?
 A. Kangaroo. B. Raven.
 C. Dove. D. Eagle.
63. Which one of the following sets of children were sons of Joseph son of Jacob?
 A. Gershom and Epharaim.
 B. Eleazar and Manassch.
 C. Gershom and Eleazar.
 D. Ephraim and Manassch.
64. On which mountain did Moses die?
 A. Nebo. B. Moriah.
 C. Ararat. D. Carmel.

65. Who among the following prophets healed Naaman the Assyrian Army Commander of his leprosy?
 A. Isaiah. B. Elijah.
 C. Elisha. D. Nathan.
66. Which one of the following was done by King David?
 A. Building the Temple.
 B. Bringing the Ark of the Covenant to Jerusalem.
 C. Judging a difficult case of two women.
 D. Leading the Israelites to the promised land.
67. One of the following prophets was called by God when he was a small boy. Who was he?
 A. Isaiah B. Daniel
 C. Jeremiah D. Nathan
68. Who among the following is associated with the book of Psalms?
 A. King Solomon. B. King David.
 C. Prophet Isaiah. D. Prophet Jeremiah.
69. Which one of the following names of Jesus means God saves?
 A. Messiah. B. Christ.
 C. Jesus. D. Emmanuel.
70. Why was Jesus born?
 A. To preach the Good News.
 B. To perform miracles.
 C. To heal the sick.
 D. To bring back human beings to God.
71. Jesus was a refugee in
 A. Syria B. Egypt
 C. Ethiopia D. Babylon
72. Which disciple of Jesus was called "Rock"?
 A. Peter B. Judas
 C. John D. James
73. Where did Jesus teach the beatitudes?
 A. At the shore of lake Galilee.
 B. Under the sycamore tree.
 C. In the Temple.
 D. On a mountain.
74. Who said these words "There comes the Lamb of God"
 A. Pontius Pilate B. Nathaneal
 C. John the Baptist D. Sons of Zebedee
75. Which miracle of Jesus shows that he has power to forgive sins?
 A. Healing the ten lepers.
 B. Healing the paralyzed man.
 C. Raising Lazarus.
 D. Calming the storm.
76. When did Jesus say these words. "This is my blood which seals God's covenant; drink it."
 A. At the cross.
 B. During the last supper.
 C. Before going to heaven.
 D. After resurrection.
77. The book of the Bible that explains the history of the early church is
 A. Deuteronomy. B. Matthew.
 C. Romans. D. Acts of the Apostles.
78. The books written by St. Paul are called
 A. Epistles B. Gospels
 C. Law books D. Poetry books
79. The lady raised from the dead by Peter in Joppa was called?
 A. Lydia B. Tabitha
 C. Priscilla D. Rhoda
80. Which one of the following symbolized the Holy Spirit in the New Testament?
 A. Dove B. Fire
 C. Earthquake D. Lightning
81. Which one of the following is a life skill?
 A. Criticism B. Depression
 C. Critical thinking D. Quietness
82. The ceremony that children undergo into adulthood in Traditional African Societies is called?
 A. Dedication B. Baptism
 C. Initiation D. Seclusion
83. Which one is **true** according to African Traditional Religion?
 A. There is life after death.
 B. Good people will go to heaven.
 C. Jesus will come again.
 D. The Holy Spirit guides people.
84. In all Traditional African Stories of origin we learn that?
 A. God created the first people.
 B. Human beings evolved from apes.
 C. God placed man in the Garden of Eden.
 D. Life began with a loud bang.
85. People who die in our lifetime according to African Traditional heritage are called the?
 A. Unborn B. Departed
 C. Ancestors D. Living-Dead
86. What advice would you give your deskmate who has developed a habit of cheating in the exam?
 A. Stop going to school.
 B. He will be punished if caught.
 C. He should be honest.
 D. You would stop being friends.

87. Which one of the following is child labour?
A child
A. Cleaning their house compound.
B. Working in a quarry to be paid.
C. Doing extra work in his weak subjects.
D. Left with his siblings during the holidays.
88. Which one will attract people to go to church?
A. Helping the orphans.
B. Building a big church.
C. Serving people who go to church only.
D. Singing and worshipping loudly.
89. Why should Christians work?
A. It is a punishment from God.
B. God also worked.
C. It is a way of passing time.
D. Lazy people will not go to heaven.
90. Which one of the following was started by the early missionaries in Kenya?
A. Prisons B. High-rise buildings
C. African culture D. Schools