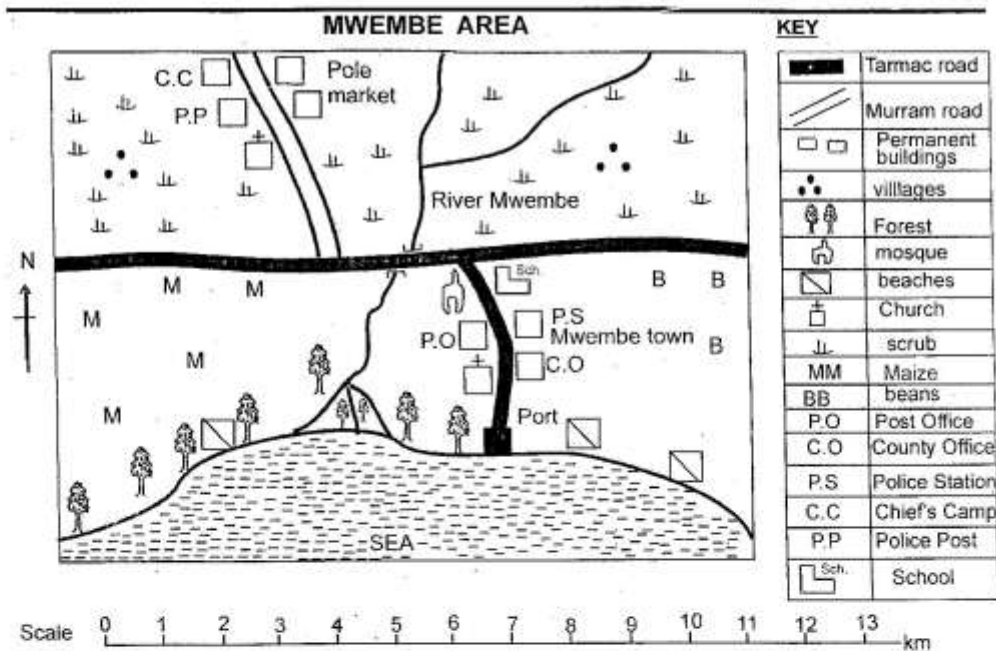


STD 5 END TERM 3 EXAM 2019

SOCIAL STUDIES & RELIGIOUS



Study the map of Mwembe area above and answer questions 1 to 7.

- The direction of the port from Pole market is
 A. North West B. South East
 C. North East D. South West.
- The climate of Northern part of Mwembe area is likely to be
 A. cool and wet B. hot and wet
 C. hot and dry D. cool and dry
- Which one of the following is **not** a function of Mwembe town?
 A. Administrative centre.
 B. Port city.
 C. Tourist centre.
 D. Diplomatic centre.
- The forest found in Mwembe area can be classified as
 A. mangrove forest B. woodland forest
 C. riverine forest D. rain forest.
- The feature formed by river Mwembe at its mouth is known as
 A. tributaries B. estuary
 C. distributary D. delta.
- Mwembe area is a
 A. location B. sub-location
 C. county D. district.
- Which one of the following shows that there is security in Mwembe area?
 A. County office. B. Chief's camp.
 C. Beaches. D. Police station.
- The element of a map that helps us to identify the direction of features in relation to others is called
 A. scale B. compass
 C. title D. keys.

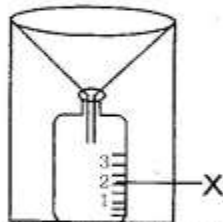
9. In the past physical features were used for all of the following purposes **except**
- hills were used to make boundaries
 - lakes were used for transportation
 - rivers were used for generating electricity
 - plains were used for grazing.
10. Which one of the following types of soils is used in building industry?
- Volcanic
 - Loamy
 - Clay
 - Sandy
11. Kenya lies between longitudes _____ and latitudes _____
- 34°E, 42°E and 5°N, 5°S
 - 30°E, 40°E and 4°N, 4°S
 - 34°W, 42°E and 5°N, 5°S
 - 5°E, 5°E and 34°N, 42°S

12. Which one of the following mountains is **correctly** matched with the county it is found?

Mountain	County
A. Kulal	Nandi
B. Marsabit	Turkana
C. Elgon	Trans nzoia
D. Longonot	Kajiado

13. The following are language groups in Kenya. Which one consists of highland Nilotes only?
- Nandi, Pokot, Kipsigis.
 - Iteso, Maasai, Luo.
 - Turkana, Samburu, Tugen.
 - Rendile, Borana, Njemps.

Use the diagram below to answer questions 14 - 15.



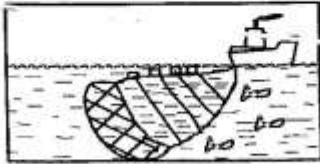
14. The weather instrument above is used to measure
- temperature
 - wind
 - rainfall
 - humidity
15. The part marked X is known as
- metal container
 - funnel
 - metal index
 - measuring cylinder.

16. Which one of the following counties is sparsely populated?
- Kiambu
 - Kisii
 - Garissa
 - Mombasa
17. The walls of the Rift valley are called
- inselbergs
 - escarpments
 - fault lines
 - highlands
18. Which one of the following statements about the central highlands of Kenya is **true**?
- They have alluvial soils.
 - They receive low rainfall.
 - Some areas are covered with forest.
 - Have high temperatures throughout the year.
19. The following are causes of soil erosion **except**
- contour farming
 - deforestation
 - overgrazing
 - monocropping.
20. Which one of the following towns experiences hot and wet climate?
- Nyeri
 - Kisumu
 - Eldoret
 - Meru
21. Which one of the following types of vegetation is arranged in zones according to altitude?
- Mountain vegetation.
 - Savanna grassland vegetation.
 - Forest vegetation.
 - Swamp vegetation.
22. Which one of the following skills was taught to both boys and girls in the past?
- Medicinemanship.
 - Hunting.
 - Iron working.
 - Cooking.
23. The type of farming where small portions of land were cultivated at a time before moving to a new one was known as
- shifting cultivation
 - mixed farming
 - mono cropping
 - bush fallowing.

24. The following statements describes an age-set in traditional African community. Which one is **not**?
- A. Made up of people initiated together.
 - B. Varied from one community to another.
 - C. Made up of people born at the same time.
 - D. Made up of people who married at the same time.

25. The following are products from traditional leather industry **except**
- A. sheath
 - B. sandals
 - C. clothes
 - D. mats

26. The fishing method shown below is known as



- A. trawling
 - B. net drifting
 - C. purse-seining
 - D. long lining.
27. Which one of the following groups of fish are caught in inland fishing grounds?
- A. Prawns, tuna, sardine.
 - B. Trout, dagaa, black bass.
 - C. Parrofish, mullet, lobster.
 - D. Oyster, mackerel, haddock.

28. Beef cattles are kept in large extensive farms known as
- A. paddocks
 - B. plantation
 - C. stalls
 - D. ranches.

29. Which one of the following minerals is leading export in Kenya?
- A. Diatomite
 - B. Limestone
 - C. Soda ash
 - D. Flouspar

30. Below are requirements for the growth of a certain crop in Kenya;
- (i) high altitude
 - (ii) high rainfall
 - (iii) cool temperatures
 - (iv) well drained slightly acid fertile soils
- The above conditions favours the growth of

- A. pyrethrum
 - B. tea
 - C. flowers
 - D. cotton.
31. Which one of the following minerals is mined through scooping?
- A. Sand
 - B. Salt
 - C. Limestone
 - D. Flouspar

32. The **most** common method of rearing chicken used by mangu farmers in rural areas is
- A. free range system
 - B. fold system
 - C. deep litter system
 - D. battery system.

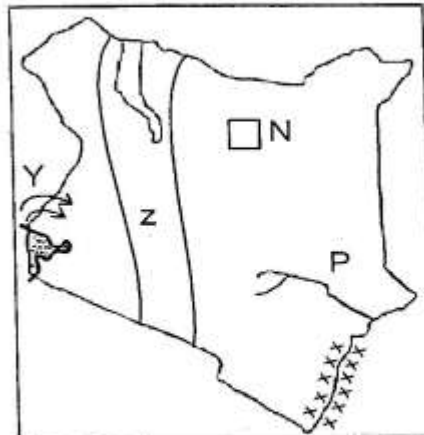
33. Which one of the following minerals is mined in Bamburi and Athi river?
- A. Diatomite
 - B. Limestone
 - C. Flouspar
 - D. Soda ash

34. The following are conditions that favour dairy farming **except**
- A. plenty of pasture and fodder crops
 - B. availability of high reliable rainfall
 - C. poor method of transport
 - D. availability of ready markets.

35. Which one of the following is non- food processing industry?
- A. Tea processing.
 - B. Fruit canning.
 - C. Cotton ginning.
 - D. Sugar-cane processing.

36. The following are functions of Eldoret town **except**
- A. administrative centre
 - B. agricultural centre
 - C. tourist centre
 - D. industrial centre.

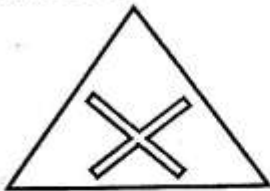
Use the map below to answer questions 37- 41



37. The **main** tourist attraction in the area marked XXX is
- A. wildlife
 - B. historical sites
 - C. sandy beaches
 - D. mangrove forests.

38. Which one of the following is **not** a major importance of the river marked P?
 A. It is used for irrigation
 B. It is used to generate hydro- electric power
 C. It provide water for domestic used
 D. It is used for mining.
39. The game reserve marked N is
 A. Marsabit B. Sibiloi
 C. Tsavo D. Amboseli
40. Which one of following communities migrated into Kenya following the route marked Y?
 A. Abaluhya B. Nandi
 C. Maasai D. Tugen
41. Which one of the following is a characteristic of a physical region marked R?
 A. It has many rivers on its floor.
 B. It was formed through faulting and sinking.
 C. It covers a large part of Kenya.
 D. It receive cool and wet climate.
42. Which of the following is **not** importance of trade to the economy of Kenya? It
 A. creates job opportunities
 B. promotes growth of slums
 C. is a source of government revenue
 D. has led to industrial development.
43. The Agiriama leader who helped them to resist the British was called
 A. Masaku B. Mekatilili
 C. Koitalel D. Nabongo.
44. Before the coming of the British, Abawanga were ruled by
 A. council of elders
 B. hereditary chiefs
 C. heridatery kings
 D. a group of headmen.
45. The fertile areas where Europeans settled during the colonial period were known as
 A. African reserves
 B. native reserves
 C. settlement schemes
 D. white highlands.
46. A person who belongs to a particular country is known as a
 A. foreigner B. refugee
 C. citizen D. patriot.
47. The colour in the national flag that symbolizes the struggle for independence is
 A. green B. white
 C. black D. red.
48. The following are causes of road accidents in Kenya **except**
 A. poor roads
 B. road worthy vehicles
 C. over speeding
 D. lack of road signs.
49. Which one of the following is a modern form of communication?
 A. Smoke signals.
 B. Sending a messenger.
 C. Courier services.
 D. Drum beating.
50. Which one of the following forms of transport is used in transporting perishable goods?
 A. Air B. Water
 C. Railway D. Road
51. Which one of the following political parties led Kenya to independence?
 A. K. A. N. U B. K. A. D. U
 C. K. A. U D. P. N. U
52. A type of democracy where by citizens elect representatives who make decisions on their behalf is called
 A. liberal democracy
 B. nomination of democracy
 C. parliamentary democracy
 D. direct democracy.
53. Who among the following is not a member of the body of elections in Kenya?
 A. Chair person
 B. Commissioners
 C. Judges
 D. Returning officers
54. Most Kenyan citizens acquire their citizenship through
 A. registration B. birth
 C. association D. dual citizenhip
55. Kenya was colonised by
 A. France B. Germany
 C. Britain D. Italy.
56. The arm of government which interprets the law and settle disputes is the
 A. cabinet B. legislature
 C. executive D. judiciary.
57. According to the Kenyan constitution, the senate consists of ___ members.
 A. 350 B. 290
 C. 68 D. 47

58. The head of executives arm of government is the
 A. speaker
 B. chief justice
 C. president
 D. attorney general
59. Lake Bogoria is famous for its
 A. flamingos B. soda ash
 C. hot springs D. fish.
60. The road sign below alerts the drivers that there is a



- A. Train crossing
 B. round about ahead
 C. road junction
 D. cattle crossing.

SECTION II
CHRISTIAN RELIGIOUS EDUCATION

61. What punishment was Eve given by God because of her disobedience?
 A. Suffering while giving birth.
 B. To toil the land.
 C. To be eating dust.
 D. To strike her heel.
62. Who among the following were sons of Abraham?
 A. Jacob and Esau.
 B. Joseph and Benjamin.
 C. Isaac and Ishmael.
 D. David and Samuel.
63. Which one of the following commandments was **not** broken by King Ahab?
 A. Do not commit adultery.
 B. Do not worship idols.
 C. Do not commit murder.
 D. Do not covet other peoples property.
64. The king of Israel who defeated the philistines army was known as
 A. David B. Solomon
 C. Saul D. Ahab.

65. Spiritual growth is the growth of
 A. body
 B. mind
 C. emotion
 D. soul
66. The prophet who is associated with the new covenant was
 A. Ezekiel B. Daniel
 C. Jeremiah D. Isaiah
67. I saw a stairway to heaven with Angels moving up and down in the dream. Who am I?
 A. Joseph B. Daniel
 C. Jacob D. Abraham
68. Which one of the following pairs of the books represent the last books of the Old and New Testament?
 A. Genesis and Matthew
 B. Matthew and Revelation.
 C. Malachi and Revelation.
 D. Exodus and Luke.
69. When there was famine Alimelechi and his family moved to the land of
 A. Moab B. Egypt
 C. Israel D. Rome.
70. The annunciation of the birth of the prince of peace was done by
 A. shepherds B. wisemen
 C. Mary D. Angel Gabriel.
71. Complete the following line from the Apostolic creed. "Born of the virgin Mary, suffered under"
 A. Herod
 B. Pontius Pilate
 C. Augustus Caesar
 D. Jewish people
72. The second greatest commandment is
 A. love the God your God
 B. honour your father and mother
 C. do not worship idols
 D. love your neighbour as you love yourself.
73. Which of the following miracles of Jesus showed that he had power over death?
 A. Walking on water.
 B. Miraculous catch of fish.
 C. Calming the storm.
 D. Raising of Lazarus.
74. Who among the following warned leaders against injustice?
 A. Micah B. Hosea
 C. Amos D. Daniel

75. "Man cannot live by bread alone," In which occasion of Jesus were the above words said?
 A: Temptations B. Crucification
 C. Baptism D. Birth
76. From sermon on the mount, who will inherit the kingdom of God?
 A. Persecuted.
 B. Merciful.
 C. Pure in heart.
 D. Peace maker.
77. The special meal that Jesus shared with disciples was known as
 A. Holy communion
 B. Last supper
 C. Christmas
 D. Passover.
78. Jesus overcame evil through his
 A. baptism
 B. death
 C. suffering
 D. preaching.
79. Which one of the following words means 'universal church'?
 A. Believers B. Saints
 C. Apostels D. Catholic
80. Jesus was betrayed by
 A. Peter B. John
 C. Judas D. Levi.
81. According to the parable of the sower, the seed represents
 A. people who receive the word
 B. worries and desires of the world
 C. word of God
 D. people who gave up.
82. Apostle Paul wrote the books called
 A. gospels B. history
 C. laws D. letters.
83. During the baptism of Jesus, the holy spirit descended on Him in form of
 A. lightening
 B. tongues of fire
 C. thunder
 D. dove.
84. Which one of the following separates us from God?
 A. Disobediencce.
 B. Courage.
 C. Humility.
 D. Happiness.
85. Kindness, goodness, self-control are all
 A. qualities of a good leader
 B. fruits of the Holy spirit
 C. gifts of the Holy spirit
 D. christian beliefs.
86. The **best** way christians can show God's love to others is by
 A. helping those in need
 B. reading the bible
 C. performing miracles
 D. going to church.
87. Paul and Silas were jailed because they
 A. hated the Pharisees
 B. had killed people
 C. preached the word of God
 D. Persecuted christians.
88. The name Jesus means
 A. Saviour
 B. God with us
 C. Drawn out of water
 D. Prince of peace
89. The **main** message of John the baptist was about
 A. repentance B. salvation
 C. baptism D. eternal life.
90. Which one of the following causes conflict?
 A. Peace B. Joy
 C. Anger D. Love