



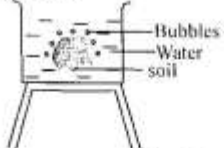


STD 4 END TERM 3 EXAMS 2019

SCIENCE

- Which of the following tool maintenance practices is commonly done to cutting tools?
A. Proper storage B. Sharpening
C. Cleaning D. Lubricating
- The pressure exerted by water is greatest at the
A. top and bottom B. middle
C. top D. bottom.
- Which one of the following is a pair of only things that will float on water because of shape?
A. Bottle top and sufuria
B. Rubber and iron
C. Wax and wood
D. Ship and wax glass
- Which of the following diagram shows the type of a teeth used for biting and cutting food?
A.  B. 
C.  D. 
- Which one of the following is a use of heat energy?
A. Warming
B. Seeing clearly
C. Reading comfortably
D. Discouraging pests.
- Which one of the following is the **main** source of natural light?
A. Firefly B. Moon
C. Sun D. Electricity
- The following are ways of caring for teeth **except**
A. brushing teeth after every meal.
B. regular visiting to dentist
C. eating raw carrots
D. eating sugary food.
- Air that is in motion is called
A. water B. wind
C. clouds D. rainfall.
- The type of clouds that indicate fine weather also
A. bring alot of rainfall
B. are found high in the sky
C. are not cotton like
D. are dark grey in colour.
- Standard 4 pupils did the experiment shown below.

Which component of soil were they investigating?
A. Air
B. Water
C. Living organisms.
D. Organic matter

11. Which of the following items should **not** be shared by family members?
A. Mirror B. Chair
C. Plates D. Tooth brush

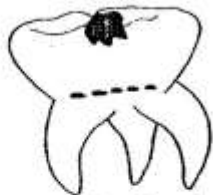
12. Which one of the following is a pair of only requirements for good healthy?
A. Soap and sugar
B. Exercise and rest
C. Utensils and sleep
D. Excess work and rest.

13. Which one of the following will lead to the spread of HIV and AIDS?
A. Sexual intercourse.
B. Sharing meals.
C. Sharing bathrooms.
D. Sharing urinals.

14. The type of teeth that do not shed in human beings are called
A. milk teeth
B. permanent teeth
C. primary teeth
D. deciduous teeth.

15. The type of soil that can make long ribbons is
A. loam soil B. clay soil
C. sand soil D. wet soil.

16. The diagram below represents a tooth related problem.



The shown tooth related problem is known as

- A. dental floss
B. dental carries
C. tooth cavity
D. bleeding gums.

17. Which of the following pairs consists of only oil crops?
A. Simsim and cotton seed
B. Maize and millet
C. Coconut and sisal
D. Coffee and tea

18. Which one of the following is not an example of a solid?
A. Sand B. Nails
C. Water D. Coins

19. The diagram below represents a body sensory organ.



The diagram shows a sensory organ for

- A. smelling B. sight
C. feeling D. hearing.


20. Which one of the following is **not** a good behavior when taking meals?
A. Eating the right quantity of food.
B. Eating clean food.
C. Taking excess food.
D. Chewing food with mouth closed.

21. Which one of the following types of foods can be eaten raw?
A. Sorghum B. Arrow roots
C. Beans D. Carrots

22. The removal of soil particles in water using a clean piece of cloth is called
A. cooling B. evaporating
C. boiling D. filtering.

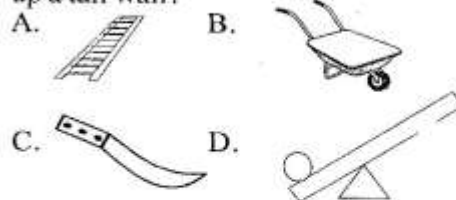
23. The **best** way of removing weeds is by
A. digging them out
B. slashing
C. using chemicals
D. mulching.

24. Which one of the following is a pair of only useful animals?
 A. Bees and dog.
 B. Cattle and flea.
 C. Bee and donkey.
 D. Tick and lice.
25. Millimetres are good units for measuring
 A. rainfall B. temperature
 C. sun shine D. volume.
26. Which one of the following is a descriptions of a premolar tooth?
 A. Single root with ridges.
 B. Double roots with cusps.
 C. Sharp pointed.
 D. Sharp edged with two roots.
27. Which one of the following is **not** needed when making shadows?
 A. Sources of heat B. Wall
 C. Milk D. Clear glass.
28. Which of the following plants grow in wet areas?
 A. Maize B. Euphorbia
 C. Sisal D. Yams
29. In the words 'HIV', the abbreviation 'H' stands for
 A. harmful B. huge
 C. human D. hopeful.
30. The young one of a fish is called
 A. fingerling B. kid
 C. toad D. puppy.
31. The diagram below represents a certain type of weed.



- The type of weed shown above is known as
 A. pigweed B. sodom apple
 C. black jack D. wandering jew.

32. A person who treats animals when they are sick is called
 A. optician officer
 B. a farmer.
 C. a dentist officer
 D. veterinary officer
33. Which one of the following is a use of water at the industry?
 A. Washing clothes.
 B. Making fountains.
 C. Watering crops.
 D. Boat racing.
34. The following can be seen in the sky at night **except**
 A. sun B. moon
 C. stars D. clouds.
35. Which one of the following diagram shows a tool that can be used to climb up a tall wall?



36. Which one of the following foods can be put in the box below to make balanced diet?
 Meat + cabbage +
 A. oranges B. ugali
 C. salt D. eggs
37. Which one of the following is an example of protective food?
 A. Proteins B. Sugar
 C. Fruits D. Fish

38. The diagram below represents a certain animal.



- The shown animal makes its movement by
 A. gliding B. slithering
 C. flying D. galloping.

39. Which one of the following is a list of only domestic animals?

- A. Goat, sheep, gazzelle
- B. Snake, frog, lion
- C. Cow, goose, sheep
- D. Goat, elephant, crocodile

40. Which of the following is a natural way of lighting a dark room?

- A. Putting on lights.
- B. Opening the window.
- C. Using a candle.
- D. Using fire.

41. The type of poultry kept for meat are known as

- A. hens B. broilers
- C. cocks D. layers.

42. Standard 4 pupils collected the following materials.

- (i) Maize stacks
- (ii) Round stiks
- (iii) Panga

The pupils were most likely going to make

- A. wheel barrow B. bottle tops
- C. rollers D. ladder.

43. The different shapes of the moon are called

- A. phases of moon
- B. phrases of moon
- C. praises of moon
- D. pases of moon.

44. Which one of the following equipments produces sound when plucked?

- A. Drum B. Guitar
- C. Whistle D. Vehicle.

45. We eat the _____ of a sugarcane.

- A. flowers B. roots
- C. leaves D. stem

46. Which one of the following weather symbols is the best to practise winnowing?



47. For a surface to reflect light, it should be

- A. dull
- B. mouth
- C. rough
- D. shiny.

48. Which one of the following is **not** a characteristic of all animals?

- A. Reproducing
- B. Moving
- C. Excreting
- D. Making food

49. The following are food crops. Which one is **not**?

- A. Coconut B. Maize
- C. Coffee D. Green grams

50. The diagram below represents a farm animal.



The shown animal gives us

- A. mohair only
- B. milk and wool
- C. beef and milk
- D. milk and mutton.