

GRADE 3 END TERM 3 EXAM 2019

ENVIRONMENTAL ACTIVITIES

1. The signs that tell us to use the road carefully are called road _____.
(blocks, signs, decorations)

2. When we recycle and _____ helps us to reduce waste.
(decorate, burn, reuse)

Name two festivals that you do at school or in your community

3. _____

4. _____

5. _____ is a way of protecting our environment.
(burning rubbish, cooking, planting trees)

6. During _____ festivals pupils sing and dance.
(drama, funeral, fighting)

Name four animals kept at home

7. _____

8. _____

9. _____

10. _____

Write these words correctly

1 1. fetyas - _____

1 2. tusacc - _____

1 3. ronivneenmt- _____

1 4. The following are plants, which one is edible? _____
(sodom apple, cactus, carrot)

1 5. Animals at home may be distressed which can be caused by _____ and _____

1 6. _____
(love and pain, care and hunger, fear and pain)


1 7. _____ is a parasite that attacks our cows.
(mite, tick, jiggers)

1 8. Bees live in a _____.
(nest, hive)


1 9. We should throw waste in a _____.
(dust pit, lake, sea)

Draw and name three sources of water you know


20.



21.



22.



23. We get sand soil along the _____
(road, rivers, forest)

24. _____ is
not use of water.
(cooking, bathing, cleaning
roofs)

25. _____ add food to our
plants.
(charcoal, manure, chalk)