

GRADE 2 END TERM 3 EXAM 2019

MATHEMATICS ACTIVITIES

NAME		GRADE 2
SCHOOL		

Regroup the numbers

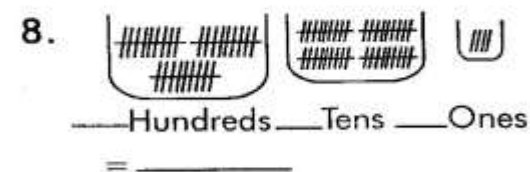
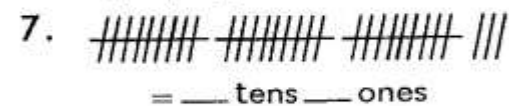
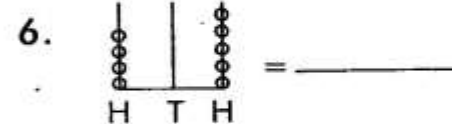
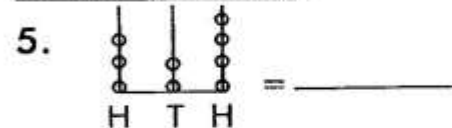
1. $243 = \underline{\quad} + \underline{\quad} + \underline{\quad}$

2. $815 = \underline{\quad} + \underline{\quad} + \underline{\quad}$

3. $104 = \underline{\quad} + \underline{\quad} + \underline{\quad}$

4. $89 = \underline{\quad} + \underline{\quad} + \underline{\quad}$

Answer correctly



9. 6 tens 3 ones = _____

10. 5 hundreds 8 tens 7 ones - _____

Add or subtract

11. $\begin{array}{r} 51 \\ +20 \\ \hline \end{array}$	12. $\begin{array}{r} 39 \\ -26 \\ \hline \end{array}$
_____	_____
_____	_____

13. $\begin{array}{r} 25 \\ -11 \\ \hline \end{array}$	14. $\begin{array}{r} 25 \\ +40 \\ \hline \end{array}$
_____	_____

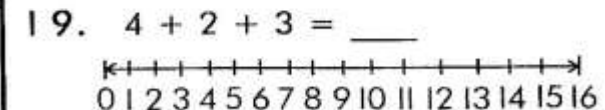
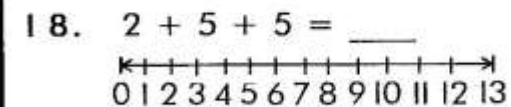
Break apart and add

15. $46 \rightarrow \underline{\quad} + \underline{\quad}$
 $+ 23 \rightarrow \underline{\quad} + \underline{\quad}$

16. $46 \rightarrow \underline{\quad} + \underline{\quad}$
 $+ 53 \rightarrow \underline{\quad} + \underline{\quad}$

17. $16 \rightarrow \underline{\quad} + \underline{\quad}$
 $+ 7 \rightarrow \underline{\quad} + \underline{\quad}$

Use number line



Work out

20. Take away 6 from 15 = _____
21. What is 14 plus 8 = _____
22. Multiply two by 10 = _____


23. A cow has ____ legs.
24. How many days make a week?

25. Divide 24 by six = ____
26. What is five times 4? = ____
27. What is the sum of 3, 7 and 9? = ____

What is the place value of 3 in


28. 321 _____
29. 839 _____
30. 943 _____


Divide

31. $16 \div 4 = \underline{\quad}$
32. $16 \div 2 = \underline{\quad}$
33. $28 \div 7 = \underline{\quad}$
34. $2 \div 1 = \underline{\quad}$
35. $30 \div 5 = \underline{\quad}$
36. 
 $8 \div \square = 2$

Multiply

37. $4 \times 4 = \underline{\quad} + \underline{\quad} + \underline{\quad}$
 $\quad \quad \quad + \underline{\quad} = 16$
38. $2 + 2 + 2 = \underline{\quad} \times \underline{\quad}$
 $\quad \quad \quad = \underline{\quad}$

39. 
_____ x _____ = _____

40. 
_____ x _____ = _____

41.

x	2	3	4	5
5	_____	15	_____	25

Complete: Fill in the missing numbers.

42. 100, 98, 96, 94, __ 90, __ 86
43. 44, 55 66, __, __ 99

What is the time?



46. Which one has a bigger capacity? _____



47. You want to measure your exercise book. Which unit will you use? _____
(metres, centimetres, metres)
48. Nekesa had forty six sheep. She slaughtered six. How many remained? _____
49. A box has fifteen red pencils, three yellow ones and seven blue. How many pencils are there in total? _____
50. What X is five zero? _____