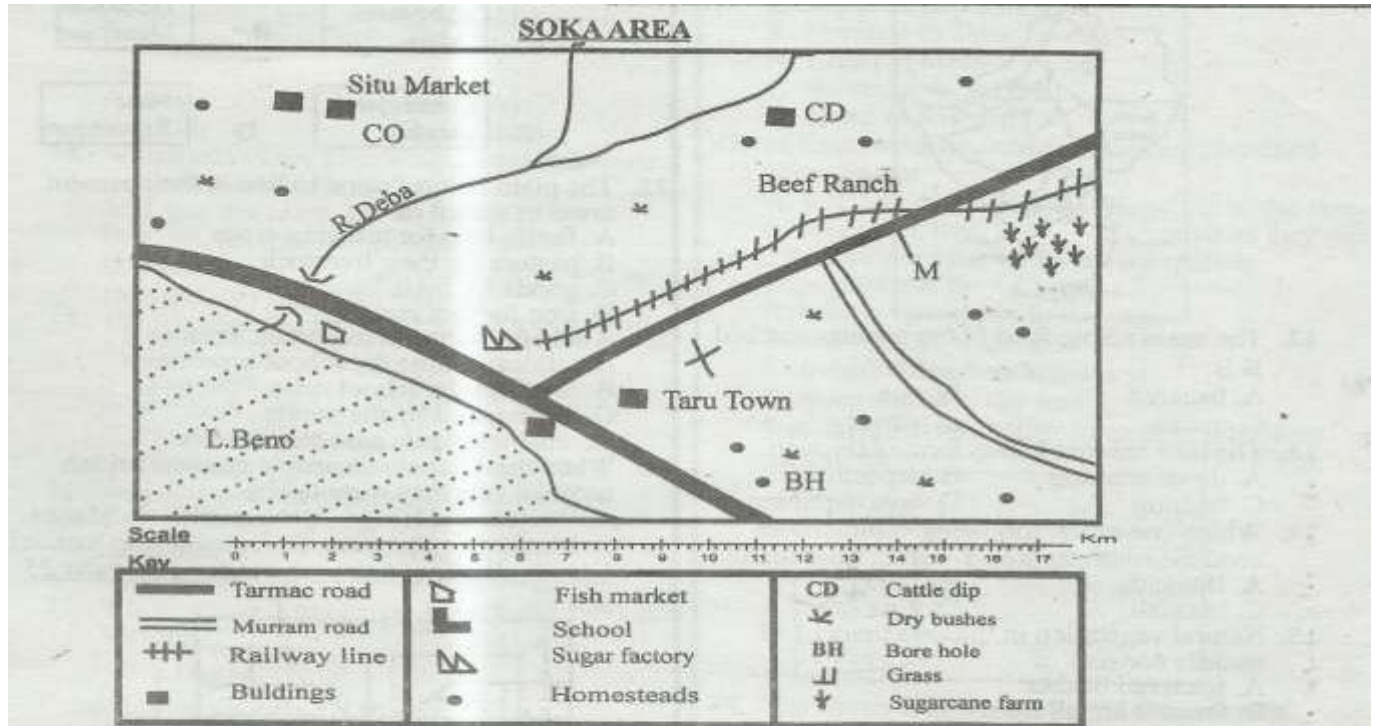


STANDARD 6 MID TERM 2 EXAM 2019

SOCIAL STUDIES & RELIGIOUS



Study the map of Soka area provided and answer questions 1 to 7.

- Lake Beno is important because it is a source of
A. a river
B. fish
C. rainfall
D. salt
- The road sign found along the road at the point marked M is
A. road junction
B. roundabout
C. pedestrian crossing
D. railway crossing
- Which of the following factors shows that Soka is a dry area?
A. Presence of dry bushes
B. Presence of a lake
C. Lack of economic activities
D. Presence of a river
- Which one of the following products is transported using the railway line?
A. Sugarcane
B. Timber
C. Minerals
D. Sisal
- The sugar factory in Taru town is an example of
A. a manufacturing industry
B. a service industry
C. a processing industry
D. an assembling industry
- River Deba flows from
A. north-west
B. south-west
C. north-east
D. south-east

- The most commonly used form of transport in Soka area is
A. railway
B. air
C. water
D. road
- Which one of the following statements correctly describes a clan?
A. A group of people with a common ancestor
B. People who are related by marriage
C. People who share similar names
D. A group of people born at the same time
- The Agiriama people resisted British Colonial rule because
A. the Agiriama had strong leaders.
B. the Agiriama made their own weapons.
C. the British interfered with the Agiriama ways of life.
D. the British stopped Agiriama from trading.
- The water body that borders Eastern Africa in the north-east is
A. Indian Ocean
B. Mediterranean Sea
C. Atlantic Ocean
D. Red sea
- Arabica coffee is grown in the Ethiopian highlands because
A. there are coffee factories in the area
B. the area has cool and wet climate

STD 6 TIMER SSTRE 0052019

C. rivers in the area provide water for irrigation

D. people in the area provide labour

Use the map of Eastern Africa below to answer questions 12 to 15



12. The main staple food in the country marked B is
 - A. bananas
 - B. rice
 - C. maize
 - D. wheat
13. The lake marked L was formed through
 - A. down warping
 - B. deposition
 - C. faulting
 - D. lava damming
14. Which one of the following communities used the route marked T during migration?
 - A. Baganda
 - B. Taita
 - C. Maasai
 - D. Fipa
15. Natural vegetation in the area marked M mainly consists of
 - A. scattered bushes
 - B. forest with tall trees
 - C. short grass
 - D. scattered thorny trees
16. Which of the following actions is a form of child abuse?
 - A. Employing children in factories
 - B. Giving pupils homework at school
 - C. Children working in the family farm
 - D. Older children taking care of younger ones
17. Beef farming has benefitted farmers in Tanzania mainly through
 - A. irrigation of grass in ranches
 - B. establishment of meat factories in ranches
 - C. earning of income through sale of cattle
 - D. establishment of schools in farming areas
18. Which of the following is a secondary need in a family?
 - A. Food
 - B. Education
 - C. Shelter
 - D. Clothing
19. When Nabongo Mumia collaborated with the British, he was
 - A. sent to school in Britain
 - B. made the governor of Kenya
 - C. made the traditional leader of the Abaluhya
 - D. employed in the British army

20. Which one of the following game parks is found in Tanzania?

- A. Kidepo
- B. Southern
- C. Selous
- D. Sibiloi

21. Which group is made up of mountains that formed through faulting and uplifting of land?

- | | | | |
|---|------------------------|---|----------------------|
| A | Abedares
Meru | B | Longonot
Menengai |
| C | Kilimanjaro
Danakil | D | Mau
Ruwenzori |

22. The plain Nilotes came to live in their present areas in search of

- A. fertile land for growing crops
- B. pasture for their livestock
- C. goods for trade
- D. iron for tool making


23. A school routine is important because it

- A. allocates time for school activities
- B. outlines the school rules
- C. is prepared by the pupils
- D. enables pupils pass school tests

24. When the Ababukusu people resisted British colonial rule they were led by

- A. Waiyaki wa Hinga
- B. Mekatilili wa Menza
- C. Mukite wa Nameme
- D. Koitalel arap Samoei

Use the diagram below to answer questions 25 and 26



25. The diagram shown above represents the formation of

- A. Rift valley
- B. block mountains
- C. fault lakes
- D. volcanic mountains

26. The physical feature shown above was formed through the process of

- A. folding and twisting
- B. erosion and deposition
- C. faulting and sinking
- D. faulting and uplifting

27. Which of the following factors can cause lawlessness in the society?

- A. Democracy
- B. Unemployment
- C. Unity
- D. Tolerance

28. The town in Eastern Africa which is the headquarter of East African Community is

- A. Djibouti
- B. Addis Ababa
- C. Nairobi
- D. Arusha

29. The fastest form of transport in Eastern Africa is

- A. air transport
- B. water transport
- C. road transport
- D. railway transport

30. Which of the following is a River and Lake Nilotic community in South Sudan?

- A. Hehe
- B. Issa
- C. Gabbra
- D. Dinka

STD 6 TIMER SSTRE 0052019

31. Bananas in Uganda are inter-cropped with
 A. rice B. coffee
 C. sisal D. tea
32. Masaku was famous among the Akamba people as a
 A. brave soldier B. great king
 C. successful trader D. colonial chief
33. Equatorial climate in Eastern Africa is modified by
 A. soil B. altitude
 C. winds D. longitudes
34. Which one of the following groups of people makes a nuclear family?
 A. Anna, her niece, her uncle
 B. Anna, her grandmother, her cousin
 C. Anna, her brother, her aunt
 D. Anna, her father, her brother
35. The country that borders Eastern Africa in the South is
 A. Botswana
 B. Mozambique
 C. Zimbabwe
 D. Democratic Republic of Congo(DRC)
36. Which one of the following communities entered Kenya through Uganda?
 A. Abaluhya B. Agikuyu
 C. Ambeere D. Agiriama
37. Which group is made up of fish caught in Lake Victoria?
 A.

 B.

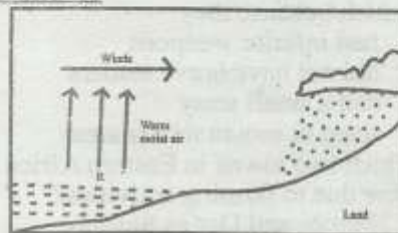
 C.

 D.
38. Which one of the following minerals is correctly matched with its method of mining?

Mineral	Method
A. Sand	dredging
B. Soda ash	open cast
C. Salt	evaporation
D. Fluospar	scooping
39. The Agikuyu people of Dagoreti near Nairobi were led in collaborating with Europeans by
 A. Waiyaki wa Hinga
 B. Laibon Lenana
 C. Nabongo Mumia
 D. Mukite wa Nameme
40. A negative impact of industries on the environment is that industries
 A. create employment
 B. dump waste in rivers
 C. produce goods for export
 D. cause migration of people to towns

41. Which one of the following is the main import of most countries of Eastern Africa?
 A. Flowers B. Soda ash
 C. Petroleum D. Coffee
42. In which of the following areas in Kenya is Sisal grown in large plantations?
 A. Mwatate in Taita Taveta
 B. Timau in Meru
 C. Naivasha in Nakuru
 D. Ahero in Kisumu
43. In Eastern Africa, communities are classified according to
 A. similarities in language B. colour of the skin
 C. areas they live D. activities they do
44. The northern parts of Sudan are sparsely populated due to
 A. cold temperatures in the area
 B. low rainfall in the area
 C. frequent flooding in the area
 D. steep slopes in the area

Use the diagram below to answer questions 45 and 46



45. The above diagram shows the formation of
 A. sea breeze B. relief rainfall
 C. land breeze D. convectional rainfall
46. The process taking place at the point marked R is
 A. radiation B. conduction
 C. evaporation D. convection
47. In Sudan, sugarcane is grown in large plantations at
 A. Kenana B. Dafur
 C. Harar D. Gezira
48. Sea fishing in both Kenya and Tanzania is faced by the problem of
 A. insufficient fish in Indian Ocean
 B. lack of market for fish
 C. lack of modern fishing equipment
 D. dangerous sea creatures
49. It is the duty of all Kenyans citizens who are eighteen years and below to
 A. get marriage partners
 B. vote during general elections
 C. register as voters
 D. obey the laws of the country
50. The ruling Ameru council of elders was called
 A. Ngomango B. Njuri Ncheke
 C. Mugwe D. Kiama

51. Air transport is not commonly used because it
 A. is expensive
 B. is very fast
 C. does not transport goods
 D. has many accidents
52. The administrative capital city of Burundi is
 A. Kigali
 B. Kampala
 C. Bujumbura
 D. Asmara
53. A similarity in maize growing in both Kenya and Tanzania is that it is
 A. grown under irrigation
 B. only grown for export
 C. grown to feed cattle
 D. grown both in large and small farms
54. The two lakes that are the source of river Nile are
 A. Lake Kyoga and Lake Turkana
 B. Lake Victoria and Lake Tana
 C. Lake Tanganyika and Lake Albert
 D. Lake Malawi and Lake Edward
55. The Nandi people were defeated by the British because they
 A. had inferior weapons
 B. did not have brave leaders
 C. had a small army
 D. lived in mountainous areas
56. Which two towns in Eastern Africa mainly grew due to farming activities?
 A. Nairobi and Dar es Salaam
 B. Dodoma and Kisumu
 C. Arusha and Nakuru
 D. Jinja and Nairobi
57. Which of these communities entered Eastern Africa from the west?
 A. Samburu
 B. Nyamwezi
 C. Ngoni
 D. Galla
58. In Kenya the Chief Justice is the head of
 A. the judiciary
 B. county government
 C. the senate
 D. the cabinet
59. The body in charge of elections in Kenya is headed by
 A. the president
 B. a chairperson
 C. the speaker
 D. a senator
60. General elections in Kenya are held after every
 A. ten years
 B. seven years
 C. six years
 D. five years
- PART 1: SECTION A**
CHRISTIAN RELIGIOUS EDUCATION
61. During the creation period, God created land, animals and human beings on the
 A. fourth day
 B. fifth day
 C. sixth day
 D. seventh day
62. Noah showed obedience to God by accepting to
 A. build the ark
 B. sacrifice Isaac
 C. leave Haran
 D. be circumcised
63. From the story of Joseph and his brothers in Egypt Christians learn to be
 A. prayerful
 B. forgiving
 C. courageous
 D. patient
64. When God told Moses to go back to Egypt, he was
 A. sleeping in a tent
 B. threshing wheat
 C. looking after Jethro's sheep
 D. in the palace of the King of Egypt
65. When the Israelites asked Moses to give them water, God made it to come out of
 A. a rock
 B. a cave
 C. river Jordan
 D. Moses' stick
66. Gideon led the army of Israel in defeating the
 A. Amalekites
 B. Ishmaelites
 C. Jebusites
 D. Midianites
67. The daughter-in-law of Naomi who went with her back to Bethlehem was
 A. Hannah
 B. Ruth
 C. Deborah
 D. Orpah
68. The King of Israel who was visited by the Queen of Sheba to test his wisdom was
 A. Solomon
 B. David
 C. Ahab
 D. Saul
69. The prophet who was taken up to heaven alive was
 A. Elisha
 B. Daniel
 C. Jeremiah
 D. Elijah
70. Zechariah the priest became dumb because he
 A. had seen a vision
 B. doubted the angel's message
 C. had entered a holy place
 D. had refused God's call
71. When Herod planned to kill Jesus, Joseph took him and Mary to live in
 A. Egypt
 B. Moab
 C. Nain
 D. Midian
72. Jesus found John and James with their father
 A. looking after their sheep
 B. threshing wheat
 C. catching fish
 D. ploughing in the farm
73. Jesus taught his disciples to store their riches in
 A. banks
 B. heaven
 C. boxes
 D. their hearts
74. The blind man healed by Jesus in Jericho was
 A. Lazarus
 B. Nicodemus
 C. Bartimaeus
 D. Zacchaeus
75. The leper healed by Jesus who went back to him teaches Christians to be
 A. patience
 B. repentant
 C. forgiving
 D. thankful

STD 6 TIMER SSTRE 0052019

76. Jesus was arrested while praying in the
 A. garden of Gethsemane
 B. temple in Jerusalem
 C. pool of Siloam
 D. house of Lazarus
77. Pilate washed his hands to show that
 A. he knew Jesus
 B. Jesus was an innocent man
 C. Jesus was to be crucified
 D. he was a friend of Jesus
78. The day of the week when Jesus rose was on
 A. Sunday
 B. Monday
 C. Friday
 D. Saturday
79. The disciples of Jesus received the Holy Spirit on the day of
 A. Passover
 B. Sabbath
 C. Pentecost
 D. ascension
80. Saul offended God after Jesus had ascended to heaven by
 A. persecuting followers of Jesus
 B. working on a Sabbath day
 C. refusing to pay taxes
 D. refusing to be baptised
81. Stephen was killed by the Jews by being
 A. hanged
 B. stoned
 C. burnt
 D. speared
82. The story of Ananias and Sapphirah teaches Christians to
 A. help the poor
 B. repent their sins
 C. forgive their enemies
 D. speak the truth
83. In traditional African religions people go to offer sacrifice in
 A. shrines
 B. temples
 C. homes
 D. churches
84. A moral value taught to children in traditional African communities is
 A. pride
 B. fame
 C. respect
 D. lying
85. Ancestors in traditional African societies are best remembered through
 A. keeping their graves clean
 B. preserving their clothes
 C. praying to them
 D. naming children after them
86. The best way for Christians to help children who live on the streets is by
 A. preaching to them
 B. running away from them
 C. preaching to them
 D. loving and helping them
87. School children should not involve themselves in sexual acts because
 A. it is against God's teachings
 B. it is done by adults only
 C. they do not know about it
 D. they are yet to grow up
88. When Christians sin against God, they should
 A. tell their friends
 B. not talk to anyone
 C. repent their sins
 D. not go to church
89. During school holidays standard six children can best help the community by
 A. playing in a football tournament
 B. visiting the aged and helping them
 C. reading storybooks at home
 D. attending birthday parties
90. Christians preach against stealing because
 A. it makes people poor
 B. people get injured when stealing
 C. some people become rich
 D. it is against God's commandments
- PART II: SECTION B**
ISLAMIC RELIGIOUS EDUCATION
61. Surah Al-Bayyinah begins with
 A. Wamaa umiru illa liyaabudullaha
 B. Lam yakunilladhina kafaru
 C. Fiyha kutubum Qayyimah
 D. Liylafi Quraishin
62. The Christians and Jews were given the books in order to
 A. prepare them for the coming of our prophet
 B. learn only their religion not others
 C. know the two religions
 D. make them not accept other religions
63. Which statement is not true about Qaarun?
 A. He became rich very fast
 B. He loved and helped the poor
 C. He became proud and difficult
 D. many people wanted to be like him
64. Swalatul khusuf is a prayer said during
 A. the eclipse of the sun
 B. when it rains heavily
 C. the eclipse of the moon
 D. when the prophet's sons dies
65. Which of the following is not in surah Bayyinah?
 A. Fawayian liimusaliin
 B. Rasulun minallahi yathi suhufan
 C. Lam yakumlladhina Kafaru
 D. Wamaa uminu illa liyaabudulla
66. The main cause of the Battle of uhud is
 A. the rush for the caravan of syria
 B. the defeat of the Quraish in the battle of Badr
 C. because the muslims wanted to crush the Quraish
 D. miting in the newspapers
67. The least way of forbidding evil is by
 A. using our hands
 B. using our tongue
 C. miting in the newspapers
 D. being annoyed at heart

68. Which statement is not true about the battle of uhud?
 A. The prophet lost some of his teeth
 B. The prophet cursed the Quraish
 C. The muslims were winners at first
 D. Khadhil bini walead made the muslim suffer
69. One of these did not take place in muharram
 A. Imam Hussein was killed
 B. Nabii Musa was saved from Furaun
 C. Hijra of the prophet
 D. The war of Badr took place
70. Hind hired _____ to kill Hamza.
 A. wahsi Bjubair C. Tuaim D. Khahid
71. Muslim more between swafa and marwa during Hajj in memory of
 A. Ibrahim B. Ismail
 C. Sarah D. Hajar
72. One of these is not among the miracles of Nabii Issa
 A. bringing the dead to life
 B. making the blind see
 C. knowing what a person ate and stored at home
 D. making the dump to talk
73. Nusaibah bint kaab bin Amru
 A. remained behind to look children
 B. was making sure that the prophet was not attacked
 C. was nursing the wounds of the prophet
 D. killed Hindu Abu sufyani's wife
74. A table full of food was a miracle of Nabii
 A. Musa B. Isa
 C. Ibrahim D. Yunus
75. Nabii Nuh was sent to the people of
 A. Iraq B. Makkah
 C. Israel D. Yemen
76. A Muslim fighter in uhud did not kill hindu because
 A. hindu begged for mercy from him
 B. hindu hid behind another muslim
 C. he felt ashamed to kill her with the sword of the prophet
 D. hindu was the wife of Abu sufyan
77. Which statement is **not** true about Firaun?
 A. He was shown miracles by Nabii Musa
 B. It's magicians defeated Nabii Musa
 C. He promised his magicians reward if they won
 D. He brought magicians to challenge Musa
78. The search for knowledge is fardh to muslim man and woman. The hadith teaches
 A. men should be given a chance first them woman
 B. men should be given a chance before the women
 C. Women to be given a chance after the men
 D. Both should be given an equal chance to learn
79. The prophet sent _____ archers on top of mount Uhud.
 A. 50 B. 100 C. 150 D. 200
80. Taqwa means
 A. praising Allah day and night
 B. enjoying good and forbidding evil
 C. fear of Allah
 D. spending in the cause of Allah
81. Lynching a thief (burning him to death is)
 A. against the teachings of Islam
 B. the right way to teach them a lesson
 C. is acceptable in islam
 D. in part of the teachings of islam
82. Allah is kind to all the attribute reffering to this is
 A. Al-Adhim B. Al-fhafur
 C. Ash-shakur D. Allahif
83. Makkah was conquered in the month of
 A. Dhul Hijjah B. Rabiul Awwal
 C. Rajab D. Rammadhan
84. Just before migration the prophet list two important people
 A. Abubakar and Umar
 B. Abu Talib and Khadija
 C. Abubakar and uthuman
 D. Khadija and Abdul muttalib
85. Which one of the following does not refer to Allah's mercy?
 A. Rahim B. Ghafur
 C. Rahman D. Alim
86. Nisab means
 A. the right people to receive zakat
 B. the things on which zakat is compulsory
 C. the minimum amount to have before paying zakat
 D. people who are not allowed to receive zakat
87. Ulul Azmi means prophets who
 A. were murdered
 B. were thrown out of their countries
 C. served Allah never got married
 D. had strong patience
88. Which is not true about Friday?
 A. Qiyamah will take place on Friday
 B. Adam was created on Friday
 C. Hanna was created on friday
 D. Adam was admitted into Jannah
89. One entering the mosque on friday we should
 A. give salaam B. pray two rakaa
 C. take udhu D. read the quran
90. The leader of the archers was called
 A. khalid bin walead B. Abdullah bin Jubair
 C. umar bin khattab D. Abu Hudhifah