

# STANDARD 4 MID TERM 2 EXAM 2019

## SOCIAL & RELIGIOUS STUDIES

CODE0052019 **STD 4 SOCIAL STUDIES & R.E** Time: 2hrs 15 min

**VITIAREA**


Scale 0 1 2 3 4 5 6 7 8 9 10 11 12 13 14 15 16 17

KEY			
	Tarmac road		Fishing areas
	Bridge		Forest
	Church		Tourist hotel
	Towns		Police station
	People's homes		School

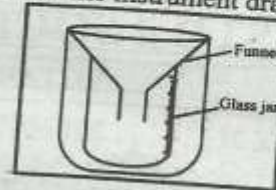
*Study the map of Viti area below and use it to answer questions 1 to 7*

- Lake Wete is important because it is a source of
  - sand
  - a river
  - salt
  - fish
- The place marked T where the two roads meet is a
  - road junction
  - cattle crossing
  - railway crossing
  - pedestrian crossing
- How many bridges are found in Viti area?
  - Three
  - Five
  - Four
  - Two
- The work of the police station in Meko town is to
  - teach people rules
  - develop the town
  - arrest people who break the law
  - appoint leaders for the town
- When it rains in Viti area, River Ruwa takes water to
  - Meko town
  - Lake Wete
  - the sea
  - the forest
- The maize grown in the southern part of Viti area is used
  - for making cakes
  - to feed cattle
  - to make cooking oil
  - as a food crop
- What is obtained from the beef cattle farm?
  - Eggs
  - Wool
  - Meat
  - Milk
- Several sub-counties put together make a
  - county
  - district
  - ward
  - division
- Moral values are important in the society because they
  - make people rich
  - are taught by parents
  - make people behave well
  - are written in books
- Areas that receive high rainfall have
  - dry conditions
  - high population
  - little vegetation
  - low population

STD 4 TIMER SSTRF 005 2019

11. Which one of the following is not a cardinal point of the compass?  
 A. East B. West  
 C. North D. South-East
12. The relief region where there is a lot of grass and scattered trees is called  
 A. mountains B. plains  
 C. valleys D. hills
13. Distribution of natural vegetation in our county is mainly influenced by  
 A. soil B. winds  
 C. temperature D. rainfall
14. Game parks in our county are important because they  
 A. conserve our wild animals  
 B. are visited by tourists  
 C. have good hotels  
 D. make the landscape beautiful
15. Different communities which speak almost a similar language make a  
 A. clan B. family  
 C. language group D. tribe
16. The road sign shown below is a  
  
 A. round about  
 B. road junction  
 C. train crossing  
 D. cattle crossing
17. Initiation ceremonies are held in our communities in order to  
 A. eat special foods  
 B. make new friends  
 C. be rewarded by our parents  
 D. mark a change to adulthood
18. At a weather station, a wind vane is used to measure the  
 A. direction of wind  
 B. amount of rainfall  
 C. hotness or coldness of a place  
 D. speed of wind
19. Which of the following is not a food crop?  
 A. Maize B. Cabbage  
 C. Coffee D. Beans
20. Which of the following is a physical feature?  
 A. road B. mountain  
 C. bridge D. dam
21. An example of a Bantu speaking community is  
 A. Somali B. Luo  
 C. Kalenjin D. Agikuyu
22. Fish are caught in all the following places except  
 A. rivers B. oceans  
 C. valleys D. lakes
23. Forests are important because they  
 A. are sources of timber B. have tall trees  
 C. are hiding places D. are evergreen
24. The following are products of traditional industries except  
 A. pots B. baskets  
 C. hoes D. papers
25. Which of the following is the earliest form of communication?  
 A. Newspapers B. Blowing horns  
 C. Telephone D. Radio

26. Tourist who visit game parks are attracted by  
 A. traditional dances B. mountains  
 C. wild animals D. good roads
27. In the past, medicine was made from  
 A. stones B. paper  
 C. ink D. plants
28. The weather instrument drawn below is a



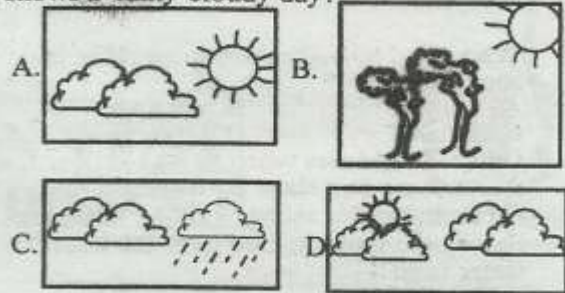
- A. raingauge B. windvane  
 C. thermometer D. barometer
29. Which of the following is not a language group?  
 A. Semites B. Swahili  
 C. Cushites D. Nilotes
30. In the past, when crops did well on the farms, people held  
 A. birth ceremonies  
 B. drama festivals  
 C. harvest festivals  
 D. initiation ceremonies
31. Forests are found in areas that  
 A. have high population  
 B. receive low rainfall  
 C. are hot and dry  
 D. receive high rainfall
32. It is important to work together in the community in order to  
 A. improve peoples' lives  
 B. become rich  
 C. know one another  
 D. make new friends
33. Which of the following types of livestock is kept for both meat and milk?  
 A. donkeys B. chickens  
 C. goats D. horses
34. A common activity done in all market centres and towns in our country is  
 A. lumbering B. trading  
 C. mining D. tourism
35. The best place to cross a busy road in a town is  
 where  
 A. there is a footbridge  
 B. there is a bend on the road  
 C. the road is narrow  
 D. there is a roundabout
36. The activity that is done in areas that have plains is  
 A. saw milling B. coffee growing  
 C. fishing D. livestock grazing
37. A tourist attraction that is common in most countries is  
 A. sea beaches B. wild animals  
 C. high mountains D. great lakes

38. - The point of the compass shown by letter X is



- A. south-east                      B. north-west  
C. south-west                      D. north-east
39. Fishing is important because it provides all the following **except**  
A. money                              B. water  
C. jobs                                 D. food
40. A sunken area that is between two raised areas is  
a  
A. valley                                B. hill  
C. mountain                          D. plain
41. Asians found in our country came **mainly** to  
A. keep livestock                      B. grow crops  
C. marry                                 D. trade
42. Which of the following groups is made up of food crops **only**?
- |   |                           |   |                            |
|---|---------------------------|---|----------------------------|
| A | Coconut<br>Sisal<br>Wheat | B | Cotton<br>Rice<br>Coffee   |
| C | Bananas<br>Maize<br>Beans | D | Tea<br>Sugarcane<br>Cotton |
43. The form of transport used to carry goods in the past was  
A. vehicles                              B. trains  
C. aeroplanes                          D. camels
44. People benefit from trade when they  
A. get income  
B. learn other languages  
C. live in towns  
D. make new friends
45. Which of the following is a Cushitic speaking community?  
A. Ameru                                 B. Somali  
C. Pokomo                                D. Abagusii
46. Natural vegetation is made up of trees that  
A. grow in straight lines  
B. are planted by people  
C. grow on their own  
D. are irrigated
47. The fastest form of transport today is  
A. road transport                      B. water transport  
C. railway transport                    D. air transport
48. Barter trade was carried out in the past because  
A. there were many goods  
B. there were no currency notes and coins.  
C. there were few traders  
D. people were not educated.
49. In the past, an example of a traditional medical practice was  
A. making medicine from plants.  
B. taking sick people to hospitals.  
C. teaching children moral values.  
D. training doctors in colleges.

50. Which of the following weather symbols shows a **rainy-cloudy** day?



51. Birth ceremonies were held in the past to  
A. have marriage ceremonies  
B. wear special clothes.  
C. welcome a new baby  
D. eat special foods
52. Dairy animals are kept to provide  
A. wool                                    B. eggs  
C. milk                                    D. hides
53. Areas with low rainfall have low population because they  
A. get flooded                          B. are dry  
C. have swamps                        D. are steep
54. Which of the following is a moral value taught to children by their parents?  
A. Honesty                                B. Cooking  
C. Football                                D. Fighting
55. Today, most people talk to one another when they are far away using  
A. televisions                          B. letters  
C. mobile phones                        D. radios
56. A large body of water in the interior of the land is  
A. an ocean                                B. a sea  
C. a river                                 D. a lake
57. In the past people made clothes from  
A. cotton wool                          B. animal skins  
C. papers                                 D. stealing
58. All the following are obtained from trees **except**  
A. ink                                        B. paper  
C. timber                                  D. firewood
59. Which of these animals is kept in game parks?  
A. Horse                                  B. Camel  
C. Cheetah                                D. Goat
60. Some rivers in our county are seasonal because they  
A. begin in highland areas  
B. are short  
C. do not have fish  
D. dry during dry seasons.

**SECTION II: PART A  
CHRISTIAN RELIGIOUS EDUCATION**

61. The story of creation is found in the book of  
A. Matthew                                B. Genesis  
C. Exodus                                 D. Luke
62. The man who lived in the ark when there was a great flood was  
A. Abraham                                B. Adam  
C. Jacob                                    D. Noah

63. When God told Abraham to sacrifice his son, he  
 A. obeyed B. ran away  
 C. refused D. complained
64. God called Moses when he was  
 A. working as a slave B. fishing  
 C. looking after sheep D. sleeping
65. During the Exodus, God gave the Israelites water from  
 A. the sea B. the clouds  
 C. heaven D. a rock
66. The strong man who killed a lion with his hands was  
 A. Samson B. Gideon  
 C. Samuel D. David
67. The king who was given great wisdom by God was  
 A. David B. Solomon  
 C. Samuel D. Saul
68. The prophet who was taken to heaven by a chariot of fire was  
 A. Elisha B. Jeremiah  
 C. Daniel D. Elijah
69. The prophet who was thrown into a den of lions for disobeying the king was  
 A. Ezekiel B. Samuel  
 C. Daniel D. Jeremiah
70. Mary was told she would give birth to a son by  
 A. an angel B. the wisemen  
 C. the shepherds D. Zechariah
71. Who baptised people in river Jordan?  
 A. Jesus B. John  
 C. Paul D. Peter
72. The devil told Jesus to change stones into  
 A. fish B. wine  
 C. meat D. bread
73. Which of these people was one of the twelve disciples of Jesus?  
 A. Joseph B. Philip  
 C. Stephen D. Paul
74. At Cana in Galilee Jesus changed water into  
 A. wine B. bread  
 C. fish D. oil
75. The sisters of Lazarus of Bethany were Mary and  
 A. Salome B. Martha  
 C. Elizabeth D. Tabitha
76. The short stories that Jesus used to teach the people are called  
 A. proverbs B. riddles  
 C. legends D. parables
77. The short man who climbed a tree to see Jesus was  
 A. Bartholomew B. Nicodemus  
 C. Zacchaeus D. Cornelius
78. The parable of the good Samaritan teaches us to be  
 A. kind B. honest  
 C. faithful D. wise
79. Jesus multiplied \_\_\_\_\_ and \_\_\_\_\_ to feed a large crowd of people.  
 A. meat, grapes B. eggs, beans  
 C. bread, fish D. fruits, wine
80. Who betrayed Jesus for thirty pieces of silver?  
 A. Pontious Pilate  
 B. Judas Iscariot  
 C. King Herod  
 D. Thomas the disciple
81. When Jesus died on the cross, \_\_\_\_\_ covered the earth.  
 A. darkness B. a cloud  
 C. mist D. water
82. Which day of the week did Jesus resurrect?  
 A. Monday B. Friday  
 C. Tuesday D. Sunday
83. Which disciple could not believe that Jesus had resurrected?  
 A. Peter B. James  
 C. Thomas D. Judas
84. Who baptised the Ethiopian Eunuch?  
 A. Stephen B. Philip  
 C. Paul D. Peter
85. The story of Ananias and Sapphirah teaches us to  
 A. help the poor B. tell the truth  
 C. repent our sins D. forgive other people
86. At Sunday school, we are taught  
 A. to love other people.  
 B. how to clean our bodies.  
 C. new words.  
 D. how to cook.
87. It is not good to steal other people's property because  
 A. we can be beaten by our parents  
 B. this is a sin.  
 C. we make them sad  
 D. some items are expensive
88. When you find money in the school football field, you should  
 A. take it to the church  
 B. share it with friends  
 C. take it to your mother to buy a book  
 D. take it to the teacher on duty.
89. When we have extra clothes at home we should  
 A. give some to children from poor families.  
 B. sell the extra clothes  
 C. keep them safe in boxes  
 D. burn the extra clothes
90. During an English lesson, your deskmate does not have the textbook. You should  
 A. tell him to buy his own book  
 B. share your book with him  
 C. give him money to buy the book  
 D. tell his parents

STD 4 TIMER SSTRE 0052019