

GRADE 3 MID TERM 2 EXAM 2019

MATHEMATICS ACTIVITIES

NAME SCHOOL

Write numbers in words

1. 93 _____

2. 78 _____

3. 87 _____


Write numbers in symbols


4. Eighty four _____


5. Sixty three _____


6. Thirty one _____

What fraction is shaded?

7.  _____

8.  _____


9.  _____


10.  _____


11. Who is in the second position?
 1. Rono is in the _____ position.
 (three, first, third)

12. _____ is in the first position.

Count and write

13.  _____

14.  _____

15.  _____

16. 172 = _____ hundreds _____ tens
 _____ ones.

17. 1 hundreds 0 tens 2 ones = _____

18. 26 = _____ hundreds _____ tens _____ ones

Complete by writing "is less than" or "is more than".

19. 205 _____ 250

20. 298 _____ 289

21. 112 _____ 211

Write the next number in the patterns

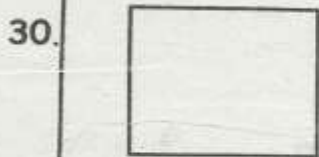
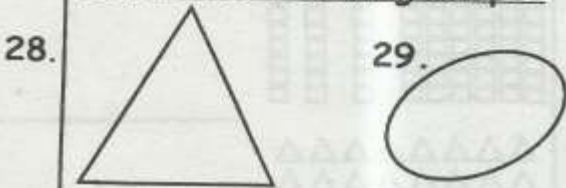
22. 35, 41, 47, 53, _____

23. 56, 47, 38, 29, _____

24. 12, 13, 15, 18, _____

25. The Sixth month of the year is called _____
(May, July, June)
26. The first term started in the month of _____
(April, January, August)

27. _____ is between October and December.
(November, August, February)
Name the following shapes



(Oval, Square, Triangle)

31. $\frac{1}{8}$ of 8 = _____
32. $\frac{1}{2}$ of 16 = _____
33. $\frac{1}{4}$ of 12 = _____

Add

34.
$$\begin{array}{r} 64 \\ + 73 \\ \hline \end{array}$$
 35. $28 + 16 =$ _____

36.
$$\begin{array}{r} 6 \\ 9 \\ + 8 \\ \hline \end{array}$$

37. Demakufu bought 43 sheep. Kalonje bought 19 cows. How many animals did they buy altogether? _____

Subtract

38.
$$\begin{array}{r} 96 \\ - 32 \\ \hline \end{array}$$

39. $61 - 27 =$ _____

40. Take away 15 from 51.

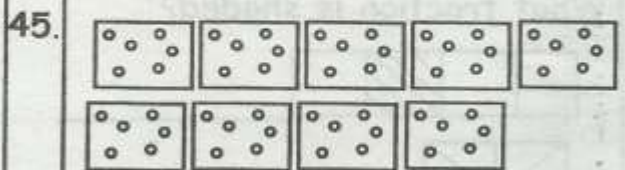
41. There are 46 pupils in a class. If 25 of them are girls, how many boys are there? _____

42. $7 - \square = 2$

43. $19 - \square = 12$

Multiply:

44.
$$\begin{array}{r} 7 \\ \times 9 \\ \hline \end{array}$$



_____ x _____ = _____

46. A house has 7 rooms. Each room has 4 windows. How many windows does the house have altogether?

47. $6 \div 2 =$ _____

48. $10 \div 10 =$ _____

49. $12 \div 3 =$ _____

50. A teacher had 63 oranges. She shared them equally among his 9 pupil. How many oranges did each pupils get?