



GRADE 2 MID TERM 2 EXAM 2019


MATHEMATICS ACTIVITIES


.....SCHOOL


Show numbers using objects

1.  14

2.  13

3.  10

4.  12

5.  18

Fill in the missing numbers

6.

50		70	80	90
----	--	----	----	----

7.

86		88	89	90
----	--	----	----	----

8.

34	33	32	31	
----	----	----	----	--

9.

40	38		34	32
----	----	--	----	----

10.

16	18	20		24
----	----	----	--	----

11. $69 = \underline{\hspace{1cm}}$ tens and $\underline{\hspace{1cm}}$ ones

12. $80 = 80 + \underline{\hspace{2cm}}$

13. $\underline{\hspace{1cm}} = 4$ tens and 4 ones

14. $73 = \underline{\hspace{1cm}}$ tens and 3 ones

15. $10 = \underline{\hspace{1cm}}$ tens and $\underline{\hspace{1cm}}$ ones

Find the missing number



16. 27, 21, 16, 12 $\underline{\hspace{1cm}}$



17. 12, 14, 16, 18, $\underline{\hspace{1cm}}$

18. 35, 30, 25, 20, $\underline{\hspace{1cm}}$



19. 29, 38, 47, 56, $\underline{\hspace{1cm}}$



20. 10, 11, 13, 16, $\underline{\hspace{1cm}}$

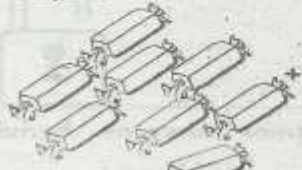

21. Which one shows a half?
 A  B

22. Which one shows a quarter?
 A  B

Put together

23.  +  = $\underline{\hspace{1cm}}$

24.  +  = $\underline{\hspace{1cm}}$



25.  +  = $\underline{\hspace{1cm}}$

26. Gilbert had 4 pencils while Albert had 14 pencils. How many pencils did they have altogether? _____

27.
$$\begin{array}{r} 62 \\ + 4 \\ \hline \end{array}$$

28. $10 + 3 =$ _____

Take away

29.  -  = _____

30.  -  = _____

31.  -  = _____

32. Mr. Andrew bought 16 sheep from Mr. Kamau. If 5 of the sheep died, how many sheep did Mr. Andrew remain with? _____

33.
$$\begin{array}{r} 80 \\ - 60 \\ \hline \end{array}$$



34. $29 - 29 =$ _____



How many are long ones?

5.  _____

How many are small ones?

5.  _____

 is _____ 
(lighter than, same mass as, heavier than)

 is _____ 
(lighter than, same mass as, heavier than)

How many are the same



39.  _____

Who is lighter?



(Alice, Clement, Alice and Clement)

Which one holds less?

41.  A  B _____

42. If today is Thursday, tomorrow will be _____
(Wednesday, Friday, Saturday)

43. Arrange from the first
(January, April, February, March)




44. How many sh. 5 coins are there in a sh. 20 coin? _____

45. How sh. 50 notes are equal to a sh 100 note? _____


46. Tick a need.

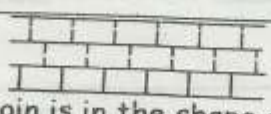
47. Tick a want.

48. How many lines are curved?

 _____

49. Name the shape used to build the wall.



50. A sh. 1 coin is in the shape of _____
(triangle, square, circle)