




GRADE 1 MID TERM 2 EXAM 2019

MATHEMATICS ACTIVITIES


NAME SCHOOL


1.  The bananas are _____ the apples.
(fewer than, more than, same as)


2.  The rectangles are _____ the triangles.
(fewer than, more than, same as)

3.  The spoons are _____ the cups.
(fewer than, more than, same as)

How many?

4.  _____

5.  _____

6.  _____

Fill in the blank spaces

7.

26	27	28		30	31	32	33
----	----	----	--	----	----	----	----

8.

61	60	59	58	57	56	55	
----	----	----	----	----	----	----	--


9.


34	35	36	37		39	40	41
----	----	----	----	--	----	----	----


10. 60 = _____ tens and _____ ones 11.

12. _____ = 2 tens and 1 ones

Put together

13.  = _____

14.  = _____


15.  = _____


Add


16. $5 + 1 + 2 =$ 17. $\begin{array}{r} 9 \\ + 7 \\ \hline \end{array}$

18. Kamau had 3 biscuits. he was given 6 more biscuits. How many biscuits did he have altogether? _____

How many are left?

19.  $7 - 2 =$ _____

20.  $6 - 1 =$ _____

21.  $10 - 3 =$ _____

Subtract

22. $9 - 7 =$ _____ 23. $16 - 8 =$ _____

24. Luka had 6 goats. He sold 4 of them. How many goats was he left with? _____

25. Take away 3 from 9 _____

G1 TIMER MATH 0052019