

# STD 8 END TERM 2 EXAM 2019

## SOCIAL & RELIGIOUS STUDIES

I. YOUR NAME \_\_\_\_\_ II. NAME OF YOUR SCHOOL \_\_\_\_\_

### KAMBILI AREA


**Scale:-**

**Key:-**

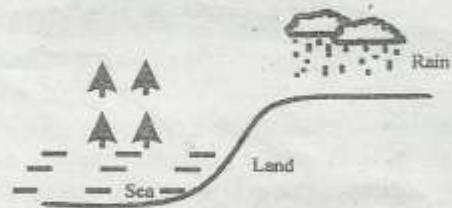
	Quarry	C.O	County office	TT	Tea		Tree
	Railway station	MSQ	Mosque				River
	School		Bridge				Lake
P.S	Police station		Tarmac Road	P-M			Posho mill

Study the map of Kambili area and answer questions 1 -7.

- What is the climate of North East of Kambili area?
  - Cool and wet
  - Hot and dry
  - Hot and wet
  - Hot and cool
- Which food crop is grown in Kambili area?
  - Beans
  - Tea
  - Maize
  - Sweet potatoes
- The railway line in the area is also used to
  - transport cotton
  - transport trees
  - transport fish
  - transport minerals
- The population distribution of the area is likely to be
  - cluster
  - linear
  - dense
  - sparse
- Kambili area is a \_\_\_\_\_
  - Sub County
  - County
  - Constituency
  - Ward
- The people of Kambili area are
  - christians
  - muslims
  - traditionals
  - hindus
- Which essential facility is missing in Kambili area?
  - Educational facility
  - Religious facility
  - Chief's office
  - Health facility
- The following are bantu speakers except
  - Yao
  - Batoro
  - Dinka
  - Luhya
- Africa lies between latitude \_\_\_\_\_
  - 17°W and 51°E
  - 51°W and 17°E
  - 37°N and 35°S
  - 35°N and 37°S
- What is the time of town K 35°E, if town y 40°E is 9am?
  - 8.40am
  - 9.40am
  - 8.20am
  - 9.20am
- In which country is Jebel Abyad found?
  - Algeria
  - Ethiopia
  - Somalia
  - Sudan
- Which lake was formed as the one drawn below?



- Shakababo
  - Manzala
  - Bilisa
  - Kanyaboli
- Equatorial regions in Africa receive the highest amount of rainfall in the month of
    - April
    - December
    - March
    - June
  - Which climatic region is described below?
    - It is between latitude 5° and 15° North and South respectively
    - It is the largest climatic region in Africa
    - The temperature ranges between 21°C - 30°C
    - Rainfall range between 350mm to 1280mm
    - Tropical climate
    - Mountain temperature
    - Mediterranean climate
    - Warm temperature
  - The type of rainfall shown is received in the following areas except

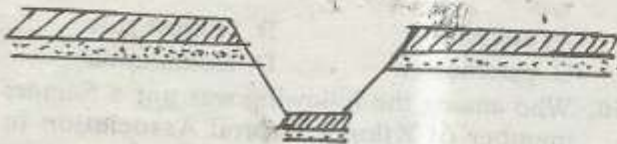


- Kilifi
- Dar es Salaam
- Kampala
- Lamu

Use the map below to answer questions 16-19



16. The climate marked X is called  
 A. mediterranean      B. Tropical  
 C. Equitorial          D. Desert
17. The country marked Y was colonised by  
 A. France                B. Italians  
 C. British                D. Portuguese
18. The most Easterly part marked K is called  
 A. Guardafui            B. Blanco  
 C. Verde                 D. Agulhas
19. The strip of dry land that connects Africa to Europe is called  
 A. Isthimus of Suez  
 B. Strait of Peninsula  
 C. Strait of Gibralta  
 D. Mediterranean sea
20. Equator crosses the following countries **except**  
 A. DRC                    B. Cameroon  
 C. Gabon                 D. Somalia
21. The following countries are crossed by the features below **except**

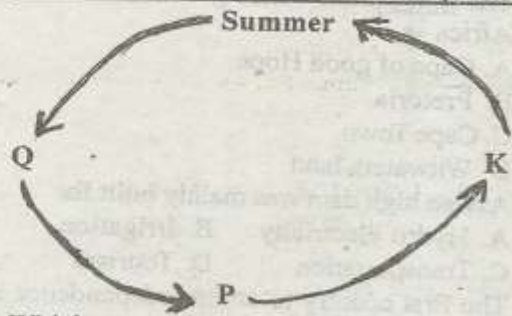


- A. Sudan                    B. Ethiopia  
 C. Kenya                D. Tanzania
22. The following show the importance of vegetation. Which one does **not**?  
 A. Protection of the catchment areas  
 B. Checking of soil erosion  
 C. Source of herbal medicine  
 D. Source of minerals
23. Which one of the following is **not** an island country in Africa?  
 A. Sychele                B. Zanzibar  
 C. Madagascar          D. Zambia
24. Below are characteristics of a certain soil type;  
 i) *Has fine particles*  
 ii) *Is poorly drained*  
 iii) *Has high water retention capacity*  
 iv) *It cracks when dry*

The soil described above is

- A. Clay soil                B. Red volcanic soil  
 C. Alluvial soil            D. loam soil

*Use the diagram below to answer question 25*



25. Which season in marked K?  
 A. Autumn                B. Winter  
 C. Springs                D. Summer
26. Soil is formed through the process called  
 A. warping                B. weathering  
 C. eroding                D. decomposing
27. Three of the following mountains in Eastern Africa are snow-capped. Which one is **not**?  
 A. Ruwenzori            B. Suswa  
 C. Kenya                D. Kilimanjaro
28. Among the following people, who are not found in Namibia?  
 A. Griqua                 B. Avambo  
 C. Herero                 D. Mbulula
29. The following are characteristics of the population:-  
 i) *High birth rate*  
 ii) *High population growth*  
 iii) *80% of the people live in rural areas*  
 iv) *Dependancy rate is high*  
 The characteristics represent the population of a certain country. Which country is it?  
 A. Kenya                B. German  
 C. Britain                 D. Protugal
30. Which of the following communities is part of Southern Cushites?  
 A. Aweera                B. Burji  
 C. Gabbra                D. Dahalo
31. The basic unit of the clan is  
 A. marriage               B. age group  
 C. family                 D. age set
32. Which of the following is **not** a role of a pupil in the school?  
 A. Punishing the noise makers  
 B. Keeping their classroom neat  
 C. Attending classes  
 D. Learning
33. Beef farming is mainly practised in central Tanzania at a place called  
 A. Kongwa                B. Morogoro  
 C. Singida                D. Songea

34. The main place where gold is mined in South Africa is  
 A. Cape of good Hope  
 B. Pretoria  
 C. Cape Town  
 D. Witwaters land
35. Aswan high dam was mainly built for  
 A. Hydro electricity    B. Irrigation  
 C. Transportation    D. Tourism
36. The first country to attain independence is  
 A. Ghana    B. Tanzania  
 C. Uganda    D. Nigeria
37. Which one of the following is the main problem facing expansion of communication systems in Kenya?  
 A. Inadequate skilled labour  
 B. Low population density  
 C. Inadequate capital  
 D. Breakdown of equipment
38. All the following are oil refineries in Nigeria except one. Which one is it?  
 A. Kalaba    B. Warri  
 C. Elesha Elene    D. Kaduna
39. Which one is not a fishing ground?  
 A. Lake Naivasha    B. Lake Nakuru  
 C. Lake Turkana    D. Lake Ol Bolosat
40. The main irrigation method at Perkerra irrigation scheme is called  
 A. basin    B. farrow  
 C. canal    D. sparrow
41. Among the following which one was the reason why Nabogo Mumias collaborated with the British?  
 A. He wanted protection from his enemies  
 B. He wanted British assistance against his brother  
 C. He wanted to be a paramount chief  
 D. He wanted to be a christian
42. What was the reason for the prosperity of Old Ghana kingdom?  
 A. Controlled the Trans-Saharan trade  
 B. Breaking away of the conquered states  
 C. It was expensive to manage  
 D. Hot Sophisticated weapons from Ethiopia
43. Which one of the following countries is in both COMESA and SADC?  
 A. Namibia    B. Botswana  
 C. Sudan    D. Uganda
44. All the following are Kenya's exports except  
 A. flowers    B. tea  
 C. phones    D. soda ash
45. Cement factory is an example of \_\_\_\_ industry.  
 A. tertiary    B. processing  
 C. manufacturing    D. service
46. Masaku is remembered as a man who  
 A. warned his people against colonialism  
 B. asked his people to co-operate with British  
 C. was the father of Muindi Mbingu  
 D. collaborated with Europeans
47. All of the following were functions of the Nchuri Ncheke except  
 A. to give wives to people  
 B. offered sacrifices  
 C. to punish people who go against the norms  
 D. to bless the warriors before going for war
48. The main reason why all African resistance movements were defeated was  
 A. African had superior weapons  
 B. Africans never understood English  
 C. Africans were cowards  
 D. Africans had inferior weapons
49. The policy used by Germans to rule Tanganyika was  
 A. assimilado    B. indirect rule  
 C. paternalism    D. assimilation
50. Who among the following was not a founder member of Kikuyu Central Association in 1925?  
 A. James Beuttah    B. Jesse Kamau  
 C. Joseph Kang'ethe    D. Harry Thuku
51. Which one of the following is not true about the Kenyan struggle for independence?  
 A. In 1957, there was 8 Africans in the Legco  
 B. In 1944 Eliud Mathu was nominated to the Legco  
 C. Africans pushed for more Africans in the Legco  
 D. Europeans wanted more Africans in the legco
52. Which one of the following is not true about the king of Swaziland?  
 A. He is never elected  
 B. He appoints 10 members in parliament  
 C. He is the commander in chief  
 D. He allowed the formation of the political parties
53. The body in charge of making laws in Buganda kingdom was  
 A. Ssaza    B. Katikiro  
 C. Lukiko    D. Batongole
54. Which among the following drugs is not an inhalant?  
 A. Petrol    B. Glue

- C. Tobacco                      D. Alcohol
55. The following are benefits of peace. Which one is not?
- A. It encourages tourism  
 B. It encourages investors  
 C. Many law enforcers are employed  
 D. Creation of good relations among the people
56. The following are functions of the legislature except
- A. to make and amend laws  
 B. to control government spending  
 C. to discuss bills  
 D. to appoint senior government officials
57. An elected president in Kenya can only govern
- A. as long as he is a life  
 B. as long as the political party needs  
 C. until he dies  
 D. for two five years terms each upon election
58. What is the total number of members in the national assembly?
- A. 290                              B. 350  
 C. 450                              D. 410
59. The following are elective posts at the national level except
- A. the governors  
 B. the senators  
 C. the members of the parliament  
 D. the president
60. Parliamentary proceedings are usually recorded in a document called
- A. manifesto                      B. hansard  
 C. bill                                D. order paper
- C.R.E.
61. Which one of the following is not true about man in the Genesis story of creation?
- A. God made man in His own likeness  
 B. Adam was in charge of the creation  
 C. Eve was in charge of vegetation  
 D. They both ate the forbidden fruit
62. Which one of the following is a promise made by God to Abraham?
- A. Make his name great  
 B. He would be the king  
 C. He would have a son called Ismael  
 D. He should not have two wives
63. Moses did not want to go to Egypt because
- A. Egypt was far  
 B. He had never gone there  
 C. He was not a good speaker  
 D. He had enemies
64. Which of the following miracles was performed by Moses?
- A. Turning water into milk  
 B. Walking on water  
 C. Striking the rock to produce water  
 D. He killed the Egyptian
65. Who among the following prophets did not die physical death?
- A. Jeremiah                      B. Isaiah  
 C. Daniel                         D. Elijah
66. The first king of Israel was anointed by
- A. Samuel                         B. Obed  
 C. Nathan                         D. Zadok
67. One of the following prophets went to king David and announced that God was not happy with him and that David would be punished for killing Uriah. Who among the following was the prophet?
- A. Nathan                         B. Jonathan  
 C. Ahija                             D. Obed
68. One of the following kings consulted a which and requested that she brings a prophet of God back to life?
- A. King Solomon.  
 B. King David  
 C. King Darius  
 D. King Saul
69. One of the following was the main reason God had to send prophet to Israel. Which one is it?
- A. Israelites needed to know how God was  
 B. They had turned to worshipping idols  
 C. The Israelites had forgotten how God had reserved them from Egypt  
 D. because God the creator can use people
70. \_\_\_\_\_ was the son of Jacob who was made the governor in Egypt.
- A. Dan                                B. Reuben  
 C. Simeon                         D. Joseph
71. Luke 1:42 Blessed are you among women and blessed is the child you will bear." These words were told to Mary mother of Jesus. Who said these words?
- A. Angel Gabriel  
 B. Angel Michael  
 C. Abraham  
 D. John the baptist
72. Which one of the following was not a miracle performed by Jesus?
- A. Raised a widow's son  
 B. He floated the axe  
 C. He walked on water  
 D. Changed water into wine
73. Who among the following talked about Jesus

as the salvation of Jews?

- A. Simeon
- B. John the baptist
- C. Zachariah
- D. Anna

74. Luke 3:4. A voice of one calling in the desert prepare the way for the Lord make straight paths for him." Whose ways were being prepared?

- A. Zacharia
- B. God
- C. Angel
- D. Jesus

75. Which one of the following is the odd one out?

- A. Healing
- B. Miracles
- C. Goodness
- D. Prophecy

76. 2 Timothy 3:16 - 17, who wrote the Bible?

- A. Special people inspired by God
- B. God Himself
- C. Judges
- D. Prophets

77. The following can be learnt from the suffering of Jesus except

- A. suffering can be overcome
- B. suffering lasts for ever
- C. suffering brings blessings
- D. suffering can be endured

78. One of the following was forced to carry the cross of Jesus christ. Who was he?

- A. Joseph of Arimathea
- B. Simon Peter
- C. Judas Iscariot
- D. Simon of Cyrene

79. Prayers should be accompanied with

- A. actions
- B. rest
- C. work
- D. songs

80. Which one of the following is a quality of good christian?

- A. Humble
- B. Selfishness
- C. Proud
- D. Strong

81. Christian abstain from sex before marriage mainly because

- A. it is one of the commandment
- B. it is not allowed in christianity
- C. the body is the temple of the holy spirit
- D. it is not good

82. All the following are effects of alcohol abuse except

- A. destruction of brain cells
- B. blindness
- C. interference of judgement
- D. making wise decision

83. Which one of the following is a benefit of natural resources in traditional African societies?

- A. Provided employment
- B. Sources of food
- C. Hideout for thieves
- D. Earned foreign exchange

84. Which one of the following is not a reason for people to get married in African traditional society? .Which one is it?

- A. To have children
- B. For continuity
- C. For companionship
- D. Rite of passage

85. In African Traditional Religion drought comes when people

- A. disobey God
- B. annoy ancestors
- C. disobey spirits
- D. disobey the living dead

86. Names of God in African traditional society mainly describe his

- A. height
- B. name
- C. power and character
- D. where he lives

87. Caro hates sweeping the classroom. As a christian, what is the best advice to give her?

- A. To be going to school late to avoid sweeping
- B. To prevent to be sick always
- C. To embrace cleaning classroom
- D. To be sweeping ones in a week

88. Young men in traditional African Society were famous for their

- A. courage
- B. patience
- C. wisdom
- D. obedience.

89. Which one of the following causes hopelessness in life?

- A. Depression
- B. Better performance
- C. Good health
- D. Happiness in life

90. Ancestors are \_\_\_\_\_

- A. People who are about to die
- B. The members of your clan
- C. People who died recently
- D. People who died before we were born

