

STD 7 END TERM 2 EXAM 2019

SOCIAL & RELIGIOUS STUDIES

I YOUR NAME _____ II NAME OF YOUR SCHOOL _____

LOLO AREA

The map shows a central river flowing from the top to the bottom. To the left of the river is a road with a bridge crossing it. Further left is a school building. To the right of the river is a settlement with a hospital (HOS) and a governor's office (G.O.). The right side of the map is dominated by coffee (C) and tea (T) plantations, with a forest area indicated by tree symbols. There are also shrubs (represented by vertical lines) and various symbols for roads and settlements.

Scale:-

Key:-

CC	Coffee		Bridge	G.O	Governor's office
TT	Tea		River		Shrubs
	Forest		Tarmac Road	HOS	Hospital
	Settlement		Road		School

SST&R.E. STD. 7 006/2019 Page 1

Study the map of Lolo area and answer questions 1 -7.

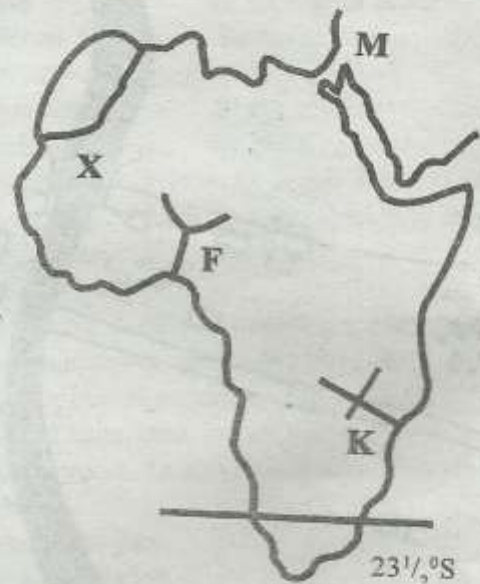
- Lolo area slopes from _____
A. North B. South
C. East D. West
- The type of settlement in the above area is
A. clustered B. dense
C. nucleated D. sparse
- Which type of coffee is found in Lolo area?
A. Ruiru II B. Arabica
C. Robusta D. New variety
- Lolo town started as a result of _____
A. road junction
B. governor's office
C. permanent buildings
D. the bridge
- What is the climate of North East of Lolo area?
A. Hot and dry B. Cool and wet
C. Cool and dry D. Dry and wet
- What is the economic activity that can be practised at South West?
A. Pastoralism B. Mining
C. Lumbering D. Dairy farming
- Which service is urgently needed in the above area?
A. Health B. Security
C. Air transport D. Religious
- The correct longitudes of Africa is
A. 19°W, 54°E B. 37°S, 35°N
C. 17°W, 52°E D. 34°E, 42°E
- All the following islands are found in the Atlantic ocean **except**
A. Guinea equatorial
B. Madagascar
C. Cape Verde
D. Sao Tome and Principe
- Below is a description of a certain mountain;
i) *It is snow - capped*
ii) *It is a block mountain*
iii) *It is the boundary of two countries*

The mountain described above is

- Most of the lakes on the floor of the Rift valley were formed through
A. volcanicity B. faulting
C. down warping D. glaciation

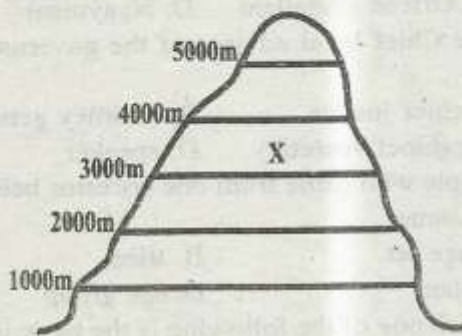
- Which one of the following activities is **least** affected by the climate?
A. Farming B. Dairy farming
C. Tourism D. Mining
- Among the following who does **not** belong to Highlands Nilotes?
A. Sabaot B. Marakwet
C. Kipsigis D. Njemps
- Which one of the following statements about the original inhabitants of Eastern Africa is **true**?
A. They were traders
B. They were pastoralists
C. They were hunters and gatherers
D. They were fisherman

Use the map below to answer questions 15-18.



- What is the name of the river project marked K?
A. Aswan high dam B. Akosombo dam
C. Kariba dam D. Seven folks
- The sun is on the tropic marked W in the month of
A. June B. September
C. December D. March
- The river marked F is called
A. Limpopo B. Niger
C. Zambezi D. Cunene

18. Among the following, which one is a characteristic of the climate marked X?
- Rainfall is between 900mm and 1150mm
 - Most of the rainfall falls in summer
 - Temperatures range between 13°C and 46°C but decrease towards the interior
 - Most of the rain brought by the westerlies
19. Why does Mediterranean climate receive rainfall during winter?
- Because the speed of wind
 - Because of the strength of wind
 - Because of the onshore winds
 - Because of the offshore winds
20. Which vegetation is found in the region marked X?




- Bamboo
 - Rainforest
 - Heath and moorland
 - Savannah
21. Three of the following are ways through which people interacted in the past except one. Which one is it?
- Wars
 - Trading activities
 - Intermarriages
 - Seminars
22. Robinson lives with his father and his two brothers. This is an example of
- a nuclear family
 - an extended family
 - a traditional family
 - a modern family
23. Which one of the following is the **main** problem facing the pastoral communities in Kenya?
- Insecurity
 - Lack of market for the meat
 - Drought which leads to inadequate pastures
 - Poor transport system
24. Three of the following areas are densely populated. Which one is **not**?
- Major cities
 - Nile valley
 - The lake basin
 - Nyika region

25. Which one of the following countries is **correctly** matched with its capital city?
- Nigeria - Lagos
 - Ghana - Kaduna
 - Malawi - Lilongwe
 - Senegal - Djibouti
26. Who among the following is **not** a member of Executive?
- Cabinet secretary
 - Principal secretaries
 - The clerk of the national assembly
 - The leader of majority
27. Who among the following IEBC officials is the returning-officer for presidential elections?
- The IEBC presiding officer
 - The Attorney General
 - The IEBC chairman
 - The chief justice
28. Nakuru town started as
- industrial
 - inland boat
 - agricultural town
 - communication town
29. All the following are duties of a Kenyan citizen **except**
- paying taxes
 - obeying the laws
 - reporting criminals
 - enforcing the laws
30. On 1st June 1963 _____
- Kenya attained internal-self government
 - Kenya obtained full independence
 - The freedom fighters of Kenya were arrested
 - Kenya became a republic
31. Who of the following is the senior most civil servant in a government department in Kenya?
- Governor
 - Leader of majority
 - Speaker
 - Principal secretary
32. The second largest continent in the world is
- Europe
 - Africa
 - Asia
 - Australia
33. The king in traditional Bagada government was called
- Omulamuzi
 - Omwanika
 - Katikiro
 - Kabaka
34. What does afforestation mean?
- Planting trees together with crops
 - Cleaning trees together with crops
 - Planting trees to replace the cut down trees
 - Planting trees where there were no trees

35. Which one of the following features is **not** common at the coast?
- A. Coral reef B. Beaches
C. Barchan D. Polyps
36. Which group do the Japadhola belong to?
- A. Plain Nilotes B. River lake Nilotes
C. Highland Nilotes D. Joka jok
37. The following are factors promoting industrial development in Kenya. Which one is **not**?
- A. Availability of enough raw materials
B. There is a large market in the country for goods
C. Increased taxes by the government
D. Excellent transport network
38. Three of the following are duties of the head teacher. Which one is **not**?
- A. He develops the school
B. He admits new pupils
C. He assigns duties to teachers
D. He employs teachers
39. Which one of the following has contributed to the low population density in the Northern region of Africa?
- A. Insecurity B. Low rainfall
C. Government policy D. Crop plantation
40. One of the following is below the sea level. Which one is it?
- A. Qattara B. Great Rift valley
C. Mt. Longonot D. Mt. Elgon
41. Which one of the following communities is **correctly** matched with its language group?
- A. Fulani - West Atlantic
B. Tswana - San
C. Baganda - Khoikhoi
D. Nubians - Nilotes
42. Who among the following leaders rebelled against the Europeans?
- A. Lewanika B. Lenana
C. Samoure Toure D. Nabongo Mumia
43. Which one of the following explains why most people in Kenya use road transport?
- A. It is the fastest means
B. It is readily available
C. It is the cheapest
D. It is safest
44. Which one of the following statements explains the **main** reason why the government needs foreign currency?
- A. To pay for imports
B. To pay exports
C. To use during overseas travel
D. To pay employees
45. The headquarters of Southern African Development Community (SADC) are at
- A. Lusaka B. Arusha
C. Gaborone D. Abuja
46. Which one of the following rivers has its mouth in lake Tanganyika?
- A. River Omo B. River Rufiji
C. River Malagarasi D. River Ruvuma
47. Which one of the following national philosophies was the earliest in Kenya?
- A. Harambee B. A working nation
C. African socialiam D. Nyayoism
48. The Chief legal advisor of the government is the
- A. chief justice B. attorney general
C. cabinet secretary D. speaker
49. People who came from one ancestor belong to the same
- A. age set B. tribe
C. clan D. age group
50. Which one of the following is the basic unit of the social organisation in African traditional society?
- A. Marriage B. Family
C. Age group D. Age set
51. During the pre colonial period the Wanyamwezi were ruled by
- A. the king
B. the council of elders
C. the queen
D. the hereditary chief
52. Which of the following mountains is an example of a horst mountain?
- A. Kharas B. Atlas
C. Suswa D. Cape ranges
53. All the political parties in Kenya are registered by the
- A. office of the Attorney General
B. chairman of the IEBC
C. Chief Justice
D. Registrar of political parties
54. Which one of the following minerals is **not** correctly matched with the country where it is mined?
- A. Copper in Zambia

- B. Gold in South Africa
C. Petroleum in Zambia
D. Soda ash in Kenya
55. Which one of the following is **not** a pyrethrum growing area?
A. Kisii
B. Nyandarua
C. Molo
D. Lamu
56. Which of the following rivers does **not** drain into Indian ocean?
A. Cunene
B. Ruvuma
C. Rufiji
D. Tana
57. Which one of the following is **not** a commonly abused drug?
A. Heroin
B. Tea
C. Mandrax
D. Bhang
58. Which fishing method is shown below?



- A. Trawling
B. Purse seining
C. Net drifting
D. Long lining
59. The best fishing ground for the fishing method shown is
A. rivers
B. shallow waters
C. deep waters
D. lakes
60. Which one of the following is the **main** factor that influences population distribution?
A. Soil
B. Relief
C. Climate
D. Drainage

C.R.E.

61. According to the Genesis stories of creation, the man was created on the _____ day.
A. second
B. third
C. fourth
D. sixth
62. Who of the following was the first priest of Israel?
A. Aaron
B. Moses

- C. Amos
D. Samuel
63. Who among the following was **not** a judge in Israel?
A. Samuel
B. Tola
C. Samson
D. Parmenas
64. What was the **main** reason why Cain was punished by God?
A. He was jealous of his brothers
B. He answered God rudely
C. He sacrifice was refused
D. He killed his brother
65. What did Noah do immediately he came out of the Ark? He
A. collapsed and died
B. drank too much wine and lay naked
C. called his family to celebrate
D. made an altar and sacrificed to God
66. Who among the following personalities fulfilled God's promise to Abraham and made a strong nation?
A. David
B. Solomon
C. Jacob
D. Joseph
67. "Unto us a child is born, to us a child is given..." Who among the following prophets prophesied that a virgin would give birth to a son?
A. Amos
B. Joel
C. Isaiah
D. Daniel
68. He was given a great task of facing the king and telling him the truth about his sin. The king was sorry and repented before God. Which prophet was this?
A. Jeremiah
B. Samuel
C. Elisha
D. Elijah
69. King David had a best friend who helped him run away from the wrath of his enemy. His best friend was
A. Obed
B. Jonathan
C. Joram
D. Timma
70. Which two kings of Israel coveted?
A. David and Ahab
B. Ahab and Rehoboam
C. David and Solomon
D. Ahab and Jezebel
71. Luke 3:4; "A voice of one calling in the desert prepare the way for the Lord make straight paths for him," whose ways were being prepared?
A. God
B. Angel Gabriel
C. Jesus

- D. John the baptist
72. Luke 1:41 "... blessed are you among women and blessed is the child you will bear." These words were told to Mary the mother of Jesus. Who said these words?
 A. Angel Gabriel
 B. Zachariah
 C. Joseph
 D. Elizabeth
73. "Saul, Saul why do you persecute me." Who are you Lord. Where was Saul leading to at the time when he heard the voices?
 A. Bethlehem B. Jericho
 C. Damascus D. Cairo
74. Why did Jesus go for baptism?
 A. To be blessed by God
 B. To wash away His sins
 C. To confirm that John the Baptist had been sent by God
 D. For the fulfillment of the scriptures
75. Among the following was the first to see the risen Christ?
 A. Mary Magdalene B. Cleopas
 C. Mary D. James
76. Dorcas, the lady who helped widows and orphans lived in
 A. Lydda B. Joppa
 C. Bethlehem D. Nazareth
77. Among the following which one is not a gospel?
 A. Mark B. John
 C. Luke D. Acts
78. Among the following, which one is the greatest?
 A. Faith B. Joy
 C. Hope D. Humility
79. What is the other name of Nathaniel?
 A. Thomas B. Bartholomew
 C. Thaddeus D. Matthew
80. Which one of the following is not a gift of the holy spirit?
 A. Faith B. Miracle
 C. Prophecy D. Joy
81. Who among the following people misused leisure in the Bible?
 A. Abraham B. Noah
 C. Isaac D. Joseph
82. Physical needs of a family include all the following except one. Which one is it?
 A. Shelter B. Food
 C. Clothing D. Care
83. According to the Bible the best thing the person can do to a friend is to
 A. pray for him
 B. diet for his sake
 C. help him when in problems
 D. visit him
84. Three of the following were the rites of passage in African Traditional Society. Which one was not?
 A. Birth B. Marriage
 C. Death D. Baptism
85. Which one of the following is a similarity between christianity and African Traditional Society?
 A. Priesthood B. Circumcision
 C. Magic D. Life after death
86. The African Traditional Religion viewed God as the following except
 A. the provider B. the creator
 C. punishes the dead D. the forgiver
87. Which one of the following is not a common practice in both African Traditional Society and christianity concerning marriage?
 A. Paying of dowry
 B. Celebrating when two people get married
 C. Every married couple had to have children
 D. The couple was encouraged to work hard
88. Your friend complains to you that the work he does is not good. As a christian what can you advice him?
 A. Abandon the job
 B. Start a revolution
 C. Work only when supervised
 D. continue working hard God will promote him
89. Which one of the following is the best way a christian can use leisure time?
 A. Watching movies and playing games
 B. Visiting the sick in the hospitals
 C. Playing football
 D. Praying in the church
90. Which one of the following is the main reason why missionaries came to Kenya?
 A. To teach how to read and write
 B. To spread the gospel of Jesus Christ
 C. To help in the translation of the Bible
 D. To build schools and hospitals

