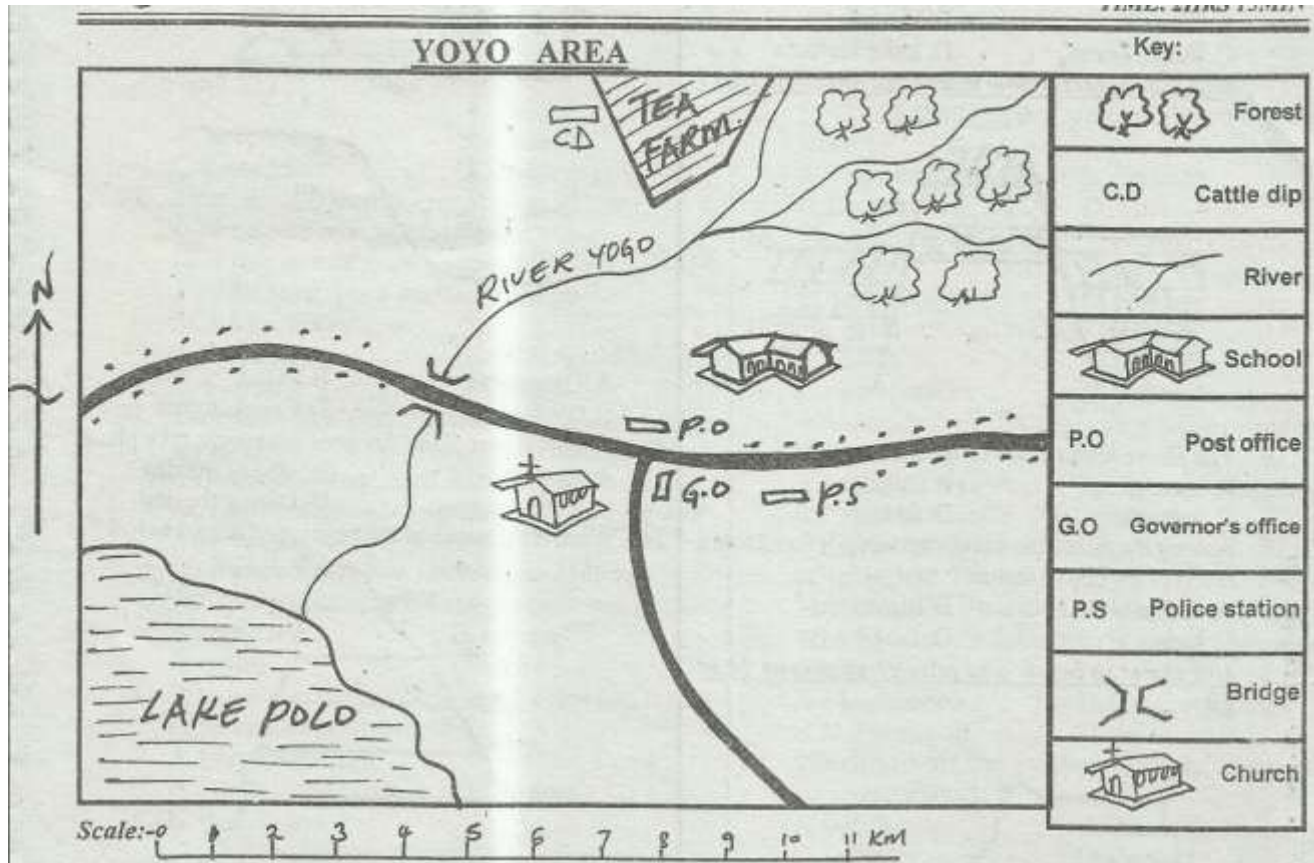


# STD 6 END TERM 2 EXAM 2019

## SOCIAL & RELIGIOUS STUDIES



**Use the map of Yoyo area to answer questions 1-7.**

1. The type of settlement in the above area is
  - A. linear
  - B. cluster
  - C. nucleated
  - D. dense
2. River Yoyo ends with \_\_\_\_\_
  - A. confluence
  - B. delta
  - C. estuary
  - D. mouth
3. The type of soil found at North East is
  - A. clay
  - B. alluvial
  - C. volcanic
  - D. loam
4. People in the above area mainly worship on \_\_\_\_\_ day.
  - A. Friday
  - B. Monday
  - C. Sunday
  - D. Tuesday
5. Cattle dip in the area indicates \_\_\_\_\_
  - A. tea farming
  - B. rabbit farming
  - C. poultry farming
  - D. dairy farming
6. The ministry of information and technology would like to erect a communication mast. Which is the best place to be erected?
  - A. Around the settlement
  - B. At the mouth of the river
  - C. In town
  - D. At the forest
7. Wanyama wants to start the business. Which office would he visit?
  - A. Police station
  - B. Post offices
  - C. Any office in the town
  - D. County offices
8. Among the following countries, which one is **not** found in Eastern Africa?
  - A. Eritrea
  - B. Djibouti
  - C. Sudan
  - D. Mozambique
9. Eastern Africa is found between latitude
  - A. 23°N and 12°S
  - B. 22°E and 51°E
  - C. 5°N and 5°N
  - D. 37°N and 35°S
10. The latitude that cuts Eastern Africa almost into two parts is called
  - A. hemisphere
  - B. equator
  - C. arctic
  - D. cancer
11. Which one of the following is **not** an element of a good map?
  - A. Title
  - B. Scale
  - C. Colour
  - D. Frame
12. The following countries are landlocked **except**
  - A. South Sudan
  - B. Uganda
  - C. Ethiopia
  - D. Eritrea

13. Which of the following lakes is **not** found in Ethiopia?  
 A. Chala B. Shala  
 C. Abaya D. Stephanie
14. Which plateau is called a plateau within the plateau?  
 A. Nyika B. Yatta  
 C. Soroti D. Busoga
15. Where is the source of river Shebeli?  
 A. Somalia B. Victoria  
 C. Indian ocean D. Lake Turkana

*Use the feature below to answer question 16-17*



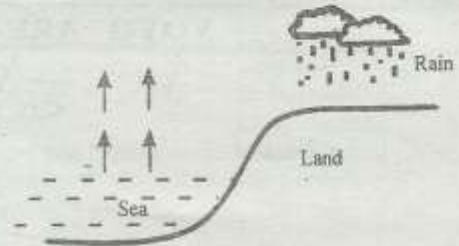
16. The above feature was formed as a result of  
 A. sinking B. faulting  
 C. volcanicity D. folding
17. Among the following which one was **not** formed as a result of the above feature?  
 A. Karas B. Ruwenzori  
 C. Kulal D. Pare

*Use the map below and answer questions 18 to 20.*

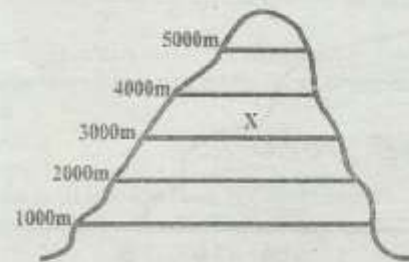


18. What is the capital city of country marked X?  
 A. Djibouti B. Asmara  
 C. Dodoma D. Addis Ababa
19. The river marked W is called  
 A. Tana B. Omo  
 C. Turkwel D. Rufiji

20. The lake marked K is called  
 A. Tanganyika B. Kyoga  
 C. Malawi D. Edward
21. The instrument used to measure air pressure is called  
 A. raingauge B. barometer  
 C. thermometer D. hygrometer
22. What type of rainfall is shown below?



- A. Orographic B. Relief  
 C. Cyclonic D. Convectional
23. At which part of the day does sea breeze take place?  
 A. At night B. Mid of the day  
 C. In the morning D. During the day
24. What is the name of the vegetation drawn below?



- A. Savannah vegetation B. Equitorial vegetation  
 C. Mountain vegetation D. Desert vegetation
25. Which vegetation is found at the point marked X?  
 A. Bamboo B. Palm  
 C. Heath D. Moor
26. The walls of the Rift valley are called  
 A. escarpments B. fault lines  
 C. dykes D. horsts
27. The following are characteristics of a certain type of climate;  
 i) *The main type of vegetation found here is rainforest*  
 ii) *The sun is always overhead at noon*  
 iii) *It experiences rainfall of above 2000mm*  
 The above climate is  
 A. tropical climate B. equitorial climate  
 C. semi arid climate D. mountain climate
28. Among the following people, who did not use the route between lake Tanganyika and lake Malawi?  
 A. Yao B. Makonde  
 C. Fiba D. Ha
29. The Bantu community that migrated into Eastern Africa from Southern Africa is known as  
 A. Makonde B. Ngoni  
 C. Yao D. Nyamwezi

30. Which fishing method is shown below?



- A. Net drifting  
C. Purse seining
- B. Trawling  
D. Long lining
31. The following are the description of a town;-  
i) *The name means new flower*  
ii) *It was moved from Entoto hills*  
iii) *The town has a warmer climate*  
Which town is this?  
A. Dodoma  
C. Kampala
- B. Addis Ababa  
D. Djibouti
32. The following statements describe conditions that are favourable for a certain crop in Eastern Africa;  
i) *It requires deep, well drained fertile soils*  
ii) *A warm season is required for ripening and harvesting*  
iii) *Rainfall between 1000mm to 1500mm*  
The crop that requires the above conditions is  
A. sugarcane  
C. coffee
- B. bananas  
D. sisal
33. Which one of the following is **not** a problem facing urban centres in Eastern Africa?  
A. Unemployment  
B. Lack of market for the finished goods  
C. High crimes  
D. Growth of slums
34. \_\_\_\_\_ could not be produced by the traditional craftsman.  
A. Baskets  
C. Glasses
- B. Bark cloth  
D. Pots
35. Which one of the following species is the odd one out?  
A. Parrot fish  
B. Trout  
C. Mullet  
D. Snapper
36. The trade commodity that is commonly transported by pipeline in Eastern Africa is  
A. water  
B. limestone  
C. cement  
D. tea
37. Which one of the following is **not** a problem facing forms of transport in Eastern Africa?  
A. Poor management  
B. Inadequate capital  
C. Inadequate goods to transport  
D. Competition among forms of transport
38. Banking, insurance, hotel and catering fall under a \_\_\_\_\_ industry.  
A. processing  
C. assembling
- B. manufacturing  
D. service
39. A good citizen of Kenya is one who \_\_\_\_\_  
A. goes to church regularly  
B. obeys the laws of the country  
C. belongs to a political party  
D. is rich
40. Which one of the following does **not** undermine peace in the society?  
A. Tribalism  
C. Racism
- B. Nepotism  
D. Fairness
41. Election in Kenya is held after every \_\_\_\_\_ years.  
A. 10  
B. 5  
C. 4  
D. 3
42. Among the following, which one is **not** associated to Orkoiyot of Nandi?  
A. Prophet  
C. Medicinemen
- B. A trader  
D. Tribal leader
43. \_\_\_\_\_ is the source of water of Ahero irrigation scheme.  
A. Thiba and Nyamidi  
C. Nyando
- B. Perkerra  
D. Tana
44. The rotation of the earth from West to East causes  
A. seasons  
C. day and night
- B. weather  
D. high temperatures
45. The Ameru council of elders is called  
A. Kiama  
C. Njuri Ncheke
- B. Kokwet  
D. Nabongo
46. Who among the following leaders collaborated with British?  
A. Mekatilili wa Menza  
C. Orkoiyot Koitalel
- B. Nabongo Mumia  
D. Masaku
47. Which one of the following lakes is found on the floor of Rift valley?  
A. Turkana  
B. Victoria  
C. Olobolosat  
D. Kyoga
48. Which one of the following is **not** a cause of soil erosion?  
A. Monocropping  
C. Deforestation
- B. Crop rotation  
D. Overstocking
49. Which arm of the government implements the government policies?  
A. Legislature  
C. Judiciary
- B. Executive  
D. Cabinet
50. The Chief legal advisor of the government is the  
A. president  
B. deputy president  
C. attorney general  
D. member of the parliament
51. \_\_\_\_\_ is not a tributary of river Nile.  
A. Blue Nile  
C. Atbara
- B. White Nile  
D. Sabaki
52. The **main** problem facing beef farming in Eastern Africa is  
A. inadequate market  
B. pest and diseases  
C. lack of veterinary  
D. lack of adequate pasture
53. \_\_\_\_\_ is not a cushitic speaker in Kenya.  
A. Iraqw  
B. Sandawe  
C. Borana  
D. Amhara
54. The amount of water in the air is called  
A. air pressure  
C. evaporation
- B. humidity  
D. clouds
55. Which crop is **not** grown under irrigation?  
A. Sugarcane  
C. Sisal
- B. Cotton  
D. Rice
56. \_\_\_\_\_ town developed as a result of industrial activities.  
A. Voi  
B. Kitale  
C. Nakuru  
D. Thika

57. A group of people who descend from a common ancestor forms a  
A. tribe B. community C. clan D. family
58. \_\_\_\_\_ is not a basic human need.  
A. Clothing B. Shelter  
C. Food D. Television
59. The following are the uses of soda ash **except**  
A. making glasses  
B. making of soap  
C. strengthening steel and aluminium  
D. used in oil refineries
60. How many women representatives were elected in the Kenya National assembly?  
A. 29 B. 350 C. 47 D. 16
- C.R.E.**
61. According to Genesis stories of creation when did God rest?  
A. Between the fourth and the fifth day  
B. On the sixth day  
C. During the night  
D. On the seventh day
62. Abraham is called a friend of God mainly because he  
A. circumcised his son B. trusted in God  
C. he left his homeland D. sacrificed his son
63. Who among the following people was appointed the king of Israel while still a young boy?  
A. Saul B. Ahab C. Solomon D. David
64. Where did Moses flee to after killing the Egyptian?  
A. Judeah B. Bethlehem  
C. Haran D. Median
65. The temple in Jerusalem was built by  
A. king Saul B. king David  
C. king Solomon D. king Ahab
66. Ahab's wife was called \_\_\_\_\_  
A. Jezebel B. Bersheba  
C. Rebecca D. Mishelle
67. Ruth and Orpha were \_\_\_\_\_  
A. Jebusites B. Levites  
C. Hittites D. Moabites
68. Gideon went to war against the Midianites with \_\_\_\_\_ men.  
A. 32000 B. 30000 C. 300 D. 3000
69. Who among the following prophets prophesied about the place of birth of Jesus?  
A. Isaiah B. Jerusalem  
C. Daniel D. Micah
70. Among the following books which one is a prophetic book?  
A. Job B. Genesis C. Isaiah D. Exodus
71. Where was Jesus walking when he saw two brothers who were fishermen?  
A. Jerusalem B. Bethlehem  
C. Along the shore of lake Galilee D. Nazareth
72. Another name of Simon was  
A. John B. James C. Andrew D. Peter
73. A Jewish leader who asked Jesus about eternal life was  
A. the centurion B. Nicodemus  
C. Joseph of Arimathea D. Judah
74. John the baptist referred to Jesus as \_\_\_\_\_ who takes away the sins of the world.  
A. lamb of God B. prince of peace  
C. son of God D. spirit of God
75. The writers of the scriptures were influenced and guided by God through His  
A. power B. miracles C. spirit D. mighty
76. Lazarus lived in \_\_\_\_\_  
A. Galilee B. Jerusalem  
C. Bethany D. Nazareth
77. Paul was converted on the way to  
A. Jerusalem B. Bethlehem  
C. Judea D. Damascus
78. After the ten lepers were healed, what did one of them do after he found he was made well?  
A. Thanked God  
B. Ran to the temple  
C. Told everybody  
D. Went to Jesus to thank him
79. Jesus referred to the Pharisees as  
A. servants B. teachers  
C. priests D. hypocrites
80. The ability that God gave us that we are good at one thing is called  
A. ability B. creativity C. talent D. miracle
81. The first christian to be killed due to his faith was called  
A. Judah B. Paul C. Stephen D. Job
82. The people who have run away from their countries are called  
A. servants B. citizens  
C. refugees D. tourists
83. Which one will not lead to a happy family?  
A. Respect B. Selfishness  
C. Love D. Care
84. Which of the following occasion did not mark new life in traditional African Society?  
A. Death B. Birth C. Salvation D. Marriage
85. Bad relationship in the family causes all the following **except**  
A. suffering B. destruction  
C. frustration D. love
86. Among the following who does **not** belong to a special group?  
A. Crippled B. Deaf C. Dumb D. Rich
87. Ancestors are \_\_\_\_\_  
A. people who are aged  
B. people who have died  
C. people who died before we were born  
D. the living dead
88. Somebody has stepped on your foot. What is the **best** thing for you to do?  
A. Beat him B. Push him  
C. Pray for him D. Tell him gently
89. What was the traditional name of God for the Akamba people?  
A. Mulungu B. Asis C. Were D. Enkai
90. Avoiding irresponsible sexual behaviour shows we have the value of  
A. mercy B. love C. purity D. obedience

