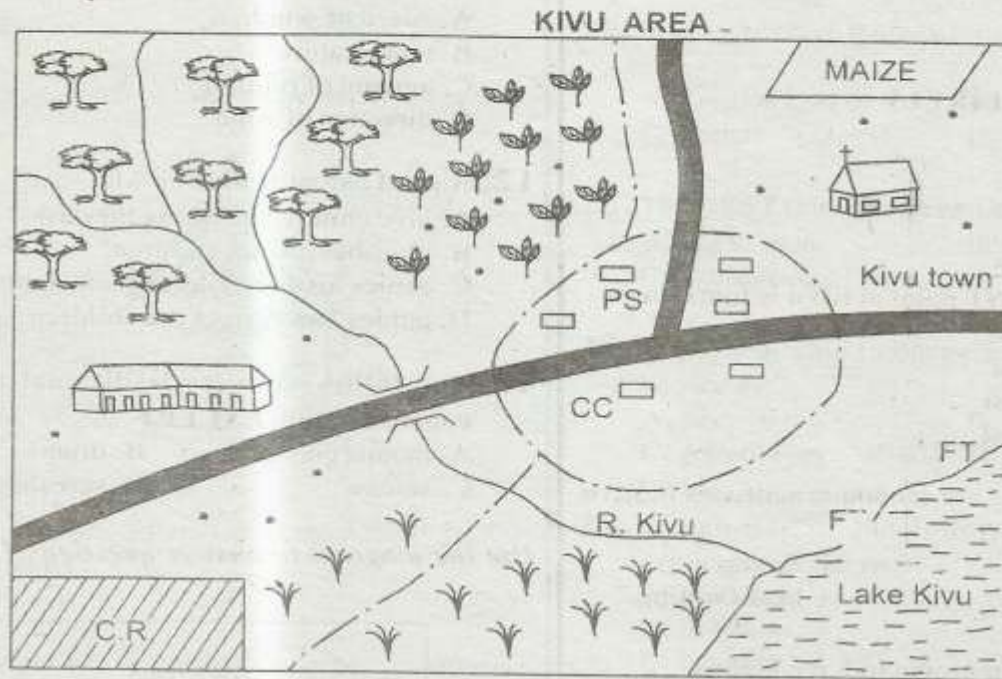


STD 4 END TERM 2 EXAM 2019
SOCIAL & RELIGIOUS STUDIES

Time: 2 hours 15 minutes

PART I: SOCIAL STUDIES



SCALE: 0 1 2 3 4 5 6 7 8 9 10 Kms

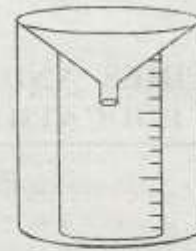
KEY

	Forest		Police station
	Grassland		Tea farm
	Cattle ranch		Chief's camp
	Permanent buildings		Fish trap
	Huts		Locational boundary
	School		Tarmac road
	Church		Maize farm

Study the map of Kivu Area and use it to answer questions 1 to 7.


1. The **MAIN** form of transport in Kivu area is
A. road B. railway
C. air D. water
2. What is the direction of the church from Lake Kivu?
A. South
B. West
C. East
D. North
3. Kivu area is **LIKELY** to be a
A. county
B. location
C. sub-county
D. sub-location
4. The **HIGHEST** point at Kivu is found in
A. North East
B. South East
C. South West
D. North West
5. The following are economic activities in Kivu area **EXCEPT**
A. mining B. fishing
C. farming D. beef farming
6. The cash crop grown in Kivu area is
A. maize B. tea
C. cotton D. beans
7. The people in Kivu area are
A. Pagans
B. Muslims
C. Traditionalists
D. Christians
8. The Bantu people originated from
A. Somalia B. Ethiopia
C. South Sudan D. Congo forest
9. Moving air is known as
A. wind B. climate
C. temperature D. moisture
10. The type natural vegetation found growing along rivers is called
A. savannah B. papyrus
C. riverine D. mangrove

11. The weather instrument below is used to measure



- A. speed of wind.
B. temperature
C. amount of rainfall
D. direction of wind.
12. A good parent is the one who
A. give children anything they ask.
B. punishes his/her children.
C. denies his/her children their rights.
D. guides and correct the children.
 13. The following were traditional forms of communication **EXCEPT**
A. mobile phones B. drums
C. smoke D. screaming

Use the diagram to answer questions 14 to 16.



14. The above diagram shows the formation of
A. land breeze
B. convectional rainfall
C. relief rainfall
D. sea breeze
15. The side marked **B** is called
A. windward B. leeward
C. rain shadow D. mountain
16. The winds marked **A** are
A. dry B. permanent
C. wet D. seasonal

17. Which one of the following is a wild animal?

- A. Turkey
- B. Donkey
- C. Goat
- D. Rhino

18. Democracy in a school will allow pupils to

- A. abuse others.
- B. elect prefects.
- C. steal from others.
- D. fight each other.

19. The following are benefits we get from chicken

EXCEPT- They provide

- A. meat
- B. manure
- C. eggs
- D. milk

20. The traditional hut shown below belongs to



- A. Maasai
- B. Pokot
- C. Kamba
- D. Kikuyu

21. We wear heavy clothes during _____ season.

- A. hot
- B. windy
- C. cold
- D. calm

22. The sun rises in the

- A. West
- B. North
- C. East
- D. South

23. Movement of people from one place to another is called

- A. migration
- B. employment
- C. transport
- D. nomadism

24. The **BEST** soil for growing crops is

- A. loam
- B. clay
- C. sand
- D. silt

25. The following animals were used when transporting things **EXCEPT**

- A. donkey
- B. sheep
- C. horse
- D. camel

26. When crossing the road a pedestrian should cross at a

- A. junction
- B. roundabout
- C. corner
- D. zebra crossing

27. The **BEST** time for harvesting wheat is during

- A. hot season
- B. wet season
- C. dry season
- D. cool season

28. The money paid to the parents of the bride is known as

- A. tax
- B. fine
- C. school fees
- D. dowry

29. Which one of the following was **NOT** a ceremony in the past?

- A. Birthday
- B. Initiation
- C. Naming
- D. Marriage

30. A big area set aside for wildlife is known as

- A. game park
- B. lodging
- C. museum
- D. ranch

31. Dairy cattle are **MAINLY** kept for

- A. egg
- B. wool
- C. beef
- D. milk

32. Which one of the following is **NOT** an element of weather?

- A. Rainfall
- B. Wind
- C. Temperature
- D. River

33. Small rivers joining a main river are called

- A. delta
- B. mouth
- C. tributaries
- D. meanders

34. Which one of the following was NOT made in traditional industries?
 A. Jembes
 B. Vehicles
 C. Spears
 D. Arrows
35. Which one of the following does NOT attract tourists?
 A. Roads
 B. Beautiful sceneries
 C. Sandy beaches
 D. Wildlife
36. In the past children were taught by
 A. teachers
 B. elders
 C. priests
 D. doctors
37. The head of a county is known as the
 A. MCA
 B. Speaker
 C. Governor
 D. President
38. A peoples way of life is known as
 A. culture
 B. clan
 C. taboo
 D. ancestors
39. Women who help pregant mothers to give birth are known as
 A. medicinemen
 B. herbalist
 C. doctors
 D. mid-wives
40. The following are basic needs EXCEPT
 A. food
 B. clothing
 C. money
 D. shelter
41. The person who heads a school is called
 A. chief
 B. class teacher
 C. headteacher
 D. prefect
42. The HIGHEST mountain in kenya is
 A. Mt. Elgon
 B. Mau ranges
 C. Mt. Kenya
 D. Aberdare Ranges
43. Which item is NOT made in a weeving industry?
 A. Baskets
 B. Ropes
 C. Mats
 D. Pots
44. Rules in a society that help people to behave well are called
 A. commandments
 B. laws
 C. moral values
 D. beliefs
45. A disagreement between two or more people is called a
 A. conflict
 B. law
 C. peace
 D. reconciliation
46. A family made up of father, grandfather, uncle and children is called
 A. nuclear
 B. single
 C. father
 D. extended
47. Our county is divided into units called
 A. districts
 B. counties
 C. divisions
 D. sub-counties
48. The ruling party in Kenya is
 A. NASA
 B. Wiper
 C. ODM
 D. Jubilee
49. A group of people born almost at the same time is called
 A. clan
 B. community
 C. tribe
 D. age group
50. Many people in Kenya get information of our country through
 A. Radio
 B. TV
 C. Newspaper
 D. Internet
51. Exchange of goods for other goods is known as
 A. barter trade
 B. buying trade
 C. selling trade
 D. borrowing trade

52. An area with little or no vegetation is called
 A. savannah B. forest
 C. mountain D. desert
53. Keeping of animals and growing crops is known as
 A. forestry B. agriculture
 C. mining D. fishing
54. In traditional days cases were judged by
 A. judges B. magistrate
 C. warriors D. elders
55. Plants growing in a swampy area called
 A. papyrus B. grass
 C. bamboo D. acacia
56. The **BIGGEST** town in Kenya is
 A. Nairobi B. Nakuru
 C. Mombasa D. Eldoret
57. Many accident are caused by
 A. potholes
 B. traffic police
 C. bad weather
 D. careless driving
58. The Maasai call their God
 A. Nyasaye B. Enkai
 C. Mulungu D. Were
59. An area of low lying land is called a
 A. plateau
 B. highland
 C. valley
 D. plain

60. The road sign drawn shows



- A. no entry
 B. bump ahead
 C. round about
 D. zebra crossing

PART II: RELIGIOUS EDUCATION
SECTION A:
CHRISTIAN RELIGIOUS EDUCATION

61. Which of the following is **NOT** good effects of weather?
 A. Providing water.
 B. Growing crops.
 C. Growing grass for cows.
 D. Flood.
62. How many people did Jesus feed using 2 fish and 5 loaves of bread?
 A. 5000
 B. More than 5000
 C. Less than 5000
 D. 4000
63. Jesus showed that he had power to forgive sin when he healed
 A. Lazarus
 B. Jairus daughter
 C. The paralysed man
 D. Mary
64. Which King in Israel was the **WISEST**?
 A. Saul B. David
 C. Ahab D. Solomon
65. The sun the moon and stars were created on the
 A. fifth day B. fourth day
 C. third day D. sixth day
66. Who among the following was a son of Noah?
 A. Shem
 B. Jacob
 C. Esau
 D. Isaac
67. Israelites were led into the promised land by
 A. Moses
 B. Joshua
 C. Aaron
 D. Gideon
68. Who among the following helped Jesus to carry the cross?
 A. Joseph of Arimathea
 B. Simon of Cyrene
 C. Joseph father of Jesus
 D. Simon Peter

69. The wife of Moses was known as
 A. Rebecca
 B. Deborah
 C. Zipporah
 D. Mirriam
70. The **FIRST** person to commit murder on earth is
 A. Cain
 B. Eve
 C. Adam
 D. Abel
71. When Jesus met the traders in the temple He
 A. complained about them.
 B. charged them a fee.
 C. ignored them.
 D. drove them out of the temple.
72. Another name for lake Galilee is
 A. Carpenaum
 B. Red Sea
 C. Jordan
 D. Tiberias
73. Who were the first people to see Jesus after he was born?
 A. Wisemen
 B. Herod
 C. Shepherds
 D. Augustus
74. How many times was Jesus tempted by the devil?
 A. 2 times
 B. 4 times
 C. 3 times
 D. 6 times
75. The disciples of Jesus received the holyspirit in
 A. Jericho
 B. Jerusalem
 C. Bethlehem
 D. Nazareth
76. Lazarus and his sisters lived in
 A. Jerusalem
 B. Nazareth
 C. Bethany
 D. Jericho
77. The last book in the Old Testament is
 A. Exodus
 B. Genesis
 C. Malachi
 D. Revelation
78. Who among the following made the **WRONG** choice?
 A. Ruth
 B. Ananias
 C. Abraham
 D. Moses
79. When Jesus walked on water. He showed he had power over
 A. nature
 B. faith
 C. hunger
 D. water
80. The prophet who spoke about the coming of the Messiah was
 A. Isaiah
 B. Elijah
 C. Jonah
 D. Elisha
81. One of the following woman promised to dedicate her son to God. Who was she?
 A. Mary
 B. Hannah
 C. Peninah
 D. Elizabeth
82. Church leaders and helpers should be
 A. greedy
 B. jealous
 C. proud
 D. honest
83. Who among the following was among the twelve disciples?
 A. Joseph
 B. Peter
 C. Paul
 D. Mary
84. Which Patriarch is known as father of faith?
 A. Abraham
 B. Isaac
 C. Jacob
 D. Moses
85. The believers were first called Christian at
 A. Jerusalem
 B. Antioch
 C. Jericho
 D. Israel
86. Who was the first Christian Martyr?
 A. James
 B. Peter
 C. Stephen
 D. Jesus
87. How many books are in the Old Testament?
 A. 66
 B. 27
 C. 65
 D. 39
88. Who was the King during Daniel time?
 A. Nebuchadnezzar
 B. King Darius
 C. King Ahab
 D. King Saul
89. If you find your friend stealing money. What should you do?
 A. Call police
 B. Share with him
 C. Tell everybody
 D. Tell him to return.
90. Your school team has lost a match against a neighbouring school. As a Christian what would you advice your schoolmates to do?
 A. Go home.
 B. Pray for the losers.
 C. Beat them.
 D. Congratulate the winning team.

SECTION B:

ISLAMIC RELIGIOUS EDUCATION

- 61.** In Surah Al-Fil, Abrahah Ashram attempted to
A. stop the Qureish from trade.
B. become the governor by force.
C. destroy the holy Kaaba.
D. kill the birds using elephants.
- 62.** "Al hamdulillahi Rabbil Aalamiin" means All
be to Allah.
A. praise
B. people
C. commands
D. powers
- 63.** Surah Maun says that do not mistreat
A. the sick
B. young children
C. orphans
D. servants
- 64.** In Surah Al-Lahab, Allah cursed Abul.ahab and
his wife called Ummul
A. Mabad
B. Jamiil
C. Ayman
D. Khair
- 65.** Surah Ikhlas talks about _____ of Allah.
A. rewards
B. protection
C. guidance
D. oneness
- 66.** In a hadith, the prophet said that all muslims are
A. brothers
B. leaders
C. neighbours
D. relatives
- 67.** Complete the hadith below.
" _____ is a pillar of Islam".
A. Swaam
B. Zakkat
C. Swalah
D. Hajj
- 68.** When muslims talk they should _____.
A. fulfil promises
B. be trusted
C. listened to
D. say the truth
- 69.** A good muslim should do all the following
EXCEPT one. Which one?
A. Start eating by saying Bismillah.
B. Say dua when they go to sleep.
C. Not mix with non-muslims.
D. Be the first ones to greet.
- 70.** "Assalaam Aleinaa, wa alaa Ibaadillahi Saalihiina"
These words are said in _____.
A. Tauhid
B. Tashahhud
C. Adhaan
D. Kalima
- 71.** A baby body who is below two year and only
suckles milk can give out _____ Najis.
A. light
B. thick
C. heavy
D. medium
- 72.** Tayammum is a _____.
A. Sunna birth
B. wet Istinja
C. a medium Najis
D. dry Udhu
- 73.** Muslims call others for Swalah using _____.
A. Adhaan
B. Dua
C. Iqama
D. Shahada
- 74.** Which Swalah has three rakaats?
A. Fajr
B. Asr
C. Maghrib
D. Isha
- 75.** There are _____ pillars of Islam.
A. five
B. six
C. three
D. nine
- 76.** If you say "Shahada" you show _____ straight
fingers.
A. four
B. three
C. two
D. one

77. The ninety nine Attributes of Allah teach us his good ____.
- work
 - creations
 - manners
 - names
78. Which Attribute says that Allah(s.w) shall be the King on the Day of Qiyama?
- Al-Quddus
 - Al-Malik
 - As-Salaam
 - Al-Azeez
79. ____ prophets are mentioned in the holy Qur'an.
- 25
 - 17
 - 27
 - 40
80. All prophets of Allah are just ____.
- Angels
 - Jinns
 - Human beings
 - Miracles
81. Muslims do work to get ____.
- Ibaada
 - sweat
 - Rizq
 - riches
82. What will you say to ask for forgiveness from Allah?
- Astaghfirullah
 - Yarhamkallah
 - Maashallah
 - Jazaakallah
83. Muslims are happy for their babies and they celebrate ____ with them.
- Nikah
 - Twalaq
 - Aqiqah
 - Maulid
84. Going on Isra wal Miraj the prophet passed through ____ city.
- Caanan
 - Bethlehem
 - Galilee
 - Jerusalem
85. We should ____ our parents.
- pray to
 - praise
 - obey
 - disturb
86. Who among these is a good friend? Who
- goes to video.
 - learns Madrasa.
 - watches cinema.
 - dances disco.
87. The prophet preached Islam secretly for a period of ____ years.
- three
 - five
 - ten
 - thirteen
88. Who of these is a good child? Walad
- Rashid
 - Swalha
 - Rajab
 - Swaleh
89. Who was the foster mother of prophet Muhammad(S.A.W)?
- Halima
 - Amina
 - Khadijah
 - Ruqayya
90. Which behaviour is NOT good for muslims?
- Kindness
 - Shearing
 - Selfishness
 - cooperation