

STANDARD SEVEN MID TERM 1 EXAMS-2019

SOCIAL STUDIES AND CRE

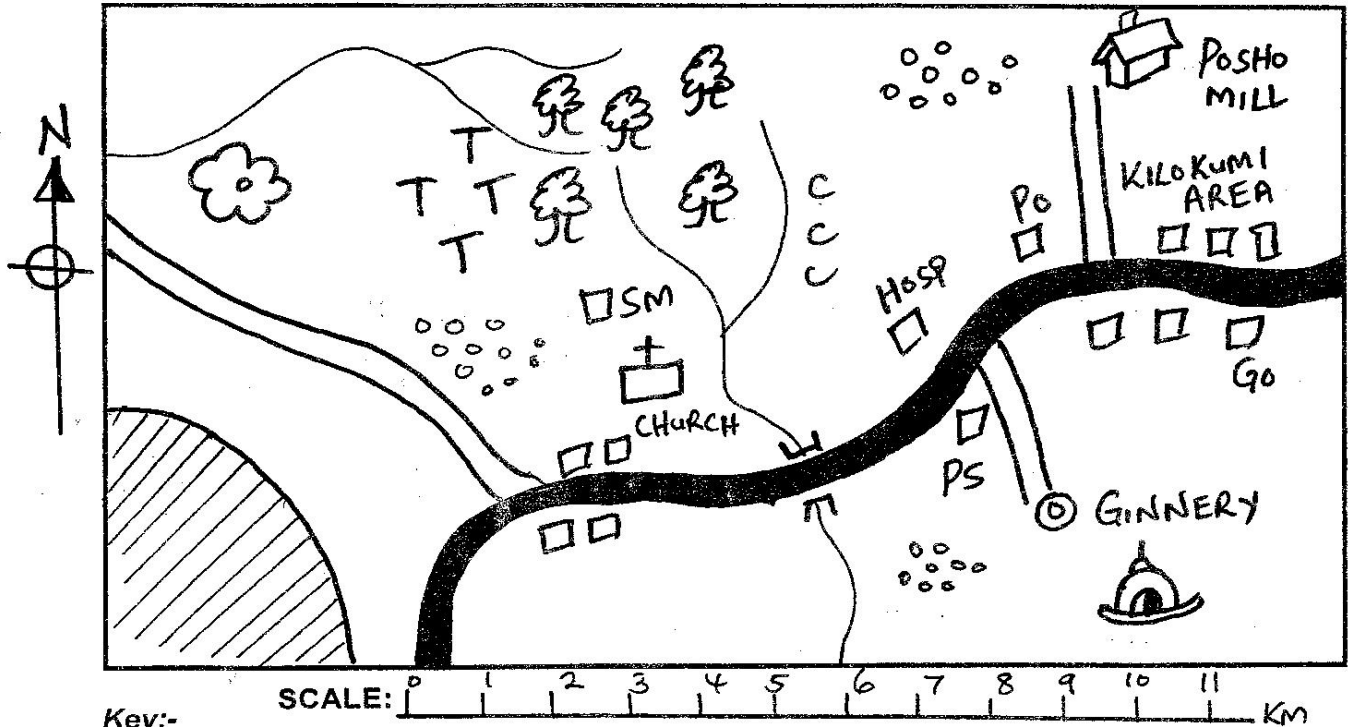
- You have been given this question paper and a separate answer sheet. The question paper contains 90 questions.
- Make sure that you have written on the answer sheet

(i) Your name

(ii) Name of your school

TIME: 2 HRS 15 MINS

KILOKUMI AREA



Key:-

Forest	Settlement	Quarry
SM Saw mill	Tarmac road	PO Post Office
CC Coffee	Murrum road	PS Police Station
TT Tea	GO Governor's Office	HOSP Hospital

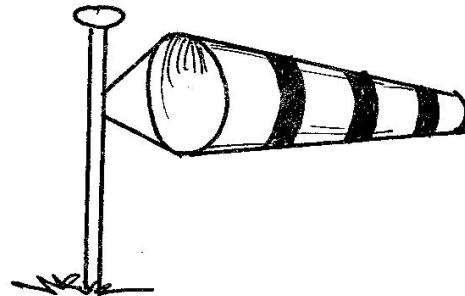
Study the map of Kilokumi Area above and answer questions 1 - 7.

- The type of settlement in Kilokumi area is influenced by
 - type of soil
 - transport
 - climate
 - economic activities
- The people in Kilokumi area are both
 - traditionalists and Christians
 - Christians and Muslims
 - Muslims and budhists
 - traditionalists and Muslims

- All the following crops are grown in Kilokumi area **except**.
 - sisal
 - cotton
 - maize
 - coffee
- The following are economic activities in Kilokumi area **except**.
 - mining
 - farming
 - lumbering
 - fishing
- Most part of Kilokumi area is
 - hot and dry
 - hot and wet
 - cool and wet
 - cool and dry

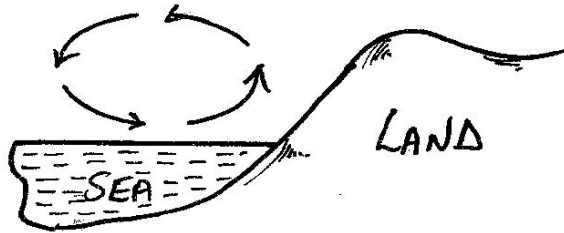
6. Kilokumi area rises towards
 - A. North
 - B. South
 - C. East
 - D. Center
7. What evidence on the map shows that Kilokumi area enjoy plenty of security?
 - A. Post Office
 - B. Governor's office
 - C. Police Station
 - D. Good road
8. Which of the following communities migrated into Kenya from the Horn of Africa?
 - A. Somali, Rendille, Gabra
 - B. Luo, Somali, Gabra
 - C. Somali, Oromo, Gikuyu
 - D. Akamba, Turkana, Pokomo
9. Which one of the following countries is landlocked?
 - A. Democratic Republic of Congo
 - B. Madagascar
 - C. Niger
 - D. Gambia
10. Which of the following statements is true?
 - A. Africa has a regular coastline
 - B. Africa is crossed by the international date line
 - C. Africa is found North of Europe
 - D. South America is found West of Africa
11. The Judiciary in Kenya is headed by
 - A. Chief Justice
 - B. Speaker
 - C. Attorney General
 - D. President
12. Kenana irrigation scheme is known for growing of
 - A. sugarcane
 - B. rice
 - C. vegetable
 - D. cotton
13. The minimum age to own property in Kenya is
 - A. 18 years
 - B. 21 years
 - C. 55 years
 - D. 35 years
14. Which one of the following is a traditional industry?
 - A. Basketry
 - B. Paper industry
 - C. Textile industry
 - D. Cement industry
15. Miombo woodland in Tanzania is **not** good for beef farming **mainly** because of
 - A. there's high temperature
 - B. lack of water
 - C. tsetse flies
 - D. lack of grass

16. Before the coming of Europeans, the Nyamwezi people were ruled by
 - A. Kabaka
 - B. kings
 - C. council of elders
 - D. chiefs
17. The following are elements of a good citizen **except**.
 - A. nepotism
 - B. loyalty
 - C. law abiding
 - D. patriotism
18. This weather instrument is used to



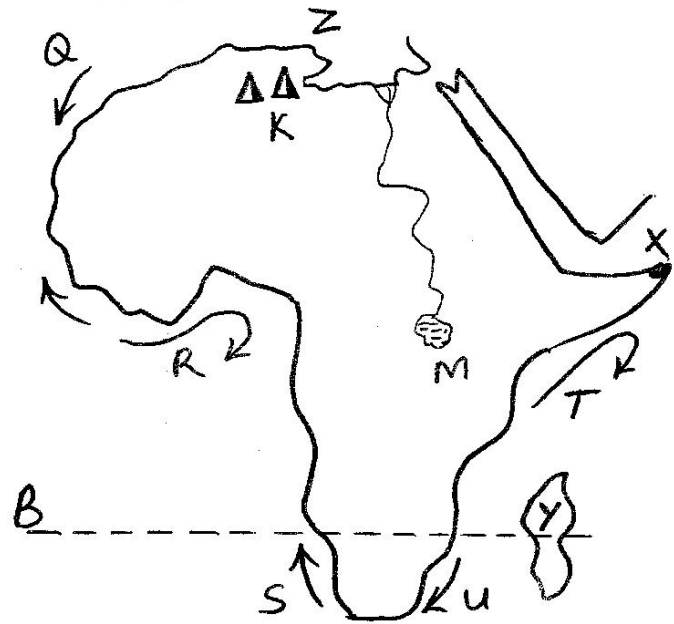
- A. measure wind speed
 - B. show wind direction
 - C. measure atmospheric pressure
 - D. tell whether there's wind
19. In the Buganda kingdom, the treasurer or financial minister was given the title
 - A. Lukiko
 - B. Gomboloia
 - C. Omwanika
 - D. Omulamuzi
 20. Which one of the following is **not** a role pupils of in the school?
 - A. Participating in school activities
 - B. Working hard in school
 - C. Obeying school rules
 - D. Selecting school books
 21. The special houses where flowers are grown under irrigation are called
 - A. water house
 - B. floriculture
 - C. green houses
 - D. horticulture
 22. Pyrethrum is grown for its
 - A. fruits
 - B. flowers
 - C. stem
 - D. leaves
 23. The type of democracy practised in Kenya is
 - A. indirect democracy
 - B. direct democracy
 - C. consensus democracy
 - D. participatory democracy

24. Which one of the following is **not** a national philosophy?
 A. African socialism B. Harambee
 C. Nyayoism D. Constitution
25. Which one of the following is **not** a requirement of a voter in Kenya?
 A. Must be a Kenyan citizen
 B. Must be of sound mind
 C. Must have attained the age of 18 years
 D. Must be registered in more than one constituency
26. This is a _____ breeze.



- A. sea B. lake
 C. land D. night
27. In which country does the Blue Nile rise?
 A. Ethiopia B. Uganda
 C. Arabia D. Tanzania
28. The original homeland of the Bantu was in
 A. Congo
 B. Ethiopia
 C. South Sudan
 D. South Africa
29. Which one of the following is **not** a requirement of a civic seat candidate in Kenya?
 A. Must be a Kenyan citizen
 B. Must be of sound mind
 C. Must have attained the age of 18 years and above
 D. Be a registered voter in more than one constituency
30. Educating the people on what democracy is and their responsibility is known as
 A. ammendment
 B. civic education
 C. referendum
 D. review of constitution
31. A country which has no Coastline is known as
 A. archipelago
 B. isthmus
 C. landlocked
 D. gulf

Use the map below to answer questions 32 - 37.




32. The name given to the mountain marked K is
 A. Tibesti B. Ahaggar
 C. Fouta Djallon D. Darfur
33. The most Easterly point marked X is known as
 A. Cape Guardafui B. Cape Boni
 C. Cape Agulhas D. Cape Verde
34. The island marked Y is
 A. Seychelles B. Mauritius
 C. Zanzibar D. Madagascar
35. Which combination of the ocean currents shown are cold currents?
 A. Q and S B. T and U
 C. Q and U D. R and T
36. The imaginary line marked B passes through the following countries **except**.
 A. South Africa B. Namibia
 C. Botswana D. Mozambique
37. The inland drainage marked M was formed through
 A. downwarping B. faulting and sinking
 C. lava damming D. volcanic eruption
38. In many traditional communities, the **main** function of the council of elders was to
 A. bless the warriors before they went for war
 B. teach medicine among the youth
 C. settle disputes among community members
 D. protect the community against attacks

39. Who among the following African leaders led his community in collaborate with the British?
 A. Koitalel Arap Samoei
 B. Mekatilili wa Menza
 C. Laibon Lenana
 D. Sakawa
40. Who among the following founded German East African Company?
 A. William Mackinon B. Karl Peters
 C. Fredrick Lugard D. General Portal
41. Which one of the following is **not** a hardwood tree?
 A. Camphor B. Cypress
 C. Meru oak D. Elgon teak
42. Which of the following drugs is an illegal drug in Kenya?
 A. Alcohol B. Tobacco
 C. Cocaine D. Caffeine
43. A factory which imports parts and uses them to make machines is part of a
 A. service industry
 B. processing industry
 C. assembly industry
 D. jua kali industry
44. The movement of the earth round the sun on its orbit causes as
 A. day and night B. seasons
 C. eclipse D. darkness
45. The headquarters of Inter-Governmental Authority on Development (IGAD) is in
 A. Arusha B. Nairobi
 C. Addis Ababa D. Djibouti
46. Which of the following weather instrument is used by pilots when landing?
 A. Windvane B. Windsock
 C. Anemometer D. Raingauge
47. The **main** source of government revenue is
 A. tax B. license fee
 C. fines D. loans
48. Who among the following writes minutes during a school management committee meeting?
 A. Deputy speaker
 B. Deputy headteacher
 C. Headteacher
 D. Chairman
49. Which method of fishing uses a straight net attached to two vessels?
 A. Trawling B. Purse seining
 C. Drifting D. Long lining

50. Which of the following islands is the largest?
 A. Madagascar
 B. Zanzibar
 C. Sao Tome and Principe
 D. Mauritius

Use the diagram below to answer questions 51 - 52.



51. The type of rainfall shown on the diagram above is known as
 A. convectional B. relief
 C. cyclonic D. frontal
52. The rainfall shown in the diagram can be received in the following towns **except**.
 A. Nyeri B. Kericho
 C. Kisumu D. Kiambu
53. Which one of the following statements is **not true** about the side marked X?
 A. It is cool and dry
 B. It is the rain shadow
 C. It receives dry winds
 D. It is called the windward side
54. Somaliland was colonised by three of the following powers **except**.
 A. Britain B. France
 C. Italy D. German
55. Who was the leader of the Hehe rebellion?
 A. Mkwawa B. Abushiri
 C. Kinjeketile Ngwale D. Heri
56. The following are the rights of children in a family **except**.
 A. education
 B. equal treatment
 C. health care
 D. inadequate food
57. The establishment of a new forest where there was none before is called
 A. deforestation B. afforestation
 C. reafforestation D. agroforestry

Std. 7 S/Studies & C.R.E. 2010

58. What is altitude?
 A. The way one thinks or perceives something and how one acts
 B. Height above sea level
 C. The higher you go the cooler it gets
 D. Physical feature
59. The continent to the North of Africa is
 A. Asia
 B. America
 C. Australia
 D. Europe
60. The rights of Kenyans are listed in the
 A. Parliament
 B. Church
 C. Bible
 D. constitution

C.R.E

61. Which one of the following books of the Bible tells about the beginning of things?
 A. Exodus
 B. Genesis
 C. Ezekiel
 D. Numbers
62. King Saul was rejected by God because _____.
 A. he did not follow God's instruction
 B. he married many wives
 C. he failed to unite Israel
 D. he wanted to kill David
63. Who among the following was **not** a son of Noah?
 A. Shem
 B. Ham
 C. Seth
 D. Japheth
64. When Jesus healed the blind, he showed that He had power over _____.
 A. death
 B. sight
 C. nature
 D. wind
65. The book that explains about the work of early Christians is _____.
 A. Mathew
 B. Acts
 C. John
 D. Romans
66. Which one of the following is an example of physical suffering?
 A. Failing exams
 B. Losing parents
 C. Mad man in a market
 D. A person who breaks a leg
67. The **main** reason why Christians should accept suffering is _____.
 A. Jesus was also tempted by satan
 B. we can do nothing about it
 C. suffering is part of life
 D. Christ suffered for our sins

68. Ancestors in traditional African communities are appeased through the following ways **except**.
 A. naming children after them
 B. pouring libations
 C. offering sacrifices
 D. writing their names in our hearts
69. **"I choose you before I gave you life and before you were born. I selected you to be a prophet to the nations."** These words refer to prophet _____.
 A. Isaiah
 B. Jeremiah
 C. Micah
 D. Ezekiel
70. The church has set up special education schools in order to _____.
 A. get money for other projects
 B. help the needy in the society
 C. provide jobs
 D. get money to pay the clergy
71. **"In the name of Jesus..... I order you to get up and walk."** Acts 3:6. These words were said by _____.
 A. Peter to a lame beggar
 B. John to a beggar
 C. Peter to a paralysed man
 D. Paul to a lame man
72. The miracle of calming the storm teaches Christians to have _____.
 A. faith
 B. humility
 C. patience
 D. courage
73. Which one of the following prophets prophesied about the covenant that would be written in peoples hearts?
 A. Isaiah
 B. Joel
 C. Jeremiah
 D. Ezekiel
74. Which one of the following stories in the Bible teaches about concern and sharing?
 A. The story of Paul and Silas
 B. The story of the rich woman of Shunem
 C. Story of Job
 D. Story of Gideon
75. Why did Moses go to Egypt from Midian?
 A. Running away from his parents
 B. Wanted to get a wife
 C. He was sent by God
 D. He had killed an Egyptian

76. How did Moses purify bitter water of Moriah?
 A. He threw a stick into it
 B. He added salt into it
 C. He hit it with a stone
 D. He poured some of it on the ground
77. Which one of the following parables was used by Jesus to teach about love and concern for the needy?
 A. The ten lepers
 B. The lost coin
 C. Tenants in the vineyard
 D. The rich man and Lazarus
78. During the day of Pentecost, the Holy spirit descended on the disciples in the form of ____.
 A. a strong blowing wind
 B. tongues of fire
 C. a dove
 D. lightening
79. The **main** reason why marriage is important in traditional African society is _____.
 A. for the continuity of the family line
 B. provide companionship
 C. improves one's status
 D. to get security
80. Who among the following people was the grandson of Abraham?
 A. Joseph B. Reuben
 C. Judah D. Esau
81. Who among the following people was converted to Christianity on his way to persecute Christians?
 A. Ahab
 B. Nehemiah
 C. Saul
 D. Judas
82. Which one of the following statements from the Apostles' creed shows that Jesus is Holy?
 A. He was conceived by the power of the Holy spirit
 B. He descended into heaven
 C. He suffered under Pontius Pilate
 D. He was crucified, died and resurrected
83. Three of the following are gifts of the Holy spirit. Which one is **not**?
 A. Performing miracles
 B. Preaching
 C. Wisdom
 D. Performing magic
84. Human beings were created in God's own image and likeness because _____.
 A. they were with Him
 B. they were to take control of other creatures
 C. God did not like other creatures
 D. they wanted to complete with God
85. Christians take part in community development projects when they _____.
 A. go to church
 B. meet together for meals
 C. donate money for a water project
 D. pray together at their homes
86. Thomas only believed Jesus had risen when _____.
 A. he saw the empty tomb
 B. two angels told him
 C. the disciples told him
 D. Jesus appeared and spoke to him
87. Which one of the following is the **main** role of parents in bringing up their children morally upright?
 A. Advising their children
 B. Being good role models
 C. Giving them love and security
 D. Providing basic need
88. The **main** lesson to be learnt from the story of Ananias and Sapphira is that Christians should _____.
 A. be honest in all that they do
 B. repent when they sin
 C. punish those who tell lies
 D. give out their property for their use
89. We should behave responsibly so as to _____.
 A. earn respect from people
 B. earn high salary
 C. earn interest from people
 D. be seen as a good man
90. You have noticed your best friend has started begging and you want to help him to stop the habit. You should _____.
 A. avoid being seen with him
 B. threaten to end your friendship
 C. report him to his parents
 D. remind him to show self respect