

STANDARD SIX MID TERM 1 EXAMS-2019

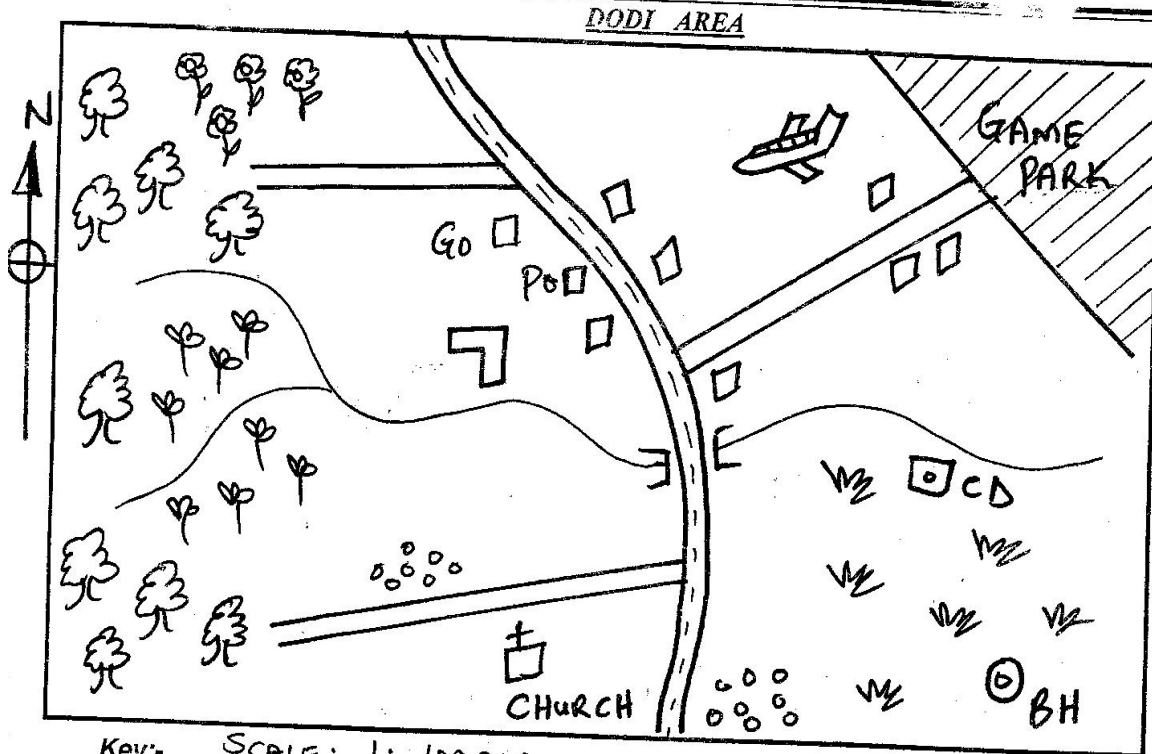
SOCIAL STUDIES AND CRE

- You have been given this question paper and a separate answer sheet. The question paper contains 90 questions.
- Make sure that you have written on the answer sheet

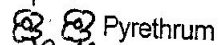
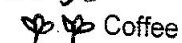
(i) Your name _____

(ii) Name of your school _____


KS 15MINS



Key:- SCALE: 1: 100000



P.O Post Office



Grass

B.H Borehole

C.D Cattle dip

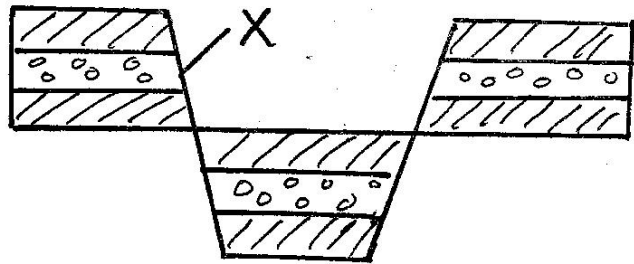
Study the map of Dodi Area and answer questions 1 - 7.

- The people in Dodi area are _____.
 - Islam
 - Traditionalists
 - Christians
 - Many
- The kind of settlement pattern in Dodi area is _____.
 - clustered
 - linear
 - dense
 - high
- River Dodi flows from _____ to _____.
 - East to West
 - North East to East
 - West to East
 - South West to East
- Dodi area is a _____.
 - sub-county
 - location
 - county
 - country
- The airstrip in the area is used mainly to transport _____.
 - animals
 - children
 - businessmen
 - tourists

Std. 6 S/Studies & C.R.E /

6. The climate in South East is likely to be ____.
- A. hot and dry B. hot and wet
C. cool and wet D. cool and dry
7. The following economic activities are carried out in Dodi area except.
- A. pastoralism B. fishing
C. farming D. trading
8. Which one of the following courts is the highest in Kenya?
- A. Chief Magistrate court
B. High court
C. Principal Magistrate court
D. Supreme court
9. The main reason why maize is widely grown in Tanzania is _____.
- A. it is easily grown
B. it is a staple food
C. it is grown to feed animals
D. it is grown for export
10. In which of the following lakes in Kenya does the fishermen face a problem of water hyacinth?
- A. L. Baringo B. L. Nakuru
C. L. Victoria D. L. Turkana
11. The most important reason why drivers should drive carefully on our roads is in order to ____.
- A. reduce lose of fuel
B. be faithful and mindful of others
C. take better care of vehicles and roads
D. reduce numbers of accidents on the roads
12. One of the following is not a reason to why the Cushites migrated from the horn of Africa?
- A. Lack of water
B. Population pressure
C. Spirit of adventure
D. Disease and famine
13. The horticultural exports from Kenya are exported to market in Europe by _____.
- A. air B. road
C. railway D. water

Use the diagram below to answer questions 14 - 16.



14. The wall of the feature marked X are called _____.
- A. faults B. escarpments
C. ranges D. ridges
15. The above feature is _____.
- A. a horst mountain B. an escarpment
C. a volcano D. a Rift valley
16. Three of the following lakes are found within the above feature except.
- A. L. Victoria B. L. Turkana
C. L. Magadi D. L. Elementaita
17. Which one of the following is the main source of revenue to the government?
- A. Loans B. Grants
C. Fines D. Taxes
18. The responsibility of parents can best be described as _____.
- A. helping their children to do the homework
B. getting home early before dark
C. taking their children to the Sunday school
D. providing basic needs for their children
19. The Arabuko - Sokoke forest is likely to be found in the _____.
- A. Coastal region B. Rift valley region
C. Central region D. Western region
20. The finance minister among the Buganda kingdom was given the title _____.
- A. Omwanika B. Omulamuzi
C. Katikiro D. Lukiko
21. The title 'governor' is given to the head of a _____.
- A. sub-county B. location
C. region D. county
22. Which one of the following is a traditional industry?
- A. Iron working B. Tea processing
C. Textile industry D. Meat canning

23. This road sign warns the driver about _____.




- A. danger ahead B. slippery floor
C. not to overtake D. bumps ahead

24. At what minimum age is a Kenyan allowed to vote?

- A. 21 years B. 35 years
C. 18 years D. 25 years

Study the diagram below and answer questions 25 - 27.



25. The type of rainfall shown below is _____.

- A. orographic B. convectional
C. frontal D. cyclonic

26. The **best** economic activity that can be practised at the region marked A is _____.

- A. tourism B. beef farming
C. dairy farming D. mining

27. The side marked Q is called _____.

- A. rain shadow
B. windward side
C. moist side
D. dry side

28. The Agirama resistance was led by _____.

- A. Kinjekitile Ngwale B. Mekatilili
C. Lenana D. Samoei

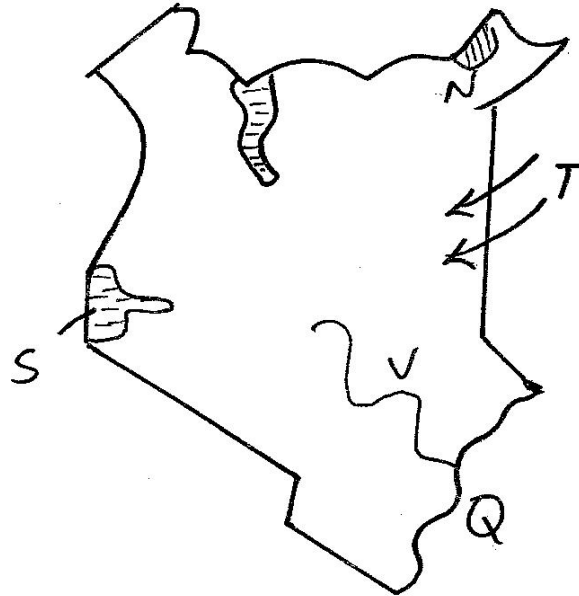
29. Three of the following are elements of a good citizen. Which one is **not**?

- A. Loyalty B. Obedience
C. Patriotism D. Tribalism

30. The second prime minister of Kenya was _____.

- A. Jomo Kenyatta B. James Gichuru
C. Eliud Mathu D. Raila Odinga

Use the map below to answer questions 31 - 35.



31. The lake marked S was formed through a process called _____.

- A. downwarping B. faulting
C. volcanic activity D. erosional

32. The river marked V is called _____.

- A. River Tana B. River Athi
C. River Ewaso Nyiro D. River Turkwel

33. The water mass marked Q is the _____.

- A. Red sea B. Atlantic ocean
C. Indian ocean D. Mediterranean sea

34. The language group that migrated into Kenya through the route marked T was the _____.

- A. Semites B. Bantu
C. Nilotes D. Cushites

35. The National park marked N is most likely to be called _____.

- A. Maasai Mara B. Maika Mari
C. Sibiloi D. Tsavo East

36. The deepest lake in Eastern Africa is _____.

- A. L. Victoria B. L. Albert
C. L. Tanganyika D. L. Turkana

37. Three of the following are basic needs. Which one is **not**?

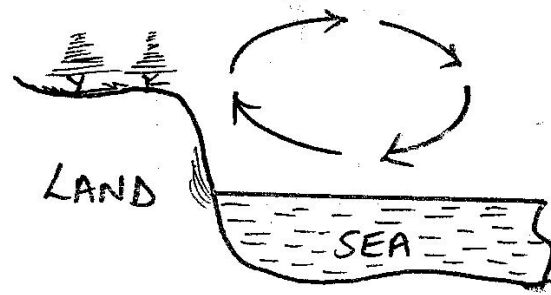
- A. Food B. Education
C. Shelter D. Clothing

38. The **main** tourist attraction in Kenya is _____.

- A. sandy beaches B. historical sites
C. bird viewing D. wildlife

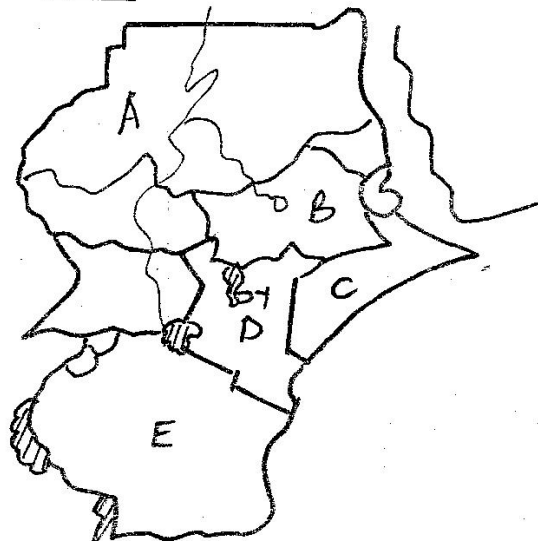
39. The biggest National park in Kenya is _____.
- Tsavo National park
 - Amboseli National park
 - Nairobi National park
 - Maasai Mara
40. Three of the following are uses of forest products. Which is **not**?
- Provide fuel
 - Provide raw material for paper industry
 - Provide timber for building
 - Provide raw material for glass industry
41. Which of the following is the **correct** combination of fresh water lakes?
- L. Kyoga and L. Victoria
 - L. Tanganyika and L. Magadi
 - L. Naivasha and L. Elementaita
 - L. Bogoria and L. Nakuru
42. The **main** duty of the Legislature is _____.
- defend the country
 - to make laws
 - to maintain law and order
 - punish law breakers
43. The following are traditional fish preservation methods. Which one is **not**?
- Sun drying
 - Smoking
 - Freezing
 - Salting
44. Afforestation is _____.
- planting cash crops on steep slopes
 - cutting trees without planting others
 - planting trees where none existed
 - planting trees to replace those that have been cut
45. Arabs came to the Coast of Kenya **mainly** to _____.
- spread Islam
 - spread Christianity
 - construct the railway
 - trade
46. The community in Kenya which was famous for long distance trade before the coming of Europeans was _____.
- Maasai
 - Akamba
 - Agikuyu
 - Agiriana
47. The Wanga ruler was known as the _____.
- Nabongo
 - Ntemi
 - Njuri Ncheke
 - Orkoiyot

Use the diagram below to answer questions 48 - 49.



48. What type of breeze is drawn in the illustration?
- Land breeze
 - Sea breeze
 - Day breeze
 - Night breeze
49. This breeze occurs during _____.
- at night
 - in the evening
 - during day time
 - at mid-night

Use the map below to answer questions 50 - 55.



50. Which country was colonised by three European powers?
- C
 - A
 - D
 - B
51. The major economic activity of the country marked C is _____.
- mining
 - pastoralism
 - farming
 - fishing
52. The capital city of the country marked A is at _____.
- Khartoum
 - Mogadishu
 - Djibouti
 - Asmara

53. The National park marked Y is _____.
- A. Malka Mari B. Marsabit
C. Maasai Mara D. Sibiloi
54. The headquarters of East African Community is located in which country?
- A. D B. E
C. B D. A
55. Which of the following countries is landlocked?
- A. E B. D
C. A D. B
56. During the migration of the Luo into Kenya, they first settled at _____.
- A. Barl el Ghazal B. Pubungu Pakwach
C. Shungwaya D. Massawa
57. Three of the following are cities in Kenya. Which one is not?
- A. Kisumu B. Nakuru
C. Mombasa D. Nairobi
58. Three of the following are semites except.
- A. Amhara B. Tigreans
C. Arabs D. Somali
59. A group of people with the same forefathers is known as _____.
- A. clan B. a family
C. an age-set D. a tribe
60. Three of the following communities are Plain Nilotes. Which one is not?
- A. Maasai B. Samburu
C. Turkana D. Rendille
- C.R.E**
61. Which one of the following statements is true?
- A. Man was given authority over creation
B. Adam and Eve were created first
C. Adam and Eve pleased God
D. Sin brings us closer to God
62. The main lesson we learn from the parable of the talent is to _____.
- A. hide our talents in a safe place
B. develop our talents and abilities
C. avoid using our talents
D. use our talents to help ourselves only
63. As Christians, we should read the Bible in order to _____.
- A. learn more English words
B. gain wisdom
C. improve our reading
D. experience sorrow
64. Paul and Silas cast out evil spirits in the name of _____.
- A. devil B. angel
C. Jesus Christ D. Moses
65. Which one of the following is a bad quality of a leader?
- A. Unselfishness B. Kindness
C. Honest D. Cruelty
66. Who among the following people broke this commandment "*Do not desire another man's property?*"
- A. Cain B. Noah
C. Ahab D. Elijah
67. In Ruth 1:3-18, "*wherever you go I will go wherever you live I will live your people will be my people.*" Who said these words?
- A. Ruth B. Naomi
C. Orpah D. Boaz
68. Annunciation of Jesus Christ was done by ____.
- A. angel Gabriel
B. prophet Isaiah
C. prophet Micah
D. angel Michael
69. The following are traditional African concepts of God except.
- A. protector B. sustainer
C. provider D. bread of life
70. The following are groups of needy people except.
- A. orphans
B. refugee
C. emotionally disturbed
D. wealthy people
71. Which one of the following is not found in the Apostles' creed?
- A. I believe in the Holy Catholic church
B. Lead us not into temptation
C. Was conceived of Holy spirit
D. He ascended into heaven
72. During the Exodus who perished in the Red Sea?
- A. Israelites B. Egyptians
C. Canaanites D. Midianites
73. Who among the following disciples of Jesus Christ was the leader of the early church?
- A. Peter B. Philip
C. Andrew D. John

74. Moses received the ten commandments at mount _____.
- | | |
|-----------|-----------|
| A. Horeb | B. Nebo |
| C. Carmel | D. Moriah |
75. Which of the following is a gift of the Holy spirit?
- | | |
|------------------------|----------|
| A. Speaking in tongues | B. Peace |
| C. Patience | D. Joy |
76. Which of the following miracles was **not** performed by Jesus Christ?
- A. Miraculous catch of fish
 B. Feeding 3000 men
 C. Walking over water
 D. Raising the son of the widow of Zarephath
77. During Easter celebrations Christians remember _____.
- A. salvation of Jesus
 B. ascension of Jesus
 C. resurrection of Jesus
 D. baptism of Jesus
78. One of the following is **not** a reason why Christians pray. Which one?
- A. Praise and thank God
 B. Condemn our enemies
 C. Ask God for forgiveness
 D. Ask for protection against enemies
79. The following are effects of irresponsible sexual behaviour. Which one is **not**?
- A. School drop out
 B. Unwanted pregnancy
 C. Sexually transmitted diseases
 D. Good education
80. Who among the following was known as a man of faith?
- | | |
|------------|----------|
| A. Adam | B. Moses |
| C. Abraham | D. Jacob |
81. Who among the following was the first king of Israel?
- | | |
|-------------|-----------|
| A. David | B. Saul |
| C. Jonathan | D. Samuel |
82. Which one of the following is **not** a benefit of sharing work?
- A. Accepting others
 B. Having a sense of belonging
 C. Live in harmony
 D. Promoting enmity
83. The journey which the children of Israel made from Egypt to the promised land is known as _____.
- | | |
|------------|---------------|
| A. Genesis | B. Passover |
| C. Exodus | D. Pilgrimage |
84. At the age of twelve years, Jesus was taken to the temple for _____.
- A. dedication and purification
 B. baptism
 C. the Passover feast
 D. circumcision
85. Which one of the following practices is common to both African traditional society and Christianity?
- A. Praying
 B. Praying libations
 C. Sacrificing animals
 D. Consulting rain makers
86. According to Apostle Paul, "*He who does not work should* _____."
- | | |
|------------------|--------------|
| A. not work | B. be killed |
| C. not be blamed | D. not eat |
87. A person who dies due to his faith is _____.
- | | |
|-------------|-------------|
| A. Stephen | B. Martyr |
| C. disciple | D. apostles |
88. Your friend Mercy decided to drop out of school and seek employment as a house girl. The **best** advice to give her is to _____.
- A. go ahead with her plans
 B. encourage her friends to join her
 C. inform the teacher about the plans
 D. encourage her to stay and go on with her schooling
89. The **best** thing to do when you see a blind man who wants to cross the road is _____.
- | |
|------------------------|
| A. laugh at him |
| B. assist him to cross |
| C. leave him alone |
| D. tell him to go back |
90. In traditional African society, good relationship was shown through the following **except**.
- A. reconcilliation
 B. fighting
 C. shaking hands
 D. shilling meals