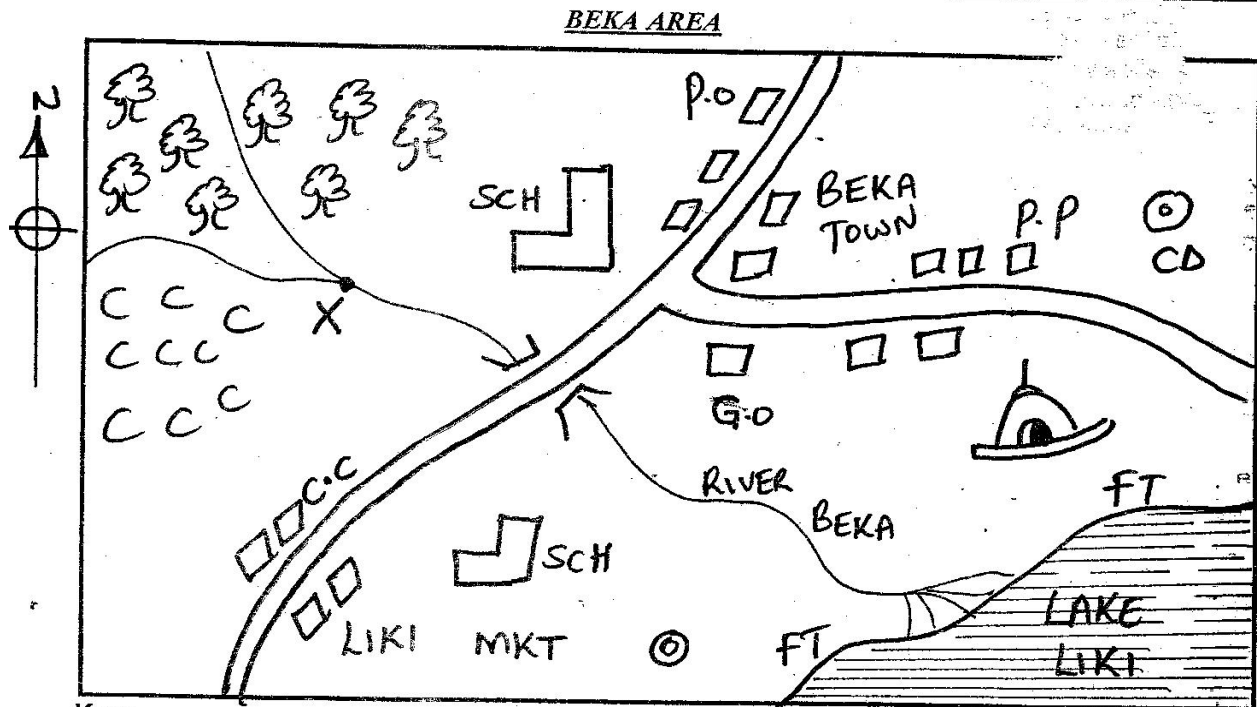


STANDARD FIVE MID TERM 1 EXAMS-2019

SOCIAL STUDIES AND CRE

1. Make sure that you have written on the answer sheet
 (i) Your name (ii) Name of your school

Time: 2hrs 15 mins



Key:



Shrine

PP Police Post

PO Post Office

GO Governor's Office

SCH School

CC Chief's Camp

FT Fish traps

C C C Coffee farm

TTT Tea farm


C.D Cattle dip

Study the map of Beka Area and answer questions 1 - 7.

- The people in Beka area are _____.
 A. Christians
 B. Traditionalists
 C. Islam
 D. Budhists
- What is the direction of the forest from lake Liki?
 A. South East
 B. North
 C. South
 D. North West
- The climate in North West part of Beka area is _____.
 A. hot and wet
 B. hot and dry
 C. cool and dry
 D. cool and wet
- Presence of cattle dips shows _____.
 A. the area is wet
 B. the people practices pastoralism
 C. there is security
 D. there are industries
- The part on River Beka marked X is _____.
 A. a confluence
 B. an estuary
 C. a delta
 D. a tributary
- Beka area is headed by _____.
 A. a chief
 B. a governor
 C. a pastor
 D. a police
- The following economic activities are carried out in Beka area except.
 A. farming
 B. fishing
 C. mining
 D. trading

Std. 5 / S/Studies & C.R.E /

8. Three of the following are traditional ways of preserving fish. Which one is **not**?
 A. Sun drying B. Canning
 C. Salting D. Smoking
9. The **main** backbone of Kenya's economy is
 A. trading B. tourism C. mining D. agriculture
10. Three of the following animals are dairy breeds **except**.
 A. zebu B. friesian C. guernsey D. jersey
11. The weather instrument below indicates _____.



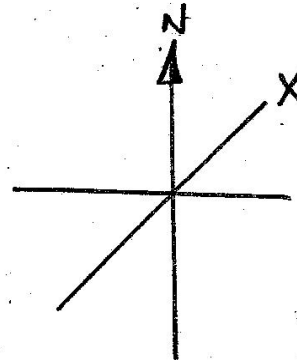
- A. there is no wind at all
 B. there is very strong wind
 C. the wind is a bit gentle
 D. the wind is blowing from East
12. Another name of black cotton soils is _____.
 A. clay soils B. volcanic soil
 C. loamy soils D. alluvial soils
13. Which language group came to Kenya **mainly** because of trade?
 A. The Nilotes B. The Bantus
 C. The Cushites D. The Semites
14. The type of rainfall commonly experienced in Central region of Kenya is _____.
 A. convectional rainfall B. sea breeze
 C. land breeze D. relief rainfall
15. Iraqw, Dahalo, Gabbra have one thing in common. The communities listed above are
 A. Nilotes B. Bantu C. Cushites D. Semites
16. One is allowed to vote in Kenya at an age of _____.
 A. 15 years B. 18 years
 C. 10 years D. 6 years
17. The largest national park in Kenya is _____.
 A. Amboseli B. Maasai Mara
 C. Tsavo D. Nairobi
18. Kenya is headed by a _____.
 A. prime minister B. president
 C. speaker D. deputy president
19. Who among the following people was the first prime minister in Kenya?
 A. Jomo Kenyatta B. Odinga Oginga
 C. Eliud Mathu D. James Gichuru
20. Population census is carried out in Kenya after every _____ years.
 A. 5 B. 10 C. 7 D. 15
21. The road sign below means _____.



- A. drive with caution B. bumps ahead
 C. no parking D. no through way

22. Which weather instrument is used to measure the atmospheric pressure?
 A. Hydrometer B. Hygrometer
 C. Windvane D. Barometer
23. The intermarriage of the Bantu speakers along the Coast and the Arabs gave rise to _____.
 A. Indians B. Swahili people
 C. Wagirama D. Wadawida
24. The Maasai live in houses called _____.
 A. manyattas B. stalls
 C. thingira D. kayas
25. Which one of the following is **not** among the big five?
 A. Elephant B. Giraffee
 C. Lion D. Leopard
26. Three of the following belongs to nine sub-groups of the Mijikenda. Which one is **not**?
 A. Wagirama B. Wadigo
 C. Wachonyi D. Wataveta
27. Jamhuri day is celebrated on _____.
 A. 10th October B. 20th October
 C. 1st June D. 12th December
28. The traditional God of the Agikuyu community is _____.
 A. Ngai B. Enkai C. Mulungu D. Asis
29. The **main** tourist attraction at the Coast is _____.
 A. sandy beaches B. wildlife
 C. Fort Jesus D. pre-historic sites


Use the diagram to answer question 30 - 32.



30. The diagram shown above is called _____.
 A. magnetic North B. compass
 C. direction D. cardinal
31. Point X can be said to be _____.
 A. North East B. North West
 C. South West D. South East
32. The above diagram is important because _____.
 A. it encloses a map
 B. it helps to calculate distance on the map
 C. it helps to give direction of a place to another
 D. it reduce or enlarges area covered by the map
33. The sun rises in the _____.
 A. West B. North East C. North D. East
34. The quickest means of communication is _____.
 A. railway B. telephone
 C. letters D. aeroplane

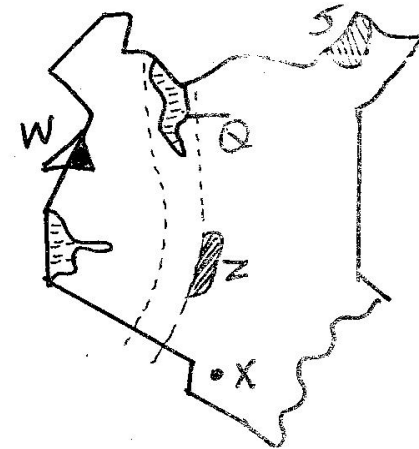
35. Which town in Kenya is **not** found along the Equator?
 A. Nanyuki B. Meru
 C. Nyahururu D. Mombasa
36. One of the following is **not** a good moral value. Which one is it?
 A. Selfishness B. Obedient
 C. Loyalty D. Honesty
37. The **main** problem facing tourism is _____.
 A. poaching B. insecurity
 C. drought D. high park fee
38. The general elections is held in every _____.
 A. 4 years B. 10 years
 C. 9 years D. 5 years
39. _____ was the first Luo group to enter our country.
 A. Luo Abasuba B. Joka Jok
 C. Jok Omollo D. Jok Owiny

Use the diagram below to answer questions 40 - 43.



40. The type of rainfall shown above is _____.
 A. convectional tourists B. orographic rainfall
 C. frontal rainfall D. cyclonic rainfall
41. The side marked **B** is _____.
 A. cliff B. leeward
 C. wetward D. windward
42. The **best** economic activity that can be practised on the side marked **B** is _____.
 A. pastoralism B. dairy farm
 C. agriculture D. tourism
43. Three of the following towns are likely to experience the above rainfall **except**.
 A. Nyeri B. Kisumu
 C. Embu D. Meru
44. Perishable goods can **best** be transported using _____ means of transport.
 A. rail B. air C. road D. water
45. Fort Jesus is found in _____ region.
 A. Nairobi B. Nyanza
 C. Central D. Coast
46. Three of the following are means of communication. Which one is modern?
 A. Smoke B. Cell phone
 C. Salting D. Utululation
47. The highland is heavy populated due to _____.
 A. security B. good weather
 C. cold climate D. fertile and good soils
48. Bricks for building houses are made from _____ soil.
 A. alluvial B. clay
 C. loamy D. sandy

49. Cutting down trees without replacing them is called _____.
 A. overcrowding B. deforestation
 C. afforestation D. monocropping
50. Keeping a large number of animals in small area is a practise called _____.
 A. rotational grazing B. overstocking
 C. overgrazing D. zero grazing
51. Which of these is **not** a reason a migration?
 A. Inadequate road B. Availability of water
 C. Wars D. Drought and famine
52. The poorest soil for agriculture is _____.
 A. sand soils B. loam soils
 C. alluvial soils D. clay soils
53. The safest point or cross the road at _____.
 A. a junction B. a bent
 C. a foot bridge D. a round about
54. Which one of the following is **not** a basic need?
 A. House B. Clothes
 C. Food D. Car
55. Two or more age-groups form _____.
 A. a family B. a clan
 C. warrior group D. age set



Use the map to answer question 56 - 60.

56. The tourist attraction feature marked **J** is _____.
 A. Ruma B. Malka Mari
 C. Sibiloi D. Dondris
57. The mountain range marked **Z** is called _____.
 A. Mau ranges B. Chyulu hills
 C. Aberdare D. Cherangani hills
58. The town marked **X** is _____.
 A. Voi B. Taveta
 C. Vanga D. Namanga
59. The feature marked **Q**'s _____.
 A. R. Kerio B. R. Turkwel
 C. L. Turkana D. R. Ewaso Nyiro
60. The mountain marked **W** is _____.
 A. Mt. Kulal B. Mt. Marsabit
 C. Mt. Kenya D. Mt. Elgon

- C.R.E**
61. Human beings are important because _____.
A. they were created like God
B. were created in God's image
C. were created to care for the environment
D. were created both male and female
 62. Jesus raised Lazarus back to life. This shows that Jesus has power over _____.
A. people
B. storm
C. food
D. life and death
 63. Jesus chased the buyers and sellers from the _____.
A. garden of Gethsemane
B. river Jordan
C. temple
D. sea of Galilee
 64. Irresponsible boy-girl relationship may lead to the following **except**.
A. teenage pregnancy
B. drug abuse
C. passing examinations
D. dropping out of school
 65. The **main** reason why Jesus performed miracles was _____.
A. to show his power so that we can believe in Him
B. to punish sinners
C. to make us feel important
D. to show the devil that he is strong
 66. The following were gifts brought to Jesus by the wisemen **except**.
A. frankincense
B. gold
C. silver
D. myrrh
 67. Which one of the following promote peace in the society?
A. Disobeying the elders
B. Gossiping
C. Working together
D. Living away from each other
 68. Prophet Jeremiah told of new covenant that was to be written in _____.
A. people's diaries
B. people's heart
C. The Bible
D. stone tablets
 69. Ananias and Saphira lied to Apostle _____.
A. Paul
B. John
C. James
D. Peter
 70. The only commandment with a promise is _____.
A. 1st
B. 2nd
C. 8th
D. 5th
 71. My home town was Bethany and I was raised from the dead by Jesus. Who am I?
A. Martha
B. Lazarus
C. Dorcas
D. Zacheaus
 72. The first disciples of Jesus were _____.
A. farmers
B. tax collectors
C. fishermen
D. traders
 73. Who pretended to be a friend of Jesus?
A. John
B. James
C. Simon Peter
D. Judas Iscariot
 74. New life in Christ begins when _____.
A. one dies
B. one is buried
C. one is born
D. one believes in Jesus
 75. When Samuel was young he served in the temple under priest _____.
A. John
B. Eli
C. Jeremiah
D. Elisha
 76. Who among the following was the most loved son of Jacob?
A. Esau
B. Joseph
C. James
D. Judah
 77. Who among the following was chosen to take the place of Judas after he killed himself?
A. Mathias
B. Barabas
C. Thomas
D. Timothy
 78. The Holy spirit descended on the disciples head in form of _____.
A. dove
B. fire
C. smoke
D. earthquake
 79. **"If you do not work you should not eat."** Who said these words?
A. Jesus
B. James
C. Paul
D. Peter
 80. When Jesus went to pray in the garden of Gethsemane. He was with _____.
A. Judas, Peter and John
B. Mathias, Judas and Paul
C. Peter, James and John
D. James, Philip and Peter
 81. Jesus taught humility through _____.
A. washing disciples feet
B. weeping
C. singing hymns
D. singing and praying
 82. Who were the parents of Moses?
A. Zachariah and Elizabeth
B. Abraham and Sarah
C. Elikanah and Naomi
D. Amram and Jochebed
 83. The father-in-law of Jacob was _____.
A. Jethro
B. Laban
C. Moses
D. Abraham
 84. The Lord appeared to Saul on his way to _____.
A. Jerusalem
B. Bethlehem
C. Damascus
D. Jericho
 85. Who among the following people offered a tomb for Jesus to be buried there?
A. Simon Peter
B. Simon of Cyrene
C. Joseph of Arimathea
D. The thief
 86. God called Samuel _____ times.
A. 3
B. 4
C. 2
D. 1
 87. How many loaves of bread did Jesus use to feed a crowd of 4000 people?
A. 7
B. 5
C. 12
D. 2
 88. Which one of the following is a fruit of the Holy spirit?
A. Love
B. Healing
C. Wisdom
D. Preaching
 89. According to the traditional African society the passage from childhood to adulthood was known as _____.
A. circumcision
B. initiation
C. naming
D. baptism
 90. Sin entered to the world through _____.
A. Adam and Abel
B. Adam and Eve
C. Cain and Abel
D. Abraham and Sarah