



GRADE 3 MID TERM 1 EXAMS-2019

MATHS ACTIVITIES

NAME SCHOOL

1. One foot has _____ toes.
2. Four cats have _____ eyes.

Count the following and write how many.



Complete the following sentences

6. 8 tens and 0 ones make _____
7. 7 tens and 5 ones make _____
8. 5 tens and 4 ones make _____

Complete the table below.

	Number	Hundreds	Tens	Ones
9.	16	_____	1	_____
10.	209	2	_____	_____
11.	743	_____	_____	3
12.	850	_____	5	_____

Write the missing numbers in the number patterns below

13. 29, _____, 27, _____, 25, 24, 23.
14. 60, _____, 62, 63, _____, 65, 66.
15. 17, _____, _____, 11, 9, 7, 5, 3.

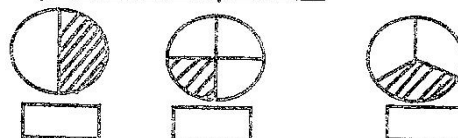
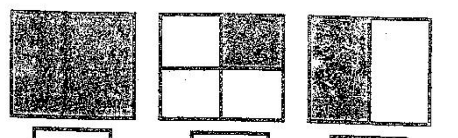
Add

16. $9 + 3 + 2 =$ _____
17. $7 + 5 + 4 =$ _____
18. $18 + 8 =$ _____
19. $36 + 5 =$ _____

Complete the additions below.

21.
$$\begin{array}{r} 21 \\ + 12 \\ \hline \end{array}$$
22.
$$\begin{array}{r} 43 \\ + 20 \\ \hline \end{array}$$
23.
$$\begin{array}{r} 15 \\ + 14 \\ \hline \end{array}$$

Tick the pictures that represent a quarter

24. 
25. 

Subtract

26. $9 - 9 =$ _____
27. $25 - 13 =$ _____
28. $44 - 14 =$ _____
29. $7 - 1 =$ _____
30. $25 - 4 =$ _____

Complete the following

31. $\begin{array}{r} 55 \\ -13 \\ \hline \end{array}$ 32. $\begin{array}{r} 88 \\ -27 \\ \hline \end{array}$
33. $\begin{array}{r} 94 \\ -11 \\ \hline \end{array}$

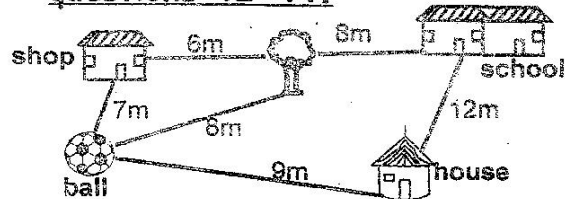
Complete the sentences below

34. $5 \times 5 =$ _____ + _____ + _____ + _____ + _____
35. $9 \times 3 =$ _____ + _____ + _____

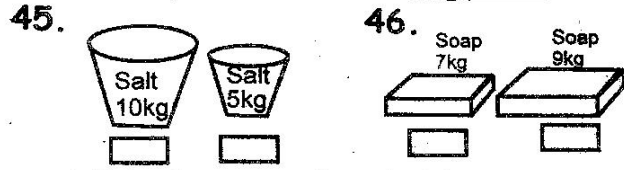
Write and answer the following using multiplication sign

36. $4 + 4 + 4 =$ _____
37. $8 + 8 + 8 =$ _____
38. Mr. Mungai has 16 pencils. He shared them equally among his eight pupils. How many pencils did each pupil get? _____
39. A mother has 3 oranges. She shared them equally among her three children. How many oranges did each child get? _____
40. $49 \div 7 =$ _____ 41. $24 \div 3 =$ _____


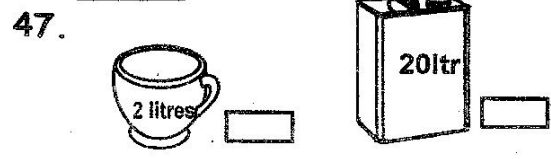
Use the diagram below to answer questions 42-44.



42. The shop is _____ metres away from the school.
43. Omondi ran from the house, picked his ball and went and sat under the tree. How many metres did he run altogether? _____
44. _____ is nearer the house. (The shop, The school)
- Tick the one that is lighter.**



Tick the one that holds more water.



48. The bottle is _____ the box (heavier than, lighter than)
49. The pencil is _____ the ruler. (longer than, same length as, shorter than)
- Use "shorter" or taller than.**

