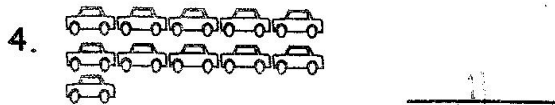



# GRADE TWO MID TERM 1 EXAMS-2019

## MATHEMATIS

NAME ..... SCHOOL .....

Count and write how many



Fill the missing numbers

6. 9, 10, 11, 12, 13, \_\_\_\_\_

7. 19, 20, 21, 22, 23

8. 7, 8, 9, 10, 11

Complete the following patterns



Match the number names with their symbols

- |                |               |       |
|----------------|---------------|-------|
| 12. Eighty     | <del>32</del> | _____ |
| 13. Thirty two | <del>9</del>  | _____ |
| 14. Nine       | <del>80</del> | _____ |
| 15. Fourteen   | <del>14</del> | _____ |

Add

16.  $5 + 0 =$  5
17.  $13 + 6 =$  19
18.  $8 + 1 + 1 =$  10
19.  $2 + 5 =$  7

Arrange from the smallest to the largest.

20. 40 30 50 20 10  
10 20 30 40 50

21. 9 7 8 6 3  
3 6 7 8 9

22. 16 13 11 12 19  
11 12 13 16 19



23. Njeri had 8 oranges. If she gave 5 to Kamau, how many oranges did she remain with? 3


Subtract

24. 
$$\begin{array}{r} 30 \\ -20 \\ \hline 10 \end{array}$$

25. 
$$\begin{array}{r} 40 \\ -10 \\ \hline 30 \end{array}$$

Write "shorter than" or "longer than" in the space provided.

26.  is longer than 

27.  is 50 cent

**Fill in the blanks**



28.  $7 + \boxed{5} = 15$

29.  $\boxed{6} + 4 = 10$

30.  $9 - 4 = \boxed{5}$

31.  $\boxed{6} - 6 = 0$

32. Tick the box that has more than 5 items.



**Put together**

33.  +  = 5


34.  +  = 11

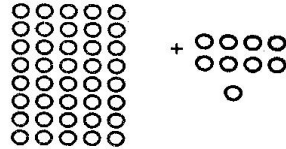
**Tick the heavier**




37. There are 7 days in a week.

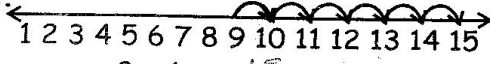
38. One twenty shilling coin, one ten shilling coin and ten shilling coin and five shilling coin make up 50 shillings.

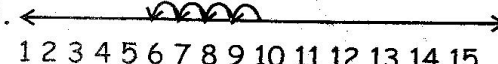
39.  = 14  
1 ten 4 ones.

40.  = 49  
4 tens 9 ones

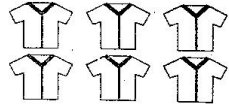

**Use the number line to work out**



41.   
 $3 + 5 = \underline{8}$



42.   
 $9 + 6 = \underline{15}$

43.   
 $8 - 3 = \underline{5}$

**Match the number symbols with the picture it represents**

44.  +  = 8

45.  +  = 13

46.  +  = 9

47. Draw a rectangle



48. 5 tens and 0 ones = 50

49. 0 tens and 1 ones = 1

50. 3 tens and 0 ones = 30