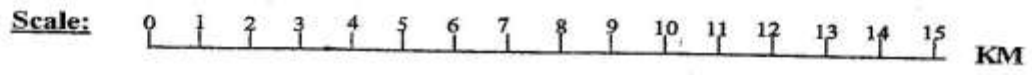
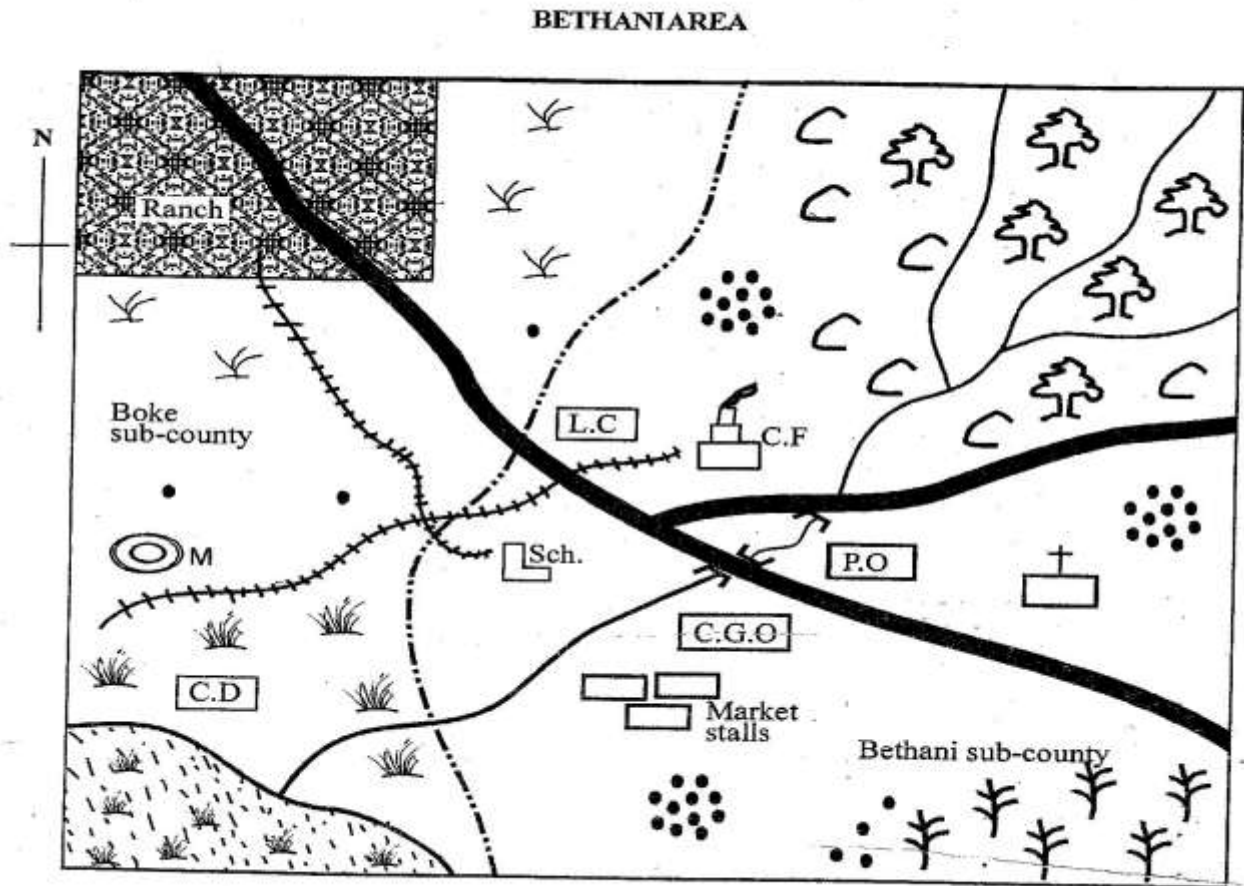


STANDARD 8 END TERM 1 EXAM 2019

SOCIAL & RELIGIOUS STUDIES



Key:

	Forest		Scrubs		Church
	River & bridge		Swamp		Post office
	Tarmac road		Coffee		Cattle dip
	Sub county		Settlements		Mine
	Railway line		County governor's office		Slaughter house
	Grass		School		Cement factory

Study the map of Bethani area above and use it to answer the questions 1-7.

1. Bethani area is likely to be:-
 - A. a sub county
 - B. county
 - C. location
 - D. division

2. The railway line in the map is likely to transport
 - A. beef cattle and minerals
 - B. tea and coffee
 - C. passengers and tourists
 - D. maize and coffee.

3. The mineral mined in Bethani area is likely to be
 - A. stone blocks
 - B. sand
 - C. limestone
 - D. diatomite

4. Bethani area rises from _____ to _____.
 - A. North East to South West
 - B. South West to North East
 - C. South East to North West
 - D. North West to South East

5. Which economic activity is **not** carried out in the area represented by the map?
 - A. Mining
 - B. Lumbering
 - C. Crop farming
 - D. Trading

6. The climate of Boke sub-county can be described as
 - A. hot and dry
 - B. cool and wet
 - C. hot and wet
 - D. cool and dry

7. The settlement pattern in Bethani sub-county is known as
 - A. linear
 - B. sparse
 - C. clustered
 - D. even

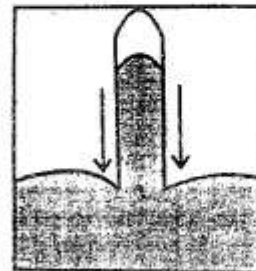
8. Which one of the following elements of a map enables the reader to understand what the symbols used in a map mean?
 - A. Key
 - B. Scale
 - C. Frame
 - D. Title

9. In which stoneage period during human evolution was fire discovered
 - A. early stoneage
 - B. middle stoneage
 - C. old stoneage
 - D. late stoneage

10. The following are effects of the rotation of the earth on its own axis. Which one is **not**?
 - A. Day and night
 - B. The rising and setting of the sun
 - C. Difference in time in different places
 - D. Differences in the lengths of day and night

11. Which one of the following traditional methods of weather observation indicated the coming of heavy rains?
 - A. Low temperatures especially at night
 - B. Trees shedding their leaves
 - C. Croaking of frogs and toads
 - D. Migration of quelea birds

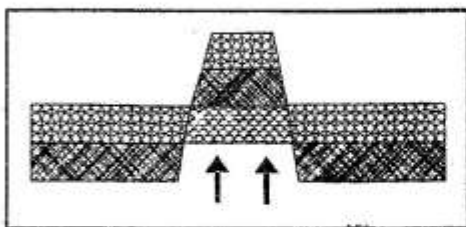
12. The weather instrument drawn below is used for measuring?
 - A. air pressure
 - B. humidity
 - C. temperature
 - D. intensity of sunshine



- A. air pressure
- B. humidity
- C. temperature
- D. intensity of sunshine

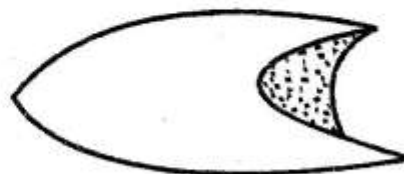
13. During the colonial period, the Nyamwezi were ruled by hereditary chief known as
 A. Rugaruga
 B. Nyungu ya mawe
 C. Bataka
 D. Ntemi
14. Which one of the following types of marriages in Kenya allow polygamy?
 A. Civil marriage
 B. Hindu marriage
 C. Christian marriage
 D. Customary marriage
15. The following are countries of Africa which list consists of former German colonies only?
 A. Angola, Mozambique, Togo
 B. Libya, Eritrea, Somalia
 C. Ghana, Zimbabwe, Gambia
 D. Tanganyika, Cameroon, Togo.
16. Communities in the past **mainly** interacted through
 A. international workshops and seminars
 B. trading activities
 C. games and sports
 D. wars and raids
18. Which one of the following mountains was formed in the above shown way?
 A. Mt. Kenya
 B. Mt. Cameroon
 C. Mt. Ruwenzori
 D. Mt. Meru
19. Which one of the following communities below consists of highland nilotes **only**?
 A. Shilluk, Jopadhola, Luo
 B. Pokot, Keiyo, Marakwet
 C. Nandi, Ilchamus, Njemps
 D. Iteso, Njemps, Maasai
20. The following are reasons for migration. Which one made the Bantus who had settled at Shungwaya to migrate?
 A. Search for pasture and water.
 B. Overpopulation.
 C. Spirit of adventure.
 D. Attacks by hostile communities.
21. Which type of soil is described below
 (i) *has small particles*
 (ii) *has poor drainage*
 (iii) *retains a lot of water*
 (iv) *is commonly found in the plains*
 The soil described above is
 A. red volcanic
 B. black cotton
 C. alluvial soils
 D. sandy soils

Study the diagram below and use it to answer questions 17 - 18.



17. The diagram drawn above shows the formation of _____ mountain
 A. horst
 B. fold
 C. residual
 D. volcanic

22. The feature drawn below is likely to be found in all the following countries except:-



- A. Egypt
 B. Libya
 C. DRC
 D. Algeria

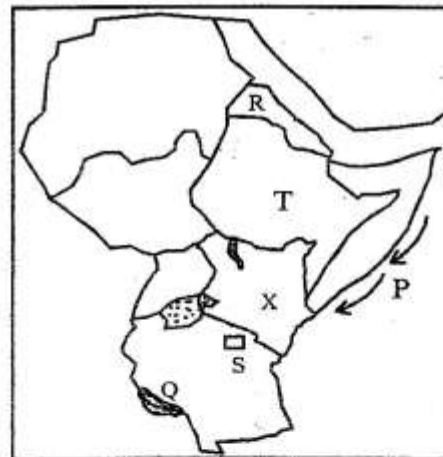
23. Which one of the following countries of Africa is **not** correctly matched with its capital city?
- A. Equitorial Guinea- Malabo
 B. Tanzania - Dar-es-salaam
 C. Togo - Lome
 D. Mali - Bamako
24. All the following countries are crossed by the equator **except**:-
- A. Cameroon
 B. Gabon
 C. Congo
 D. Somalia
25. Nationalists in Ghana attained their independence through all the following ways **except**:-
- A. Armed struggle
 B. strikes and boy cotts
 C. peaceful demonstrations
 D. negotiations
26. The supreme council of leaders among the Ameru was known as
- A. Ntuiko
 B. Njuri Ncheke
 C. Njuri Nkomongo
 D. Njuri Impeere
27. Which one of the following minerals is **correctly** matched with the country where it is mined in large scale?
- A. Copper - South Africa
 B. Oil - Zambia
 C. Gold - Nigeria
 D. Soda ash - Kenya
28. The headquarters of EAC are located in
- A. Lusaka
 B. Djibouti
 C. Arusha
 D. Gabrone

29. Which one of the following industries can be classified under primary industries?
- A. Milk creameries
 B. Shoe repair
 C. Cement making
 D. Steel rolling

30. Which one of the following boxes consists of Kenyan's exports **only**?

- | | |
|--|--|
| A. Flowers
crude oil
fertilizers | B. Soda ash
fertilizers
medicines |
| C. Tea & coffee
flowers
soda ash | D. Crude oil
motor vehicle
fertilizers |

Study the map below and use it to answer the questions that follows.




31. The winds marked **P** on the map are known as
- A. North East trade winds
 B. South East trade winds
 C. the westerlies
 D. Somali warm winds
32. Which one of the following statements is **not true** about the lake marked **Q**?
- A. It was formed through faulting
 B. It is a source of fish
 C. It is a source of minerals
 D. It is the deepest lake in Africa

33. The capital city of the country marked **R** is located at:-
 A. Djibouti
 B. Asmara
 C. Addis Ababa
 D. Mitsiwa
34. The pre-historic site marked **S** is called
 A. Olduvai Gorge
 B. Orlogesaille
 C. Ismilia
 D. Magosi
35. The country marked **T** was never colonised because
 A. it was home for the freed slaves
 B. no European power was interested in it
 C. the country was unproductive
 D. they defeated the Italians in the battle of Adowa
36. Which one of the following hominids started domesticating animals?
 A. Zinjathropus Buisei
 B. Homo erectus
 C. Homo sapiens
 D. Australopithecus
37. The following statements are related to the population structure of Kenya. Which one is **not**?
 A. There is high life expectancy
 B. There is high population growth rate
 C. Death rate is low
 D. Most people live in the rural areas
38. Which one of the following types of migration is **likely** to reduce agricultural production?
 A. Rural - urban migration
 B. Rural- rural - migration
 C. Urban - urban migration
 D. Urban -rural migration
39. Which one of the following countries was administered using indirect rule by the colonial master?
 A. Kenya
 B. Northern Nigeria
 C. Zimbabwe
 D. Senegal
40. Which one of the following is an invisible export in Kenya?
 A. Tourism
 B. Soda ash
 C. Tea and coffee
 D. Carbon dioxide

Use the diagram below to answer questions 41-

42.



41. The above diagram shows the occurrence of
 A. relief rainfall
 B. land breeze
 C. convectional rainfall
 D. sea breeze

- Countries*
- * 42. Which one of the following countries in Kenya is not **likely** to experience the above occurrence?
 A. Kisumu
 B. Momabsa
 C. Meru
 D. Homa Bay
43. Which one of the following is a form of child abuse?
 A. Decent shelter
 B. Early marriage
 C. Disciplining children
 D. Forcing them to go school.
44. Below are ways of demonstrating patriotism in Kenya. Which one is **not**?
 A. Supporting our national teams
 B. Hoarding of goods
 C. Taking part in national celebrations
 D. Conserving the environment
45. Below shows importance of peace in the nation **except**:-
 A. investors will leave the country
 B. people are able to live and work without fear
 C. children go to school safely
 D. the country enjoys economic growth
- ← 46. The following are facts about an early visitor in ^{East} Africa
 (i) He was sent to confirm about the source of river Nile
 (ii) He was the first one to see Victoria falls on R. Zambesi
 (iii) He died in Central Africa
 The early visitor is **likely** to be
 A. John Speke
 B. H.M Stanley
 C. Dr. David livingstone
 D. Vasco da Gama
47. Which one of the following is **not** a development taking place in pastoral areas
 A. Cattle breeding
 B. Irrigating pasture land
 C. Building of boarding schools
 D. Establishment of group ranches.
48. Gamal Abdel Nasser of Egypt promoted agriculture in Egypt when he
 A. introduced land reforms
 B. abolished sharia laws
 C. nationalised the suez canal
 D built the Aswan high dam
49. L. Victoria , L. Kyoga, L. Banguela and lake _____ were formed through downwarping.
 A. L. Tana
 B. L. Paradise
 C. L. Chad
 D. L. Turkana
50. The following are characteristics of a certain vegetation zone in Africa.
 (i) *Trees are evergreen*
 (ii) *The tallest trees form a canopy*
 (iii) *Trees are mainly hardwoods*
 (iv) *There is little or no undergrowth*
 The vegetation described above is **likely** to be
 A. tropical rainforest
 B. mediterranean vegetation
 C. savannah woodland vegetation
 D. the high veld vegetation

51. The main factor that influences vegetation distribution in Africa is
- A. altitude
 - B. soils
 - C. climatic
 - D. relief

52. The road sign below means



- A. no entry
 - B. no overtaking
 - C. drive with caution
 - D. stop
53. Civic marriages in Kenya are conducted by
- A. clan elders
 - B. religious leaders
 - C. magistrates
 - D. chief
54. Who writes minutes during the school committee meetings?
- A. Deputy headteacher
 - B. headteacher
 - C. one of the members
 - D. senior teacher
55. We can resolve disputes through all the following ways **except**:-
- A. revenging
 - B. litigation
 - C. mediation
 - D. conciliation

56. Which one of the following items is **not** a cultural artefacts?

- A. A three legged stool
- B. A drum
- C. An old magazine
- D. A spear

57. Who among the following people belong to the same clan

- A. Gakumo, his wife and his daughter
- B. Gakumo, his mother and father
- C. Gakumo, his mother and grandmother
- D. Gakumo, his daughter and son.

58. December 12th is a very important day in Kenya because it is the day

- A. Kenya adopted multi partism
- B. Kenya became a republic
- C. the new constitution was promulgated
- D. Kenya attained its independence

59. The following conditions can lead to a parliamentary by election **except**:-

- A. death of an MP
- B. when the parliament is dissolved
- C. if an MP misses eight consecutive parliamentary sittings
- D. if there is successful petition

60. The following are Afro- Asiatic speakers **except**:-

- A. Tuaregs
- B. Hausa
- C. Andarawa
- D. Fulani.

SECTION B

CHRISTIAN RELIGIOUS EDUCATION

61. God created human being in special way when he
- A. created them on the sixth day
 - B. gave them what to eat
 - C. put them in the garden of Eden
 - D. created them in his image and likeness
62. God saved Noah from the flood by
- A. locking him up in the ark
 - B. sending him to strange lands
 - C. sending angels to protect him
 - D. making a covenant with him
63. How old was Abraham when God instructed him to be circumcised
- A. 86years
 - B. 99years
 - C. 100years
 - D. 75years
64. Who among the following sons of Jacob suggested they should sell Joseph to the Ishmalite traders?
- A. Levi
 - B. Reuben
 - C. Issachar
 - D. Judah
65. Bezalel, son of _____ was instructed by Moses to construct the covenant box during the Exodus
- A. Asisamach
 - B. Kish
 - C. Oholiab
 - D. Uri
66. Who carried the covenant box during the Exodus?
- A. The levite priests
 - B. Joshua and Caleb
 - C. Bezalel and Oholiab
 - D. Aaron and Moses
67. How was the covenant between God and the Israelites on Mt. Sinai sealed?
- A. by sacrificing a lamb
 - B. by sprinkling blood
 - C. by drinking of wine
 - D. by washing their clothes
68. A common miracle performed by Jesus, prophet Elisha and prophet Elijah was
- A. raising the dead
 - B. making an axe head to float
 - C. giving sight to the blind
 - D. feeding of multitudes
69. According to the prophet Jeremiah the new covenant was to be
- A. taught by the preachers in the synagogues
 - B. written in scrolls
 - C. written in people's hearts
 - D. initiated by man
70. Jesse the father of king David, lived in
- A. Jerusalem
 - B. Samaria
 - C. Nazareth
 - D. Bethlehem
71. Which one of the following reasons best explains why angel Gabriel announced that Mary's son was to be holy? He was to
- A. be great
 - B. rule forever
 - C. be conceived by the holy spirit
 - D. be born in Bethlehem
72. King Herod wanted to know the place baby Jesus was born in order to go and
- A. kill him
 - B. worship him
 - C. offer him gifts
 - D. meet the parents
73. From the story of the boy Jesus in the temple Christians learn that they should
- A. be regular worshippers in church
 - B. uphold positive traditions
 - C. listen to the church elders
 - D. preach God's word.
74. During the triumphant entry the Jews recognized Jesus as the
- A. messiah
 - B. son of the most high God
 - C. king
 - D. saviour

75. From the miracle of healing the Centurion's servant Christians learn that Jesus
- has power over evil spirits
 - is God's chosen son
 - is the truth, the way and the life
 - is a universal saviour
76. From the apostles' creed we learn that God is
- a saviour
 - a judge
 - our father
 - our Lord
77. Which of the following happenings took place on the day of Pentecost?
- Jesus ascended into heaven
 - The rocks split apart
 - A lame man was healed
 - People spoke in many languages
78. The main lesson, learnt from the story of Ananias and Sapphira is that Christians should
- give out their property for sale
 - be honest in all that they do
 - punish those who tell lies
 - repent when they sin
79. When Jesus resurrected he first appeared to
- Joanna
 - Mary Magdalene
 - Salome
 - Martha
80. The early believers were able to perform miracles because
- Jesus had shown them
 - they knew the people they healed
 - they were filled with the Holy Spirit
 - they loved the people they healed
81. During the time of the early church, the apostles were assisted to share money among the believers by
- pastors
 - priests
 - bishops
 - deacons
82. The term "omnipotent" was mainly used in traditional African communities and in Christianity. It means that God is
- all knowing
 - everywhere
 - all wise
 - powerful
83. Which one of the following traditional African practices is found in Christianity?
- Pouring libations
 - Tattooing of the baby
 - Marrying many wives
 - Giving of new names
84. Which one of the following was the main value taught to children in African traditional society?
- Birth
 - Obedience
 - Kindness
 - Self control
85. Abortion is not allowed in African traditional heritage because;
- it is a satanic
 - it pleases ancestors
 - life is holy
 - it is not good.
86. Which activity shows an act of kindness?
- Forgiving
 - Visiting the sick
 - Not being proud
 - Living in joy with others
87. Christians support education in the country by
- establishing school
 - visiting the elderly
 - preaching the word of God
 - preaching the moral value
88. Which one of the following products should Christians not use
- Sugar
 - Soda
 - painkiller
 - Khat
89. Diana is a rich woman in the village she can best use her wealth by
- inviting people to her home
 - paying school fees for needy children
 - building a good house for herself
 - taking our her family for lunch
90. Why should Aaron a standard eight boy give up his seat to an old man in a matatu?
- Because the old man can collapse while standing
 - Because children should not sit in a matatu
 - Because the man is tired
 - Because it is a show of respect to the aged.

SECTION B
ISLAMIC RELIGIOUS EDUCATION.

61. The Kalimah is important to Muslims because
- when said at the time of death it can lead one to paradise
 - it is a dua when going to bed
 - it is recited on i'tidal
 - it is said at the end of salat
62. Which Surah was revealed to consult the prophet at the end of salat
- Asr
 - Dhuha
 - Fatiha
 - Nasr
63. According to Islamic greetings etiquette
- those that are many to greet the few
 - the one riding to greet the one walking
 - the old to greet the young
 - greeting is a must and responding is optional
64. The hadith "Al Islam nadhif fatanadhaf fainahu la yadhkulul janatah illa nadhiifa." talks on
- swalah
 - eating
 - cleanliness
 - dressing
65. There are pillars of
- 6
 - 4
 - 7
 - 5
66. What is the main message in sarah Kafirun?
- There is no compromise on matters of religion
 - Muslims should mix freely with pagans and idol worshippers
 - Islam is a religion of peace
 - Muslims should not talk to pagans
67. Surah Al-Takathur
- stresses the belief in one God Allah
 - talks about the horses that run
 - warns about competing on world matters
 - calls for love towards orphans
68. Which of the following is the city of security according to the teachings of quran?
- Taif
 - Medina
 - Makkah
 - Jerusalem
69. What advice would you give friend who does not like finishing homework?
- to copy your work
 - to lie to the teacher
 - to hide all his books
 - hard work pays
70. HIV/AIDS creates all the following to an individual except:
- happiness
 - hopelessness
 - despair
 - rejection
71. In the Quran, which surah is referred to as plaited rope?
- Falaq
 - Al-Nas
 - Allkafirun
 - Al-Achlas
72. The Kaabah is also called the following names except:-
- Beitul Atiq
 - Beitullah
 - Beitul Nabawi
 - Al- Haran
73. The prophet (S.A.W) said "Those who take care of the orphans..."
- will resurrect with him
 - will be together with him in paradise
 - they will drink from Kauthar
 - they will be sinless
74. Muslims defeated the Qureish in the battle of Badr because
- Quraish did not have water
 - they followed the prophets command
 - they were more than Quraish
 - they were better equipped

75. The angel who is wrongly matched is
 A. Mikail- rain
 B. Uakir - questions the dead
 C. Israfeel - blowing trumpet
 D. Ridhwan - incharge of hell
76. Which one of the four correct attributes of prophets?
 A. Truthful, honest, patient, learned
 B. Truthful, honest, patient, sharp
 C. Honest, patient, sharp, strong
 D. Honest, patient, truthful, strong
77. Which one is not true about Friday?
 A. Hawa was crated on Friday
 B. Adam was admitted into Jannah
 C. Adam was admitted out of Jannah
 D. Qiyamah will take place on Friday
78. To believe in the angles of Allah is a pillar of
 A. Islam
 B. Iman
 C. Ihsan
 D. Tawheed
79. The start of Islamic calender is associated with
 A. Hijra
 B. Miraj
 C. Birth of Muhammad
 D. Ramadhan
80. The act of purification using dust or stones in the toilet is called
 A. Istiujai
 B. Istijmar
 C. Istisqai
 D. Istighfar
81. Which one is not among the compulsory acts of ablution?
 A. Rinsing the mouth
 B. wiping part of the hair
 C. intending to take ablution
 D. Washing the face
82. Urine, alcohol and dead bodies are classes of Najasaat referred to as
 A. Nadhaafah
 B. Nawafil
 C. Mutawaswit
 D. Mulahafafah
83. The act of demanding a favour for a service against the acceptance conditions as referred to as
 A. wastefulness
 B. generosity
 C. interest
 D. bribery
84. Who among the following caliph married Eatiurha, the daughter of the prophet (SAW)
 A. Ali
 B. Abubakr
 C. Omar
 D. Othuman
85. How much does Zamzam pay for Zakat if she saved one million shillings in lunar year
 A. 15
 B. 100
 C. 25000
 D. 2500
86. The sunnah acts of worship are referred to as
 A. Fardh
 B. Muakadha
 C. Mughaladha
 D. Nawafil
87. Complete the following verse " Warafaanaa
 A. lakadhikirak
 B. lakaswadrak
 C. dhawaharak
 D. yusra
88. Verify after every difficulty comes ease" is;
 A. Maun
 B. Ishirah
 C. Takathur
 D. Kauthar
89. Surah ____ talks about the Christians and the Jews.
 A. Noor
 B. Nasr
 D. Inshirah
 D. Balad
90. There are ____ Islamic months
 A. 5
 B. 30
 C. 12
 D. 10

