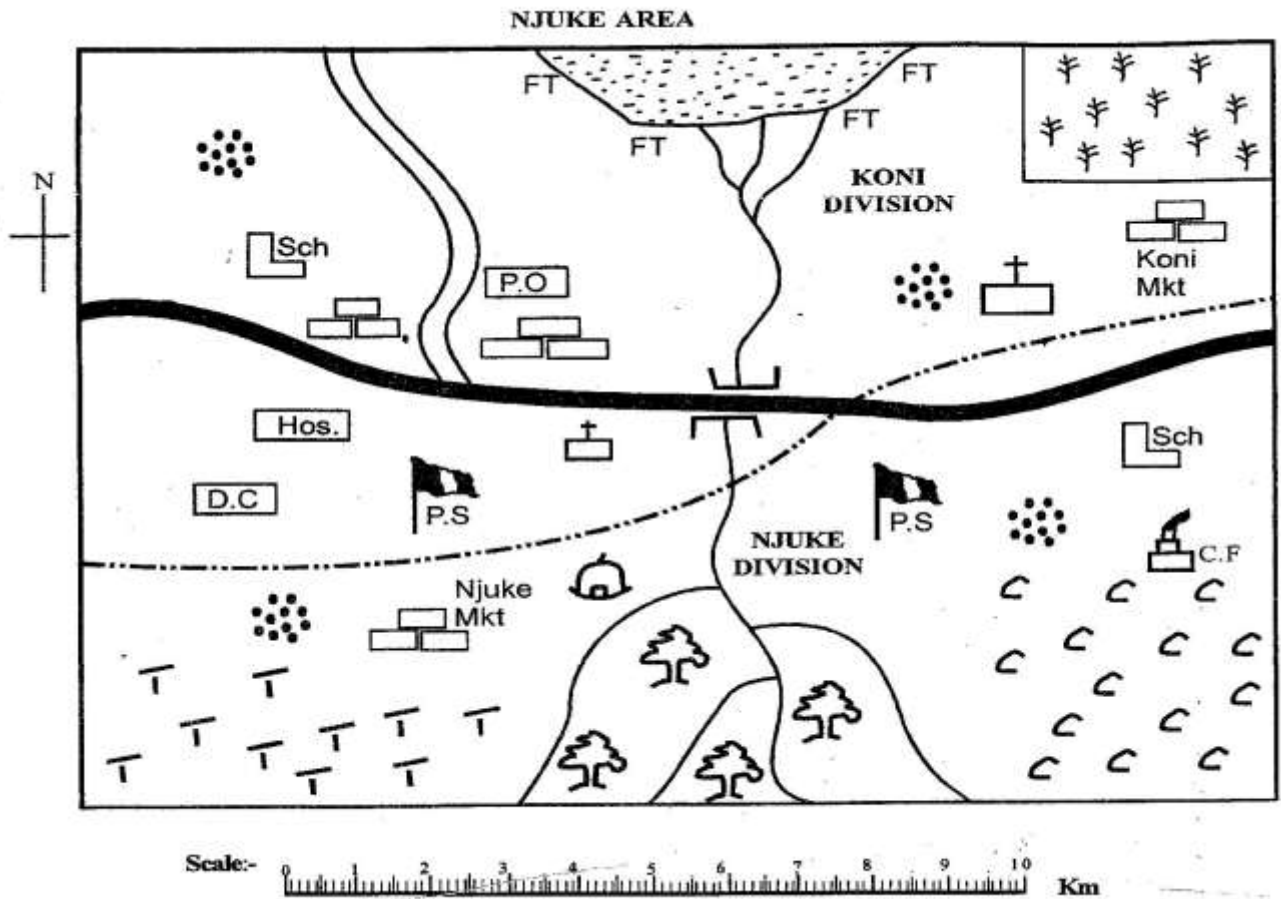


# STANDARD 7 END TERM 1 EXAM 2019

## SOCIAL & RELIGIOUS STUDIES




Key:-

	Forest		Shrines	D.C	District commissioner
	River & bridge		Coffee factory	P.S	Police station
	Coffee	FT	Fish traps		Divisional boundary
	Tea		Permanent buildings		Hospital
	Sugarcane		School	P.O	Post office
	Settlements		Church		Tarmac road
	Murrain road				

**Study the map of Njuke area above and use it to answer questions 1-7.**

1. Njuke area is likely to be a
  - A. division
  - B. district
  - C. county
  - D. location
2. Which one of the following economic activities is **not** carried out in Njuke area?
  - A. Crop farming
  - B. Mining
  - C. Fishing
  - D. Trading
3. People in Njuke division belong to \_\_\_\_\_ religion.
  - A. African traditional
  - B. Islam
  - C. Christianity
  - D. Hinduism
4. The factory found in Njuke area is an example of a \_\_\_\_\_ industry.
  - A. manufacturing
  - B. tertiary
  - C. processing
  - D. secondary
5. The feature formed by the river as it enters the sea is called
  - A. confluence
  - B. delta
  - C. estuary
  - D. tributary
6. Which type of the soils are likely to be found in the Southern Side of Njuke area?
  - A. black cotton soils
  - B. alluvial soils
  - C. sandy soils
  - D. red volcanic soils
7. The river in the map rises from \_\_\_\_\_.
  - A. South
  - B. North
  - C. North East
  - D. South West
8. Which one of the following lakes is **not** found on the Western-branch of the rift valley?
  - A. Lake Kivu
  - B. L. Albert
  - C. L. Tanganyika
  - D. L. Nakuru
9. The **main** factor that influence vegetation distribution in Africa is
  - A. altitude
  - B. climate
  - C. relief
  - D. soils
10. Which one of the following is an effect of rotation of the earth?
  - A. Different seasons
  - B. Difference in the lengths of day and night
  - C. Day and night
  - D. Changes of the position of the midday sun
11. Which one of the following communities consists of plain nilotes **only**?
  - A. Njemps, Maasai, Iteso
  - B. Dinka, Shilluk, Anuak
  - C. Pokot, Nandi, Keiyo
  - D. Borana, Rendile, Somali

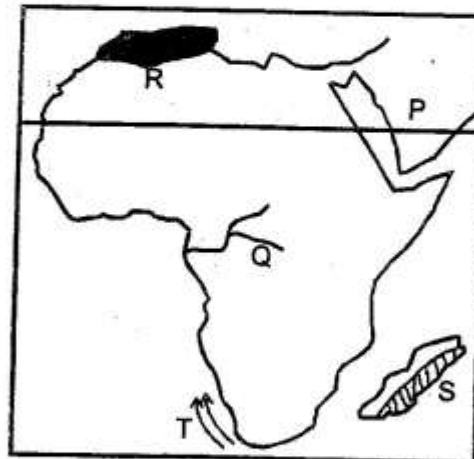
**Study the diagram below and use it to answer questions 12- 14.**



12. Name the part marked M and N respectively?
- Conelet, vent
  - Conelet, dyke
  - Vent, subsidiary cone
  - Crater, main vent
13. Which one of the following mountain was **not** formed in the above shown way?
- Mt. Longonot
  - Mt. Ruwenori
  - Mt. Kenya
  - Mt. Cameroon
14. The above mountain was formed when
- young sedimentary rocks were subjected to compressional forces
  - an existing mountain was worn away by erosion
  - land between faults was forced to rise
  - lava accumulated on the earth's surface
15. Which one of the following types of trees is a hardwood?
- Camphor
  - Eucalyptus
  - Spruce
  - Cypress

16. Moral value were taught to children in the past **mainly** to
- ensure they got marriage partners
  - become responsible adults
  - avoid punishment
  - become successful in future
17. The **main** problem facing tourism sector in Eastern African is
- poaching
  - poor transport network
  - insecurity
  - few tourists hotels

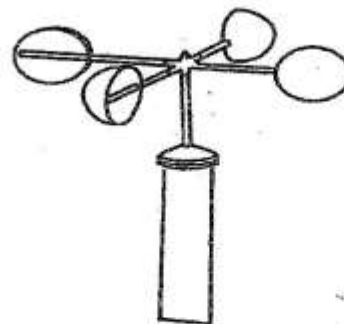
**Study the map below and use it to answer questions that follows.**



18. The ocean current marked T is called?
- Warm Benguela current
  - cold canary currents
  - warm Agulhas currents
  - cold Benguela current
19. The climatic region shaded and marked letter S in Madagascar is known as
- tropical climate
  - equitorial climate
  - mediteranean climate
  - temperate climate region



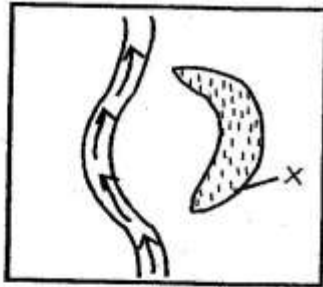
20. The two **main** tributaries of the river marked **Q** are
- Ubangi and Kasai
  - Benue and Niger
  - Black volta and Oti
  - Vaal and shire
21. The mountain marked **R** is **likely** to be
- Drankesberg ranges
  - Akwapim mountains
  - The great Karas
  - Atlas mountains
22. In which month is the sun overhead the tropic marked **P**
- June
  - December
  - March
  - September
23. Which one of the following river of Africa takes the largest volume of water to the sea?
- R. Nile
  - R. Congo
  - R. Niger
  - R. Orange
24. The following are some cultural practices carried out by our ancestors. Which one should we preserve?
- Female circumcision
  - Wife inheritance
  - Use of herbal medicine
  - Offering human sacrifice
25. The method of rearing chicken where they are left loose to feed for themselves is called
- backyard system
  - battery system
  - fold system
  - deep litter system
26. The **main** reason why European powers scrambled for colonies in African was to
- search for raw materials for their industries
  - stop slave trade
  - spread Christianity
  - gain political pride and prestige
27. The **main** function of the national assembly is to;
- approve the national budget
  - make and ammend laws
  - vet all the presidential appointees
  - implement the government policies
28. The weather instrument draw below is used for measuring



- water vapour in the atmosphere
- strength of wind
- direction of wind
- the speed of wind

29. Who among the following traditional leaders resisted the imposition of colonial rule in his territory?
- Kabaka Mutesa I
  - Nabongo Mumia
  - Chief Mkwawa
  - Laibon Lenana
30. Which one of the following industries is grouped under secondary industries?
- fruits and vegetables canning
  - leather tanning
  - glass making
  - cotton ginnery

Use the diagram below to answer questions 31-33.

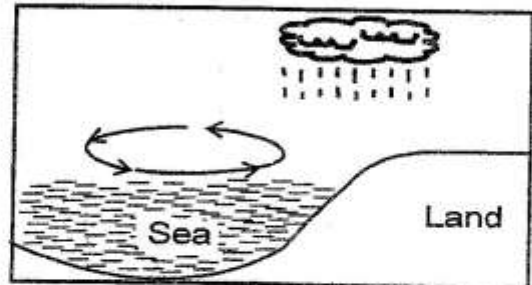


31. The lake marked X is known as
  - A. corrie lake
  - B. crater lake
  - C. lava dammed lake
  - D. oxbow lake
32. The above type of a lake is formed through a process called
  - A. deposition
  - B. volcanicity
  - C. glaciation
  - D. downwarping
33. A good example of the lake formed in the above way is
  - A. L. Kanyaboli
  - B. L. Paradise
  - C. L. Victoria
  - D. L. Catherine
34. People who trace their origin from a common ancestors forms a/an
  - A. ageset
  - B. age group
  - C. clan
  - D. family
35. It is 9.00am at town K  $10^{\circ}W$  what is the time at town L which is  $30^{\circ}E$ ?
  - A. 12.00 noon
  - B. 6.00am
  - C. 6.00pm
  - D. 3.00am

36. Which one of the following plateaus is found in Angola?
  - A. Jos
  - B. Fouta Djallon
  - C. Teiga
  - D. Bie

37. The largest language group in West Africa is the
  - A. West Atlantic
  - B. Voltaic
  - C. Kwa speakers
  - D. Mande speakers

Use the diagram below to answer questions 38 - 39.



38. The above diagram shows the formation of
  - A. sea breeze
  - B. land breeze
  - C. relief rainfall
  - D. cyclonic rainfall
39. At what time does it occur?
  - A. during the day
  - B. at night
  - C. any time
  - D. in the morning
40. The following are description about a certain mineral mined in Kenya.
  - (i) it is used for strengthening steel and aluminium
  - (ii) It is used for making sulphuric acid
  - (iii) Used for making toothpaste
  - (iv) Used to make non stick cooking pans
 The mineral described above is mined at
  - A. Kerio valley
  - B. Kariandusi near Gilgil
  - C. L. Magadi
  - D. Athi river

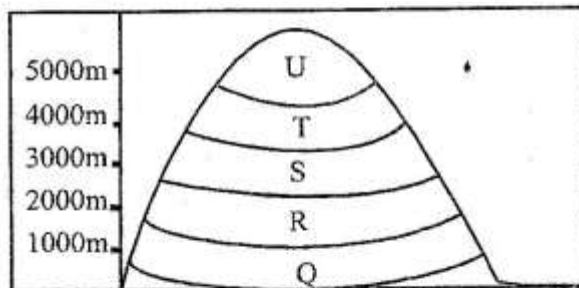
- Who controls debates in the county assembly?
- Governor
  - One of the MCA
  - Speaker
  - Senator
- Which one of the following countries shown below is **not** landlocked?
- DRC
  - Malawi
  - Botswana
  - Zambia
- In which vegetation zone are aromatic shrubs like Rosemary, Thyme and Lavendar found?
- Equatorial
  - Mediterranean
  - Savannah woodland
  - Desert scrubs
- The **main** tourists attraction along the Coast of Kenya and Tanzania is
- sandy beaches
  - wildlife
  - historical sites
  - people's culture
- Which one of the following mountain was formed in a different way from the rest?
- Mt. Aberdares
  - Mt. Ruwenzori
  - Mt. Usambara
  - Mt. Akwapim
46. Which one of the following communities is the original inhabitants of South Africa?
- Bantus
  - Dutch
  - Khoisan
  - Athi
47. The following are positive results of colonization in African **except**:-
- introduction of modern industries
  - creation of African native reserves
  - introduction of western education
  - introduction of hospitals where modern healthcare was offered.
48. Which one of the following is **not** an electronic media made of communication?
- pamphlets
  - radio
  - T.V
  - E-Mail
49. Every child has a right to
- get married and start a family
  - vote for their preferred candidates
  - work and earn a decent salary
  - leisure
50. The party that led Tanganyika to independence was
- C.C.M
  - T.A.A
  - T.A.N.U
  - A.S.P
51. The **main** reason why the Ngoni people migrated from South Africa was
- Search for pasture and water
  - overpopulation
  - attacks by the Galla people
  - they were escaping from wars of the Zulu



52. Which one of the following is **not** a problem facing urban centres in Eastern Africa?
- Traffic congestion
  - Shortage of labour
  - Uncollected garbage heaps
  - Increased in crime

Use the diagram below to answer questions 53 -

54.



53. The above type of vegetation is influenced by
- soils
  - altitude
  - winds
  - animals
54. The **main** economic activity carried out part Q is
- dairy farming
  - mining
  - lumbering
  - pastoralism
55. Which one of the following Eastern Africa countries is **not** a member of IGAD?
- Somalia
  - Djibouti
  - Tanzania
  - Sudan

56. The following are qualities of a good citizen **except:-**
- patriotism
  - tolerance
  - corruption
  - law abiding

57. Which statement below is **not true** about Haile Selassie?
- He modernised Ethiopia
  - He abolished slavery in Ethiopia
  - He was the first AU - chairman in 2002
  - He successfully maintained the independence Ethiopia

58. What type of democracy do Kenyans practise during a general election
- Participatory
  - Indirect
  - Delegative
  - Representative

59. We celebrate Madaraka day every 1st June to remember a general election
- Kenya became a republic
  - Kenya was granted internal self government
  - Our freedom fighters were arrested
  - Kenya became a British colony

60. Which early visitor came to Eastern African to look for the source of the Nile?
- Ludwig Krapf
  - H.M Sanley
  - Vasco Da Gama
  - John Speke

**SECTION B.**  
**CHRISTIAN RELIGIOUS EDUCATION.**

61. Eve was created by God mainly to  
A. become a worker for Adam  
B. provide companionship to the man  
C. name all the animals in the garden of Eden  
D. eat fruits in the garden Eden
62. The sea and plants were created on God's  
A. 1st day of creation  
B. 2nd day of creation  
C. 3rd day of creation  
D. 4th day of creation
63. Which of these kings had his emotional state improve after David played the harp for him?  
A. King Ahab  
B. King Darius  
C. King Saul  
D. King David
64. Naaman was healed of leprosy by prophet  
A. Elisha  
B. Elijah  
C. Daniel  
D. Micah
65. Which of these is classified as a poetic book in the old testament?  
A. Psalms  
B. Joel  
C. Micah  
D. Esther
66. How did Abraham show his obedience to God  
A. by sacrificing his son Isaac  
B. by marrying the wife Sarah  
C. by building an altar to worship god  
D. by accepting to move from his native land to strange land
67. To be contented means that we  
A. have forgiven our enemies  
B. have revenged our enemies  
C. are satisfied with what we have  
D. are rich and prosperous
68. Jesus washed his disciples feet to teach us that  
A. church leader should always wash their followers  
B. Christians should wash their feet before prayer  
C. Christians should be humble to serve one another  
D. when we wash our feet our sins are forgiven
69. The following are the major cause of child labour, which one is not?  
A. introducing free primary education  
B. irresponsible parenting  
C. death of parents  
D. poverty among the families
70. It is important for Christian to forgive one another in order to  
A. become famous in the community  
B. win respect in the community  
C. maintain harmony in the community  
D. become leaders in the community
71. Which miracle showed that Jesus is the light of the world  
A. raising the dead  
B. healing the paralysed man  
C. walking on water  
D. healing the blind
72. Lydia, the purple linen dealer who welcomed Paul was from the town of  
A. Joppa  
B. Lydda  
C. Thyatira  
D. Troas
73. Which occasion in traditional African society marked the end of physical existence  
A. birth  
B. death  
C. marriage  
D. initiation
74. Which of the following statements is not true about the apostles creed  
A. God is the almighty God  
B. Jesus was conceived by the power of the holy spirit  
C. God was conceived by the power of Holy spirit  
D. there's judgement day
75. Which of the following is a gift of the holy spirit?  
A. Goodness  
B. Gentleness  
C. Self control  
D. Prophecy



76. Which one of the following statements from the new testament is a beatitude
- The lord is with you and has greatly blessed you
  - Happy are those who believe without seeing
  - Happy are those who are merciful to others God will be merciful to them
  - How happy are you to receive the Lord's message
77. Which of the following activities was carried out by the Israelites on the night of the Passover in Egypt? They
- Worshipped the golden calf
  - offered their first borns to God
  - ate roasted meat
  - drank wine
78. Who among the following was **not** one of the seven deacons
- Stephen
  - Timothy
  - Philip
  - Prochorus
79. After Herod's death, Joseph returned with his family to Canaan and settled in
- Judea
  - Samaria
  - Bethlehem
  - Nazareth
80. Which of the first twelve disciples of Jesus was in charge of money?
- Peter
  - Judas
  - James
  - Thomas
81. In the Lord's prayer we ask God to
- punish our enemies
  - give us a lot of wealth
  - provide us with our daily needs
  - make us a wise
82. The best activity you can engage yourself in during free time to serve God is
- reading a story book
  - hunting animals
  - telling stories
  - assisting the elderly
83. Which one of the following miracles was not performed by Jesus?
- walking on water
  - calming the storm
  - feeding the 5000 people
  - turning water into blood
84. "I inherited the vine from my ancestors" Naboth replied, "the Lord forbid that I should let you have it." (1King 21:3) from this incident of king ahab and Naboth Christians learn that they should
- work as a team
  - enjoy the fruits of their labour
  - look after their garden
  - be fair in their dealing.
85. Which of the following is wrong use of wealth
- paying salaries to workers
  - giving gifts to voters
  - paying school fees for orphans
  - starting a community based project
86. Three of the following were rites of passage in African traditional society which one was not
- birth
  - marriage
  - death
  - baptism
87. In the parable of the sower, the seed represent
- the word of God
  - the hearts of men
  - the preacher of the world
  - the listener of the word
88. The best way in which a Christian can help street children is by
- giving them money
  - taking them to school
  - giving them food
  - giving them Job
89. You have just found that your classmate stole your shirt. As a Christian what is the best thing you would do
- tell everybody
  - force him to confess the stealing
  - advise him against that habit
  - let him know that to be aware of his habit.
90. Which one of the following is the best advice a Christian should give to a person living with HIV/AIDS
- Avoid sharing food with others
  - Avoid greeting others
  - Avoid sharing towels
  - Do not donate blood

**SECTION II**  
**ISLAMIC RELIGIOUS EDUCATION**

61. During Hijra, the prophet migrated to  
A. Makkah  
B. Uadinah  
C. Taif  
D. Syria
62. The prophet (S.A.W) said "If you believe in Allah as the last day you should not  
A. mix with non Muslims  
B. miss jamma prayers  
C. annoy your neighbours  
D. respect other religions
63. Which one is **not** a category of family relationship?  
A. blood relationship  
B. marital relationship  
C. foster relationship  
D. financial relationship
64. Yathrib is one of the name of the city os  
A. Yemen  
B. Makkah  
C. Taif  
D. Madinah
65. Who convinced Adam(A.S.W) to eat from the forbidden tree?  
A. Angels  
B. Allah  
C. Iblis  
D. Hawa
66. The prophet (S.A.W) hid from \_\_\_ when the Quraish were looking for him  
A. cave Thaur  
B. Cave Hira  
C. Qubaa  
D. Kaabah
67. Before migration , Muslims faced \_\_\_ as Qiblah  
A. Jerusalem  
B. Yathrib  
C. Qubaa  
D. Syria
68. According to the teaching of Islam, neighbourhood extends upto \_\_\_\_\_ houses  
A. ten  
B. forty  
C. twenty five  
D. three
69. Muslims who migrated to Madinah were referred to as  
A. Answar  
B. Hanifs  
C. Mubajirun  
D. Munafiqun
70. "Alhamadullilah ladly ibtalaahu waafuani " is a duafur,  
A. sick people  
B. eating  
C. rain  
D. disabled
71. Qabil an Habil were the descendants of prophets  
A. Ayub  
B. Adam  
C. Yufuf  
D. Swaleh
72. Which of the following displays bad quality of a servant?  
A. Ignorance  
B. Honesty  
C. Patience  
D. Obedience
73. \_\_\_\_\_ has three signs.  
A. Muurmin  
B. Jahil  
C. Munafiq  
D. Mushrik
74. The neighbour who has three rights is  
A. your neighbour who is a relative and a Muslim  
B. your neighbour who is a Muslim  
C. your neighbour who is not a Muslim  
D. every body around
75. Hypocrisy means  
A. mushrikeen  
B. nifaaq  
C. jihad  
D. miswak



76. Which one is not true about the prophets mosque?  
 A. It was built in simple way  
 B. The plot belonged to two orphans boys  
 C. The prophet took part in building the mosque  
 D. The prophet was given the plot free of charge
77. Surah Al-feel is associated with  
 A. a lion  
 B. zebras  
 C. an elephant  
 D. mosques
78. Which of these surahs warns Muslims against three bad habits  
 A. Asr  
 B. Fill  
 C. Kauthar  
 D. Humazah
79. Tayammum is described as  
 A. wet ablution  
 B. heavy ablution  
 C. dry ablution  
 D. najis
80. "Inna maal usri yusrah" is verse from surah  
 A. Inshirah  
 B. Dhuha  
 C. Kauthar  
 D. Fatiha
81. The idea of reward and punishment makes one  
 A. pious  
 B. earn a living  
 C. work hard  
 D. avoid non Muslims
82. The following are the things considered as intoxicants **except**:-  
 A. sniffing glue  
 B. cocaine  
 C. alcohol  
 D. soda
83. The surah that assures the prophet of continued support is  
 A. Dhuha  
 B. Kauthar  
 C. Maun  
 D. Ikhlas
84. Mixing good quality goods and bad quality goods in order to make more profits is called  
 A. hoarding  
 B. israf  
 C. adulation  
 D. haram
85. A person who shows clear signs of death is called  
 A. mayyit  
 B. janazah  
 C. kabri  
 D. muhtadhar
86. Which one of the following animals is halal to be consumed  
 A. dead fish  
 B. a hen killed by snake  
 C. a goat died by itself  
 D. a cow slaughtered by Patrick
87. The angel who was properly paired with the duty is  
 A. Jibril - Wahyi  
 B. Malik - rain  
 C. Israfil - trumpet  
 D. Izrail - souls
88. The prayer performed during the eclipse of the sun called  
 A. swalatul khusuf  
 B. swalatul khidul  
 C. swalatul kusuf  
 D. swalatul khirdhi
89. Sunni Muslims are divided into \_\_\_\_\_ madhaahibs.  
 A. 3  
 B. 4  
 C. 8  
 D. 6
90. The second battle to be fought by Muslims was  
 A. battle of badr  
 B. battle of camel  
 C. battle of Uhud  
 D. battle of khandaq



