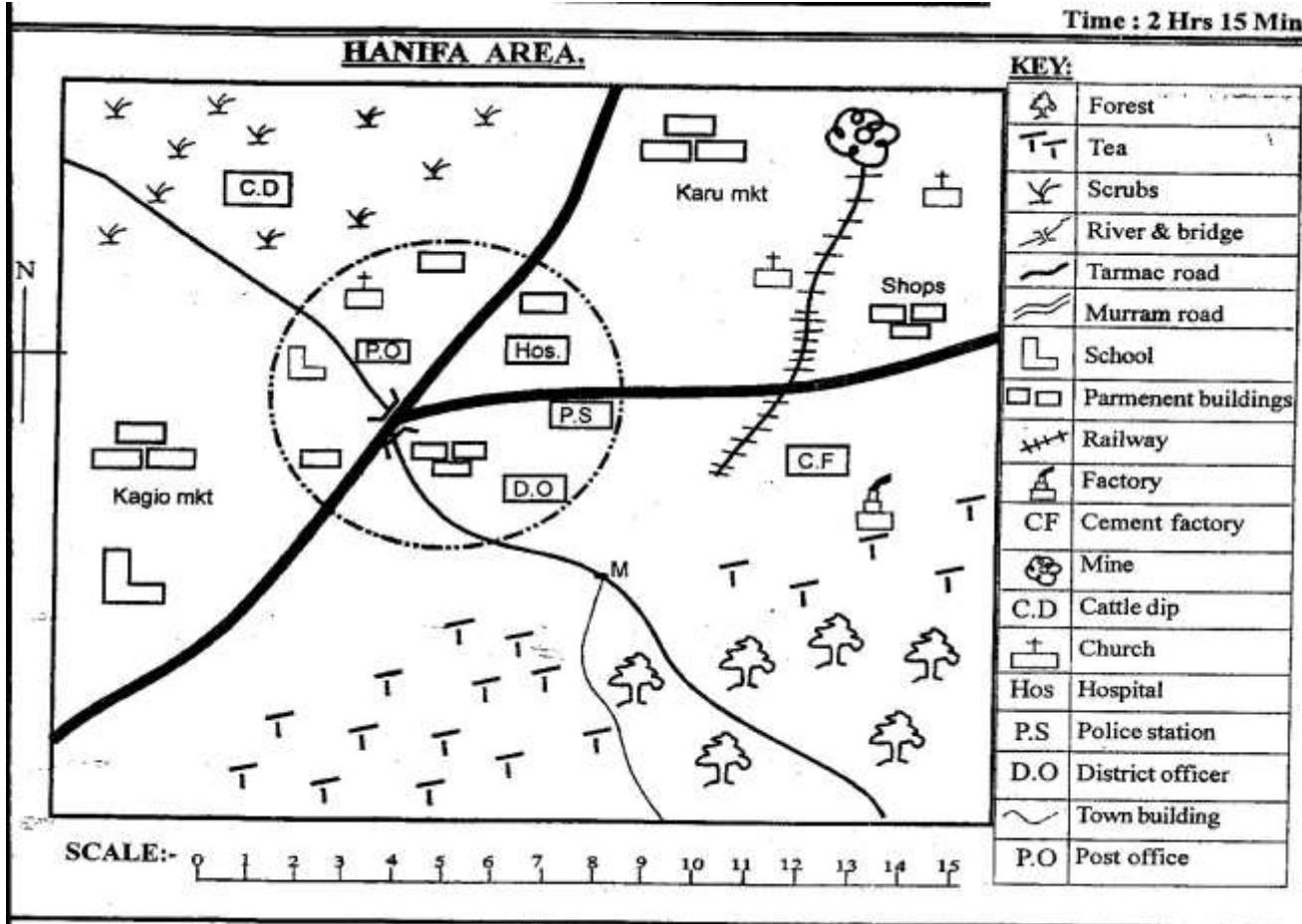


STANDARD 6 END TERM 1 EXAM 2019

SOCIAL & RELIGIOUS STUDIES

Time : 2 Hrs 15 Min



Study the map of Hanifa area and answer questions

-7

Hanifa area is likely to be a _____

- A. district B. division
C. county D. sub-location

The mineral mined at the mine in Hanifa area is likely to be

- A. limestone B. diatomite
C. flourspar D. soda ash

What is the direction of the school at Kagio market from the mine?

- A. South east B. North West
C. South West D. North East

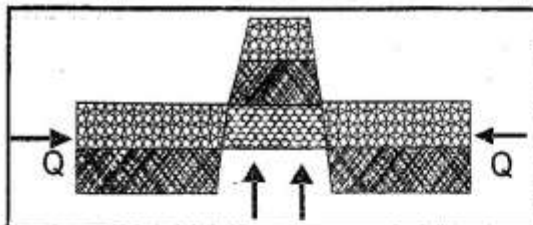
The type of soil found in the Southern side of the Hanifa area can be described as

- A. black cotton soils B. alluvial soils
C. sandy soils D. red volcanic soils

5. People in Hanifa area are likely to be
A. Christians B. Muslims
C. Hindus D. Traditionalist
6. Which one of the following economic activities is **not** carried out in Hanifa area?
A. mining B. trading
C. cattle keeping D. fishing
7. Who keep law and order in Hanifa area
A. Chief B. D.O
C. police D. Pastor
8. The following are river lake nilotes found in Sudan. Which one is **not**?
A. Nuer B. Dinka
C. Luo D. Shilluk
9. The bantus migrated from the Congo forest mainly because of
A. Galla raids B. overpopulation
C. spirit of adventure D. diseases

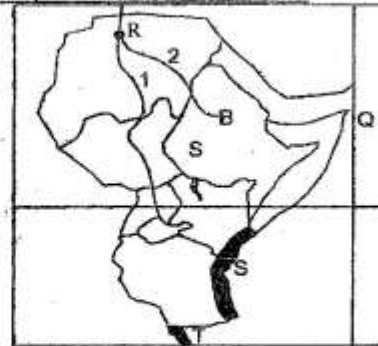
10. Which one of the following countries of Eastern Africa is **correctly** matched with its capital city?
- A. Tanzania - Dar-es-salaam
 B. Uganda - Kampala
 C. Eritrea - Massawa
 D. South Sudan - Khatourn
11. Which one of the following is **not** a major line of Latitude?
- A. prime meridian B. equator
 C. tropic of cancer D. tropic of Capricorn
12. The following are rivers found in Eastern Africa. Which one **does not** drain in the Indian ocean?
- A. R. Juba B. R. Pangani
 C. R. Omo D. R. Ruvuma

Use the diagram below to answer questions 13 - 14



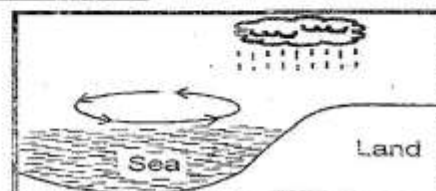
13. The above diagram shows the formation of a _____ mountain.
- A. block B. fold
 C. volcanic D. residual
14. Which one of the following mountains was formed in the above way?
- A. Mt. Meru B. Mt. Kilimanjaro
 C. Mt. Maroto D. Mt. Ruwenzori
15. Which one of the following countries does not share a border with any Eastern Africa country?
- A. Egypt B. Zimbabwe
 C. Libya D. DRC
16. Maasai, Samburu and Njemps are all examples of
- A. Cushites B. river lake nilotes
 C. plain nilotes D. highland nilotes
17. The following are examples of industries. Which one is classified as a secondary industry?
- A. Glass making B. Sugar refining
 C. Watch repair D. Leather tanning
18. Which one of the following trees is **not** found in a natural forests?
- A. Cypress B. Mahogany
 C. Ebony D. Meru oak
19. _____ were the earliest people to migrate into Eastern Africa.
- A. Bantus B. Cushites
 C. Nilotes D. Semites
20. The only Eastern African country that lies wholly to the South of the Equator is
- A. Uganda B. Somalia
 C. Tanzania D. Djibouti

Study the map of Eastern Africa below and use it to answer questions that follows.




21. The latitude marked 0° crosses all the following towns in Kenya **except**:-
- A. Nairobi B. Nanyuki
 C. Solai D. Hagadera
22. The feature formed by the two rivers 1 and 2 where they meet at R is called
- A. tributary B. confluence
 C. delta D. estuary
23. The longitude marked Q is
- A. 52°W B. 52°E
 C. 22°E D. 22°W
24. The vegetation that grows at the shaded part marked S is called
- A. tropical rain forest B. savannah woodland
 C. desert vegetation D. mangrove vegetation
25. The lake marked T is
- A. L. Tanganyika B. L. Malawi
 C. L. Natron D. L. Magadi
26. The type of family made up of father mother and children is called
- A. extended family B. single parent family
 C. nuclear family D. step family
27. In which countries do we have Miombo woodlands located?
- A. Uganda B. Tanzania
 C. Somalia D. Ethiopia
28. Which one of the following lakes is **not** found on the floor of the rift valley?
- A. L. Nakuru B. L. Bogoria
 C. L. George D. L. Natron
29. The supreme councils of elders among the Ameru was known as
- A. Njuri Ncheke B. Mugwe
 C. Kiama D. Agambi
30. The following are all elements of a map **except**:-
- A. scale B. title
 C. frame D. colour
31. Which one of the following is **not** a basic need?
- A. Car B. Clothes
 C. Food D. Shelter

Study the diagram below and use it to answer questions 32 - 33.



32. The above diagram shows the formation of _____
 A. relief rainfall B. sea breeze
 C. land breeze D. frontal rainfall
33. Which one of the following areas does **not** experience the above occurrence?
 A. Nairobi B. Mombasa
 C. Kisumu D. Malindi
34. The following are examples of lowland natural forests. Which one is **not**?
 A. Arabuko Sokoke B. Malava
 C. Jilore D. Bodhei
35. An elected leader who represents a ward in the county assembly is called a
 A. governor B. senator
 C. MP D. county rep.
36. General election take place in Kenya after a period of _____ years
 A. 10 B. 2 C. 5 D. 7
37. Soda ash is mined at
 A. Kariandusi B. L. Magadi
 C. L. Nakuru D. Kimwarer
38. Which one of the following communities does **not** belong to the Mijikenda?
 A. Kauma B. Chonyi
 C. Jibana D. Pokomo
39. The **most** expensive method of rearing chicken is
 A. battery system B. fold system
 C. backyard system D. deep litter system
40. The following are examples of dairy cattle breeds. Which one is **not**?
 A. Hereford B. Jersey
 C. Aryshire D. Guernsey
41. Which one of the following communities collaborated with the British during the establishment of colonial rule?
 A. Abakukusu B. Nandi
 C. Agiriama D. Abawanga
42. The **main** economic activity in the lake basin region of Kenya is
 A. fishing B. pastoralism
 C. mining D. farming
43. The **main** reason why North Eastern counties are sparsely populated is because the are
 A. is far from Nairobi
 B. receives unreliable rainfall
 C. has poor soils
 D. has poor roads
44. The weather instrument drawn below shows a weather instrument. It is used to measure



- A. rainfall B. speed of wind
 C. air pressure D. direction of wind
45. What is the **main** tourists attraction in Kenya
 A. sandy beaches B. wildlife
 C. historical sites D. warm climate

46. The fishing method drawn in the diagram below is known as



- A. purse seining B. trawling
 C. net drifting D. long lining
47. The following are forms of child abuse. Which one is **not**?
 A. beating children excessively
 B. marrying them off when young
 C. sending them to the shop
 D. denying them food.
48. Which one of the following plateaus in Kenya is known as a plateau within a plateau?
 A. Yatta B. Nyika
 C. Uasin Gishu D. Loriyu
49. In Kenya, it is the work of _____ to maintain law and order.
 A. chief B. police
 C. KDF D. MPs
50. Miombo woodland and Lambwe valley in Kenya are sparsely populated. This is because
 A. they have poor roads
 B. they receive little rainfall
 C. they are tsetsefly infested
 D. they are far from major cities.
51. When Kenya became a republic in 1964, Jomo Kenyatta became the
 A. governor B. prime minister
 C. president D. vice president
52. The following are all child right **except**:-
 A. right to education B. right to vote
 C. right to leisure D. right to health care
53. The **most** developed form of transport in Eastern Africa is
 A. road B. air C. railway D. pipeline
54. Which one of the following is **not** a method of conflict resolution?
 A. Mediation B. Negotiation
 C. Arbitration D. Revenging
55. The type of democracy practised in Kenya during general elections is called
 A. direct democracy
 B. representative democracy
 C. indirect democracy
 D. nominational democracy
56. The body in charge of elections in Kenya is headed by a
 A. the president B. governor
 C. chairman D. M.P
57. Which one of the following lines does **not** run from West to East?
 A. Prime meridian B. Tropic of Capricorn
 C. Tropic of Cancer D. equator
58. The interaction between the Coastal bantus and the Arabs resulted to
 A. spread of Christianity
 B. Waswahili people
 C. African being colonised
 D. introduction of Western education
59. The British Colonial Agent who founded the Imperial British Eastern African company (IBECo) was called
 A. Carl Peters B. William Mackinnon
 C. Fredrick Lugard D. Sir Hayes Saddler
60. One can become a Kenyan citizen by
 A. nomination B. recommendation
 C. registration D. appointment

SECTION B
RELIGIOUS EDUCATION

61. What did Abraham and Eve do when they ate the forbidden fruits
 A. ran away from the garden
 B. repented their sins
 C. hid from God
 D. prayed for forgiveness
62. Which of the following did not take place during the baptism of Jesus?
 A. His clothes became white
 B. Heavens opened
 C. A voice came white heaven
 D. Holy spirit came down
63. The following activities were done by Israelites during the night of Exodus **except**:
 A. ate bitter herbs
 B. ate leavened bread
 C. ate while in a hurry
 D. they burnt remains of meat
64. Prophet Elijah fought with the false prophets of Baal on mount
 A. Carmel
 B. Giliad
 C. Gideon
 D. Hermon
65. What did Jesus promise his disciples when ascending to heaven
 A. Destruction of the temple
 B. big catch of fish
 C. wealth
 D. holy spirit
66. The land that God promised to give Abraham was
 A. Haran
 B. Egypt
 C. Israel
 D. Canaan
67. What was created on day 5?
 A. land, seas, and plants
 B. sea creatures, and birds
 C. sun, moon and stars
 D. animals and man
68. The Ethiopian Eunuch was travelling from ___ to Ethiopia
 A. Nazareth
 B. Jerusalem
 C. Jericho
 D. Israel
69. Who led the Israelites in Crossing river Jordan
 A. Aaron
 B. Joshua
 C. Moses
 D. Jeremiah
70. The Nandi call their God ___
 A. Were
 B. Enkai
 C. Mulungu
 D. Asis
71. When people sin in traditional African society they
 A. offer sacrifices
 B. shake hands
 C. wash their hands
 D. wear new clothes
72. Which one of the following moral values is taught to children in traditional African societies
 A. History
 B. Wealth
 C. Respect
 D. Bravery
73. In traditional African society it is believed that when people die they
 A. go to heaven
 B. will resurrect
 C. are all sinners
 D. live as spirits
74. King Ahab Made God angry when he
 A. killed prophet Elijah
 B. refused to build the temple
 C. took Naboth's vineyard
 D. offered a burnt sacrifice
75. Jesus taught the parable of the sower seated
 A. in the temple
 B. on a hill side
 C. in a boat
 D. at a well
76. The gold that the wiseman gave baby Jesus symbolized
 A. suffering
 B. sickness
 C. death
 D. kingship
77. According to Luke 24: 1- 9, Jesus resurrected on
 A. Saturday
 B. Sunday
 C. Friday
 D. Monday
78. The best way to help a hungry man is by
 A. giving him food
 B. teaching him how to get food
 C. praying for him
 D. telling him encouraging words
79. What do we learn from the story of the prodigal son
 A. forgiveness
 B. love
 C. disobedience
 D. self control
80. ___ is the man who lived longest on earth according to the Bible
 A. Adam
 B. Noah
 C. Abraham
 D. Methuselah
81. Who was healed by Jesus at Jericho
 A. Lazarus
 B. A demon possessed
 C. Bartimaeus
 D. A dead girl
82. In his prophecy, prophet Isaiah used the following names to refer to Jesus. Which one was not one of them
 A. prince of peace
 B. lamb of God
 C. wonderful counsellor
 D. eternal father
83. Which one following beliefs is not found in the apostles creed.
 A. belief in resurrection
 B. belief in God
 C. belief in apostles
 D. belief in eternal life
84. Saul met with the Lord and was converted to Christianity when he was going to
 A. preach the gospel
 B. perform miracles
 C. persecute believers
 D. sing and praise in prison
85. The main duty of the elders in traditional African societies was to
 A. settle conflicts between people
 B. offer sacrifices
 C. guard the community
 D. punish offender
86. When serving other we should do it
 A. complaining
 B. joyful
 C. crying
 D. only one
87. The new testament has ___ books
 A. 39
 B. 27
 C. 66
 D. 72
88. "Wherever you go I will go who is these words
 A. Ruth
 B. Orphar
 C. Naomi
 D. Jesus
89. If you find a class 5 and class 6 boys fighting what will you do?
 A. call the police
 B. beat up the class boy
 C. just leave them alone
 D. stop them from fighting
90. Jael and Jade are friend. One day Jael discovered that Jade had stolen money from a pupils' bag Jael should
 A. ask Jade to share the money
 B. tell Jade to return the money to the owner
 C. report the matter to the teacher
 D. break off her friendship with Jade