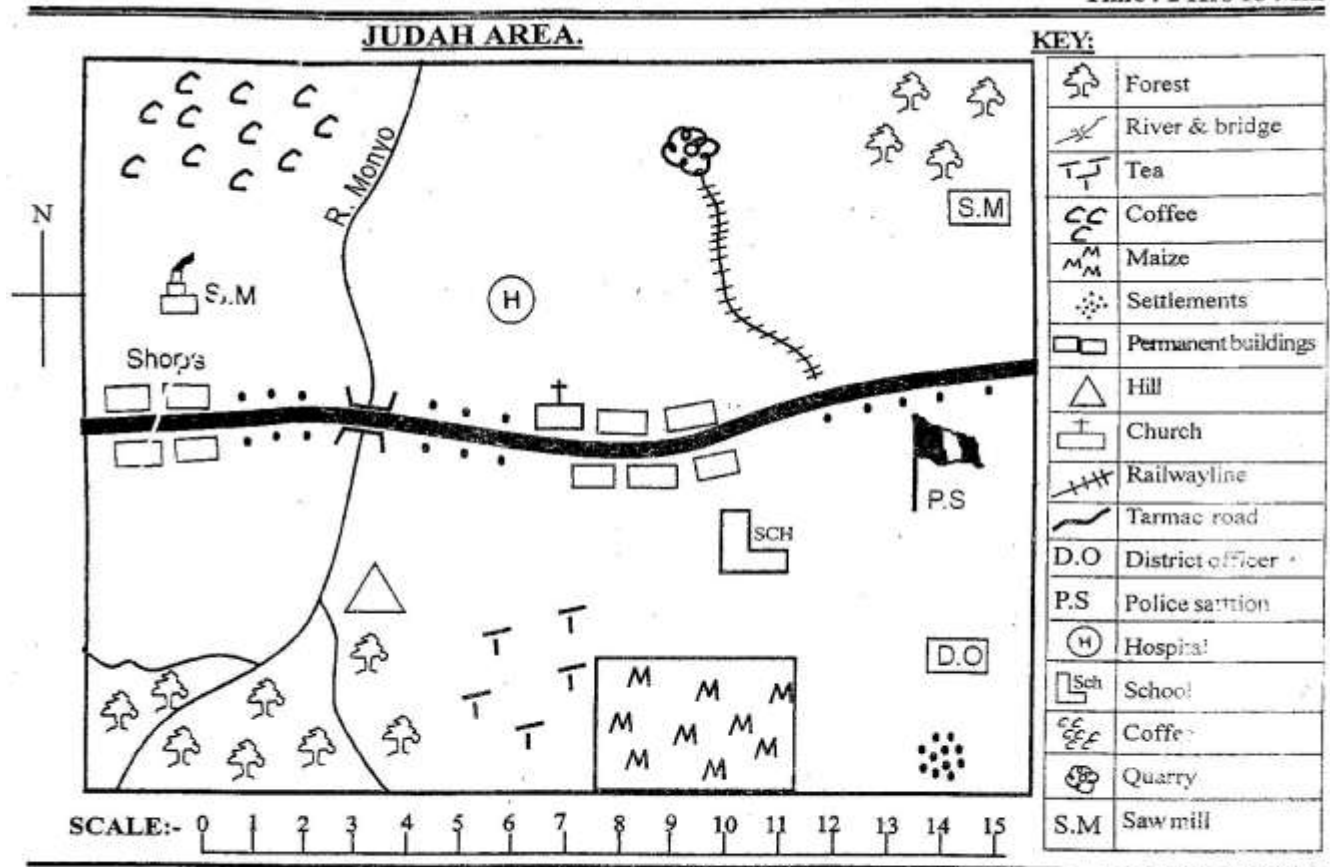


STANDARD 5 END TERM 1 EXAM 2019

SOCIAL & RELIGIOUS STUDIES



Study the map of Judah area and answer questions 1-7

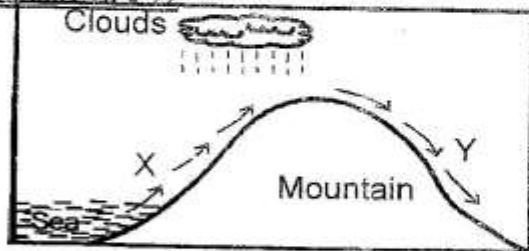
- Judah area is headed by a
 - chief
 - D.O
 - D.C
 - governor
- Which one of the following economic activities is **not** carried out in Judah?
 - lumbering
 - mining
 - fishing
 - trading
- The soils found in Judah area are **likely** to be
 - red volcanic soils
 - black cotton soils
 - alluvial soils
 - sandy soils
- What is the religion of the people living in Judah area?
 - Islamic
 - Hindu
 - Buddhism
 - Christianity
- What is the direction of the saw mill from the hill?
 - North west
 - South East
 - North East
 - South west

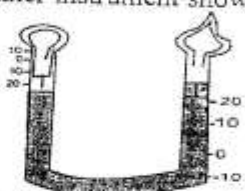
- Which crop below is not grown in Judah area?
 - tea
 - Maize
 - coffee
 - Vegetable
- Who maintains law and order in Judah area?
 - D.O
 - chief
 - police
 - pastor
- The height above the sea level is
 - latitude
 - altitude
 - longitude
 - relief
- The **main** economic activity of the Nilotes was
 - farming
 - fishing
 - pastoralism
 - hunting
- The first prime minister of Kenya was
 - Jomo Kenyatta
 - Raila Odinga
 - Daniel Moi
 - Odinga odinga
- The point between South and South West is called
 - ESW
 - SSW
 - NNW
 - WSW
- The walls of the rift valley are called
 - Escarpment
 - hills
 - ranges
 - plateaus

STP/5/S/R/E/2019

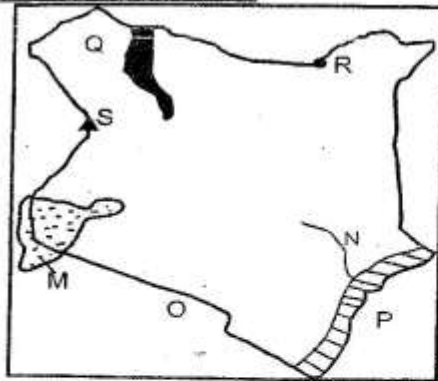
13. Population census is an exercise that happens in Kenya after every
 A. 5 years
 B. 8 years
 C. 12 years
 D. 10 years
14. An elected leader who represents a ward in the county assembly called
 A. M.P
 B. governor
 C. MCA
 D. senator
15. The following are Western bantus found in Kenya which one is **not**?
 A. Abaluhya
 B. Agikuyu
 C. Abakuria
 D. Abagusii
16. Which one of the following lists shows the correct order in which the Luo arrived in Kenya?
 A. Joka Jok, Joka Omilo, Joka Owiny
 B. Joka Owiny, Joka Owiny, Joka Jok
 C. Joka Owiny, Joka Jok, Joka, Omolo
 D. Joka Jok, Joka Omolo, Joka Owiny
17. The following are age sets of the Kelenjin which one is **not**?
 A. Maina
 B. Vasawa
 C. Chumo
 D. Kaplech
18. The following towns in Kenya are crossed by the equator. Which one is **not**?
 A. Maseno
 B. Hagadera
 C. Siaya
 D. Nairobi
19. Which one of the following is **not** modern means of communication?
 A. writing letters
 B. telephone
 C. smoke signals
 D. radio

Study the diagram below and use it to answer questions 20 - 22



20. The side marked X is called
 A. rainy side
 B. wind ward side
 C. rain shadow
 D. leeward side.
21. The most profitable economic activity that is carried out in part Y is
 A. pastoralism
 B. farming
 C. fishing
 D. lumbering
22. The above type of rainfall is called
 A. orographic
 B. convectional
 C. cyclonic
 D. short rains
23. Three things that were made by people in the past are called
 A. pottery
 B. tools
 C. artefacts
 D. costumes
24. A chain of hills or mountains covering several kilometres is called
 A. a cape
 B. plateau
 C. an inselberg
 D. a range
25. A group of people born around the same time form a/an
 A. clan
 B. age group
 C. community
 D. family
26. For one to be registered as voter, he/she must have attained the age of
 A. 15 years
 B. 21 years
 C. 18 years
 D. 35 years
27. Which one of the following communities below belong to the Southern cushites
 A. Abagusii
 B. Somali
 C. Dahalo
 D. Rendile
28. Which one of the following Islands is **not** found in the Indian ocean?
 A. Mombasa
 B. Lamu
 C. Rusinga
 D. Vanga
29. Alluvial soils are also called
 A. young soil
 B. sandy soils
 C. democracy
 D. justice
30. Which county borders Kenya to the North West?
 A. Somalia
 B. Tanzania
 C. Uganda
 D. South Sudan
31. The weather instrument shown below is called

 A. barometer
 B. windvane
 C. thermometer
 D. hygrometer
32. The following are ways of solving disagreement in school **except**:-
 A. apologising
 B. fighting
 C. mediation
 D. negotiation
33. The Borana, Rendile and Orma belong to which language group?
 A. bantu
 B. cushites
 C. nilotes
 D. semites
34. A plateau is also called
 A. rivers
 B. table land
 C. plain
 D. landform
35. Which one of the following is a cause of soil erosion
 A. overstocking
 B. reafforestation
 C. afforestation
 D. mulching
36. The machines that are used for harvesting wheat are called
 A. combined forked jembe
 B. ox plough
 C. combined harvesters
 D. sickle
37. The most destructive form of soil erosion is
 A. rill erosion
 B. sheet erosion
 C. splash erosion
 D. gully erosion
38. All the following rivers drain into L. Victoria **except**:-
 A. Nzoia
 B. Yala
 C. Turkwel
 D. Nyando
39. Which one of the following forests is not an example of a lowland natural forests?
 A. Arabuko Sokoke
 B. Mau
 C. Jilore
 D. Bodhei
40. The following are traditional methods of farming **except**:-
 A. plantation farming
 B. herding
 C. shifting
 D. bush falling

Study the map of Kenya below and use it to answer the questions that follow.

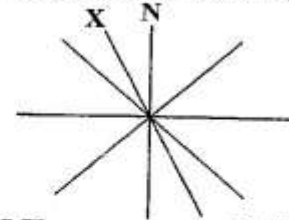


41. The town marked R is known as
A. Moyale B. Vanga
C. Marsabit D. Mandera
42. The river marked N has its source of at
A. Ngong hills B. Mt. Kenya
C. Mt. Elgon D. Aberdare ranges
43. Which one of the following Islands is **not** found in the lake marked M?
A. Rusinga B. Ndere
C. Mageta D. Lamu
44. The following statements are **true** about the mountain marked S except:- that
A. it is at the border of Kenya and Uganda
B. It has altitude of 4321m a.s.l
C. it is snow capped
D. it is source of river Turkwel
45. The neighbouring country marked O is known as
A. Uganda B. Tanzania
C. Bilesha plains D. Lotikipi plains
46. The first president of Kenya was
A. Jomo Kenyatta B. Mwai Kibaki
C. Uhuru Kenyatta D. Daniel Moi
47. Which one of the following is **not** a traditional industry?
A. Weaving and basketry B. Boat making
C. Glass making D. Iron working
48. Which one of the following is **not** a basic need of a family
A. food B. Clothing
C. Education D. Shelter
49. The following are some practices carried out by our ancestors which one should we preserve
A. emale circumcision
B. traditional song and dances
C. wife inheritance
D. witchcraft and sorcery
50. On which day do we celebrate our freedom fighters among other national heroes?
A. 1st June B. 12th Dec
C. 1st may d. 20th Oct
51. Which one of the following is **not** characteristics of traditional education?
A. Boys and girls were taught similar skills
B. It was mainly aimed at character moulding
C. There was no syllabus that was followed
D. Practical skills were taught through apprenticeship

52. Which one of the following animals is **not** a bee cattle breed?

- A. Jersey B. Hereford
C. Charolais D. Aberdeen Angus

53. The compass point shown by letter X is called



- A. NNE B. NNW
C. ENE D. WNW

54. Which one of the following is **not** a product of traditional industries?

- A. Ropes and baskets B. Cement
C. Boats D. Bows and arrows

55. The following are forms of child abuse except:-

- A. child labour
B. denying them food
C. taking them to church
D. excessive caning

56. A country governor is elected by:-

- A. the president
B. voters in award
C. voters in a country
D. voters in a constituency

57. Mwai Kibaki last vice president was

- A. Kalonzo Musyoka B. Moody Awori
C. William Ruto D. raila Odinga

58. When a Kenyan attain 18 years of age, he/she is given

- A. a birth certificate
B. a title deed
C. a certificate of good conduct
D. an identity card

59. Love for one's country is known as

- A. patriotism B. citizenship
C. loyalty D. justice

60. _____ controls debates in the parliament

- A. Chief justice B. Speaker
C. Governor D. President

SECTION B CHRISTIAN RELIGIOUS EDUCATION

61. What was created on day 4?

- A. Land, sea, and plant
B. Sea creatures and birds
C. Sun, moon and stars
D. Animals and man

62. The Nandi call their God

- A. Were B. Enkai
C. Mulungu D. Asis

63. Who among the kings of Israel converted Naboth's vineyard

- A. David B. Ahab
C. Solomon D. Saul

64. When Christians recite the Apostle's creed they express their _____ in God
 A. faith B. obedience
 C. love D. honesty
65. Simon Peter and Andrew the disciples of Jesus were sons of
 A. John B. Zachariah
 C. Elikanah D. Joash
66. Which miracle shows that Jesus had power to forgive sins?
 A. walking on water
 B. raising of Jairus daughter
 C. healing the paralysed man
 D. miraculous catch of fish
67. According to prophet Jeremiah, the new covenant would be
 A. for the Gentiles only
 B. written on stone tablet
 C. between God and an individual
 D. sealed by the blood of a lamb
68. Which one of the following is **not** expected from a church leader
 A. Being just and fair
 B. Marrying many wives
 C. Gentleness
 D. Being hardworking
69. We can learn about good friendship from
 A. Joseph and his brother
 B. Peter and Jesus
 C. David and Jonathan
 D. Saul and David
70. Where did Jacob have a dream? At
 A. peniel B. Jericho
 C. Mt. Sinai D. Bethel
71. Which name was **not** given to Jesus by prophet Isaiah
 A. wonderful counsellor
 B. prince of peace
 C. eternal father
 D. lamb of God
72. In traditional societies boys and girls
 A. mixed freely before marriage
 B. grew up separately
 C. played and worked together
 D. never had self control
73. Prophet Elijah was taken up to heaven in the presence of
 A. Elisha B. Moses
 C. Samuel D. Ananias
74. Children should **not** engage in immoral practices because
 A. only adults should do them
 B. they break God's command
 C. they will go to hell
 D. they will be punished
75. Christians can best assist children who live in the streets by
 A. giving them jobs
 B. taking them to their homes
 C. taking them to their homes
 D. putting them in children's homes
76. When Saul was on his way to Damascus he became
 A. lame B. blind
 C. dumb D. deaf
77. In the parable of the good Samaritan the man who was beaten was walking from
 A. Israel, Jerusalem
 B. Jericho, Jerusalem
 C. Capernaum, Jerusalem
 D. Jerusalem, Jericho
78. On the day of Pentecost the holy spirit came down in form of
 A. cloud B. dove
 C. fire D. water
79. The fourth commandment is
 A. respect your father and mother
 B. do not bow down to any idols
 C. observe the sabbath day
 D. do not kill
80. Who was healed by Jesus at Jericho
 A. Lazarus B. demon possessed man
 C. Bartimaeus D. a dead girl
81. Abraham was _____ years old when Isaac was born
 A. 99 B. 86
 C. 100 D. 75
82. The mountain on which Noah's ark rested after the great flood is known as
 A. Mt. Moriah B. Mt. Ararat
 C. Mt. Olives D. Mt. Sinai
83. The temple of Jerusalem was built by
 A. king David B. king Ahab
 C. King Solomon D. King Saul
84. The name Jesus means
 A. anointed one B. God with us
 C. son of God D. saviour
85. Prophet Samuel's hometown was in
 A. Shiloh B. Jerusalem
 C. Ramah D. Bethelchem
86. Which one of the following will **not** promote peace with God
 A. obeying God's commands
 B. helping the needy
 C. fighting other people
 D. loving God
87. Which one is **not** a way of sharing
 A. visiting the sick B. feeding the hungry
 C. abusing others D. praying with others
88. When serving others, we should do it
 A. complaining B. joyfully
 C. crying D. only once
89. If you obey your parents, your days will be
 A. shortened B. the same
 C. added D. reduced
90. A person who always speaks the truth is said to be
 A. honest B. obedient
 C. kind D. generous