

# GRADE 2 END TERM 1 EXAM 2019

## MATHEMATICS ACTIVITIES

NAME..... SCHOOL..... DATE.....


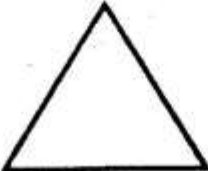


### Write in words.


- 12 \_\_\_\_\_
- 24 \_\_\_\_\_
- 5 \_\_\_\_\_
- 13 \_\_\_\_\_
- 20 \_\_\_\_\_

### Fill in the missing numbers.

- 50 \_\_\_\_\_
- 61 \_\_\_\_\_
- A week has \_\_\_\_\_ days.
- 20 plus 11 = \_\_\_\_\_
- I have \_\_\_\_\_ fingers.

### Name the shapes.

-   
\_\_\_\_\_
-   
\_\_\_\_\_
-   
\_\_\_\_\_
-   
\_\_\_\_\_



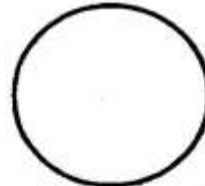
- 31 = \_\_\_\_\_ ten \_\_\_\_\_ ones
- 24 = \_\_\_\_\_ ten \_\_\_\_\_ ones
- 18 = \_\_\_\_\_ ten \_\_\_\_\_ ones
- 10 = \_\_\_\_\_ ten \_\_\_\_\_ ones

20. 
$$\begin{array}{r} 50 \\ +20 \\ \hline \end{array}$$

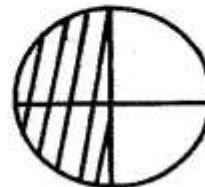
21. 
$$\begin{array}{r} 19 \\ -9 \\ \hline \end{array}$$

22. 
$$\begin{array}{r} 35 \\ -12 \\ \hline \end{array}$$

23. Show a quarter shaded.



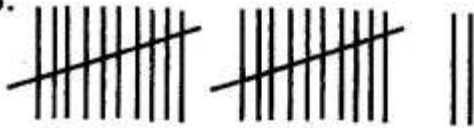
24. What fraction is shaded? \_\_\_\_\_

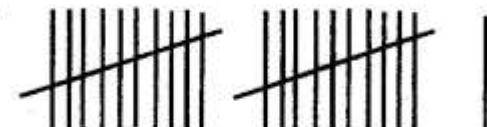


25.  $\square + 8 = 16$   
 26.  $18 + \square = 19$   
 27.  $5 + 6 + 5 = \underline{\hspace{2cm}}$   
 28.  $3 + 4 + 7 = \underline{\hspace{2cm}}$   
 29. Subtract 6 from 20?  $\underline{\hspace{2cm}}$

**Write in numbers.**

30. Seventeen  $\underline{\hspace{2cm}}$   
 31. Twenty one  $\underline{\hspace{2cm}}$   
 32. Sixteen  $\underline{\hspace{2cm}}$   
 33. Thirty two  $\underline{\hspace{2cm}}$   
 34. Sixty two  $\underline{\hspace{2cm}}$   
 35. Eleven  $\underline{\hspace{2cm}}$

36.   
 \_\_\_\_\_ tens \_\_\_\_\_ ones.

37.   
 \_\_\_\_\_ tens \_\_\_\_\_ ones.

38. Which number is small  
 17 or 71?  $\underline{\hspace{2cm}}$   
 39. Monday \_\_\_\_\_ Wednesday  
 \_\_\_\_\_  
 40.  $75 - 15 = \underline{\hspace{2cm}}$

41.  $64 - 18 = \underline{\hspace{2cm}}$   
 42. Sam had 30 oranges. He ate  
 10. How many were left?  $\underline{\hspace{2cm}}$   
 43. What is the time?  $\underline{\hspace{2cm}}$



44. Add by breaking apart.  
 $8 + 15 = \underline{\hspace{2cm}}$   
 $8 + \underline{\hspace{1cm}} + \underline{\hspace{1cm}} = \underline{\hspace{2cm}}$

45. Tens ones  

$$\begin{array}{r} 88 \\ - 4 \\ \hline \end{array}$$

46. 2 cows has \_\_\_\_\_ eyes.  
 47. The second day of the week  
 is  $\underline{\hspace{2cm}}$

48. Subtract  
 $75 - 15 = \underline{\hspace{2cm}}$

49.  $60 - 15 = \underline{\hspace{2cm}}$

50. 94  

$$\begin{array}{r} 94 \\ - 24 \\ \hline \end{array}$$