

GRADE 1 END TERM 1 EXAM 2019


MATHEMATICS ACTIVITIES

NAME..... SCHOOL..... DATE.....

Count and write.

1.  = _____

2.  = _____

3.  = _____

4.  = _____

Draw balls.

5. 7 _____

6. 6 _____

7. 10 _____

Write in words.

8. 4 _____

9. 3 _____

10. 7 _____

Add(+)

11. $4 + 3 =$ _____

12. $6 + 1 =$ _____

13. $4 + 5 =$ _____



14. $2 + 0 =$ _____

15.
$$\begin{array}{r} 3 \\ +4 \\ \hline \end{array}$$

16.
$$\begin{array}{r} 1 \\ +4 \\ \hline 4 \\ \hline \end{array}$$


17. $2 + 1 + 0 =$ _____

Name the shapes.



(triangle, square, rectangle)

21. Which one holds more water



A or B _____

22. Circle a straight line



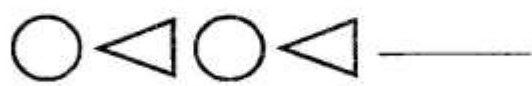
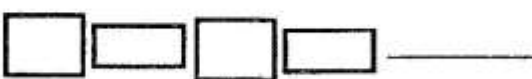
Subtract.

23. $7 - 4 =$ _____
 24. $9 - 2 =$ _____
 25. $2 - 2 =$ _____
 26. $6 - 1 =$ _____
 27. $8 - 6 =$ _____
 28. $\begin{array}{r} 5 \\ - 3 \\ \hline \end{array}$ 29. $\begin{array}{r} 7 \\ - 3 \\ \hline \end{array}$
 30. $\begin{array}{r} 5 \\ - 3 \\ \hline \end{array}$ 31. $\begin{array}{r} 5 \\ - 2 \\ \hline \end{array}$

Fill in the missing numbers

32. 13, 14, _____, 17, 18
 33. 21 _____ 23 _____ 25
 34. 30, 31 _____

Write the missing shape.

35. 
 36. 

Fill in.

37.



40	tens	ones

 38.


29	tens	ones

 39. A dog has _____ eyes.
 40. A cat has _____ eyes.


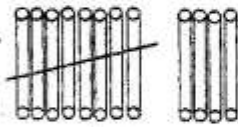
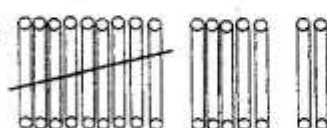
Circle the group with less than

41. 
 42. 

Arrange from the smallest to the biggest

43. 

How many?

44.  = _____
 45.  = _____
 46.  = _____

How much?



47. An orange and milk? _____
 48. A pencil and orange? _____
 49. Milk and a pencil? _____
 50. How many legs do four girls have? _____.