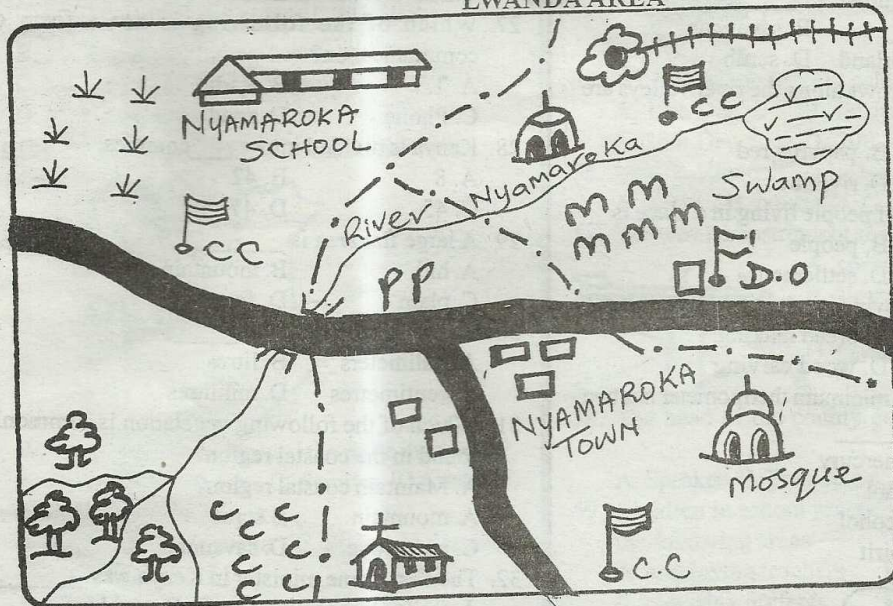


STD 5 - YEAR 2016

SOCIAL STUDIES / C.R.E


LWANDA AREA



	Railway		Mosque
	District Officer		Maize
	Church		Coffee
	Locational boundary		Quarry
			Tarmac road
			Grassland
			Chief's camp
			Forest
			Police post
			Bridge
			Swamp

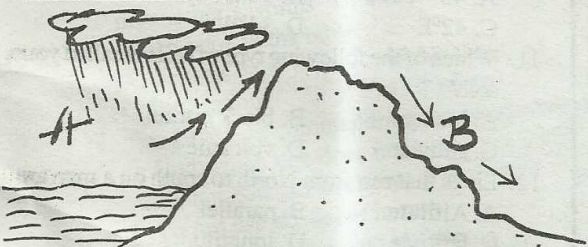
1. Which is the mouth of R. Nyamaroka?
 - A. forest
 - B. bridge
 - C. swamp
 - D. coffee
2. The presence of grassland to the North west shows the area is _____.
 - A. Rift valley
 - B. high land
 - C. wet place
 - D. low land
3. The main religion of people in Lwanda area is
 - A. Hinduism
 - B. paganism
 - C. Christianity
 - D. Islam
4. Lwanda area is administered by _____.
 - A. D.O
 - B. chief
 - C. police
 - D. D.C
5. What is the direction of the swamp from the church?
 - A. North
 - B. south west
 - C. west
 - D. north east
6. The railway line on the map is likely to transport _____.
 - A. maize
 - B. coffee
 - C. pupils
 - D. stones
7. A part from coffee which other crop can be grown to south west of the map _____.
 - A. sugarcane
 - B. millet
 - C. tea
 - D. beans
8. The country that borders Kenya to the north west is _____.
 - A. Tanzania
 - B. Uganda
 - C. Sudan
 - D. Somalia
9. A good map should have the following except _____.
 - A. shape
 - B. key
 - C. frame
 - D. title
10. The most easterly point in Kenya is about _____.
 - A. 45° N
 - B. 34°E
 - C. 42°E
 - D. 34°W
11. Which of the following type of soils is called young soil?
 - A. loamy
 - B. black cotton
 - C. alluvia
 - D. volcanic
12. Lines that run from North to south on a map are _____.
 - A. Altitude
 - B. parallel
 - C. latitude
 - D. longitudes
13. Chickens kept for eggs are called _____.
 - A. broilers
 - B. layers
 - C. chicks
 - D. hatcheries

14. Which of the following factors does not affect climate?
A. longitude B. altitude
C. latitude D. wind
15. Grassland vegetation which is made up of grass with few trees is known as _____
A. Bush land B. savannah
C. health and moorland D. scrub
16. Vegetations that grows along the river valleys are called _____
A. natural B. papyrus red
C. grass D. riverine
17. The total number of people living in a place is ____
A. migration B. people
C. population D. settlement
18. Which of the following is a traditional industry?
A. basketry B. bread making
C. pottery D. wood carving
19. The maximum and minimum thermometer has two liquids called _____
A. kerosine and mercury
B. water and alcohol
C. mercury and alcohol
D. mercury and spirit
- 20.



- The diagram drawn above shows
A. relief rainfall B. sea breezes
C. land breezes D. convectional rainfall
21. It occurs during the _____
A. year B. day C. night D. month
 22. Which of the following events is found in the school calendar?
A. planting B. drama C. birthday D. harvest
 23. The traditional medicine people use _____ to treat sick people.
A. tablets B. herbs C. pills D. injections

Use the diagram below to answer questions 24 - 25

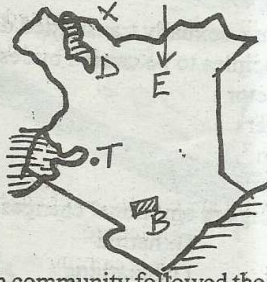


24. The part marked B is called _____
A. windward B. slope
C. mountain D. rainfall

25. The diagram above shows __rainfall
A. block B. cyclonic
C. relief D. convectional
26. Which one is odd one out
A. iteso B. maasai
C. Luo D. Turkana
27. Which of the following is not a form of communication?
A. T.V B. Radio
C. Phone D. road
28. Kenya is divided into ____ counties.
A. 8 B. 42
C. 45 D. 47
29. A large flat area is _____
A. hill B. mountain
C. plain D. forest
30. Rainfall is measured in _____
A. milimeters B. litres
C. centimetres D. millilitres
31. Which of the following vegetation is commonly found in the coastal region?
A. Maintain coastal region?
A. mountain B. scrub
C. mangrove D. savannah
32. The first prime minister in Kenya was _____
A. Raila Odinga B. Daniel Moi
C. Jomo Kenyatta D. Mwai Kibaki
33. Which of the following is not a relief feature?
A. plain B. road
C. valley D. low land
34. The hills in a plateau formed after erosion are known as _____
A. ranges B. mountains
C. inselbergs D. volcano mountains
35. People who were initiated together formed
A. clan B. age set
C. age group D. generation
36. Imaginary lines drawn in a map from East to West are _____
A. longitude B. latitudes
C. altitudes D. guidelines
37. General name given to rivers, lakes, streams and swamps is _____
A. valleys B. oceans
C. drainage system D. drainage
38. What is altitude?
A. imaginary line on map from North to South
B. distance from the equator
C. imaginary line on map from east to west
D. distance from the sea level
39. The current president in Kenya is _____
A. Raila Odinga B. Uhuru Kenyatta
C. Kalonzo Musyoka D. William Ruto

40. The plateau referred to as a plateau within a plateau is
 A. Laikipia B. Uasin gishu
 C. Yatta D. Nyika
41. What is the source of R. Tana and its mouth?
 A. Ngong hills and indian ocean
 B. Mt. Elgon and indian ocean
 C. Mt Kenya and Lorian swamp
 D. Mt Kenya and indian ocean

Use the map below to answer questions

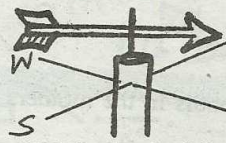


42. Which community followed the route marked E?
 A. Bantu B. Nilotes C. Semites D. Cushites
43. The country marked x is _____
 A. Tanzania B. Ethiopia C. Sudan D. Somalia
44. The town marked T is _____
 A. Homa bay B. Kisumu
 C. Nakuru D. Nairobi
45. Which of the following rivers flows into lake marked D?
 A. Eswaso Nyiro B. Yala
 C. Tukwel D. Nzoia
46. The national park marked is _____
 A. Tsara B. Ruma C. Marsabit D. Serngeti
47. Which of the following is a fresh water lake?
 A. Nakuru B. Bogoria C. Turkana D. Victoria
48. The document that contains rules and regulations governing a country is the _____
 A. Kenyas gazette B. referendum
 C. register of birth D. consitution
49. The cheapest way of transporting oil is by?
 A. Road B. Air C. Railway D. Pipeline
50. The longest river in Kenya is _____
 A. Nile B. Athi C. Nzoia D. Tana
51. The work of the police is to _____
 A. fight criminals
 B. judge law breakers
 C. maintian law and in order
 D. punish law breakers
52. Which of these is not a fundamental right of a Kenyan?
 A. right to Kenya B. right to assemble
 C. right to education D. right to fight
53. Which of the following defends Kenyans from external attacks?
 A. G.S.U B. Kenya Army
 C. Police D. traffic police

54. What does the road sign drawn below show?
 A. Bump a head
 B. Turn left
 C. No entry
 D. Danger ahead



55. When is Mashujaa day celebrated ?
 A. 12th Dec B. 1st June
 C. 20th Dec D. 20th October
56. Mary's Aunt call her _____
 A. niece B. cousin C. mum D. nephew
57. The weather instrument shown below measures ____
 A. speed of the wind
 B. air pressure
 C. strength of the wind
 D. Direction of the wind
58. The head of the county government is _____
 A. Speaker B. President C. Senator D. Governor



59. Children in school practice democracy in one of the following areas
 A. employing teachers B. going to school
 C. choosing prefects D. beating others
60. Our national flag has ____ colours
 A. six B. two C. five D. four

CHRISTIAN RELIGIOUS EDUCATION

61. The last book in the new testament is
 A. Mathew B. Revelation
 C. Genesis D. Exodus
62. Jesus raised Lazarus to show that _____
 A. had power over death
 B. had power over sickness
 C. Lazarus was not dead
 D. he had power over nature
63. The holy spirit produces _____
 A. money B. food C. love D. unhappiness
64. Which of the following was not a game enjoyed by children in traditional African society?
 A. singing games B. wrestling
 C. dancers D. badminton
65. God has given us food to eat water to drink and clothes therefore we can say God is
 A. Kind B. Bad C. selfish D. powerful
66. During Easter holiday, Christians celebrate
 A. birth of Jesus B. Burial of Jesus
 C. Death and resurrection D. baptism
67. The roman officers servant was healed by Jesus because h had _____ in Jesus.
 A. faith B. love C. hatred D. selfish
68. Among the disciples of Jesus the lamb of
 A. James B. John C. Judas D. Peter

69. John the baptist called Jesus the faced death?
 A. Isaac B. God
 C. Abraham D. Moses
70. Who among the following never faced death?
 A. Elisha B. Stephen
 C. Anania D. Elijah
71. The word catholic means _____
 A. denomination
 B. house of prayer
 C. universal church
 D. believers of God
72. _____ announced the birth of Jesus Christ
 A. John the baptist
 B. prophet Isiah
 C. Angrel Gabriel
 D. prophet isiah
73. A baby stays for _____ months in the mothers womb before it is born
 A. six B. eight
 C. twelve D. nine
74. Christians who die for their Christians beliefs are called
 A. martyrs B. angel
 C. disciples D. apostles
75. God promises to give us _____ when we respect our parents
 A. wealth
 B. health
 C. long life
 D. good marks in class
76. The man who was attacked by robbers and was left half dead was helped by
 A. levities B. jew
 C. priest D. samaritan
77. The parable in the bible which about forgiveness and repentance is
 A. samaritan B. the mustard seed
 C. the prodigal son D. the lost sheep
78. " You created part of me you put me together in my mother's womb" This verse is removed drom which book in the bible
 A. Genesis B. Mathew
 C. Revelation D. Psalms
79. The following commandments explains our duty to God which one does not
 A. do not commit adultery
 B. do not use my name in rain
 C. worship no other god but me
 D. observe the sabbath and keep.it holy
80. Christians should _____ their enemies
 A. hate B. dislive
 C. love D. avoid
81. Which of the following commandents has a promise?
 A. do not steal
 B. honour your parents
 C. worship no idols
 D. contracting sexually transmitted diseases
82. Which of the following is not an effect of irresponsible behaviour
 A. early pregnancy
 B. school drop outs
 C. happiness
 D. contracting sexually transmitted diseases
83. The first disciples to be caused by Jesus were
 A. tax collector
 B. tent maker
 C. fishermen
 D. carpenter
84. The following are emotional changes except
 A. joy B. hatred
 C. happines D. breathing
85. Commandment number _____ commands us not to steal.
 A. 2 B. 8
 C. 6 D. 10
86. Jesus turned water into wine in a wedding at
 A. Nazareth
 B. Canaan
 C. Bethrehem
 D. Cana of galilee
87. Who among the following prophesied the birth of Christ
 A. Jererniah
 B. Amos
 C. Isaiah
 D. Hosea
88. Which disciple denied Jesus?
 A. Judas iscariot
 B. John
 C. Peter
 D. Phillip
89. Jesus died on the cross so that we may?
 A. die
 B. be crucified
 C. have eternal life
 D. burried in the tomb
90. As Joseph and James are coming from a foot ball match they see Jonathan stealing oranges from Suleiman's farm. The best thing they should do is to _____
 A. beat up Jonathan
 B. advice Jonathan to return the oranges
 C. join Jonathan in stealing the oranges
 D. set up an alarm and shout thief !thief!.