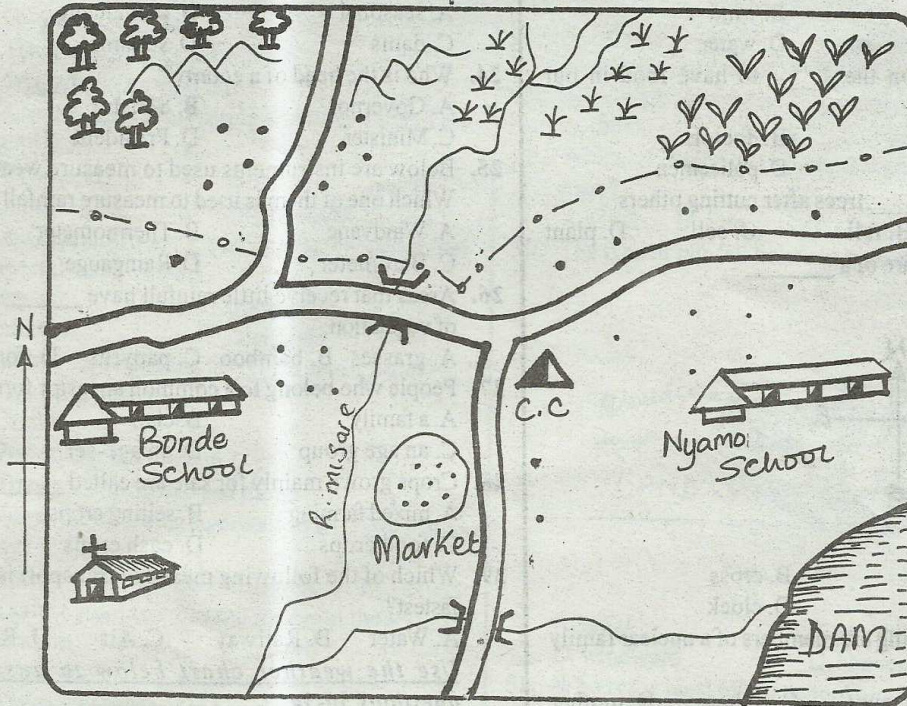


STD 4 - YEAR 2016

SOCIAL STUDIES/R.E

Time: 2Hrs 15 Mins

WANDIA AREA



KEY

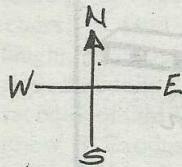
	Settlements		Locational boundary		Murram road		River and bridge
	Church		SCH School		Sugarcane		Forest
	DAM		C.C. Chief's camp		Plantation		Hills
	Market						

Use the map of Wandia area to answer questions 1-7.


1. River Misare starts from the _____
 A. sugarcane B. swamp
 C. forest D. chief's camp
2. People of Wandia are likely to be:-
 A. Muslims B. Pagans
 C. Hindus D. Christians
3. What is the direction of Bonde school from Nyamo school?
 A. West B. North C. East D. South
4. A thief found stealing sugarcane should be taken to:-
 A. church B. market
 C. chief's camp D. settlements
5. Which of the following physical features is **NOT** found in Wandia area?
 A. Forests B. Airstrip
 C. Rivers D. Hills
6. The cash crop grown in Wandia area is:-
 A. coffee B. tea
 C. sugarcane D. rice

STD 4 - SOCIAL STUDIES / C.R.E

7. The MAIN means of transport in Wandia area is:-
A. railway B. road C. air D. lake
8. Crops are harvested during the _____ season.
A. rainy B. wet C. windy D. dry
9. Some areas in our county are flat. They are called:-
A. plains B. valleys
C. plateaus D. mountains
10. Which of the following is NOT a food crop?
A. Millet B. Potatoes
C. Tobacco D. Maize
11. Moving air is also called:-
A. rain B. wind
C. clouds D. water
12. We depend on the _____ to have food in our county.
A. farmers B. doctors
C. teachers D. policemen
13. We should _____ trees after cutting others.
A. burn B. fell C. sell D. plant
14. This is a picture of a _____



- A. windvane B. cross
C. compass D. clock
15. All the following are members of a nuclear family EXCEPT:-
A. sister B. aunt C. father D. mother
16. The _____ is in charge of education in the district.
A. headteacher
B. chief
C. District Education Officer
D. District Commissioner
17. The physical feature shown above is a _____



- A. valley B. river C. plain D. mountain
18. We can protect our soil by planting _____
A. trees B. things C. grass D. timber
19. In our county people get water from rivers, lakes and _____
A. forest B. sky C. farm D. wells

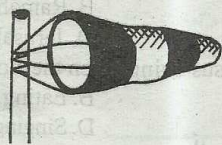
20. We grow sugarcane in our county. We _____ to sugarcane to other people.
A. buy B. sell C. give D. store
21. The Luos belong to which main language group?
A. Bantu B. Cushites
C. Nilotes D. Highland Nilotes
22. Hills, rivers and valleys are known as _____ features.
A. permanent B. man-made
C. old D. physical
23. Rivers that dry up during dry season are called:-
A. seasonal B. permanent
C. dams D. streams
24. Who is the head of a county?
A. Governor B. Senator
C. Minister D. President
25. Below are instruments used to measure weather. Which one of them is used to measure rainfall?
A. Windvane B. Thermometer
C. Barometer D. Rain gauge
26. Areas that receive little rainfall have _____ type of vegetation.
A. grasses B. bamboo C. papyrus D. forest
27. People who belong to a common ancestor forms:
A. a family B. clan
C. an age group D. an age-set
28. Crops grown mainly for sale are called _____
A. mixed farming B. selling crops
C. food crops D. cash crops
29. Which of the following means of transport is the fastest?
A. Water B. Railway C. Air D. Road

Use the weather chart below to answer questions 30-34

Day	Morning	Afternoon
Monday		
Tuesday		
Wednesday		
Thursday		
Friday		

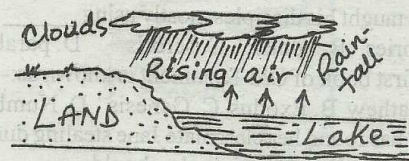
30. The weather on Friday can be describes as:-
A. sunny and rainy B. calm and windy
C. windy and rainy D. sunny throughout
31. Sammy was likely to wear light clothes on _____ day.
A. Monday B. Wednesday
C. Thursday D. Friday

32. On which day was the weather same throughout the day?
 A. Thursday B. Tuesday
 C. Wednesday D. Monday
33. On which day did pupils have to use umbrellas to school?
 A. Thursday B. Wednesday
 C. Friday D. Monday
34. Which days had the same weather conditions in the morning?
 A. Monday and Wednesday
 B. Monday and Friday
 C. Tuesday and Thursday
 D. Wednesday and Friday
35. The forests that grow along the river valleys are known as:-
 A. woodland B. riverine
 C. scrubs D. grassland
36. In traditional African society, prayers were offered in special areas called:-
 A. caves B. church
 C. mosque D. shrines
37. Which of the following is **NOT** a use of water?
 A. Growing of crops
 B. Drinking
 C. Preventing soil erosion
 D. Transporting people and things
38. Which of the following communication is **NOT** used today?
 A. Smoke B. Mobile C. Radio D. Letters
39. The safest point to cross the road is at the:-
 A. junction B. a bend
 C. round about D. a foot bridge
40. The rules that helps us to have behave properly are called:-
 A. school rules B. moral laws
 C. constitution D. bad manners
41. Name the weather instrument below _____



- A. windvane B. raingauge
 C. windsock D. hygrometer
42. The above instrument helps us to:-
 A. know temperature
 B. tell the time of the day
 C. measure rainfall
 D. know strength of the wind

43. _____ is used to make baskets and mats.
 A. Firewood B. Papyrus reeds
 C. Grass D. Cotton
44. How many counties are in Kenya?
 A. Forty Seven B. Sixty three
 C. Eight D. Twenty four
45. _____ are the highest area of our county.
 A. Island B. Highlands C. Valleys D. Lakes
46. The coldest months are July and _____ in our county.
 A. August B. September C. April D. January
47. The president of Kenya is called:-
 A. Mwai Kibaki B. Raila Odinga
 C. Uhuru Kenyatta D. William Ruto
48. The flag of Kenya has _____ colours.
 A. three B. two C. four D. six
49. Which of the following animals gives us wool and meat?
 A. Goat B. Sheep C. Donkey D. Cows
50. The type of rainfall below is known as:-



- A. relief B. sea ward
 C. windward D. convection
51. Who is the head of our school?
 A. Chairman B. Parents
 C. Headteacher D. Pastor
52. _____ helps to keep the law and order.
 A. Teachers B. Police
 C. Prefects D. Doctors
53. Which of the following animals is kept in dry areas?
 A. Cows B. Sheep C. Pigs D. Camels
54. Which of these is **NOT** an element of weather?
 A. Soil B. Wind C. Rainfall D. Temperature
55. Which one of the following is NOT a major language group?
 A. Cushites B. Nilotes C. Arabs D. Bantus
56. Which one among these is a good moral?
 A. Stealing B. Cheating
 C. Fighting D. Obedience
57. Temperature of a place is measured in:-
 A. millimetres B. degrees
 C. kilometres D. centimetres
58. Dry areas where there is no rain are called:-
 A. deserts B. forests
 C. highlands D. swamps

59. Who among the following taught pupils in tradition communities?
 A. Prophets B. Teachers
 C. Grandparents D. Ancestors
60. Vegetation that grows on its own is called:-
 A. man-made B. natural
 C. planted D. forest
- C.R.E**
61. God created everything within _____ days.
 A. five B. one C. four D. six
62. Mary and Martha were the sisters of _____
 A. Paul B. James C. Lazarus D. Thomas
63. Three of the following are good effects of weather. Which one is **NOT**?
 A. Drying of crops
 B. Rain helps crops to grow
 C. Helps boats to sail
 D. Sun keeps us warm
64. Talents are given to us by _____
 A. teachers B. God C. parents D. friends
65. Jesus taught his disciples mostly using _____
 A. stories B. books C. scrolls D. parables
66. The first book of Old Testament is known as:-
 A. Mathew B. Exodus C. Genesis D. Numbers
67. Betty has found her classmate Jane stealing during breaktime. As a Christian, she should:-
 A. tell her that stealing is bad
 B. join her
 C. report to the prefect
 D. keep quiet
68. All the following are good ceremonies **EXCEPT**:-
 A. birthday B. burial C. wedding D. baptism
69. To remember the death and resurrection of Jesus we celebrate:-
 A. Christmas B. Passover
 C. Advent D. Easter
70. During the flood, God save only _____ and his family.
 A. Adam B. Moses C. Noah D. Lot
71. Jesus was crucified at a place called:-
 A. Golgotha B. Olives
 C. Emmaus D. Jericho
72. _____ laughed at Hannah because she did not have a child.
 A. Sarah B. Eli C. Peninnah D. Elkanah
73. John and _____ were the sons of Zebedee.
 A. Peter B. James C. Mathew D. Judas
74. During baptism the Holy Spirit came to Jesus in the form of:-
 A. fire B. wind C. angel D. a dove
75. Which of the following is **NOT** a quality of a good leader?
 A. Liking money B. Loving all people
 C. Being obedient D. Respectful
76. Three of the following things were created by God. Which one was **NOT**?
 A. Fish B. Rain C. Roads D. Clouds
77. _____ was the home of Lazarus the friend of Jesus.
 A. Jerusalem B. Canaan
 C. Bethlehem D. Bethany
78. Jesus fed 5000 people and _____ baskets of food remained.
 A. 10 B. 12 C. 20 D. 5
79. Christians should _____ people affected by HIV/AIDS.
 A. run away from B. separate
 C. love D. shame
80. When Jesus sent his disciples, he told them to carry:-
 A. clothes B. money
 C. food D. nothing
81. Your classmate Taabu had abused you. As a Christian what is the best action to take?
 A. Beat him
 B. Tell him it is bad to abuse
 C. Abuse him also and forgive him
 D. Start crying
82. Who among the following warned leaders against the injustices?
 A. Ananias B. Micah C. Hosea D. Isaiah
83. Where were disciples going when they saw Jesus walking on water?
 A. Bethany B. Capernaum
 C. Nazareth D. Galilee
84. Lazarus had been dead for _____ days before Jesus raised him.
 A. four B. two C. three D. one week
85. Jesus is a good shepherd to us because He _____
 A. went to heaven
 B. was born as a boy
 C. was the son of Joseph
 D. loves and cares for us
86. The parents of Samuel lived at a place called:-
 A. Bethel B. Ramah
 C. Shiloh D. Jerusalem
87. What was Jesus doing when the storm started?
 A. Sleeping B. Eating
 C. Praying D. Singing
88. A good leader must be _____
 A. corrupt B. dishonest C. selfish D. kind
89. We take care of God creation because _____
 A. we want money
 B. avoid punishment
 C. God wants us to do so
 D. it is a beautiful
90. _____ was the disciples of Jesus who received money to betray him.
 A. Simon Peter B. Judas Iscariot
 C. Thomas D. Peter