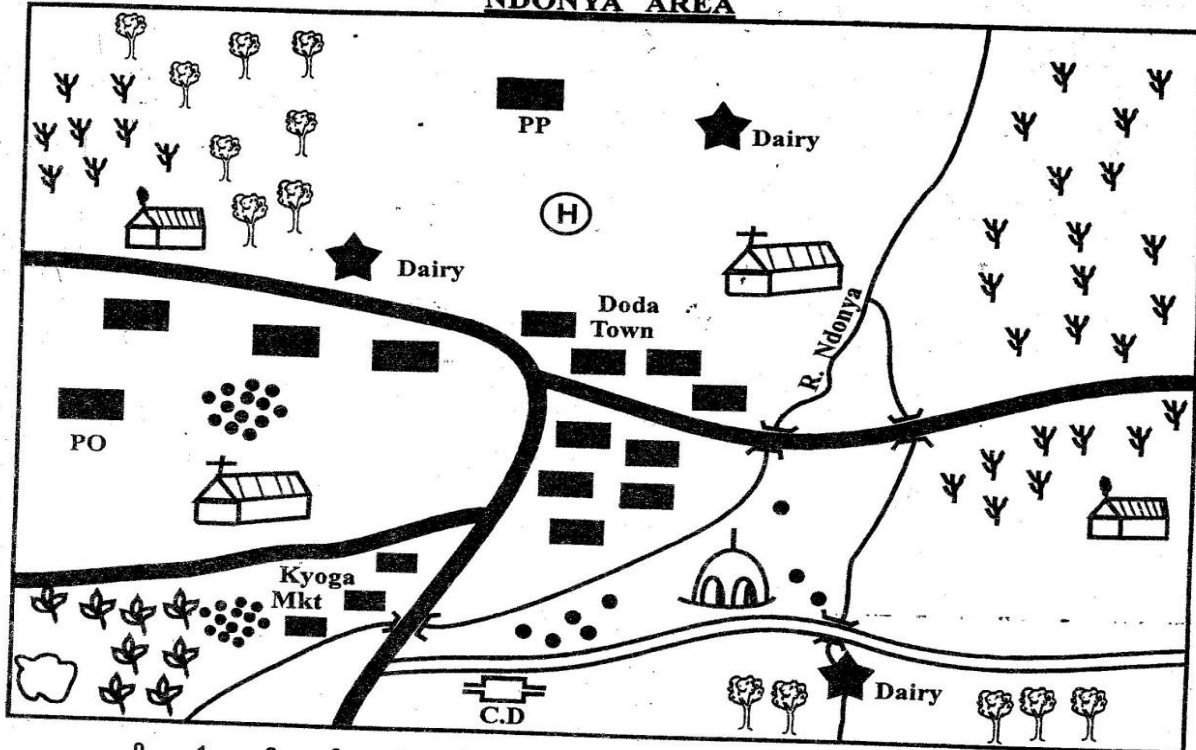
















Study the map of Ndonya area below and use it to answer questions 1 - 7.

NDONYA AREA



Scale 0 1 2 3 4 5 6 7 8 9 10 11 12 13 14 15 km

KEY

 River and Bridge	 Quarry
 Settlements	 Tea
 Tarmac road	 Murrum road
 Coffee factory	 PP Post office
 Mosque	 Houses
 Church	 PP Police Post
 Hospital	 Forest

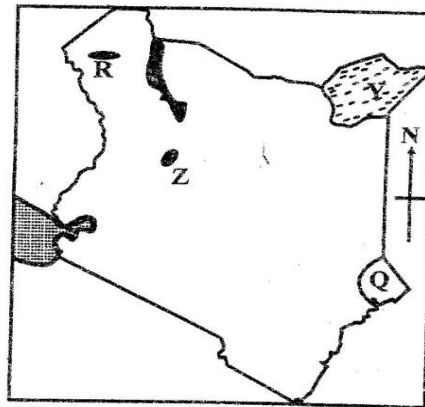
HIGA COUNTY

STD. 8 SOCIAL STUDIES & C.R.E

1. What is the direction of Doda town from the quarry?
A. North West B. South West
C. North East D. South East
2. What is the approximate distance between the dairy near Doda town and the one in the forest on a straight line?
A. 8. 1km B. 7km
C. 9km D. 11km
3. Doda is an example of:-
A. An industrial town
B. A mining town
C. An administrative town
D. Transport centre
4. The **most** popular religion practised in the area is:-
A. Christianity B. Islam
C. Hinduism D. Traditional African
5. Which sign shows that there is security in the area?
A. PC B. H
C. PP D. CF
6. The highest point of Ndonya area is:-
A. North B. West
C. East D. South
7. The factories shown on the map are examples of:-
A. Assembly industries
B. Processing industries
C. Manufacturing industries
D. Service industries
8. Which of the following shows the **correct** stages of the evolution of man?
A. Homo Habilis, Homo Sapiens, Homo Erectus, Homo Sapien Sapiens
B. Homo Erectus, Homo Habilis, Homo Sapiens, Homo Sapien Sapiens
C. Homo Habilis, Homo Erectus, Homo Sapiens, Homo Sapien Sapiens
D. Aegyptopithecus, Dryopithecus, Homo Erectus, Homo Sapiens
9. The **main** role of a school is to:-
A. Impart knowledge to the pupils
B. Prepare the pupils for future responsibilities
C. Guide and counsel pupils on moral values
D. Ensure that all young people become literate

10. In which one of the following legal institutions **does** an Islamic marriage take place?
A. Kadhi Court B. High Court
C. Court of Appeal D. Magistrate Court
11. Most lakes in the Rift Valley are salty because:-
A. The lakes are deep
B. Rift Valley receives little amount of rainfall
C. The lakes have no outlets
D. High rate lakes of evaporation is experienced in the area

Use the map provided to answer questions 12 - 14



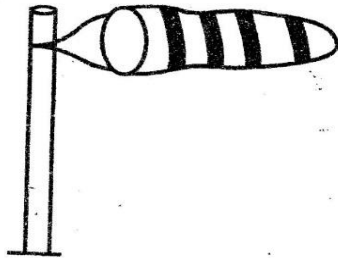
12. The feature marked Q is:-
A. Arawale National Park
B. Boni National Reserve
C. Dodori National Reserve
D. Malka Marri National Reserve
13. The mineral mined at place marked Z is:-
A. Limestone B. Diatomite
C. Fluorspar D. Salt
14. The place marked Y has low population density **mainly** because:-
A. It is inhabited by wildlife
B. It has many swamps
C. It is hot and dry
D. It is inhabited by Al - Shabab fighters
15. Which one of the following lists has Nilotic speakers only?
A. Nandi, Oromo, Mijikenda
B. Acholi, Nuer, Dinka
C. Borana, Somali, Rendille
D. Akamba, Samburu, Digo

16. Which one of the following **best** completes the diagram below?

Drakensberg	Ruwenzori	Pare	?
-------------	-----------	------	---

- A. Jebel Mara
C. Atlas
B. Ahaggar
D. Usambara

17. According to the below weather instrument the wind is:-



- A. Calm
B. Very strong
C. Blowing from West to East
D. Blowing from North to South

18. The following are communities found in Africa

- (i) **Fulani**
(ii) **Maasai**
(iii) **Tswana**

What common characteristics do they have? They:-

- A. Used to be hunters and gatherers
B. Have a common origin
C. Depend on animals for their livelihood
D. Resisted European invasion

19. The fastest means of mass communication is :-

- A. Mobile phones
C. Radio
B. Television
D. Newspapers

20. It is 11:00 pm on longitude 15° West. What time will it be on longitude 15° East?

- A. 9.00pm
C. 1.00pm
B. 9.00am
D. 1.00am

21. The **correct** order of becoming an elder in Traditional African communities is:-

- A. Initiation, marriage, warrior, elder
B. Initiation, warrior, marriage, elder
C. Warrior, marriage, initiation, elder
D. Warrior, initiation, marriage, elder

22. The love for one's country is called:-

- A. Integrity
C. Solidarity
B. Patriotism
D. Nationalism

23. Below are characteristics of certain winds

- (i) **Are on - shore winds**
(ii) **Blow from the Indian Ocean**
(iii) **Cause the heaviest rainfall in Eastern Africa**

The winds described above are:-

- A. Harmattan
B. South - East trade winds
C. Westerlies
D. North- East trade winds

24. Mombasa town started as a result of:-

- A. Mining
B. Administration
C. Trading
D. Construction of the Uganda railway

25. Rivers Tana, Athi, Limpopo and Pangani have one factor in common. It is that all of them:-

- A. End in the Indian Ocean
B. Are found in Kenya
C. Have estuaries at their mouths
D. Have no tributaries

26. Which one of the following crops is associated with Kenana Irrigation Scheme?

- A. Rice
C. Coffee
B. Bananas
D. Sugarcane

27. Samouri Toure is remembered in the history of Africa for:-

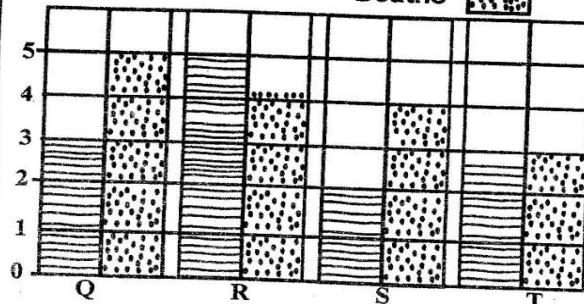
- A. Converting Africans to Christianity
B. Being a founder member of African Union, AU
C. Leading his country to independence
D. Resisting colonialism

Study the diagram below to answer questions 28 - 29.

Key

Births

Deaths



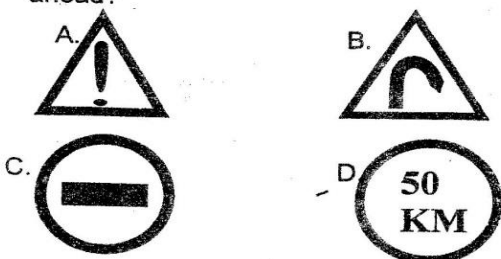
28. Which statement is **not true** about the diagrams above?
 A. Country R has the highest number of births
 B. Countries Q and T record the same number of births
 C. Country Q records the lowest number of deaths
 D. Countries R and S record the same number of deaths
29. Country T is **likely** to be:-
 A. Germany B. Kenya
 C. India D. Uganda
30. Which one of the following order of events shows the **correct** stages for a Christian marriage in Kenya?
 A. Courtship → payment of dowry → wedding
 B. Payment of dowry → courtship → wedding
 C. Wedding → courtship → payment of dowry
 D. Courtship → wedding → payment of dowry
31. The study of man in relation to his environment is called:-
 A. Archaeology B. Psychology
 C. Social studies D. Excavation
32. The first line of the second stanza of the Kenya National Anthem starts with the words
 A. Ee Mungu nguvu zetu
 B. Natujenge taifa letu
 C. Raha tupate na ustawi
 D. Amkeni ndugu zetu
33. In Africa, cloves are **mainly** grown in:-
 A. Ghana
 B. Ethiopia
 C. South Africa
 D. Zanzibar
34. The following are descriptions about a certain African town:-
 (i) It has some of the largest populations
 (ii) Its name means 'new flower'
 (iii) It is found in a country that was never fully colonised
- The above town is **most likely** to be:-
 A. Monrovia B. Lagos
 C. Johannesburg D. Addis Ababa
35. Trading activities can be increased more **mainly** by:-
 A. Imposing taxes on goods
 B. Encouraging foreign investments
 C. Producing and supplying different types of goods to the market
 D. Encouraging importation of expensive goods
36. On her way to school, Alyne discovers an abandoned one - hour old child by the road. The immediate action she should take is :-
 A. Go and seek for help
 B. Carry the infant to the nearest elder person
 C. Carry on with her business
 D. Take the child to the nearest police station
37. Which list shows the **correct** stages of the types of soil erosion from the **least** to the most destructive?
 A. Gully, sheet, rill, splash
 B. Gully, rill, sheet, splash
 C. Splash, rill, sheet, gully
 D. Splash, sheet, rill, gully
38. The **main** tourist attraction along the coast of Kenya is:-
 A. Warm climate B. Sandy beaches
 C. Varied wildlife D. Diversified cultures
39. The cheapest fish preservation method is :-
 A. Sun-drying B. Salting
 C. Canning D. Freezing
40. We shall forever remain grateful to Vasco da Gama for:-
 A. Introducing maize to us
 B. Building the first christian mission at Rabai
 C. Finding the sea route to India
 D. Stopping slave trade
41. An example of a service industry is:-
 A. Mining
 B. Fruit canning
 C. Cement making
 D. Printing
42. One common factor about Kenya and Uganda is that both countries:-
 A. Were colonised by the same European power
 B. Use a common currency
 C. Have the same form of government
 D. Are members of ECOWAS

43. The African Union , AU
 A. Is made up of almost all African countries
 B. Was founded in 1963
 C. Is led by a democratically elected president
 D. Was formed to promote trade

Use the table below to answer questions 44 - 45.

Month	J	F	M	A	M	J	J	A	S	O	N	D
Rainfall (mm)	5	10	18	41	23	8	10	8	2	8	7	8

44. In which one of the following climatic regions is the above station **likely** to be found?
 A. Savanna
 B. Equatorial
 C. Desert
 D. Mediterranean
45. Which vegetation may be found in the above climatic zone?
 A. Tall trees
 B. Cactus
 C. Mangroove
 D. Pine trees
46. Which diagram shows there could be danger ahead?



47. In Kenya a parliamentary by election is held when a member of parliament
 A. Is jailed for more than six months
 B. Resides in another constituency
 C. Becomes a leader of a political party
 D. Gets a vote of no confidence
48. Below are some statements about a type of transport
 (i) *It is cheap to use*
 (ii) *It can transport large volumes of bulky goods*
 (iii) *It is very slow*
- The type of transport described above is:-
 A. Air
 B. Water
 C. Pipeline
 D. Road

49. During the precolonial period, the Ameru were ruled by a:-
 A. King
 B. Chief
 C. Council of elders
 D. Queen mother
50. Which one of the following was a traditional form of education?
 A. Use of riddles
 B. Writing
 C. Use of pictures
 D. Reading
51. Quattara depression in Egypt was formed as a result of:-
 A. Volcanic action
 B. Human activities
 C. Down warping
 D. Wind action
52. Which one of the following countries lies to the West of Kenya?
 A. Somalia
 B. Tanzania
 C. Uganda
 D. Ethiopia
53. The **main** benefit of poultry farming in Kenya is that it is source of:-
 A. Proteins
 B. Employment
 C. Income
 D. Manure
54. Laibon Lenana collaborated with the British because he wanted:-
 A. To be trained as a soldier
 B. To get support against his enemies
 C. His people to acquire Western education
 D. To acquire better breeds of cattle
55. The following are some events that took place in Kenya before independence:-
 (i) Jomo Kenyatta was arrested
 (ii) Kikuyu Central Association was formed
 (iii) Africans were recruited to fight in the Second World War.

Which one of the following is the **correct** order in which these events took place?
 A. ii , iii, i
 B. i, ii, iii
 C. i, iii, ii
 D. iii, i, ii

56. On which type of mountain is a crater lake **most likely** to be found?
 A. Fold
 B. Block
 C. Residual
 D. Voicanic
57. Chapter iv of the Kenyan Constitution is important **mainly** because:-
 A. It is part of our constitution
 B. It explains the duties of the president
 C. It outlines processes of mediation
 D. It guarantees citizens their freedoms and rights

58. A nuclear family is made up of:-
 A. Mother, son, grandfather
 B. Father, daughter, son
 C. Father, son, uncle
 D. Grandmother, father, daughter
59. In Kenya, a national population census is carried out after a period of:-
 A. 10 years B. 8 years
 C. 5 years D. 1 year
60. Nomination of members of parliament in Kenya is done by:-
 A. The Attorney General
 B. Political parties
 C. Electoral commission
 D. President

SECTION II
CHRISTIAN RELIGIOUS EDUCATION

61. Which one of the following is not a reason why God created human beings?
 A. To care for His creation
 B. To rule His creation
 C. To share in God's life
 D. To learn what is good and bad
62. Which one of the following reasons explains why God created a woman?
 A. Help man care for the Garden of Eden
 B. Provide man with companionship
 C. To help man look after God's creation
 D. To multiply and fill the earth
63. Which one of the following is the correct order of events which took place in the Bible?
 (i) *Moses at the burning bush*
 (ii) *The creation of man*
 (iii) *The call of Abraham*
 (v) *The anointing of David as a king*
 A. ii, i, iii, iv B. i, iv, iii, ii
 C. i, iii, ii, iv D. ii, iii, i, iv
64. Abraham's faith was tested when God commanded him to:-
 A. Sacrifice his son Isaac
 B. Be circumcised
 C. Provide animals for sacrifice
 D. Change his name
65. Moses removed his shoes as he was approaching the burning bush. This was a sign of:-
 A. Fear B. Confidence
 C. Respect D. Love

66. The Jews celebrate the Passover to thank God for having:-
 A. Delivered them from slavery in Egypt
 B. Delivered them from slavery in Midian
 C. Given them the Ten Commandments
 D. Given them the land of Canaan
67. David was so successful as a king of Israel mainly because he:-
 A. United the tribes of Israel
 B. Trusted and obeyed God
 C. Was brave and fearless
 D. Made Jerusalem a religious capital
68. Prophet Nathan was angry with King David because the king:-
 A. Had married many foreign wives
 B. Was worshipping foreign gods
 C. Had planned the murder of Uriah
 D. Wanted to build a house of God
69. The work of Zechariah the father of John the Baptist was that of a:-
 A. Tax collector B. Fisherman
 C. Carpenter D. Priest
70. Which one of the following is not a lesson that Christians can learn from the story of the Angel's visit to Zechariah?
 A. God answers prayers
 B. God tests the faith of His people
 C. God fulfils His promise
 D. God has a purpose for everyone
71. Which one of the following is the main teaching of the sermon on the Mount?
 A. The name of God
 B. The meaning of spiritual hunger
 C. The values about christian living
 D. How to live happily on earth
72. During the last Supper Jesus washed His disciples' feet as a sign of:-
 A. Humility B. Patience
 C. Courage D. Forgiveness
73. Who among the following disciples of Jesus did not see the resurrected Christ?
 A. Judas Iscariot B. Bartholomew
 C. Thomas D. James son of Alphaeus
74. The story of the annunciation of the birth of Jesus is written in the book of:-
 A. Luke B. Mark
 C. Matthew D. John

75. The killing of the baby boys by king Herod after the birth of Jesus was foretold by prophet:-
A. Hosea B. Jeremiah
C. Amos D. Micah
76. Which parable of Jesus teaches Christians to return back to the Lord?
A. Parable of the sower
B. Parable of the lost sheep
C. Parable of the good Samaritan
D. Parable of the mustard seed
77. The books written by Saint Paul to believers are called:-
A. Prophetic books B. Historical books
C. Epistles D. Gospels
78. The Holy Spirit in the New Testament is symbolized by:-
A. Clouds B. Water
C. Fire D. Earthquake
79. Which one of the following is a fruit of the Holy Spirit?
A. Healing B. Prophecy
C. Teaching D. Truthfulness
80. Who among the following specialists is found in traditional African religion and in Christianity?
A. Rain makers B. Diviners
C. Herbalists D. Priests
81. Why were children told folk tales in traditional African society? It was mainly to:-
A. Teach them moral values
B. Entertain them
C. Teach them the history of their community
D. Keep them occupied
82. Which one of the following beliefs about God is found in the Apostles Creed and Traditional African Communities?
A. God is powerful
B. God is the father of Jesus Christ
C. God the Holy Spirit
D. God will come to judge the world
83. In traditional African communities the giving of a name to a baby was done by:-
A. Priest B. Women of the clan
C. Council of elders D. Prophets
84. In traditional African communities an elder was most respected if he/ she showed the virtue of:-
A. Humility
B. Courage
C. Wisdom
D. Patience
85. The best way in which the ancestral spirits were pleased in Traditional African societies was by:-
A. Naming children after them
B. Making ceremonies
C. Making libations
D. Singing to them
86. Which one of the following is the best way for Christians to use their wealth?
A. Visiting new places
B. Helping the needy
C. Buying fashions
D. Vie for a political position
87. Your classmate Chamukono takes away your lunch and eats it. As a Christian what would you do?
A. Announce it to the class
B. Tell him to go to his home to eat
C. Ask him to pay for it
D. Warn him not to repeat again
88. Neema a std 8 pupil finds out that her friend is in love with a fellow classmate. The best thing to do is:-
A. Report her to the teacher
B. Applaud her and encourage them to go on
C. Ask for a token not to reveal to others
D. Announce on the assembly
89. Why should Christians take part in group work?
A. Make money
B. Seek favours
C. Promote unity
D. Become popular
90. The first mission school in Kenya was started at Rabai by:-
A. Seyyid Said
B. David Livingstone
C. Johann Rebman
D. Vasco da Gama