

CONFIDENTIAL

BUNGOMA COUNTY PRE - MOCK EXAMS
STANDARD 8 - YEAR 2019
SOCIAL STUDIES & R.E

READ THESE INSTRUCTIONS CAREFULLY

1. You have been given this question paper and a separate answer sheet. The question paper contains 90 questions.
2. Do any necessary rough work in this paper.
3. When you have chosen your answer, mark it on the **ANSWER SHEET**, not in this question paper.

HOW TO USE THE ANSWER SHEET

4. Use an ordinary pencil only.
5. Make sure that you have written on the answer sheet.

YOUR INDEX NUMBER

YOUR NAME

NAME OF YOUR SCHOOL

6. By drawing a **dark line** inside the correct numbered boxes mark your full Index Number (i.e. School Code Number and the three- figure Candidate's Number) in the grid near the top of the answer sheet.
7. Do not make any marks outside the boxes.
8. Keep the sheet as clean as possible and do not fold it.
9. For each of the questions 1 - 90 four answers are given. The answers are lettered A, B, C, D. In each case only **ONE** of the four answers is correct. Choose the correct answer.
10. On the answer sheet the correct answer is to be shown by drawing a dark line inside the box in which the letter you have chosen is written.

Example:-

In the Question Paper:

11. Which one is a role of parents to their children?
- A. They are advisors
 - B. They provide food
 - C. They provide security
 - D. They take care of their property

The correct answer is (A) (They are advisors)

On the answer sheet:

11 A [B] [C] [D] 25 [A] [B] [C] [D] 33 [A] [B] [C] [D] 44 [A] [B] [C] [D] 50 [A] [B] [C] [D]


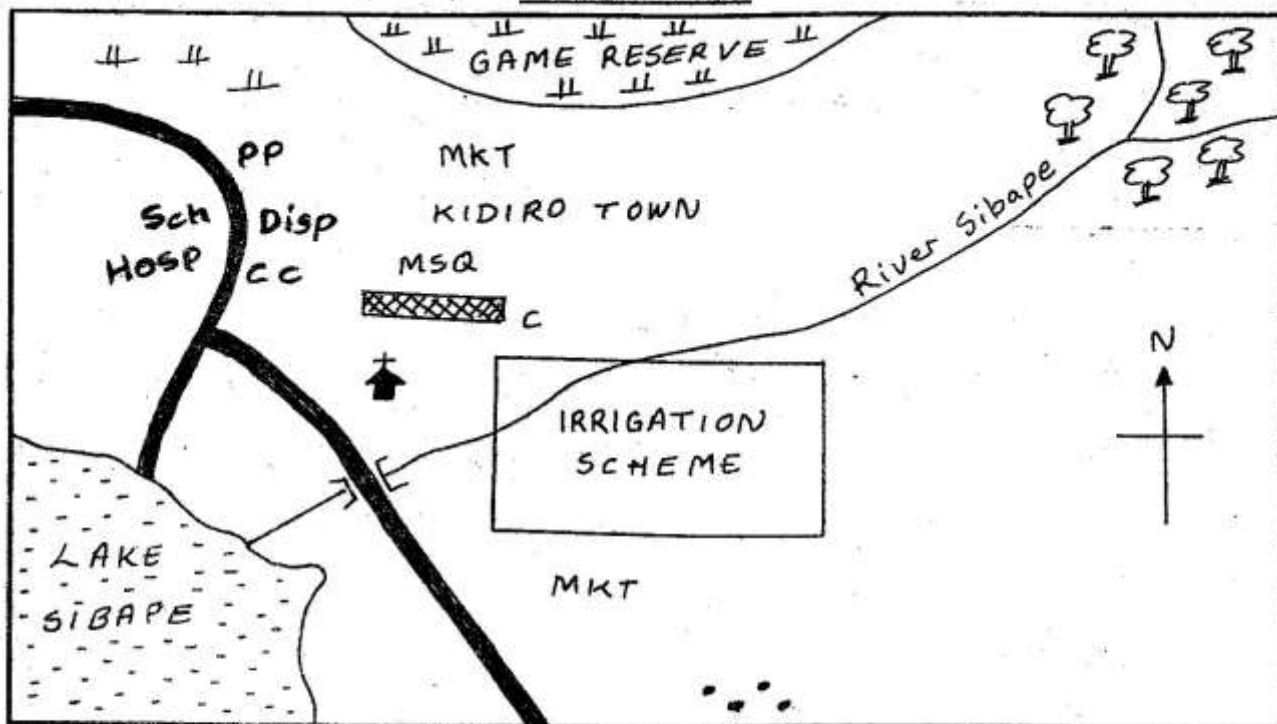
In the First set, the box with the letter A printed in it is marked.

11. Your dark line **MUST** be within the box.
12. For each question **ONLY ONE** box is to be marked in each set of four boxes.

This Question Paper consists of 90 Printed Questions.

TURN OVER

SIBAPE AREA



KEY

Tarma road	Murram Road	River and bridge	Forest
Scrub	Chief's Camp	Dispensary	Hospital
Police Post	Houses	Permanent Buildings	Fish Trap

Use the map of Sibape area to answer questions 1- 7

- The land in Sibape area rises from
 - East to West
 - South-west to North-east
 - North-west to South-East
 - North-east to South-West
- What is the approximate area of the irrigation scheme?
 - 26 square kilometres
 - 36 square kilometres
 - 30 square kilometres
 - 12 square kilometres
- If the area under the Game Reserve was to be converted into a farm, which one of the following crops would be suitable to plant?

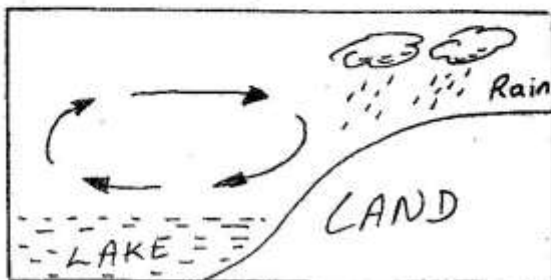
A. Tea	B. Pyrethrum
C. Sugarcane	D. Coffee
- Which one of the following statements is **FALSE** about River Sibape?
 - It ends as an estuary
 - It has a tributary
 - It has two mouths
 - It has a confluence
- Three of the following social services are available in Sibape area. Which one is **NOT**?
 - Recreation services
 - Religious services
 - Education services
 - Health services
- Three of the following economic activities are carried out in Sibape area **EXCEPT**?

A. Fishing	B. Trading
C. Farming	D. Mining
- The dominant type of soil in the Southern part of Sibape area is **LIKELY** to be

A. Volcanic soils	B. Clay soils
C. Black cotton soils	D. Alluvial soils

8. Which of the following communities fall under the Kwa - speakers of west Africa?
 A. Dagomba, Tukular, Songhai
 B. Bergu, Kwanu, Bambara, Mossi
 C. Hausa, Yoruba, Kanuri
 D. Nzima, Fante, Akwapim
9. Which of the following is the **MAIN** effect of forest destruction in Kenya?
 A. Reduced volume of water in rivers
 B. Shortage of herbal medicine
 C. Shortage of timber for building
 D. Reduced supply of firewood

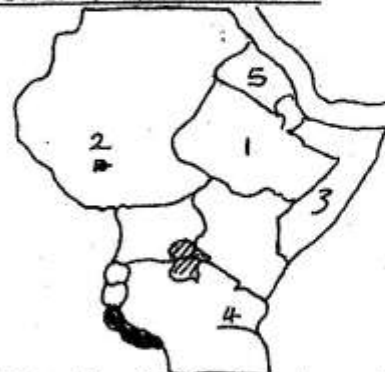
Use the diagram below to answer questions 10-12



10. The type of rainfall shown in the diagram mostly occurs
 A. In the afternoon
 B. At 9.00am
 C. At night
 D. Early in the morning
11. Which one of the following towns experiences the above type of rainfall?
 A. Addis Ababa B. Nyeri
 C. Entebbe D. Khartoum
12. The above type of rainfall is known as
 A. Convectional B. Orographic
 C. Sea breeze D. Convectional
13. Which of the following statements is **NOT TRUE** about traditional agriculture?
 A. Land was communally owned
 B. Simple tools were used
 C. Few cash crops were grown
 D. Bush fallowing was practiced
14. The following groups of African countries was colonized by the Portuguese. Which one?
 A. Malawi, Zambia, Guinea Bissau
 B. Madagascar, Angola, Namibia
 C. Algeria, Somalia, Chad
 D. Cape verde islands, Mozambique, Guinea Bissau

15. Which factor explains why Nairobi is cooler than Mombasa?
 A. Nairobi is far from the sea
 B. Mombasa experiences land breezes
 C. Mombasa is far from the equator
 D. Nairobi is higher above sea level than Mombasa
16. The following groups of mountains were **NOT** formed in the same process **EXCEPT**
 A. Atlas, Ruwenzori and Pare
 B. Pare, Usambara and Ruwenzori
 C. Ruwenzori, Usambara and Drakensburg
 D. Atlas, Pare and Drakensburg
17. Traditionally a sudden rise in temperature indicated
 A. The weather would be sunny and hot
 B. The onset of rains
 C. The end of a cold period
 D. That it would be windy
18. Customary marriages and Islamic religious marriages have one thing in common. Which one?
 A. There are marriage banns
 B. A marriage certificate is used
 C. They both allow polygamy
 D. They are officiated by magistrates
19. The Aswan High Dam has benefitted the Egyptians **MAINLY** by
 A. Making it possible to irrigate more land
 B. Improving water transport
 C. Attracting tourists to the country
 D. Generating electricity for domestic use

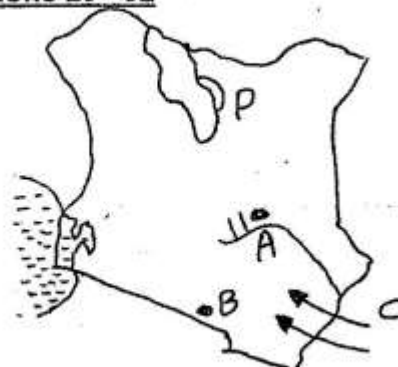
Study the map of Eastern Africa and then answer Questions 20 - 24



20. Which of the following statements is **TRUE** about the country marked 1?
 A. It was never colonized
 B. It is a major tea producer
 C. It is the headquarters of COMESA
 D. It is headed by a president

21. The town marked 2 is
 A. Khartoum B. Asmara
 C. Juba D. Kinshasa
22. The country marked 3 has a low population **MAINLY** because it is
 A. Occupied by wild animals
 B. Receives inadequate rainfall
 C. Is invaded by Al shabaab
 D. A flood prone area
23. The river marked 4 is river
 A. Rufiji B. Shebelle
 C. Omo D. Ruvuma
24. The country marked 5 was colonized by
 A. Britain B. Italy
 C. France D. Germany
25. A street boy was beaten to death for stealing a lady's hand bag. Which of the following rights was he denied?
 A. Right to own property
 B. Right to peace
 C. Right to freedom
 D. Right to life
26. Which of the following reasons led to the decline of the old Ghana Kingdom?
 A. Lack of clearly defined boundaries of the kingdom
 B. Loss of control of Trans - Saharan trade
 C. Centralised system of government
 D. The death of Samoure Toure
27. The **BEST** way to curb drug abuse in schools is by
 A. Arresting drug abusers
 B. Teaching pupils the effects of drugs
 C. Making stringent rules in school
 D. Demolishing all bars around the school
28. Below are characteristics of a river stage
 (i) *The river bed is V-shaped*
 (ii) *The river bed is U-shaped*
 (iii) *Deposition is very high*
 (iv) *Sideway erosion is very high*
 (v) *Forward erosion is very strong*
 (vi) *The water velocity is very high*
 Which of the following statements describe a river in its youthful stage?
 A. (ii), (iii), (v)
 B. (i), (iii), (v)
 C. (ii), (iv), (vi)
 D. (i), (ii), (ii)

Use the map of Kenya below to answer Questions 29 - 32



29. The irrigation scheme marked A is **MAINLY** used for growing
 A. Rice B. Maize
 C. Cotton D. Onions
30. The mineral mined at the place marked B is used for the following purposes **EXCEPT**
 A. Making cans
 B. Refining edible oils
 C. Making glasses
 D. Making soap
31. The people who migrated into Kenya using the route marked C led to all of the following **EXCEPT**?
 A. Growth of towns
 B. Emergence of a new language
 C. Introduction of a new religion
 D. Introduction of agricultural activities
32. The shaded area marked P is set aside for
 A. Protecting wildlife
 B. Conserving wildlife
 C. Practising fishing
 D. Setting the landlords
33. One of the following may lead to the loss of citizenship in Kenya when one is?
 A. Refuses, to vote in the election
 B. Marries a foreigner
 C. Reveals the secrets of the country during war
 D. Is a patriot
34. Which one of the following was the third group of Luo ancestors to migrate from Uganda to Kenya?
 A. Joka- Owiny B. Joka-Otieno
 C. Joka-Jok D. Joka-Omollo

35. The **MAIN** role of the deputy head teacher in a public primary school is to
 A. Admit new pupils
 B. Ensure discipline is maintained
 C. Collect all school funds
 D. Punish all wrong doers in the school
36. What is the **MAIN** effect of rural - urban migration in Kenya today?
 A. Congestion in urban areas
 B. Development of urban areas
 C. Adequate social services in rural areas
 D. Increased food production
37. After one is elected the speaker of the National Assembly, he / she is sworn in by
 A. President
 B. Member of parliament
 C. Clerk of the National assembly
 D. Chief Justice
38. Which of the following shows how persons with special needs are provided with equal opportunities?
 A. Discriminated against
 B. Hidden by parents
 C. Elected to parliament
 D. Denied going to school
39. The time at Ifni Morocco is 10 am. What time is it at Cairo 30°E. Ifni is 10°W?
 A. 11.20 am B. 12.40 pm
 C. 8.40 a.m D. 7.20 am
40. The earliest human - like creature Australopithecus evolved from
 A. Homohabilis B. Ramapithecus
 C. Homo erect us D. Homo sapiens
41. Which one of the following facts about the Kenya population structure and composition is False?
 A. The youthful population makes up about 2057% of the total population
 B. The infant population is about 15% of the total population
 C. Women aged over 65 years are less than men of the same age
 D. Young people are less than the working population
42. The Kenya National Anthem is important because it
 A. was first sung on independence day
 B. is a source of entertainment
 C. is sung by everybody in the country
 D. is a symbol of national unity
43. The following are conditions necessary for the growth of a certain crop in Kenya
 (i) **Moderate rainfall when it is growing**
 (ii) **Cool temperature are ideal for its growth**
 (iii) **Warm and dry sunny weather especially during harvesting**
 (iv) **Gentle sloping land to allow drainage and use of machine**
 Which one of the following crops requires the conditions mentioned above?
 A. Tea B. Coffee
 C. Wheat D. Cocoa
44. Which one of the following towns was started as a trading centre?
 A. Thika B. Malindi
 C. Nakuru D. Garissa
45. The **MAIN** reason why the organization of African unity (O.A.U) was changed to African - union (A.U) in 2002 was that?
 A. The OAU had achieved greater unity and solidarity
 B. It did not encourage international co-operation among the members
 C. Its objectives had become irrelevant and was unable to solve conflicts
 D. It was unable to conduct research in Science and technology
46. Who among the following is the accounting officer of the Judiciary?
 A. Chief Justice
 B. Attorney General
 C. Chief Registrar of the judiciary
 D. High court judge
47. Meat, leather and tea industries are examples of
 A. Manufacturing industries
 B. Processing industries
 C. Service industries
 D. Assembly industries
48. Which one of the following is an achievement of former president Daniel Arap Moi?
 A. He introduced the spirit of Harambee
 B. He introduced free primary education
 C. He led in the formation of East African Community
 D. He restored multi - party democracy
49. The following statements about artifacts are correct **EXCEPT**
 A. Cultural artifacts are things that were made in the past
 B. Artifacts represents traditional ways of life
 C. They are collected and preserved in National Parks
 D. They were made using Local resources

50. Who among the following was a German trader to Eastern Africa?
 A. Carl Peters
 B. William Mackinnon
 C. Ludwig Kraft
 D. Sayyid Said
51. Hills that have resisted erosion over a long period are called?
 A. Inselbergs
 B. Ranges
 C. Volcanoes
 D. Blocks
52. The following are characteristics of a certain vegetation in Africa
 (i) *Plants have freshly bulbous roots*
 (ii) *Trees have waxy and shiny leaves*
 (iii) *Trees have thick barks and are cone-shaped*
 (iv) *Trees are of medium height*
 The vegetation described above is called?
 A. Mediterranean
 B. Equatorial
 C. Montane
 D. Desert
53. The **MAIN** reason why Jua - kali industries are found in many parts of the country is that?
 A. It brought the country a lot of income from importation
 B. It is the main source of employment to the youth
 C. The goods are cheap and readily available
 D. It requires little capital to start
54. Which one of the following was not a cause of Hehe rebellion?
 A. Loss of their independence
 B. Forced taxation
 C. Undermining of their leaders by Germans
 D. Appointment of local Africans to replace Arabs
55. The **MAIN** challenge facing battery method of poultry farming in Kenya is?
 A. Lack of enough land
 B. Lack of enough chicken
 C. It is expensive to operate
 D. Lack of technological know how
56. Which one of the following was a result of the participation of African soldiers in the second world war?
 A. African soldiers introduced cash crops farming in their countries
 B. African soldiers were encouraged to fight for the independence of their countries
 C. African soldiers were allowed to import firearms
 D. African soldiers were given land by the colonial government

57. Which of the following tourist attractions in Africa is **CORRECTLY** matched with the country where it is found?
- | <u>Tourist attraction</u> | <u>Country</u> |
|---------------------------|----------------|
| A. Sandy beaches | Niger |
| B. Victoria falls | Zimbabwe |
| C. Pyramids | Ethiopia |
| D. Gedi ruins | Somalia |
58. Which one of the following is a sign of democracy?
 A. Election are held regularly
 B. Pupils choose clubs they want to join
 C. Cleaning of class shall be done by girls only
 D. Workers carry out the orders given without complaining
59. Which of the following was a major constitutional change made in Kenya in 1982?
 A. President Moi retired voluntarily
 B. Kenya was made a single party state
 C. There was an attempted coup
 D. Kenya was made a republic
60. The following are major political events in Kenya. Which one took place last?
 A. Appointment of the first African Minister
 B. Formation of KANU
 C. Election of eight Africans to the LEGCO
 D. Arrest of Jomo Kenyatta

CRE SECTION

61. The **MAIN** teaching of the Genesis stories of creation is that
 A. Human beings were the last to be created
 B. Human beings were created to multiply
 C. God is the creator of the universe
 D. God blessed the day of rest
62. Which one of the following was not used in the covenant between God and Abraham?
 A. Ram
 B. Oxen
 C. Goat
 D. Pigeon
63. Which one of the following is a way through which Christian should obey God's command - to subdue and conquer the earth?
 A. Protecting their crops
 B. Exploring new lands
 C. Conserving the environment
 D. Protecting their crops from wild animals

64. Moses broke the stone tablets that he brought from Mt. Sinai because
- The Israelites disobeyed God
 - The stone tablets were too heavy to carry
 - The Israelites did not need them
 - The content of the tablets were wrongly written
65. What is the difference between secular values and Christian values?
- Christians struggle to obtain Christian values, and bribe to obtain secular values
 - The Holy Spirit helps Christians to have Christian values while people help us acquire secular values
 - Secular values are inborn while Christian values are taught
 - The Holy Spirit helps people to have secular values and others helps us have Christian values
66. The Egyptian Pharaoh allowed the Israelites to leave Egypt after
- Moses killed the Egyptians
 - God sent diseases to Egyptians
 - God caused floods over Egypt
 - God's angel killed the Egyptian first born males
67. The following are the reasons which made Adam and Eve to be thrown out of the garden of Eden **EXCEPT** one
- they spoke to the snake
 - they destroyed what God had created
 - they ate the forbidden fruit
 - they realized that they were naked
68. Which one of the following statement **BEST** explains why God was unhappy with King Saul?
- He married many wives
 - He wanted to kill David
 - His disobeyed God's command as instructed by Samuel
 - He killed himself at Gilboah
69. The contest between prophet Elijah and the prophets of Baal took place at
- Mount Cannel
 - Mt. Sinai
 - River Jordan
 - Red sea
70. According to Psalms: 14 "You make grass grow for the cattle and plants for man to use so that he can grow his crops" The verse suggests all the following **EXCEPT**
- God cares for animals
 - God cares for man
 - Man should take care of animals
 - Animals are not among God's creation
71. Which one of the following statements about Jesus shows that we are all equal before God?
- He raised Lazarus
 - He raised Jairaus daughter
 - He healed ten leapers
 - He healed Simon's mother-in-law
72. Which one of the following is **TRUE** about prophet Micah in relation to the birth of Jesus
- He would be the King of the Jews
 - He would be born in Bethlehem
 - He would set the captives free
 - He would be born of a virgin
73. Which one of the following is **NOT** a destructive activity?
- Debate on drugs
 - Immorality
 - Use of drugs
 - Smoking bhang
74. Both African Traditional customs and Christian believe that life begins when
- A child is born
 - Adolescence starts
 - Conception takes place
 - One is initiated
75. What was the purpose of presenting baby Jesus by his parents to the temple as the law of Moses commanded?
- Purification
 - Dedication
 - Baptism
 - Naming
76. Which of the following activities done by Christians demonstrates the gift of the Holy Spirit?
- Sharing with the needy
 - Living in harmony with others
 - Speaking in tongues
 - Telling the truth all the time
77. One of the following is the intention of initiation. It helps initiates to
- Serve God
 - Begin living a new life
 - Recognize their parents and relatives
 - Be strong and defend their tribes

78. The best way to use your leisure time is by
 A. Watching football
 B. Serving the needy in the society
 C. Attending a Church service
 D. Visiting friends and relatives
79. Which one of the following is **NOT** a factor to consider when choosing a marriage partner?
 A. HIV/AIDS
 B. Character
 C. Wealth
 D. Age
80. Then he led them out of the city as far as Bethany, where he raised his hands and blessed them. Which event is described above?
 A. Resurrection of Jesus
 B. Arrest of Jesus
 C. Ascension of Jesus back to heaven
 D. The day of Pentecost
81. The ancestors in African Traditional Society were **MAINLY** appeased through
 A. Pouring libation
 B. Holding dances for them
 C. Lighting fires
 D. Composing songs for them
82. The rich man who offend his tomb for the burial of Jesus was accompanied by _____ to bury the body of Jesus
 A. Simon of Cyrene
 B. Joseph of Arimathea
 C. Peter
 D. Nicodemus
83. James has a friend who has started taking alcohol claiming that it make his have a good night sleep. As a Christian, what is the **BEST** advice James should give his friend
 A. Explain to him the effects of alcohol and how to stop it
 B. Inform his friend about it
 C. Ask his friend to do it privately
 D. Beat him and command him to stop
84. What message did John the Baptist give to the soldiers in his preaching
 A. To collect more than is needed
 B. To give one shirt to the poor
 C. To be contented with their pay
 D. To work all day and night
85. During the last supper Jesus told his disciples to share his blood and body. How do **Christians** exercise this today ?
 A. By taking the Holy Communion
 B. By helping the needy
 C. By being baptized
 D. By being anointed to be priests
86. Which of the following **BEST** explains why Christians are against sex before marriage?
 A. It results to early marriage
 B. It leads to sexually transmitted diseases
 C. It is a form of sexual misuse and God forbids it
 D. It may lead to school droplets
87. Which of the following is true about Lydia who lived in the town of Thytra?
 A. She was raised from dead by Peter
 B. She made tents together with Paul
 C. She had seven demons
 D. She was baptized with the people of her house by Paul
88. In which of the following did King Solomon' **MAINLY** do against God's will?
 A. Spending a lot of money to build the temple
 B. Married many wives and had other concubines
 C. Signed treaties with foreign countries
 D. Allowed worship of idols in Israel
89. "Go to King Ahab of Samaria, you will find him in Naboth's vineyard about to take position of it" These words were spoken by God to
 A. Elijah
 B. Elisha
 C. Micah
 D. Nathan
90. Which one of the following schools did the early missionaries to Kenya **NOT** start?
 A. Mangu High School
 B. Our lady of Mercy High School
 C. St. Mary's Yala High School
 D. Alliance High School