

BARINGO PRE-MOCK EXAMS

STANDARD EIGHT - YEAR 2019

SOCIAL STUDIES & C.R.E

TIME: 2 HRS. 15 MINS.

READ THESE INSTRUCTIONS CAREFULLY

1. You have been given this question paper and a separate answer sheet. The question paper contains 90 questions.
2. Do any necessary rough work in this paper.
3. When you have chosen your answer, mark it on the ANSWER SHEET, not in this question paper.

HOW TO USE THE ANSWER SHEET

4. Use an ordinary pencil only.
5. Make sure that you have written on the answer sheet.

YOUR INDEX NUMBER

YOUR NAME

NAME OF YOUR SCHOOL

6. By drawing a dark line inside the correct numbered boxes mark your full Index Number (i.e. School Code Number and the three-figure Candidate's Number) in the grid near the top of the answer sheet.
7. Do not make any marks outside the boxes.
8. Keep the sheet as clean as possible and do not fold it.
9. For each of the questions 1 - 90 four answers are given. The answers are lettered A, B, C, D. In each case only ONE of the four answers is correct. Choose the correct answer.
10. On the answer sheet the correct answer is to be shown by drawing a dark line inside the box in which the letter you have chosen is written.

Example:-

In the Question Paper:

11. Which one is a role of parents to their children?
A. They are advisors -
B. They provide food
C. They provide security
D. They take care of their property

The correct answer is (A) (They are advisors)

On the answer sheet:

11 [A] [B] [C] [D] 25 [A] [B] [C] [D] 33 [A] [B] [C] [D] 44 [A] [B] [C] [D] 50 [A] [B] [C] [D]

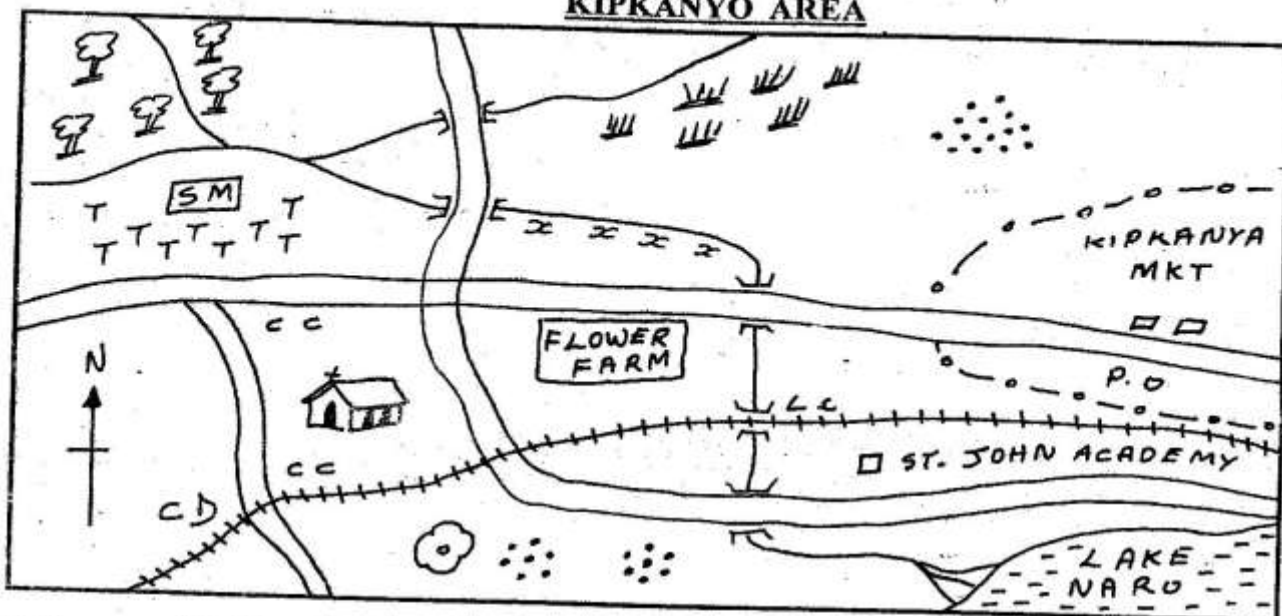
In the First set, the box with the letter A printed in it is marked.

11. Your dark line MUST be within the box.
12. For each question ONLY ONE box is to be marked in each set of four boxes.

This Question Paper consists of 90 Printed Questions.

TURN OVER

KIPKANYO AREA



KEY Scale 0 1 2 3 4 5 6 7 8 9 10 11 12 13 KM

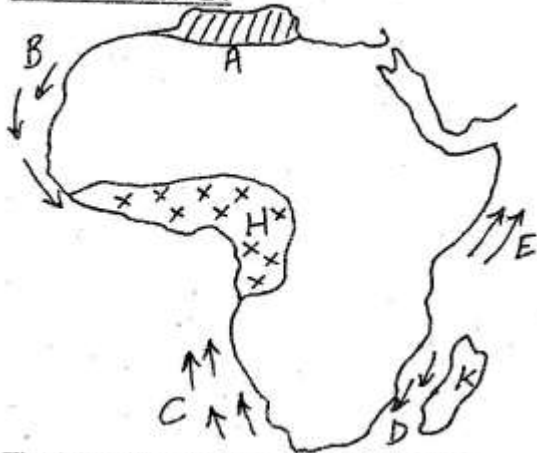
Tea T T T T T	Railway —————+—————	Huts •••••	Coffee X X X X
Level crossing L.C	Grass 	Murrum road //	Post office P.O
Urban council boundary -o-o-o-o-	Cattle dip C.D	Chief's camp C.C	

Study the map of Kipkanyo area and answer question 1-7

1. The general climate conditions in the above area is
 - A. cool and dry
 - B. hot and dry
 - C. cool and wet
 - D. hot and wet
2. The general direction of the saw mill from the lake is
 - A. N.E
 - B. S.W
 - C. S.E
 - D. N.W
3. The main economic activity in the above area is
 - A. lumbering
 - B. livestock keeping
 - C. cultivation
 - D. fishing
4. The type of settlement in the above area is
 - A. linear
 - B. nucleated
 - C. sparse
 - D. even
5. Which of the following features is formed by R. Endo as it enters lake Naro?
 - A. Estuary
 - B. Delta
 - C. Confluence
 - D. Tributary
6. The people of Kipkanyo area are _____ by religion
 - A. christians
 - B. atheistics
 - C. traditionalist
 - D. muslims
7. Which is the general direction of flow of river Endo?
 - A. North to south
 - B. North west to south east
 - C. North to south east
 - D. South east to north west

8. The study of human remains and his tools is known as
 A. anthropology B. archaeology
 C. geography D. fossils
9. Which combinations of the lakes below are found in the eastern Rift Valley?
 A. Albert, Edward, Banyori
 B. Chala, Bisini, Eyasi
 C. Nakuru, Shala, Magadi
 D. Abaya, Chamo, Rukwa
10. Three of the following statements are true of the population of Kenya and India. Which one does **NOT**?
 A. The standard of living is low
 B. Birth and death rate are low
 C. Most of the population is aged below 20 years
 D. Majority of the people are employed in agriculture
11. Which one of the following irrigation schemes was started in Kenya in order to settle the landless people
 A. Bunyala B. Ahero
 C. Mwea D. Galole
12. Which of the following factors is required to help develop deep sea fishing along Kenya coast?
 A. Increasing the number of fishing vessels
 B. Provision of refrigeration facilities
 C. Establishing of fishing cooperatives
 D. Promoting fish eating among the people
13. The main tourist attraction along the coast of Kenya is
 A. Wildlife B. Baringo
 C. Sandy beaches D. Scenery
14. Which of the following factors was the main reason behind the location of the cement factory at Bamburi?
 A. Government decision
 B. Presence of raw materials
 C. Bulkiness of raw materials
 D. Presence of a large market
15. Which of the following is the main reason why the government encouraged the setting up of Jua kali industries?
 A. Use of waste iron materials
 B. Production of cheap goods
 C. Creation of job opportunities
 D. They require little space
16. The main problem facing urban centres in Kenya is
 A. poor planning of the town
 B. Mismanagement of the towns
 C. Inadequate water supply
 D. Inadequate capital
17. This road sign tells a motorist that
-
- A. Stop at once
 B. This is a dangerous spot
 C. Drive carefully
 D. The road is crossed
18. Three of the forms of communication can be used by the government to pass information to Wananchi. Which one would not be appropriate?
 A. Television B. Newspaper
 C. Radio D. Internet
19. Three of the following readers were elected to the Legco during the election of 1957. Who was **NOT**?
 A. Jomo Kenyatta
 B. Oginga Odinga
 C. Daniel Arap Moi
 D. Tom Mboya
20. Three of the following African communities are members of the AU. Which is **NOT**?
 A. Egypt B. South Africa
 C. Morocco D. Liberia

Use the map of Africa below to answer questions 21- 24



21. The island marked K was colonized by:-
A. French B. Portugese
C. British D. Germany
22. Which of the following crops are likely to be grown in the area marked A?
A. Groundnuts B. Citrus fruit
C. Cocoa D. Cloves
23. The ocean current marked D is known as
A. Canary current B. Agulhas current
C. Guinea current D. Somali current
24. The climatic conditions of the region marked H is
A. Cool and wet B. Hot and dry
C. Hot and wet D. Cool and dry
25. It is 1:00pm in Mogadishu 45°E What is the time in town in 15° West?
A. 9:00am B. 9:00pm
C. 10:00 am D. 9:50am

Use the map of Kenya to answer questions 26 and 27.



26. The community that used route W is called
A. Abakuria B. Akamba
C. Kalenjin D. Turkana

27. The national park marked X is known as
A. Shimba hills B. Bom
C. Ruma D. Sibiloi

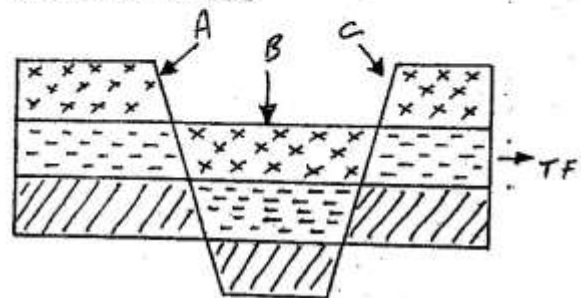
28.



The above type of erosion is called

- A. Rill erosion B. Gully erosion
 - C. Splash erosion D. Sheet erosion
29. A costumer cooperative is a cooperative that mainly deals with
A. Purchasing land for the farmers
B. Buying farm in large quantities
C Marketing the farmers produce
D. Employing members of the cooperative

Use the diagram below to answer questions 30 - 32.



30. The above diagram was formed through the process of
A. Folding B. Downwarping
C. Faulting D. Erosion
31. The part labeled C is known as
A. Fault B. Syncline
C. Escarpment D. Horst
32. Which of the following dams is correctly matched with the rivers where they are constructed?
A. Akosombo dam- R. Niger
B. Kariba dam-R. Volta
C. Masinga dam - R. Zambezi
D. Aswan High dam- R. Nile

33. In which country did the French use the policy of assimilation?
 A. Algeria B. Senegal
 C. Morocco D. Tunisia
34. Which of the following is a negative effect of colonial rule?
 A. Forced payment of tax
 B. Introduction of new crops
 C. Construction of the railway
 D. Abolition of the slave trade
35. Which of the following groups of crops is grown in horticultural farms in Kenya?
 A. tea, kale, lentils, tomatoes
 B. Spinach, cabbage, turnips, french bean.
 C. Cabbage, french beans, turnips coffee
 D. Orchids, carnations, tea, coffee chillies
36. An instrument which is used to measure strength and speed of wind is called
 A. Barometer B. Anemometer
 C. Windvane D. Windssock
37. Three of the following communities have one thing in common. Which one **DOES NOT**?
 A. Maasai B. Karamojong
 C. Fulani D. Luo
38. Which of the following countries would you find the Tigres and Amhara?
 A. Sudan B. Zaire
 C. Ethiopia D. Somalia
39. Which Mineral is **NOT** matched with the correct place where they are mined.
- | Mineral | Where mined |
|--------------|-------------|
| A. Limestone | Bamburi |
| B. Soda Ash | Magadi |
| C. Diamond | Mwandui |
| D. Gold | Kilembe |
40. Which of the following is not a language group in Eastern Africa?
 A. Bantus B. Cushites
 C. Khoisan D. Nilotes
41. Which one of the following is not an irrigation scheme found in river Tana?
 A. Kibirigwi B. Bura Galoleni
 C. Mwea - Tebere D. Ahero
42. Which country hoisted the conference at which the partition of Africa was discussed?
 A. France B. Germany
 C. Spain D. Britain
43. (i) Formed in 1960
 (ii) One of the founders became the president of Kenya
 (iii) Was official opposition party
 The above described political party is
 A. A.P.P B. K.A.D.U
 C. K.A.N.U D. K.PU
44. Three of the following are problems facing urban centers in Africa. Which one is **NOT**?
 A. Spread of HIV/AIDS
 B. Slum development
 C. Sufficient social amenities
 D. Traffic congestion
45. Which of the following is the main function of Thika town?
 A. it is a recreational center
 B. it is an industrial center
 C. it is an agricultural center
 D. it is a tourist centre
46. Who among of the following leader collaborated with the European to establish colonial rule?
 A. Mekatilili
 B. Kabaka Mwanga
 C. Koitalel Arap Samoei
 D. King Lewanika
47. Which of the following colonial rulers used the policy of paternalism to administered her colony?
 A. Portugese B. Belgians
 C. France D. Germans

48. Who among the following officials swears in the president?
 A. Clerk to the National Assembly
 B. The Speaker
 C. The Attorney General
 D. The Chief Justice
49. Which of the following is problem facing forests in Kenya
 A. Illegal logging
 B. Afforestation
 C. Agroforestry
 D. Soil erosion
50. In order to register as a voter in parliamentary elections in Kenya one must have attained the minimum age of?
 A. 55 years B. 35 years
 C. 21 years D. 18 years
51. A good citizen should do all of the following EXCEPT :-
 A. Vote during national elections
 B. Pay taxes on time
 C. Own property anywhere they wish to do business
 D. Work hard in whatever place of their choice
52. Below are symbols of national unity. Which one is NOT?
 A. National flag
 B. National language
 C. National Anthem
 D. National school
53. Which one of the following is the MAIN benefit of national unity?
 A. People live in harmony
 B. People easily share resources
 C. People interact freely
 D. People move freely in the country
54. Which of the following election process takes place last?
 A. Purchasing of election materials
 B. Announcing of election dates
 C. Recruitment of election officials
 D. Identifying of polling stations
55. The type of democracy used in Kenya is called
 A. Pure democracy
 B. Parliamentary democracy
 C. Presidential democracy
 D. Combined presidential and parliamentary democracy
56. What is parliamentary Bill?
 A. it is a law made in parliament
 B. it is a document containing parliamentary proceedings
 C. it is a proposed piece of legislation
 D. it is a law that has been assented by the president
57. Three of the following are ways through which local authorities raise their revenue. Which one is NOT?
 A. Collection of licence fees
 B. Imposing fines on law breakers
 C. Taxing residents income
 D. Levying grounds rates on land
58. Which of the following months of the year is the sun overhead in the tropic of Capricorn?
 A. September B. June
 C. December D. March
59. Which of the following officers advises the government of Kenya on legal matters?
 A. The vice president
 B. The attorney general
 C. The court prosecutor
 D. The chief magistrate
60. The most senior civil servant in the Governor ministry in Kenya is the
 A. Under Secretary
 B. Auditor General
 C. Solicitor General
 D. Cabinet secretary

RELIGIOUS EDUCATION

61. During the sinaitic covenant, God revealed himself in all the following **EXCEPT**
- A. Thunder ,lightning and earth quakes
 - B. Thick cloud
 - C. Aloud trumpet blast and thick cloud
 - D. Smoking fire pot and flaming torch
62. Which one of the following is an apocalypse?
- A. Revelation
 - B. Isaiah
 - C. Jeremiah
 - D. Daniel
63. Which one of the following promises was **NOT** made to king David?
- A. He will be protected from God
 - B. His house will be of kings
 - C. He will die at old age
 - D. He will be great among kings
64. Who among the following was not a judge in Israel?
- A. Samwel
 - B. Ehliud
 - C. Barak
 - D. Shamgar
65. Which one of the following activities was the main mission of Jesus?
- A. To protect the weak
 - B. To cure the sick
 - C. To show God's power
 - D. To proclaim salvation
66. When Herode died Jesus was taken back to Nazareth as said by prophet
- A. Hosea
 - B. Isaiah
 - C. Jeremiah
 - D. Micah
67. From Lk. 13:10-17, Jesus healed a crippled woman. The main lesson we learn from this miracle is that:-
- A. Seek God in prayer
 - B. Jesus is the Lord of Sabbath
 - C. Have faith
 - D. Always be faithful
68. "Now Lord, you have kept your promise, and you may let your servant go in peace" T.k 2:29, Who said these words?
- A. Prohetess Anna
 - B. John the Baptist
 - C. Simeon
 - D. Phanuel
69. The main reason for christian missionaries coming to Kenya was
- A. To introduce formal education
 - B. To stop slave trade
 - C. Following the great commission
 - D. To establish colonial rule
70. The important subject taught in early church schools was
- A. Hygine
 - B. Bible knowledge
 - C. Arithmetics
 - D. English
71. Which of the following are christian value?
- A. Wealth, purity, money, justice
 - B. Fame, wisdom, peace, justice
 - C. Mercy, charity, honest, humility
 - D. Power, pride, humility, peace
72. The first two christian missionaries in Kenya were
- A. John Rebman and David Livingstone
 - B. Stanley Speke and Krapf
 - C. John Rebman and Ludwing Krapf
 - D. Stanley Speke and David Livingstone
73. Which of the following was a way through which people got new life in African traditional society
- A. Mining
 - B. Initiation
 - C. Marriage
 - D. Birth
74. All are possible causes of death in Traditional Africans society, which one is not?
- A. Witch craft
 - B. Curses
 - C. Diseases
 - D. Age
75. How will you take care of your brother who is HIV positive?
- A. Help him see a witch doctor
 - B. Advise him to have sex with a virgin
 - C. Encourage him to eat well and seek medical help
 - D. Advise him to commit suicide

76. Sexual misuse results into the following except
- unwanted pregnancies
 - diseases
 - good life full of pleasure
77. Which one of the following statement is a teaching of Jesus from the sermon on the mount?
- "I am the way the truth and the life
 - I am the resurrection and the life
 - "Happy are those who work for peace for they shall be called children of God
 - No one can enter the kingdom of God unless he is born of water and the spirit
78. Man contributes to the continuity of creation by
- Positively polluting water
 - Mining intensively
 - Afforestation and conservation
 - Taking no part in controlling soil erosion
79. African traditionally responded to God though the following ways except
- Performing rites to mark special occasions
 - Taking the holy communion
 - Having special people to perform rituals
 - Having sacred places of worship
80. The king who had James the brother of John put to death by the sword during persecution of some members of the church was (Acts 12:1 - 5)
- Xerxes
 - Herod
 - Pontius pilate
 - Saul
81. The following are some of the ways by which christians undergo suffering today except
- exploitation
 - rejection
 - recognition
 - deniel
82. Which one of the following isn't characteristic of prayer?
- Bought for a price
 - Brings unity
 - Is a mean of talking to God
 - Takes us closer to God
83. To whom did Simon the sorcerer offered the money in order to buy the power of the holy spirit?
- Peter and John
 - Paul and Peter
 - Andrew and Philips
 - Barnabas and Silas
84. During the baptism of Jesus Christ in River Jordan the _____ descended on him in form _____
- Voice of God, Holy spirit
 - Holy Spirit, Dove
 - Dove, Holy spirit
 - Holy spirit, Voice of God
85. When Jesus was transfigured, he was with three of his disciples who were
- Peter, James and John
 - Matthias, James and Andrew
 - Thomas, Judas and Peter
 - James, John and Andrew
86. The wise men from the east carried the following with them except
- Gold, silver, and frankincense
 - Silver myrrh and frankincense
 - Gold, frackincense and myrrh
 - money, gold and silver
87. The reason why God created a woman was to
- be a helper of man
 - be a servant of man
 - please the man
 - make his creation perfect
88. Eternal life begins when
- one believes in Jesus christ
 - one becomes a member of the church
 - after death
 - immediately one is born
90. Which one of the following is incorrect use of our leisure time?
- Participating in school choir
 - Visiting the sick, orphans and windows
 - Playing loud music in a compound shared with neighbours
 - Meditating in the word of God