

# KCPE

## KENYA NATIONAL PREDICTION TESTS

### SOCIAL STUDIES AND RELIGIOUS EDUCATION

**Time: 2 hours 15 minutes**

#### INSTRUCTIONS TO CANDIDATES (Please read these instructions carefully)

1. You have been given this question booklet and a separate answer sheet. The question booklet contains 90 questions.
2. Do any necessary rough work in this booklet.
3. When you have chosen your answer, mark it on the **ANSWER SHEET**, not in this question booklet.

#### HOW TO USE THE ANSWER SHEET

4. Use only an ordinary pencil.
5. Make sure that you have written on the answer sheet:  
**YOUR INDEX NUMBER**  
**YOUR NAME**  
**NAME OF YOUR SCHOOL**
6. By drawing a **dark line** inside the correct numbered boxes mark your full Index Number (i.e. School Code Number and the three-figure Candidate's Number) in the grid near the top of the answer sheet.
7. Do not make any marks outside the boxes.
8. Keep the sheet as clean as possible and do not fold it.
9. For each of the questions 1-90 four answers are given. The answers are lettered A, B, C and D. In each case only **ONE** of the four answers is correct. Choose the correct answer.
10. On the answer sheet, show the correct answer by drawing a **dark line** inside the box in which the letter you have chosen is written.

#### Example

#### In the Question Booklet:

44. The method used by the Portuguese to administer Mozambique was

- A. Assimilation
- B. Indirect rule
- C. Association policy
- D. Direct rule

The correct answer is "D".

#### On the answer sheet:

A  B  C  D     A  B  C  D     A  B  C  D     A  B  C  D     A  B  C  D

In the set of boxes numbered 44, the box with the letter **D** printed in it is marked.

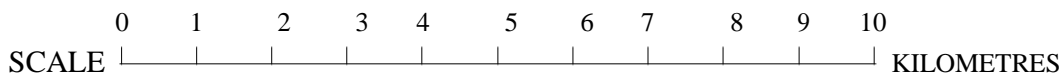
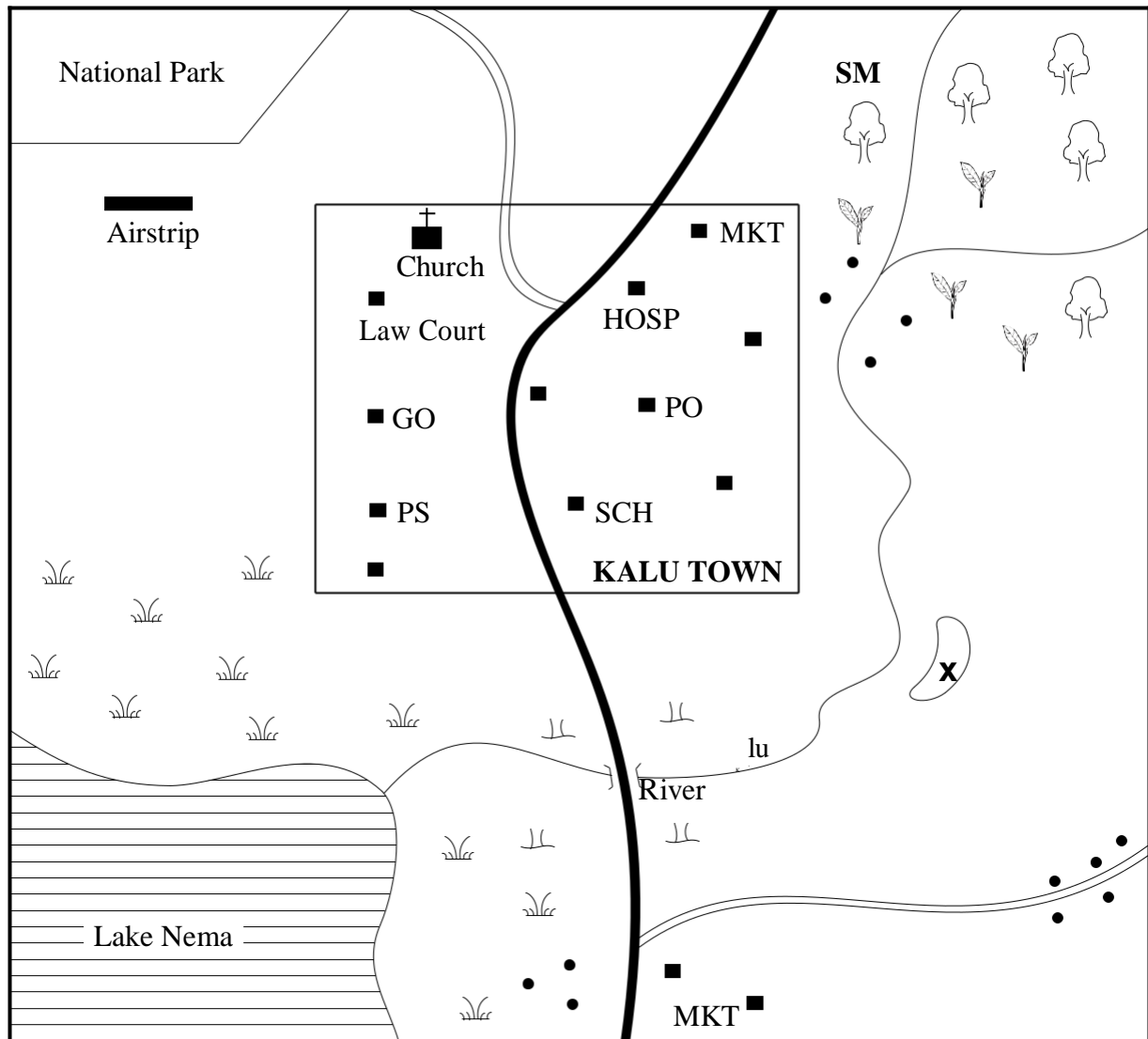
11. Your **dark line** **MUST** be within the box.
12. For each question **ONLY ONE** box is to be marked in each set of four boxes.

**This question paper consists of 12 printed pages.**

© Mtihani Bora

**TURN OVER**

**PART I: SOCIAL STUDIES**  
**KALU AREA**



**KEY:**

	Tarmac Road		Forest	GO	Governor's Office
	Murram Road		Grass	PS	Police Station
	Town Boundary		Shrub	PO	Post Office
	Permanent Buildings		River	CO	County Office
	House		Tea	MKT	Market
	Bridge			SM	Saw Mill
				SCH	School
				HOSP	Hospital

Study the map of Kalu Area to answer questions

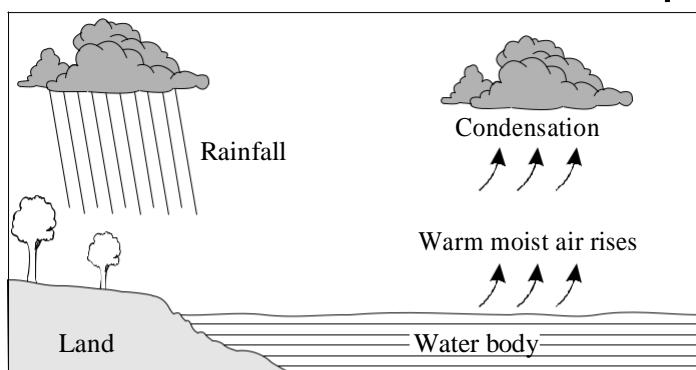
1 - 7

1. The land in Kalu area rises towards the
  - A. North
  - B. South
  - C. North East
  - D. South West
2. The climate to the East of Kalu area can be described as
  - A. hot and dry
  - B. cool and wet
  - C. hot and wet
  - D. cool and dry
3. The following economic activities are carried out in Kalu area **except**
  - A. tourism
  - B. fishing
  - C. farming
  - D. lumbering
4. The feature labelled **X** at the course of the river Kalu has been formed as a result of
  - A. glaciation
  - B. deposition
  - C. soil erosion
  - D. down warping
5. Which one of the following pairs of goods is **not** likely to be sold in the markets in Kalu area?
  - A. Hoes and pangas
  - B. Clothes and stationeries
  - C. Fish and tea leaves
  - D. Timber and fertilisers
6. Which one of the following is the **main** evidence that Kalu area has adequate security? Presence of the
  - A. law court
  - B. police station
  - C. governor's Office
  - D. permanent buildings.
7. Which one of the following services is **not** provided in Kalu town?
  - A. Religious services
  - B. Health services
  - C. Educational services
  - D. Recreational services
8. Countries in North Africa experience longer hours of daylight than darkness during the months of
  - A. March to May
  - B. June to August
  - C. December to February
  - D. September to November
9. The following are weather measuring instruments. Which among them is kept in a Stevenson's screen?
  - A. Anemometer and thermometer
  - B. Barometer and hygrometer
  - C. Thermometer and hygrometer
  - D. Windvane and anemometer
10. The reason for sending information by the government to the people over the radio is **mainly** because
  - A. radios make vernacular announcements
  - B. the message can be repeated
  - C. Kiswahili is understood by many people
  - D. radios are mostly found in many homes
11. The system of government that allows the citizens to elect leaders of their own choice is
  - A. dictatorship government
  - B. democratic government
  - C. superior government
  - D. representative government
12. The following are countries in Africa:
  - (i) *Libya*
  - (ii) *Sudan*
  - (iii) *Mozambique*
  - (iv) *Ghana*
  - (v) *Djibouti*

Which order shows their attainment of independence from the first one to the last?

  - A. (i), (iii), (iv), (v), (ii)
  - B. (iii), (i), (ii), (iv), (v)
  - C. (iv), (ii), (i), (iii), (v)
  - D. (i), (ii), (iv), (iii), (v)

Use the diagram below to answer question 13



13. In which one of the following parts of Eastern Africa is the type of rainfall shown above commonly experienced?
- In the highlands
  - On the slopes of Ruwenzori mountain
  - Around Lake Victoria
  - On the slopes of Mt. Kenya

14. Below are statements about a certain community in Eastern Africa during the pre-colonial period:
- It was organised into chiefdoms
  - It was ruled by hereditary chiefs
  - It had a strong standing army

The community is **likely** to be

- The Nyamwezi
- The Abawanga
- The Baganda
- The Hehe

15. Below are statements about a certain mineral mined in Kenya:
- It is white in appearance
  - It is used as a water filter
  - It is mined on the floor of the Rift valley

The mineral described above is **likely** to be

- limestone
- flourspar
- soda ash
- diatomite

16. Who among the following serves as the secretary to the school staff meeting?
- Headteacher
  - Deputy headteacher
  - District Education Officer
  - Senior teacher

17. The following statements describe a certain climatic region in Africa:
- Hot and wet throughout the year
  - Trees form an extensive canopy
  - Little or no undergrowth
  - The diurnal temperature range is  $2^{\circ}\text{C}$

Which crop can grow **best** in such climate?

- Pyrethrum
- Coffee
- Cocoa
- Sisal

18. The **main** reason for the formation of Inter-Governmental Authority on Development (IGAD) was
- to promote peace and security
  - to irrigate the desert
  - to promote trade
  - to eradicate poverty

19. Below are statements about a certain river in Africa:

- It passes through a desert
- It has a delta
- Its source is a fresh water lake

The river described above is

- River Niger
- River Tana
- River Nile
- River Zambezi

20. Which of the following countries is **wrongly** matched with its colonial power before 1919?
- Namibia - Britain
  - Cameroon - Germany
  - Mozambique - Portugal
  - Libya - Italy

21. The following statements refer to an early visitor to Eastern Africa:

- Founded the British East African Company
- His company got authority from the British government to administer Kenya and Uganda in 1888
- He owned the British Indian Steam Navigation Company

Who among the following early visitors to Eastern Africa is described above?

- Sayyid Said
- Dr. David Livingstone
- Carl Peters
- William Macknon

22. The **main** reason for establishing Kariba dam was to
- provide water for irrigation
  - produce hydro-electric power
  - improve water transport
  - provide more fishing grounds
23. Which one of the following pre-historic sites in Eastern Africa is **correctly** matched with the country where it is located?
- | Pre-historic site | Country  |
|-------------------|----------|
| A. Koobi Fora     | Uganda   |
| B. Hadar          | Kenya    |
| C. Olduvai Gorge  | Tanzania |
| D. Ishango        | Ethiopia |
24. Below are some modern means of communication:
- Newspapers
  - Telephone
  - Television
  - Radio
- Which combination is made up of electronic means of communication?
- (ii), (iii), (iv)
  - (I), (ii), (iv)
  - (I), (iii), (iv)
  - (I), (ii), (iii)
25. Who among the following reacted to the colonial administration in the same way?
- Koitalel Arap Samoei and Nabongo Mumia
  - Mekatilili wa Menza and Koitalel Arap Samoei
  - Waiyaki wa Hinga and Mekatilili wa Menza
  - Lelana and Koitalel Arap Samoei
26. The main problem facing young people in Murang'a and Coastal region of Kenya is drug abuse. How **best** can this be controlled?
- Banning importation of drugs in those areas
  - Giving stiff punishment to drug traffickers
  - Creating public awareness on the dangers of drugs
  - Reporting such cases to the police
27. Three of the following are symbols of National Unity **except**
- the National flag
  - the National anthem
  - the Presidency
  - the Public seal

28. Which one of the following West African Communities belong to the same language group?
- Mossi, Gurma, Dagomba
  - Mande, Fulani, Tuaregs
  - Akyem, Zarma, Yoruba
  - Dendi, Bambara, Tukolor

Use the table below to answer questions 29 and 30

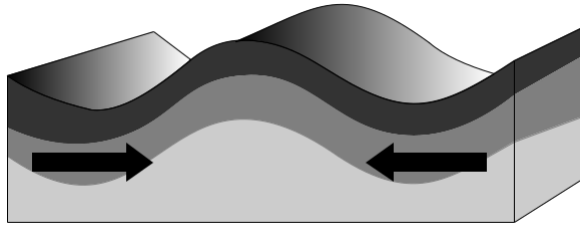
	J	F	M	A	M	J	J	A	S	O	N	D
Temp	12	13	15	16	19	23	25	26	24	20	17	14
Rainfall in mm	150	81	87	60	30	12	-	-	25	75	110	140

29. Which statement is **true** about the station represented in the table above?
- It receives more than 350mm of rainfall annually
  - It is cold throughout the year
  - It has two rainy seasons
  - It is hot and wet throughout the year
30. The climatic region represented by the table above is **likely** to be
- equatorial
  - mediterranean
  - savannah
  - temperate
31. Which one of the following philosophies has **mainly** enabled Kenyans to further their education abroad, build hospitals and other community projects?
- Nyayoism
  - Harambee
  - African Socialism
  - Working nation
32. Below are statements describing a language group found in Eastern Africa:
- They migrated from Cameroon
  - They settled at Shungwaya
  - They later settled along river Tana
  - Their occupation is mainly agriculture

The language group described above are the

- Cushites
- Bantus
- Nilotes
- Arabs

Use the diagram below to answer question 33



33. Which pair of mountains have been formed through the above process?
- Ruwenzori and Usambara
  - Atlas and Longonot
  - Atlas and Drankesburg
  - Cape ranges and Pare
34. Which one of the following shows the **correct** order of the evolution of man?
- Ramapithecus, Homo Sapiens, Homo Habilis
  - Homo Habilis, Ramapithecus, Homo Sapiens
  - Ramapithecus, Homo Erectus, Homo Sapiens
  - Homo Sapiens, Homo Erectus, Ramapithecus

35. Below is a description of a town in Eastern Africa:

- It is the headquarters of a continental organisation
- It was founded and named by one leader as the 'new flower'
- It is the capital city of a country
- It is located in the central part of the country

The town described above is **likely** to be

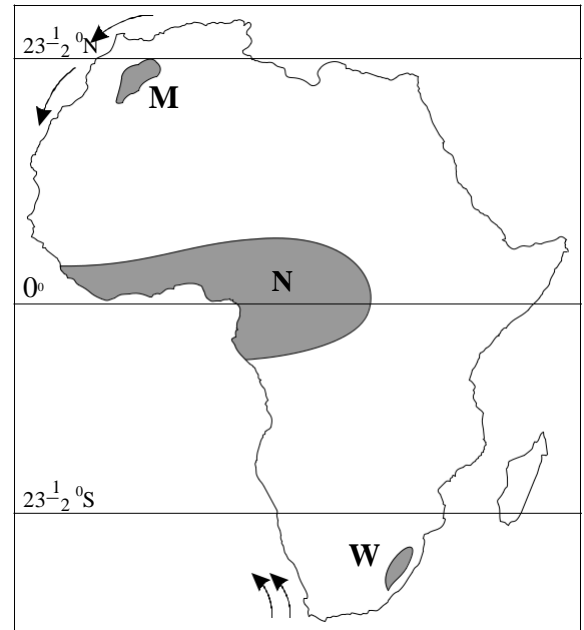
- Addis Ababa
  - Dodoma
  - Dar es Salaam
  - Arusha
36. The constitution of Kenya acknowledges three forms of marriages:
- Religious
  - Civil
  - Customary

Which one of the following is presided over by elders following the beliefs and practices of African culture?

- (i) only
- (iii) only
- (i) and (iii)
- (ii) only

37. The road that connects Eastern Africa and West Africa and runs from Mombasa to Lagos is called
- The Great Super Highway
  - The Trans-African Highway
  - The Trans-Sahara Highway
  - The Lagos-Mombasa Highway

Study the map below and answer questions 38 to 40.



38. The sun is overhead on the latitude marked  $23\frac{1}{2}^{\circ}\text{N}$  in the month of
- December
  - September
  - June
  - March
39. The physical feature marked **M** was formed as a result of
- faulting
  - volcanicity
  - erosion
  - folding
40. The climate of the region marked **N** has all the following characteristics **except**
- it receives relief rainfall
  - it has a hot and wet climate
  - it has a temperature range of  $20^{\circ}\text{C}$
  - it has two rainfall seasons.
41. Which one of the following minerals is **correctly** matched with the method of mining?
- Copper** - dredging method
  - Flourspar** - drilling method
  - Gold** - deep shaft method
  - Oil** - open cast method

42. The first thing a person should do for a victim who has been involved in an accident is
- give the victim first aid
  - ensure the victim is not exposed to any danger
  - call the police
  - scream for help

43. Study at the following road signs:



X



Y



Z

Which one of the following choices **correctly** state what they mean?

X	Y	Z
A. No entry	Danger ahead	Hospital
B. No parking	Danger ahead	Hospital
C. No through way	No entry	Hospital
D. No entry	No parking	Hospital

44. Which one of the following statements about the population of Kenya, India and Germany is **not** true?
- India has the lowest population density
  - Kenya has the highest total population
  - Germany's population is evenly distributed
  - The population distribution of the three countries is not evenly distributed

45. The court that deals with cases of minors (below 18 years) only is the
- High court
  - Juvenile court
  - Kadhis court
  - District Magistrates court

46. Which one of the following organizations is **correctly** matched with its headquarters?

Organization	Headquarters
A. IGAD	Djibouti
B. EAC	Kampala
C. COMESA	Harare
D. SADC	Kinshasa

47. What fraction of members of the National Assembly are allowed by law to pass a constitutional amendment?
- a half
  - three quarters
  - three halves
  - two thirds

48. The following are description of a certain way of resolving a conflict in a society:
- Involves a third party*
  - The third party does not make decision on behalf of the parties involved*
  - The third party may offer possible solution to end the conflict*

The method described above is

- arbitration
- reconciliation
- mediation
- negotiation

49. Which one of the following tourist attractions is **wrongly** matched with where it is found?

Tourist attraction	Country
A. Kruger National Park	South Africa
B. Victoria Falls	Uganda
C. Hwango National Park	Zimbabwe
D. Berber Villages	Morocco

50. Below are some events that took place in Kenya:
- Kenya became a multi party state*
  - Daniel arap Moi retired from presidency*
  - Oginga Odinga died*
  - Kenya became a British colony*

Which is the **correct** order of events from the first to the last?

- (i), (ii), (iv), (iii)
- (iv), (i), (iii), (ii)
- (i), (iv), (ii), (iii)
- (iii), (ii), (iv), (i)

51. Which one of the following soil types is **correctly** matched with crops best suited for it?

Soil type	Recommended crop
A. Sandy	Barley, bananas, wheat
B. Loam	Cashewnuts, coffee, sisal
C. Black cotton	Cassava, coconuts, mangoes
D. Volcanic	Bananas, potatoes, tea

52. Three of the following are functions of the judiciary in Kenya. Which one is **not**?
- To implement the policies of the government
  - To interpret the constitution
  - To administer justice through the court system
  - To resolve disputes through legal processes





53. Which one of the following institutions in Kenya has the responsibility to protect the country from terrorist activities?
- Anti-Terrorism Unit
  - Criminal Investigation Department
  - Interpol
  - Kenya Police
54. Three of the following are duties of the president of the republic of Kenya. Which one is **not**?
- Exercise the prerogative of mercy
  - Assenting to bills to become law
  - Dissolving both the senate and the National assembly
  - Appointing senior government officials after being approved by the National assembly
55. Which one of the following is **true** about the judges in Kenya?
- Judges are appointed by the chief justice
  - Judges are appointed by the president without consultation
  - Judges are appointed by the president with recommendations from the Judicial Service Commission
  - Judges are appointed by the Attorney General
56. Which one of the following is not an importance of the Kenyan constitution?
- It outlines the national goals thus promotes harmony
  - It outlines procedures to be followed when electing the leaders of our country
  - It protects the rights and freedoms of the citizens through the bill of rights
  - It allows the ruling party to have the majority say in government all the time
57. Which one of the following is **not** a similarity between the government of Kenya and Swaziland?
- Both have a bicameral system of parliament
  - Both leaders are in-charge of the armed forces
  - Both leaders appoint senior government officials
  - Both countries are democratic.
58. Abdul moved out of his country Somalia, following an outbreak of civil war to settle in Kenya. Which U.N agency received him?
- World Food Programme
  - United Nation High Commission for Refugees
  - United Nation Development Programme
  - World Health Organisation
59. All the following are true about a commissioner of the IEBC **except**
- a commissioner should not be a civil servant
  - a commissioner's name is forwarded to the president for appointment
  - a commissioner can hold any other public office except in the civil service
  - a commissioner's name must be approved by the National Assembly
60. The following are requirements for a person who wants to vie for a post of a Senator **except** one. Which one?
- The person must be a Kenyan citizen.
  - The person must be appointed by a registered political party.
  - The person must be a registered voter.
  - The person should be of sound mind.

**PART II: RELIGIOUS EDUCATION**  
**SECTION I**  
**CHRISTIAN RELIGIOUS EDUCATION**

- 61.** Human beings are described as special according to the Genesis stories of creation **mainly** because
- A. God breathed life into them
  - B. they were created from soil
  - C. they were in charge of creation
  - D. they were created in God's own image
- 62.** Three of the following statements about Abraham are true **except**
- A. Abraham had a wife called Keturah
  - B. Abraham sacrificed his son Isaac
  - C. Abraham had a brother called Haran
  - D. Abraham died at the of 175 years
- 63.** Jacob worked for 14 years to get Rachael. He showed
- A. that he loved his uncle Laban
  - B. that he loved Rachael more than Leah
  - C. that love, patience and tolerance
  - D. that he was very hardworking
- 64.** "Lift your stick and hold it out over the sea. The water will divide and the Israelites will be able to walk through the sea on dry ground." This happened when the Israelites
- A. were in the desert
  - B. were crossing the Red sea
  - C. were crossing the dead sea
  - D. were crossing river Jordan
- 65.** Which one of these commandments teaches Christians to practise justice, fairness and honesty?
- A. Do not covet your neighbour's property
  - B. Do not accuse anyone falsely
  - C. Respect your father and mother
  - D. Do not steal
- 66.** The Israelites judge who fought for Israelites against the Philistines was
- A. Jephthah
  - B. Gideon
  - C. Shamgar
  - D. Samson
- 67.** One of the following kings consulted a witch and requested that she brings a prophet of God back to life. Who?
- A. King Solomon
  - B. King Saul
  - C. King David
  - D. King Ahab
- 68.** The **main** achievement of king David was
- A. building a temple in Jerusalem
  - B. killing Goliath
  - C. fighting back against idol worship in Israel
  - D. bringing the ark of the covenant to Jerusalem
- 69.** Luke 9:29-30, "As he was praying, the appearance of his face changed, and his clothes became as bright as a flash of lightning. Two men appeared in glorious splendor." Who were these two men?
- A. Moses and Elisha
  - B. Elijah and Elisha
  - C. Moses and Gabriel
  - D. Moses and Elijah
- 70.** Why was John the Baptist put in prison?
- A. He condemned the sins of King Herod
  - B. He baptised people on the Sabbath
  - C. He referred to Jesus as the lamb of God
  - D. He prepared the non-Jews for the coming of Jesus
- 71.** In which one of the following places was John the baptist preaching?
- A. In the hills of Hebron
  - B. In the town of Jerusalem
  - C. In Galilee
  - D. In the desert
- 72.** When Jesus was twelve years old, He went with his parents to Jerusalem for the feast of
- A. tabernacles
  - B. weeks
  - C. unleavened bread
  - D. dedication
- 73.** Happy are those who hunger and thirst for righteousness for
- A. they will see God
  - B. God will satisfy them fully
  - C. God will call them his children
  - D. the kingdom of heaven belongs to them
- 74.** The parable of the 'man who hired workers' at different times shows God's
- A. mercy towards sinners
  - B. love for all his people
  - C. faithfulness to his promises
  - D. unfairness to early workers
- 75.** Jesus taught his disciples and said, when you pray say "Our father..." Which of the following is **not** an element of prayer?
- A. Adoration
  - B. Thanksgiving
  - C. Supplication
  - D. Humbling ourselves

76. In a Synagogue in Nazareth they dragged Jesus Christ out and wanted to throw him over the cliff. What had Jesus done to amount to this?
- He said that he was the Messiah
  - He healed a man on a Sabbath
  - He said that the Holy Spirit was upon him
  - He allowed a woman to wash his feet
77. On the day of Pentecost, the Holy spirit came down in the form of
- a cloud
  - a dove
  - a fire
  - water
78. Which one of the following events took place in Joppa during the Apostolic times?
- A cripple was made to walk
  - Jesus was taken to heaven
  - A lady was brought back to life
  - The Jews rejected Jesus
79. Which one of the following activities by the early church **best** shows that their members lived in unity?
- Singing praises
  - Sharing food
  - Baptising one another
  - Reciting the scriptures
80. The following are fruits of the Holy Spirit **except**
- joy
  - peace
  - faith
  - faithfulness
81. What do we learn about God from the Apostle's Creed and Lord's prayer? God is
- the creator
  - our father
  - almighty
  - merciful
82. The Traditional Religious Practice that is similar to the Christian Holy communion is
- dancing during worship
  - eating food together
  - male circumcision
  - tattooing the body
83. Which one of the following is done by people during worship in Traditional African Religion?
- Reading the scriptures
  - Sharing meals
  - Reciting the Lord's prayer
  - Baptising converts
84. Which one of the following statements is **true** about Traditional African Religious beliefs concerning ancestors?
- Ancestors marry in the spirit
  - Ancestors affect those who are alive
  - Ancestors cause the living to dream
  - Ancestors are our relatives who died while young
85. Which one of the following **best** shows how Christians are helping to reduce the spread of HIV/AIDS?
- Being role models
  - Providing drugs
  - Teaching on behaviour change
  - Counselling the sick
86. The **best** way christians can show concern for others is by
- assisting the needy
  - visiting each other regularly
  - holding prayer meetings
  - going to church always
87. Sexual misuse is discouraged in the society in Christianity today **mainly** because
- it can lead to unwanted pregnancies
  - it causes shame in the society
  - our bodies are holy before God
  - it encourages prostitution
88. The **best** thing to do when you find out that your watchman is illiterate is
- laugh at him
  - stop talking to him
  - teach him how to read and write
  - tell your parents
89. Many young people in our country are getting trapped in a social evil that has become a **major** concern for the entire society. Which social evil is this?
- Drug abuse
  - Rape
  - Corruption
  - Malnutrition
90. Which one of the following is the **main** reason why Christians condemn sexual misuse in the society? It
- is a sin condemned in the bible
  - defiles the human body and spirit
  - encourages immorality and sexually transmitted infections
  - leads to early pregnancies and divorce in the society

**SECTION II**  
**ISLAMIC RELIGIOUS EDUCATION**

61. In which of the following *Surahs* is man said to be ungrateful and in love with money?  
A. *Al-Nasr*  
B. *Al- Maun*  
C. *Al- Qadar*  
D. *Al- Inshirah*
62. Which one of the following is a teaching from *Surah Tiin*?  
A. Victory comes from Allah  
B. Muslims should help the poor  
C. Man was created in the best form  
D. Allah is the creator of the universe
63. “*Wamaadarak maahiyya*”  
The above verse is taken from *Surah*  
A. *Al- Qariah*  
B. *Al- Zilzala*  
C. *Al- Takathur*  
D. *Al- Kaafirun*
64. According to Quran verse, “Say God is one” warns Muslims about  
A. wearing of charms  
B. greeting witchdoctors  
C. disrespecting their teachers  
D. seeking treatment from herbalists
65. The *Surah* which **best** explains the events of the Day of Judgement is  
A. *Al- Alaq*  
B. *Al- Ikhlas*  
C. *Al- Lahab*  
D. *Al- Zilzala*
66. The prophet (P.b.u.h) said, “Fear Allah wherever you are and follow up a bad deed with a good one and it will wipe it out and behave well towards people.” The *Hadith* is on  
A. *Sabr*  
B. *Shukr*  
C. *Taqwa*  
D. *Tawheed*
67. “Whoever performs hajj and commits no evil returns home free from sins like...” Which one of the following statements completes the quoted *Hadith* of the prophet (P.b.u.h)?  
A. Martyr  
B. Prophet  
C. Angel Jibril  
D. Newly born baby
68. According to the teachings of the prophet (P.b.u.h), the **best** thing to use when breaking fast is  
A. milk  
B. fruit  
C. water  
D. dates
69. Which part of the body is common in both *Wudhu* and *Tayammum*?  
A. Face and legs  
B. Arms and face  
C. Mouth and legs  
D. Ears and forehead
70. Which one of the following is **not** a ritual of *Hajj*?  
A. Staying at Mina  
B. Wearing the *Ihram*  
C. Stoning the *Jamarat*  
D. Visiting *Bait-ul-Maqdis*
71. Which one of the following pillars of Islam encourages sharing with others?  
A. Hajj  
B. Salat  
C. Zakat  
D. Shahada
72. Which among the following is the **correct** order of performing the postures of *salat*?  
A. Rukuu, Sujud, Tashahud, Takbiratul, Ihram  
B. Takbiratul, Ihram, Rukuu, Sujud, Tashahud  
C. Sujud, Takbiratul, Ihram, Tashahud, Rukuu  
D. Sujud, Tashahud, Rukuu, Ihram, Takbiratul
73. The attribute of Allah, “*Al-Khaaliq,*” means  
A. the giver  
B. the designer  
C. the creator  
D. the provider
74. The prophet who was commanded by Allah to remove his shoes had a brother called  
A. Issa  
B. Musa  
C. Harun  
D. Yusuf
75. Which one of the following is not a name of an angel?  
A. Idris  
B. Israfil  
C. Malik  
D. Ridhwan

76. Which of the following is the 4<sup>th</sup> pillar of Imaan?  
 A. Belief in angels  
 B. Belief in books  
 C. Belief in ceadar  
 D. Belief in prophet
77. Which one of the following is an unlawful source of earning a living?  
 A. Working in a hotel  
 B. Selling foreign currency  
 C. Working as a tour guide  
 D. Lending money with interest
78. The pupils of Bahari primary school wish to elect their school president. Which among the following is the **best** quality they should consider?  
 A. Forgiveness  
 B. Patience  
 C. Honesty  
 D. Kindness
79. The **best** way to show love to our neighbours is by  
 A. giving them gifts  
 B. visiting them often  
 C. sharing our happy and hard time together  
 D. talking to them politely each time
80. Muslims can **best** prevent HIV and AIDS by  
 A. using condoms  
 B. being faithful  
 C. avoiding marriages  
 D. marrying many wives
81. Which is the **main** reason why Islam discourages use of alcohol as a form of intoxicant?  
 A. It breaks families  
 B. It leads to other vices  
 C. It is a waste of money  
 D. It is a command from Allah
82. Hanaan, a standard seven pupil saw his classmate stealing some money. Which among the following actions was **best** for Hanaan to have taken?  
 A. Run away from him  
 B. Advise him to stop stealing  
 C. Pretend that he did not see him  
 D. Tell other pupils about him
83. The **main** lesson that Muslims learnt from the battle of Uhud was that  
 A. they should not loose courage  
 B. war at times is not a good thing  
 C. they should obey the prophet's orders  
 D. they should protect the prophet in the war
84. When prophet (P.b.u.h) woke up, lady Khadija took him to her cousin to inform him about the story of her husband. The cousin was called  
 A. Abubakar Siddik  
 B. Khalid bin Walid  
 C. Uthman bin Affan  
 D. Waraqah bin Nawfal
85. The **main** reason why King Najash of Abyssinia is remembered in the history of Islam is due to  
 A. his kind invitation to the prophet  
 B. his desire to be converted to Islam  
 C. his willingness to save Muslims  
 D. the loyalty he showed to the prophet
86. The caliph who wrote the treaty of Hudaibiyya was  
 A. Alibin Abu Talib  
 B. Uthman bin Affan  
 C. Abubakar Assidiq  
 D. Umar bin Khattab
87. Which of the following months is **not** regarded as *Ash-Hurul-Hurum*?  
 A. *Rajab*  
 B. *Muharram*  
 C. *Ramadhan*  
 D. *Dhul-Hijja*
88. Muslims observe *Ashura* as an Islamic celebration **mainly** to remember three of the following except  
 A. Nabii Musa rescue from Firaun  
 B. The martyrdom of the prophet's (P.b.u.h) grandson  
 C. The death of prophet (P.b.u.h)  
 D. The landing of Nuh's ark on Jabal Judy
89. The queen who worshipped the sun during the time of *Nabii* Suleiman was  
 A. Hindu  
 B. Balqis  
 C. Rabtah  
 D. Ummul Jamil
90. The **best** way to attract people to Islam is by  
 A. teaching them Islam to protect them for terrorists  
 B. living good lives to be emulated  
 C. inviting them to the mosque  
 D. welcoming them to Islamic ceremonies