

GRADE 4 HOLIDAY HOMEWORK

MATHEMATICS TERM 2, 2020

EXERCISE 1

1. What is the place value of 7 in

(a). 470

(b). 7583

2. What is the total value of 9 in 5932?

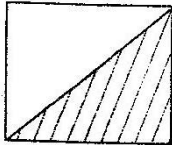
3. Round off the numbers to the nearest

10

(a). 46

(b). 984

4. The shaded fraction is



5. Match the Hindu arabic number with

Roman number

Hindu Arabic

Roman Number

6

v

3

ix

9

iii

5

vi

2

ii

6. Work out

(a). $4 + 9 =$

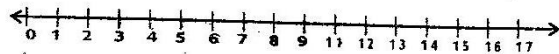
(b). $4 \times 4 =$

(c). $5 \times 10 =$

(d). $16 - 9 =$

(e). $27 \div 3 =$

7. Add on a number line



$-4 + 4 + 6 =$

8. Bode had 68 chickens. He bought 23 chickens. How many chickens did he have?

9. How many days are there in 4 weeks?

10. $6 \times 3 =$

Fill in

1. 6, 8, 10, 12, _____

2. 82, 80, 78, 76, _____

3. Arrange from the largest to the smallest
936, 639, 369, 469

_____, _____, _____, _____

4. What is the place value of 4

46 _____

437 _____

24 _____

Add

5. $431 + 62 =$

6. $340 + 575 =$

7. $5398 + 7$

Subtract

8. $187 - 54 =$

9. $746 - 27 =$

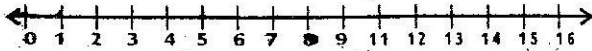
10. $1490 - 500 =$

1. Draw the following shapes.

Triangle

Oval

2. Subtract on a number line



$$15 - 9 =$$

Work out

3. 496

$$+ 902$$

4. 417

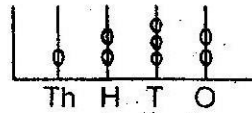
$$- 218$$

Complete the pattern

5. $198, 196, 194, \underline{\hspace{1cm}}, \underline{\hspace{1cm}}$


6. $6, 12, 18, \underline{\hspace{1cm}}, \underline{\hspace{1cm}}$

7. Write the number in the abacus




What is the time


8.



9.



10.



1. Bio had 418 seedlings. He sold 149 seedling how many remained?

Work out

2. $\frac{1}{2}$ of 30 _____

3. $\frac{1}{2}$ of 10 _____

4. $\frac{1}{4}$ of 40 _____

5. $\frac{1}{5}$ of 25 _____

Which numbers can be multiplied by 12?

6. _____ x _____ = 12

7. _____ x _____ = 12

8. _____ x _____ = 12

9. _____ x _____ = 12

10. _____ x _____ = 12

Which numbers can be multiplied by 20?

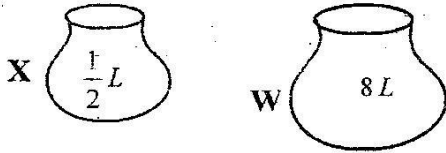
a. _____ x _____ = 20

b. _____ x _____ = 20

c. _____ x _____ = 20

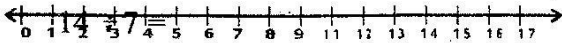
EXERCISE 5

1. How many container X can fill container W?
W? _____



2. Write 1996 in words.

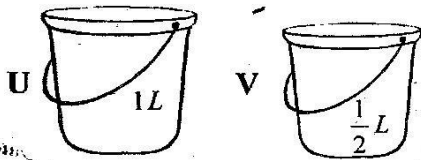
3. Divide on a numberline



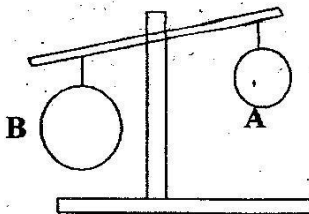
4. Complete the pattern

1, 3, 5, 7, _____




5. Which one holds more? _____



6. Which one is lighter _____



Name the shapes.



10. Elisa was sent to the shop to buy 20 eggs. On the way, 7 eggs broke. How many eggs remained?

Parent's / Guardian's signature
Benchmark Holiday Assignment

Date:

EXERCISE 6

Round off the number to the nearest 10

1. 415, _____

2. 6591, _____

3. Write the next multiple of nine.

9, 18, 27, _____, _____

4. $17 + 6 + 5 =$

5. $15 + 2 + 4 =$

Write the number in figure or in words

6. 97

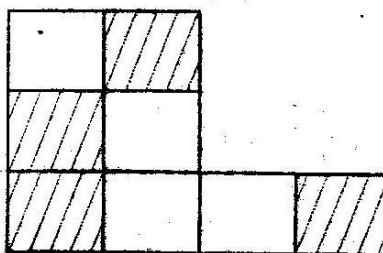
7. 402

8. Ninety eight

9. Four hundred and thirty

10. Six hundred and twenty

11. What fraction is not shaded

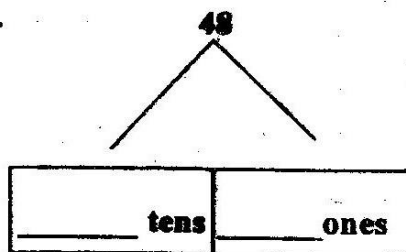


12. Write the next two multiples of nine

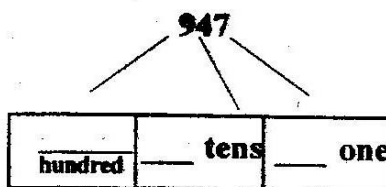
9, 18, 27, _____, _____

Place value

13.



14.



15. 7 hundred 6 tens 4 ones =

Parent's / Guardian's signature
Benchmark Holiday Assignment

Date:

Pg.6

GRADE 4

EXERCISE 7

1. **Fill in**

35, _____, _____, 50 _____

2. Judy had 541 marbles. Her friend gave her 69 more marbles. How many did she have altogether? _____

3. $5 \times 4 \times 2 =$ _____

4. How many tens are there in digit 2 number? 1524 _____

5. Write Three thousand one hundred and thirty in symbols? _____

6. Which is the third day of the week?

7. $742m - 64m =$ _____

8. What is $\frac{1}{2}$ of 24? _____

9. Share 20 mangoes among 4 pupils. Each pupil will get _____ mangoes.

10. How many days are there in 2 weeks?

EXERCISE 8

1. Write the following numbers in Hindu Arabic numerals

(a). VII _____

(b). IX _____

(c). III _____

(d). IV _____

(e). X _____

(f). VI _____

2. Add by breaking apart

$$8 + 5 =$$

$$8 + \square + \square =$$

3. Subtract by breaking apart

$$9 - 6 =$$

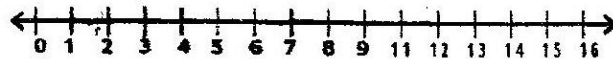
$$9 - \square - \square =$$

4. $37 - \square = 18$

5. Luke had 76 oranges. Mark gave him 16 oranges. How many oranges did he have altogether? _____

6. James had 29 pebbles. She collected 30 pebbles. How many pebbles did she have altogether? _____

7. Add on a numberline



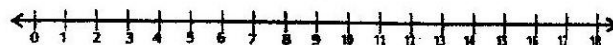
$$8 + 5 + 3 =$$

8. Subtract on a numberline



$$-14 - 9 =$$

9. Divide on a numberline



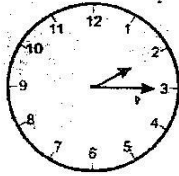
$$18 \div 9 =$$

10. 1 shillings = 100 cts

2 shillings = _____ cts.

EXERCISE 9

1. What time is it?



2. A school has 650 learners. If 312 of them are boys. How many girls are there? _____

3. Which one is heavier?
3kgs of stone or 3kgs of feathers

4. $7 + 7 + 7 =$

5. House, laptop, food, clothes, car, sweets and bike.

From the above list

(a). Three wants

(b). Three basic needs

Use the price list below to answer the following questions.

Bread Sh.50, Honey sh.150,

Milk sh.100

6. How much will I pay for bread?

7. Joy bought all the items. How much did she pay? _____

8. If she had sh.500. How much balance did she pay? _____

Work out

9. $25 \div 5 =$

10. $18 \div 3 =$

1. $96 \times 6 =$

2. $\frac{1}{2} + \frac{2}{7} =$

3. $1000\text{cm} + 10\text{cm} =$

4. Which number is the biggest?

2305, 2503, 2035, 2053


5. How many days are there in January?

6. Arrange the following numbers in ascending order.

(a). 212, 122, 202, 220, 221

(b). 168, 128, 188, 148, 138

7. Order the object




Table



Watch



Ball



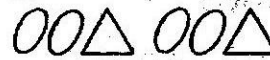
Pot

(a). Pot is in the _____ position.

(b). _____ is in the second position

Complete the pattern

8.



9.




10. Shade the given fraction on each of the following figures

(a). $\frac{2}{5}$



(b). $\frac{5}{12}$ (b).



Match the number symbols with word.

1. 78 One thousand and one
 2. 887 Seventy eight
 3. 1001 One hundred and one
 4. 101 Eight hundred and eighty seven
5. Paul had 1498 bags of maize. He sold 498 bags of maize. How many remained?

6. There are 2865 exercise books in a school store, the pupils were given 2460.
How many books remained? _____
7. Fill in the addition table

+	1	2	3	4	5
1					
2					
3					
4					

Write in figures.

8. Two hundred and seventy _____
9. One thousand four hundred and eight _____
10. Five thousand three hundred and ninety eight _____